

Study & Master

Geography

CAPS



Teacher's Guide

Grade

11

Helen Collett • Cheryl Williams
Norma Winearls • Caron Olivier

Study & Master

Geography

Grade 11 Teacher's Guide

Helen Collett • Cheryl Williams • Norma Winearls • Caron Olivier



CAMBRIDGE
UNIVERSITY PRESS

CAMBRIDGE UNIVERSITY PRESS
Cambridge, New York, Melbourne, Madrid, Cape Town,
Singapore, São Paulo, Delhi, Mexico City

Cambridge University Press
The Water Club, Beach Road, Granger Bay, Cape Town 8005, South Africa

www.cup.co.za

© Cambridge University Press 2012

This publication is in copyright. Subject to statutory exception
and to the provisions of relevant collective licensing agreements,
no reproduction of any part may take place without the written
permission of Cambridge University Press.

First published 2012

ISBN 978-1-107-3815-6

Editor: Barbara Hutton
Typesetter: Brink Publishing & Design
Illustrator: Susan Abraham

.....
Acknowledgements

Photographs: Afripics: p. 246; Gallo Images/Getty Images: p. 223
Maps: Chief Directorate: National Geo-spatial Information; Department of Rural
Development & Land Reform: pp. 219, 231, 259, 260, 282–287

.....
Cambridge University Press has no responsibility for the persistence or
accuracy of URLs for external or third-party internet websites referred to in
this publication, and does not guarantee that any content on such websites is,
or will remain, accurate or appropriate. Information regarding prices, travel
timetables and other factual information given in this work are correct at
the time of first printing but Cambridge University Press does not guarantee
the accuracy of such information thereafter.

.....
NOTICE TO TEACHERS

The photocopy masters in this publication may be photocopied or
distributed [electronically] free of charge for classroom use within the
school or institution which purchases the publication. Worksheets and
copies of them remain in the copyright of Cambridge University Press
and such copies may not be distributed or used in any way outside the
purchasing institution.

.....
Every effort has been made to trace the copyright holders. Should any infringement have
occurred, please inform the publishers who will correct these in the event of a reprint.

.....
If you want to know more about this book or any other Cambridge University Press
publication, phone us at +27 21 4127800, fax us at +27 21 419-8418 or send an e-mail to
capedtown@cambridge.org

Contents

1. Introduction	1
2. Lesson-by-lesson	17
Module 1: The atmosphere: Geographical knowledge	19
Unit 1: The Earth's energy balance	20
Unit 2: Global air circulation	26
Unit 3: Africa's weather and climate	34
Unit 4: Droughts and desertification	43
Fieldwork 1	49
Assessment Task 1: The atmosphere	49
Module 2: The atmosphere: Geographical skills and techniques	50
Unit 1: Aerial photographs and orthophoto maps	51
Unit 2: Geographical and Information Systems (GIS)	54
Review: Term 1	58
Module 3: Geomorphology: Geographical knowledge	61
Unit 1: Topography associated with horizontally layered rocks	62
Unit 2: Topography associated with inclined/tilted rock strata	67
Unit 3: Topography associated with massive igneous rocks	72
Unit 4: Slopes	75
Unit 5: Mass movements and human responses	80
Module 4: Geomorphology: Geographical skills and techniques	85
Unit 1: Topographic maps	86
Unit 2: Geographical and Information Systems (GIS)	90
Unit 3: Fieldwork	93
Assessment Task 2: Geomorphology	95
Review: Term 2	95
Module 5: Development geography: Geographical knowledge	99
Unit 1: The concept of development	100
Unit 2: Frameworks for development	108
Unit 3: Trade and development	117
Unit 4: Development issues and challenges	123
Unit 5: The role of development aid	126
Fieldwork 2	130
Module 6: Development geography: Geographical skills and techniques	131
Unit 1: Mapworks skills	132
Unit 2: Using atlases	136
Review: Term 3	138

Contents

Module 7: Resources and sustainability: Geographical knowledge	140
Unit 1: Using resources	141
Unit 2: Soil and soil erosion	145
Unit 3: Conventional energy resources and their impact on the environment	150
Unit 4: Non-conventional energy sources	159
Unit 5: Energy management in South Africa	165
Fieldwork 3	168
Assessment Task 3: Resources and sustainability	169
Module 8: Resources and sustainability: Geographical skills and techniques	170
Unit 1: Topographic maps	171
Unit 2: Geographical and Information Systems	175
Review: Term 4	178
Examination preparation	181
3. Formal assessment	189
4. Resources	267
5. Documents	335

1. INTRODUCTION

1. Curriculum and Assessment Policy Statement (CAPS)	2
2. Geography as a subject	2
3. How <i>Study & Master Geography Grade 11</i> works	4
4. Grade 11 Year Plan	6



1. Curriculum and Assessment Policy Statement (CAPS)

A single Curriculum and Assessment Policy Statement (CAPS) exists for each school subject. The CAPS for each subject details the minimum outcomes and standards of the learning process as well as assessment processes and procedures.

For more information on the CAPS, please see Section 1 of the CAPS document for Geography.

2. Geography as a subject

Aims

Geography is an elective subject that focuses on the study of the human and the physical environments. There are different branches of Geography (for example, Physical Geography and Human Geography) but they all focus on the concept of space in a continuously changing environment.

Geography in Grades 10 to 12 seeks to develop the following knowledge, skills and attitudes in the learners:

- explaining and interpreting both physical and human geographical processes
- describing and explaining the dynamic interrelationship between the physical and human worlds
- developing knowledge about where places are and the nature of a range of different places at different scales
- practising essential transferable skills – literacy, numeracy, oracy, graphicacy
- promoting the use of new technologies, such as Information Communication Technology (ICT) and Geographical and Information Systems (GIS)
- developing a commitment towards sustainable development
- creating awareness and sensitivity for inequality in the world
- fostering empathy, tolerance and fairness
- making and justifying informed decisions and judgements about social and environmental issues.

Geography topics

The topics in the Geography CAPS (Grades 10–12) can be explored by focusing on the ‘big ideas’ of place, spatial processes, spatial distribution patterns, and the interaction between the human and natural environment. These, coupled with the posing of key questions, provide a launching pad for geographical explorations and investigations.

The chart below shows the methods of enquiry used in Geography, together with key questions asked, and the concepts explored and investigated.

METHOD OF ENQUIRY	KEY QUESTIONS	CONCEPTS
Observation	What is it? What is it like? Who or what is affected?	physical and human processes, awareness, perception, characteristics, similarities and differences

METHOD OF ENQUIRY	KEY QUESTIONS	CONCEPTS
Description	Where does it occur? Why is it there?	location, place, region, space, distribution, pattern, scale, spatial association
Analysis and explanation	What happened or is happening? Why did it happen? How is it changing?	interdependence, causes and processes
Evaluation and prediction	What are the effects? What is likely to happen?	environmental impact, social impact, interdependence, spatial interaction, spatial organisation, human–environment interaction, cause, process, time, behaviour, consequence, justice, quality of life, environmental quality, welfare, costs and benefits

Geographical knowledge, skills and techniques should be taught in an integrated way in each of the following topics in Grade 11:

- The atmosphere (Term 1)
- Geomorphology (Term 2)
- Development geography (Term 3)
- Resources and sustainability (Term 4).

For more information on Geography as a subject, please see Section 2 of the CAPS document.

Time allocation

Geography is allocated four hours of teaching time per week in Grades 10 to 12. Revision, consolidation and assessment (formal and informal) are included in this allocation. It is recommended that in addition to this, six hours of fieldwork be undertaken by the learners. Most of this will need to be completed outside of lesson time.

The topics are weighted differently in terms of time allocation. This weighting should not be seen as a statement about the relative importance of the topics since each is equally important. In Grade 11 the topics are weighted as shown on the table on the next page.

Topic	Focus	Time allocation	Term
The atmosphere	Geographical knowledge	28 hours	Term 1
	Geographical skills and techniques	6 hours	
	Assessment and consolidation	2 hours	
Geomorphology	Geographical knowledge	20 hours	Term 2
	Geographical skills and techniques	10 hours	
	Assessment and consolidation	6 hours	
Development geography	Geographical knowledge	27 hours	Term 3
	Geographical skills and techniques	5 hours	
	Assessment and consolidation	4 hours	
Resources and sustainability	Geographical knowledge	20 hours	Term 4
	Geographical skills and techniques	4 hours	
	Assessment and consolidation	2 hours	

3. How *Study & Master Geography Grade 11* works

Course components

Study & Master Geography Grade 11 consists of a:

- Learner's Book
- Teacher's Guide.

Learner's Book

The Learner's Book is divided into eight modules that cover the four Geography topics. There are two modules allocated to each topic. The first module focuses specifically on the geographical knowledge associated with the topic, while the second module focuses on the geographical skills and techniques associated with it.

The modules are further divided into units and activities. Each module has three or more units each of which covers an area of the topic.

There is a Review section at the end of each term which learners can use to revise the term's work in preparation for tests and examinations. In addition, examination practice is provided at the end of the Learner's Book. This consists of examination papers which the learners can complete.

Fieldwork is provided for in a practical and enjoyable way. It is included in the activities of Module 4 for the topic, 'Geomorphology'. For the other topics in Grade 11, fieldwork activities are suggested at the end of Modules 1, 5 and 7. Fieldwork activities provide learners with an opportunity to apply and deepen their geographical knowledge, skills and techniques as they use what they have learnt to explore and investigate their environment first-hand. As such, these activities are an integral part of learning and help learners to experience the relevance of what they learn in the classroom and transfer it to outside the classroom.

Formal assessment opportunities are included in the Learner's Book in the form of Assessment Tasks. All other formal assessment activities (tests and examinations) are provided in the Teacher's Guide.

Teacher's Guide

The Teacher's Guide provides information and guidance on:

- Geography as a subject (Section 1)
- planning for the Grade 11 year and lessons (Sections 1 and 2)
- using the modules and units in the Learner's Book to create lessons (Section 2)
- suggested answers for all activities in the Learner's Book (Section 2)
- suggested remedial and extension activities (Section 2)
- informal assessment suggestions (Section 2)
- a programme of assessment (Section 3)
- tests (Section 3)
- alternative assessment tasks to the ones that appear in the Learner's Book (Section 3)
- model June and end-of-year examination papers (Section 3)
- guidance on the assessment of all Formal Assessment Tasks (Section 3)
- memorandums for all Formal Assessment Tasks (Section 3)
- recording and reporting on formal assessment (Section 3)
- a list of useful websites (Section 4)
- additional worksheets and activities on all Geography topics (Section 4).

Section 2 mirrors the Learner's Book and is divided into modules. It indicates how the modules and units in the Learner's Book can be used to create lessons.

Inclusivity

An important part of teaching is to accommodate all learners, including those who experience barriers to learning. *Study & Master Geography* takes into account that learners come from different backgrounds and have different abilities. So it offers learning material that learners can relate to, while extending their learning and experiences. There are a variety of types of activities – activities that appeal to learners of all levels and backgrounds, and that offer opportunities to work individually, in pairs, in groups or as a whole class. This Teacher's Guide also provides remedial and extension activities for each unit which teachers need when they have to manage a class of diverse learners. Section 4 (Resources) also provides further worksheets for learners and ideas for activities.

4. Grade 11 Year Plan

The table below indicates how *Study & Master Geography Grade 11* covers all the requirements of the CAPS for Geography and how it is intended for use in the 40 weeks in the school year.

Term	Week/s	Module	Unit no.	Unit title	No. of hours	Geography CAPS content	Resources
1	1	Module 1 The atmosphere: Geographical knowledge	1	The Earth's energy balance	4	<p>The Earth's energy balance</p> <ul style="list-style-type: none"> The unequal heating of the atmosphere – latitudinal and seasonal Significance of Earth's axis and revolution around the Sun Transfer of energy and energy balance – role of ocean currents and winds 	Learner's Book pp. 10–21; Teacher's Guide pp. 19–26; oranges; marker; pens; torches
1	2–3		2	Global air circulation	8	<p>Global air circulation</p> <ul style="list-style-type: none"> Global air circulation – a response to the unequal heating of the atmosphere World pressure belts Tri-cellular circulation: Hadley, Ferrel and polar cells The relationships between air temperature, air pressure and wind Pressure gradient, Coriolis force and geostrophic flow Winds related to global air circulation: westerlies, tropical easterlies and polar easterlies Air mass characteristics Winds related to regional and local air movements: Monsoons and Föhn 	Learner's Book pp. 22–39; Teacher's Guide pp. 26–34; cardboard

Term	Week/s	Module	Unit no.	Unit title	No. of hours	Geography CAPS content	Resources
1	4–5		3	Africa's weather and climate	8	Africa's weather and climate <ul style="list-style-type: none"> • Africa's climate regions • Subsidence and convergence – link to rainfall • The role of oceans in climate control in Africa • El Niño and La Niña processes and their effects on Africa's climate • Reading and interpreting synoptic weather maps 	Learner's Book pp. 40–57; Teacher's Guide pp. 34–43
1	6–7		4	Droughts and desertification	8	Droughts and desertification <ul style="list-style-type: none"> • Areas at risk: regional and local scales • Causes of droughts • Causes of desertification • Effects of droughts and desertification on people and the environment, such as differences in vulnerability • Management strategies – case studies 	Learner's Book pp. 58–72; Teacher's Guide pp. 43–48
1	8	Fieldwork 1			Extra-curricular outing	Six hours of extra-mural fieldwork is recommended for Grade 11.	Learner's Book p. 73; Teacher's Guide p. 49
1	8	Assessment Task 1		The atmosphere	Homework	Assessment and consolidation The atmosphere: Assessment Task 1	Learner's Book pp. 74–75; Teacher's Guide p. 49
1	8	Module 2 The atmosphere: Geographical skills and techniques	1	Aerial photographs and orthophoto maps	4	Aerial photographs and orthophoto maps <ul style="list-style-type: none"> • Oblique and vertical aerial photographs – identifying landforms and features • Use of tone, texture and shadow in the interpretation of photos • Orthophoto maps – identifying features • Orienting aerial photographs and orthophoto maps with another map 	Learner's Book pp. 77–87; Teacher's Guide pp. 51–54

Term	Week/s	Module	Unit no.	Unit title	No. of hours	Geography CAPS content	Resources
1	9		2	Geographical and Information Systems (GIS)	2	Geographical and Information Systems (GIS) <ul style="list-style-type: none"> • Satellite images • Application of GIS to climatology and meteorology 	Learner's Book pp. 88–100; Teacher's Guide pp. 54–57
1	9–10	Review: Term 1			2	Assessment and consolidation	Learner's Book pp. 101–108; Teacher's Guide pp. 58–60
1	10	Test			1	Assessment and consolidation The atmosphere: Test (on Term 1 work)	Teacher's Guide pp. 211–216
2	1	Module 3 Geomorphology: Geographical knowledge	1	Topography associated with horizontally layered rocks	4	Topography associated with horizontally layered rocks <ul style="list-style-type: none"> • Characteristics and processes associated with the development of: hilly landscapes, basaltic plateaus, canyon landscapes and Karoo landscapes (mesa, butte and conical hill) • Concept of scarp retreat or back wastings • Utilisation of these landscapes by people 	Learner's Book pp. 110–125; Teacher's Guide pp. 62–67
2	2		2	Topography associated with inclined/tilted rock strata	4	Topography associated with inclined/tilted rock strata <ul style="list-style-type: none"> • Characteristics and processes associated with the development of: a scarp slope, a dip slope, a cuesta, homoclinal ridge, hogback, cuesta basin and cuesta dome • Utilisation of these landscapes by people 	Learner's Book pp. 126–133; Teacher's Guide pp. 67–71
2	3		3	Topography associated with massive igneous rocks	4	Topography associated with massive igneous rocks: <ul style="list-style-type: none"> • Identification of batholiths, laccoliths, lopoliths, dykes and sills • Characteristics and processes associated with the development of granite domes and tors 	Learner's Book pp. 134–143; Teacher's Guide pp. 72–75

Term	Week/s	Module	Unit no.	Unit title	No. of hours	Geography CAPS content	Resources
2	4		4	Slopes	4	<p>Slopes</p> <ul style="list-style-type: none"> • Overview of South Africa's topography • Types of slopes • Slope elements: crest, cliff (scarp slope, free face), talus (debris, scree slope) and pediment • Characteristics of the slope elements: crest, cliff (scarp slope, free face), talus (debris, scree slope) and pediment • Slope development over time • The concept of slope retreat 	Learner's Book pp. 144–151; Teacher's Guide pp. 75–79
2	5		5	Mass movements and human responses	4	<p>Mass movements and human responses</p> <ul style="list-style-type: none"> • Concept of mass movements • Kinds of mass movements: soil creep, soilfluction, landslides, rock falls and mud flows, and slumps • The impact of mass movements on people and the environment • Strategies to prevent or minimise the effects of mass movement – South African case studies 	Learner's Book pp. 152–162; Teacher's Guide pp. 80–84
2	6–7	Module 4 Geomorphology: Geographical skills and techniques	1	Topographic maps	6	<p>Topographic maps</p> <ul style="list-style-type: none"> • Contours and landforms • Cross-sections on 1:50 000 topographic maps • Vertical exaggeration • Inter-visibility • Gradient 	Learner's Book pp. 163–178; Teacher's Guide pp. 86–90

Term	Week/s	Module	Unit no.	Unit title	No. of hours	Geography CAPS content	Resources
2	7		2	Geographical and Information Systems (GIS)	2	Geographical and Information Systems (GIS) <ul style="list-style-type: none"> • Spatially referenced data • Spatial and spectral resolution • Different types of data: line, point, area and attribute • Raster and vector data; and • Capturing different types of data from existing maps, photographs, fieldwork or other records on tracing paper 	Learner's Book pp. 179–186; Teacher's Guide pp. 90–93; tracing paper
2	8		3	Fieldwork	2	Fieldwork <ul style="list-style-type: none"> • Observation • Collecting and recording data • Processing, collating and presenting fieldwork findings 	Learner's Book pp. 187–189; Teacher's Guide pp. 93–95
2	8	Assessment Task 2		Geomorphology	1 (complete as homework)	Assessment and consolidation Geomorphology: Assessment Task 2	Learner's Book pp. 190–193; Teacher's Guide p. 95
2	8–9	Review: Term 2			2 (complete as homework)	Assessment and consolidation	Learner's Book pp. 194–198; Teacher's Guide pp. 95–98
2	9–10	Examinations				Assessment and consolidation June examination (Paper 1 & 2)	Teacher's Guide pp. 220–233
3	1–2	Module 5 Development geography: Geographical knowledge	1	The concept of development	7	The concept of development <ul style="list-style-type: none"> • Terminology associated with development, such as developed, developing, more economically developed countries (MEDCs) and less economically developed countries (LEDCs), and industrialised countries • The concept of development: economic, social, sustainable, appropriate scale and spatial aspects • Economic, social and demographic indicators of development: GNP, GDP, HDI, Gini Coefficient, life expectancy and infant mortality • Examples to illustrate differences in development from local, regional, and global contexts 	Learner's Book pp. 201–220; Teacher's Guide pp. 99–108; atlases; compasses

Term	Week/s	Module	Unit no.	Unit title	No. of hours	Geography CAPS content	Resources
3	2-4		2	Frameworks for development	6	<p>Frameworks for development</p> <ul style="list-style-type: none"> Factors that affect development, including: access to resources, energy, history, trade imbalances, population growth, education and training, natural resource limitations and environmental degradation (note: learners need to explore the complexity and inter-related nature of these factors) Development models: free market models, such as Rostow's model with its limitations and criticisms, core and periphery models with their application at different scales, sustainability models with their economic, social, and environmental elements Community based development, including approaches to rural and urban development (with examples from around the world) 	Learner's Book pp. 221–240; Teacher's Guide pp. 108–117; atlases
3	4-5		3	Trade and development	6	<p>Trade and development</p> <ul style="list-style-type: none"> International trade and world markets: commodities traded and terms of trade Types of trading relationships, including: free trade, trade barriers, subsidies and fair trade The concept of globalisation and its impact on development Export-led development – critically examined (with examples from around the world) 	Learner's Book pp. 241–256; Teacher's Guide pp. 117–122; large world map

Term	Week/s	Module	Unit no.	Unit title	No. of hours	Geography CAPS content	Resources
3	5–6		4	Development issues and challenges	4	Development issues and challenges <ul style="list-style-type: none"> The role of women in development: gender issues related to power, access to resources and attitudes The effect of development on the environment The role of the state and business in development in South Africa, including central control by the state, weak state control and public or private partnerships 	Learner's Book pp. 257–268; Teacher's Guide pp. 123–126; atlases
3	6–7		5	The role of development aid	4	Role of development aid <ul style="list-style-type: none"> Concept of development aid and development co-operation Types of development aid – technical, conditional, humanitarian Impact of aid on development (including case studies of development aid – positive and negative) 	Learner's Book pp. 269–279; Teacher's Guide pp. 126–130
3	7	Test	1		1	Assessment and consolidation Development geography: Test	Teacher's Guide pp. 234–239
3	7	Fieldwork 2			Extra-curricular	Six hours of extra-mural fieldwork is recommended for Grade 11.	Learner's Book p. 280; Teacher's Guide p. 130
3	8	Module 6 Development geography: Geographical skills and techniques	1	Mapwork skills	4	Mapwork skills (with reference to 1:50 000 topographic maps) <ul style="list-style-type: none"> Locating exact position: degrees, minutes and seconds Relative position: direction and magnetic bearing Scale: word, ratio and line scale Distance: measuring distances and converting to ground distance, straight line and curved (practise) Calculating area 	Learner's Book pp. 281–292; Teacher's Guide pp. 131–135; atlases

Term	Week/s	Module	Unit no.	Unit title	No. of hours	Geography CAPS content	Resources
3	9		2	Using atlases	1	Using atlases (revision) <ul style="list-style-type: none"> Using the index Locating places on different maps using degrees and minutes Comparing information from different maps 	Learner's Book pp. 293–296; Teacher's Guide pp. 136–137; atlases
						2	Assessment and consolidation
4	1	Module 7 Resources and sustainability: Geographical knowledge	1	Using resources	3	Using resources <ul style="list-style-type: none"> The relationship between resources and economic development Exploitation and depletion of resources Concepts of sustainability and sustainable use of resources 	Learner's Book pp. 300–310; Teacher's Guide pp. 141–145
			2	Soil and soil erosion	5	Soil and soil erosion <ul style="list-style-type: none"> How soils are formed Soil as a resource Causes of soil erosion: human, animal, physical, and past and present Evidence of soil erosion in South Africa Effects of soil erosion on people and the environment Management strategies to prevent and control soil erosion 	Learner's Book pp. 311–324; Teacher's Guide pp. 145–149; wall world map or atlases

Term	Week/s	Module	Unit no.	Unit title	No. of hours	Geography CAPS content	Resources
4	3–4		3	Conventional energy resources and their impact on the environment	5	Conventional energy sources and their impact on the environment <ul style="list-style-type: none"> • Maps and graphs to show thermal, hydro, and nuclear energy production in South Africa • Thermal electricity generation using coal – outline of principles and processes • The impact of coal mining and thermal power stations – environmental despoliation, solid waste, waste gases and acid rain • Case study of nuclear energy – advantages and disadvantages • South Africa’s potential to meet long-term energy needs using conventional sources 	Learner’s Book pp. 325–352; Teacher’s Guide pp. 150–159; atlases
4	4–5		4	Non-conventional energy sources	4	Non-conventional energy sources <ul style="list-style-type: none"> • Solar energy – examples from South Africa and the world • Wind energy – examples from South Africa and the world • Future of non-conventional energy in South Africa • Possible effects of using more non-conventional energy on the South African economy and the environment 	Learner’s Book pp. 353–378; Teacher’s Guide pp. 159–165
4	5		5	Energy management in South Africa	3	Energy management in South Africa <ul style="list-style-type: none"> • South Africa’s changing energy needs • Energy management, towards greener economies and sustainable life styles: responsibilities of governments, businesses and individuals 	Learner’s Book pp. 379–392; Teacher’s Guide pp. 165–168
4	5	Fieldwork 3			Extra-curricular	Six hours of extra-mural fieldwork is recommended for Grade 11.	Learner’s Book p. 393; Teacher’s Guide pp. 168–169; spades; cameras/cell phones with cameras; paper; pencils; erasers
4	6	Assessment Task 3		Resources and sustainability	1 (complete as homework)	Assessment and consolidation Resources and sustainability: Assessment Task 3	Learner’s Book pp. 394–396; Teacher’s Guide p. 169; paper; pencils

Term	Week/s	Module	Unit no.	Unit title	No. of hours	Geography CAPS content	Resources
4	6	Module 8 Resources and sustainability: Geographical skills and techniques	1	Topographic maps	2	Topographic maps (applications and revision) <ul style="list-style-type: none"> • Contours and landforms • Cross-sections on 1:50 000 maps • Vertical exaggeration • Inter-visibility • Gradient 	Learner's Book pp. 397–404; Teacher's Guide pp. 170–175
			2	Geographical and Information Systems	2	Geographical and Information Systems (GIS) <ul style="list-style-type: none"> • Spatially referenced data • Spatial and spectral resolution • Different types of data: line, point, area and attribute • Raster and vector data • Capturing different types of data from existing maps, photographs, fieldwork or other records on tracing paper 	Learner's Book pp. 405–410; Teacher's Guide pp. 175–177; tracing paper, coloured pens or pencils
4	7	Review: Term 4		2	3	Assessment and consolidation	Learner's Book pp. 411–413; Teacher's Guide pp. 178–180
4	7–8	Examination preparation			5	Assessment and consolidation	Learner's Book p. 414–432; Teacher's Guide pp. 181–188
4	9–10	Examinations				Assessment and consolidation End-of-year examination	Teacher's Guide pp. 210, 241–262

2. LESSON-BY-LESSON

This section contains teaching notes for the modules in the Learner's Book and answers to all the activities. It also provides informal assessment suggestions and suggested remedial and extension activities.

General	18
TERM 1	
Module 1: The atmosphere: Geographical knowledge	19
Fieldwork 1	49
Assessment Task 1: The atmosphere	49
Module 2: The atmosphere: Geographical skills and techniques	50
Review: Term 1	58
TERM 2	
Module 3: Geomorphology: Geographical knowledge	61
Module 4: Geomorphology: Geographical skills and techniques	85
Assessment Task 2: Geomorphology	95
Review: Term 2	95
TERM 3	
Module 5: Development geography: Geographical knowledge	99
Fieldwork 2	130
Module 6: Development geography: Geographical skills and techniques	131
Review: Term 3	138
TERM 4	
Module 7: Resources and sustainability: Geographical knowledge	140
Fieldwork 3	168
Assessment Task 3: Resources and sustainability	169
Module 8: Resources and sustainability: Geographical skills and techniques	170
Review: Term 4	178
Examination preparation	181

General

- Many of the activities are bite-sized, quick and easy to do. Because of this you can often work through as many as two or three activities in a lesson.
- The information boxes (those with a magnifying glass), case studies and other information in boxes in the Learner's Book provide additional information, examples, or applications for some teaching points in the main body text.
- Use a variety of approaches for reading these boxes – for example, read the box to the class, ask a learner to read the box to the class, or ask learners to read the box on their own (use this approach for short, easy-to-read boxes).
- In most cases, these boxes are there for teaching and learning purposes (they are always linked to activities), but not for revision purposes. Point out to your learners that when they use the book for revision, they need only focus on the main body text.
- In this Teacher's Guide, the instruction, 'Instruct the learners to work on Activity x', includes going through the answers with the class once they have completed the activity. This is unless the activity is set for, or finished off, as homework. In this case, remember to go through the answers to the activity at the start of the next lesson.

	MODULE 1	
TERM 1 Learner's Book pages 10–75 Duration: 28 hours	THE ATMOSPHERE: GEOGRAPHICAL KNOWLEDGE	

This module focuses on the heating of the atmosphere. It builds on the concept of insolation (incoming sunlight) and covers global air circulation, Africa's weather and climate, and droughts and desertification. As with the Grade 10 module on the atmosphere, it deals with some difficult physical concepts.

Curriculum and Assessment Policy Statement (CAPS) content

The Earth's energy balance

- The unequal heating of the atmosphere – latitudinal and seasonal
- Significance of Earth's axis and revolution around the Sun
- Transfer of energy and energy balance – role of ocean currents and winds

Global air circulation

- Global air circulation – a response to the unequal heating of the atmosphere
- World pressure belts
- Tri-cellular circulation: Hadley, Ferrel and polar cells
- The relationships between air temperature, air pressure and wind
- Pressure gradient, Coriolis force and geostrophic flow
- Winds related to global air circulation: westerlies, tropical easterlies and polar easterlies
- Air mass characteristics
- Winds related to regional and local air movements: Monsoons and Föhn

Africa's weather and climate

- Africa's climate regions
- Subsidence and convergence – link to rainfall
- The role of oceans in climate control in Africa
- El Niño and La Niña processes and their effects on Africa's climate
- Reading and interpreting synoptic weather maps

Droughts and desertification

- Areas at risk: regional and local scales
- Causes of droughts
- Causes of desertification
- Effects of droughts and desertification on people and the environment, such as differences in vulnerability
- Management strategies – case studies

Key geographical skills and techniques

- using verbal, quantitative and symbolic data forms such as text, pictures, graphs, tables, diagrams and maps
- practising field observation and mapping, interviewing people, interpreting sources, working with statistics
- applying communication, thinking, practical and social skills
- practising the following specific skills:
 - identifying questions and issues
 - collecting and structuring information
 - processing, interpreting, and evaluating data
 - making decisions and judgements
 - deciding on a point of view
 - suggesting solutions to problems
 - working co-operatively and independently

Key words/concepts

latitude; equator; pole; mid-latitudes; season; orbit; revolution; solstice; equinox; tropics; polar regions; convection; convection cell; wind; ocean current; global air circulation; air pressure/atmospheric pressure; pressure gradient; adiabatic cooling; adiabatic warming; tri-cellular model; Hadley cell; Ferrel cell; polar cell; equatorial low/Intertropical Convergence Zone (ITCZ); subtropical high; subpolar low; global wind; tropical easterlies/trade winds; westerlies; polar easterlies; Coriolis effect; geostrophic wind; air mass; monsoon; Harmattan; Föhn; weather; climate; biome; Mediterranean climate; subsidence; convergence; maritime climate; sea breeze; land breeze; Walker circulation; El Niño; La Niña; southern oscillation; El Niño/La Niña-Southern Oscillation (ENSO); synoptic map; isobar; station model; drought; climate change; desertification; drylands; deforestation; overgrazing; biodiversity; wildfire/veldfire; heat wave; dust storm

Learner's Book
pages 10–21
Duration: 4 hours

UNIT 1

The Earth's energy balance

TERM 1, WEEK 1

Curriculum and Assessment Policy Statement (CAPS) content

The Earth's energy balance

- The unequal heating of the atmosphere – latitudinal and seasonal
- Significance of Earth's axis and revolution around the Sun
- Transfer of energy and energy balance – role of ocean currents and winds

Resources

- Learner's Book pages 11–21
- torch (Activity 1)
- oranges, marker pens and torches (Activity 3)
- Websites (optional)
 - For general information and definitions of key terms see:
www.weatheronline.co.uk/reports/wxfacts/A-is-for-Air.htm –
 - For diagrams and simple animations, although they have a Northern hemisphere or American bias:
www.scienceu.com/observatory/articles/seasons/seasons.html

- www.astronomy.org/programs/seasons/
- www.youtube.com/watch?v=DuiQvPLWziQ
- www.universetoday.com/18835/solar-cycle/
- For a table of dates and times of solstices and equinoxes until 2017 see:
 - http://en.wikipedia.org/wiki/Solstice
 - www.coolantarctica.com
- a globe is very useful

Preparation

- Read through the unit and familiarise yourself with the content that you will need to teach. Think about what the learners may already know about the topics and any areas of difficulty that you think they might encounter.

Teaching the unit

» Lesson 1

- Read through, or ask learners to read through, the Module 1 introductory paragraphs. You can use it as the basis of an opening discussion to assess what learners already know. If necessary, write up and display the four Key questions on the board for the duration of the module.
- Read through, or ask learners to read through, the Unit 1 introductory paragraph. Point out to learners that the Key questions for each unit form the unit headings.
- Work through the section, ‘Why does the Earth and its atmosphere heat up unevenly?’ (page 11). Revise the concept of insolation (see the Revision box) and refer to Figure 1.1.1.
- Work through the section on latitude and refer to Figure 1.1.2.

Activity 1

- Do Part A as a demonstration for the class. The beam of light from the torch represents a beam of light from the Sun.
- In Part B of the activity, learners note how the angle of the Sun affects the concentration of light/insolation.
- Work through the section on the seasons. Emphasise that if the Earth were not tilted in its axis, there would be no seasons.
- Focus on Figure 1.1.4. Point out the solstice and equinox positions in the Earth’s orbit around the Sun.
- Work through the section, ‘How does the Earth’s axis and revolution around the Sun affect the Earth’s energy balance?’ (page 13).

Activity 2

- In this activity, learners focus on Figure 1.1.4 and Figure 1.1.5 which show the Earth’s orbit around the Sun and the Earth’s position at the time of the solstices and equinoxes.

» Lesson 2

- In this lesson, focus on Activity 3 and Activity 4.
- Learners can fall into the trap of thinking they already know about the seasons and the Earth’s orbit around the Sun, but it’s important that they model the Earth’s tilt and orbit.

Activity 3

- In this activity, learners set up a model of the Sun and the Earth using an orange and a torch. They see for themselves how the Sun is directly over the tropic lines at the time of the solstices and directly over the equator at the time of the equinoxes.
- Learners should do this activity in pairs or groups of three to four.

Activity 4

- Read the features, 'The Earth's distance from the Sun changes during the year' (page 15) and 'The solstices, the equinoxes and seasonal lag' (page 16).
- In this activity, learners answer questions on the two features and look at seasonal temperature data.
- If necessary, learners can finish this activity for homework.



Lesson 3

- If Activity 4 was finished for homework, go through the answers with the class.
- In this lesson, focus on Activity 5.

Activity 5

- Read the features, 'Antarctica's longest day and longest night' (page 16) and 'The variation in solar altitude and temperature at the equator and the South Pole' (page 17).
- In this activity, learners answer questions on the two features and do some temperature calculations.



Lesson 4

- Work through the section, 'How is heat energy transferred to restore the energy balance?' (page 19). The three methods of heat transfer are convection, conduction and radiation. Remind learners that convection is one of the mechanisms of heat transfer that they learnt about in Grade 10. The principle of convection is fundamental to weather science. For convection, learners need only remember these four words: *hot rises, cold sinks*.
- Work through the section on ocean currents. Make up a quiz to see what learners remember about ocean currents from Grade 10.
- Focus on the heat map or thermomap of sea surface temperatures in Figure 1.1.11.

Activity 6

- In this activity, learners answer questions on the ocean currents and their temperature effects.
- Learners can do this activity for homework.

Answers

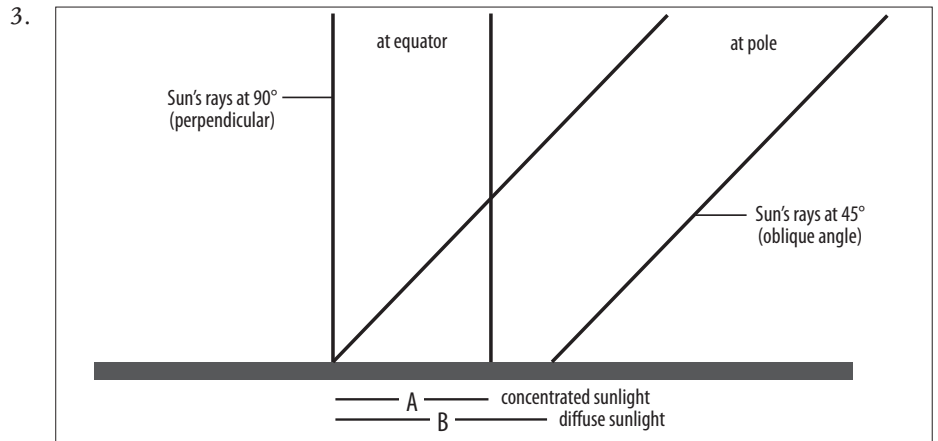
Activity 1 (Learner's Book, page 12)

Part A

Learners should be able to see that the beam of light is concentrated when it is at right angles and weak or diffuse when it is at a low or shallow angle.

Part B

2. A = 2 cm; B = 2,7 cm



Activity 2 (Learner's Book, page 14)

1.
 - a. $23,5^\circ$, i.e. the same
 - b. $90^\circ - 66,5^\circ = 23,5^\circ$, i.e. the same
2.
 - a. Figure 1.1.4 shows an oblique view and Figure 1.1.5 a side view.
 - b. The side view of the solstices in Figure 1.1.5 matches the view of solstices in Figure 1.1.4.
The side view of the equinoxes in Figure 1.1.5 is generated if you look from the solstice position on the left-hand side or right-hand side of Figure 1.1.4. The Earth's axis is either pointing directly towards or away from you/the viewer. This is why the axis looks straight in Figure 1.1.5.

Activity 3 (Learner's Book, page 14)

6. If the model works successfully, learners should see that the beam of light falls directly on:
 - one of the tropic lines at solstice
 - the equator at equinox.

7.

Event	Approximate date	Sun is directly over (line of latitude)
Summer solstice	21/22 December	Tropic of Capricorn
Autumn equinox	21/22 March	equator
Winter solstice	20/21 June	Tropic of Cancer
Spring equinox	22/23 December	equator

Activity 4 (Learner's Book, page 16)

2.
 - a. 147,3 million km (1)
 - b. 152, 1 million km (1)

3. a. *solstice*: the time at which one of the Earth's hemisphere's receives maximum insolation/the time at which the difference between the length of day and night is most extreme (1)
- b. *equinox*: the time at which the differences in insolation received by the Earth's two hemispheres is a minimum/the time at which day and night are equal lengths (1)
4. 13–14 days (1)
5. a. November, December, January (3)
- b. May, June, July (3)
6. a. January, February, March (3)
- b. June, July, August (3)
7. Air temperatures continue to rise after the summer solstice or drop after the winter solstice (1). This is because the sea heats up and cools down more slowly than the land (1). The delay in the heating and cooling of the sea causes seasonal lag (1).

[20]

Activity 5 (Learner's Book, page 18)

1. a.

	Equator 0°	Antarctica at 66,5°
Solar altitude at June solstice	113,5°	0°
Solar altitude at December solstice	66,5°	47°
Difference in solar altitude between solstices	47°	47°

(6)

- b. $2 \times 23,5^\circ = 47^\circ$, i.e. two times the tilt of the Earth's axis (1)
- c. equinox time (1)

2. a.

	Libreville 0°28'N	South Pole 90° S
Difference between solstice temperatures	$(29 - 27,6)^\circ\text{C} = 1,4^\circ\text{C}$	$(-26,5 - (-54,4))^\circ\text{C} = (-26,5 + 54,4)^\circ\text{C} = 27,9^\circ\text{C}$
Difference between equinox temperatures	$(30,2^\circ\text{C} - 27,5)^\circ\text{C} = 2,7^\circ\text{C}$	$(-55,1 - (-50,3))^\circ\text{C} = -4,8^\circ\text{C}$

(2 × 4 = 8)

- b. South Pole (1)
- c. solstices (1)

[18]

Activity 6 (Learner's Book, page 21)

1. a. east (1)
b. the cold Peru Current (1)
2. a. i. Lüderitz temperatures are lowered by the cold Benguela Current (1); Maputo temperatures are raised by the warm Mozambique Current (1)
ii. Lima temperatures are lowered by the cold Peru Current (1); Salvador temperatures are raised by the warm Brazil Current (1)
b. i. the warm waters of the equatorial Indian Ocean (1)
ii. the cool waters of the eastern South Atlantic (1)
c. Humboldt (1)

[9]

Informal assessment**Activity 1**

- Go through the answers with the class. Write up the answers for Part B on the board.

Activity 2

- Go through the answers with the class. Ask learners to offer answers.

Activity 3

- Write up the answers on the board.

Activity 4

- Go through the answers with the class. Ask learners to offer answers.
- If you choose, you can ask learner's to mark their answers according to the mark allocation given in the Answers section. Ask those learners who got less than 14/20 for the activity to do the remedial activity (see the Remedial section below).

Activity 5

- Go through the answers with the class. Ask learners to offer answers.
- If you choose, you can ask learner's to mark their answers according to the mark allocation given in the Answers section. Ask those learners who got less than 12/18 for the activity to do the remedial activity (see the Remedial section below).

Activity 6

- Go through the answers with the class. Ask learners to offer answers.
- If you choose, you can ask learner's to mark their answers according to the mark allocation given in the Answers section. Ask those learners who got less than 6/9 for the activity to do the remedial activity (see the Remedial section below).

Remedial/extension**Remedial:**

- For learners who struggled with this unit, ask them to complete Worksheet 1 (pages 270–271) in the Resources section of this Teacher's Guide.

Extension:

For learners who struggled with this unit, ask them to complete Worksheet 2 (page 272) in the Resources section of this Teacher's Guide.

Ask learners to do one or more of the following:

- Find out the dates for this year for: (a) the equinoxes and solstices; (b) perihelion and aphelion.
- Find out why day and night at equinox aren't exactly equal. (Answer: The speed with which the Earth travels around the Sun varies a bit. The Earth speeds up when it is nearest the Sun (about 3 January) and slows down when it is furthest away (about 4 July).)
- Find out about the solar cycle – the 11 year cycle in which the Sun switches magnetic poles. The number of sunspots and flares increases every 11 years; during this time, the Sun is hotter.
- Find out more about seasons on other planets. See: www.nasa.gov/audience/forstudents/k-4/home/F_Planet_Seasons.html.

Learner's Book
pages 22–39
Duration: 8 hours

UNIT 2

Global air circulation

TERM 1, WEEKS 2–3

Curriculum and Assessment Policy Statement (CAPS) content

Global air circulation

- Global air circulation – a response to the unequal heating of the atmosphere
- World pressure belts
- Tri-cellular circulation: Hadley, Ferrel and polar cells
- The relationships between air temperature, air pressure and wind
- Pressure gradient, Coriolis force and geostrophic flow
- Winds related to global air circulation: westerlies, tropical easterlies and polar easterlies
- Air mass characteristics
- Winds related to regional and local air movements: Monsoons and Föhn

Resources

- Learner's Book pages 22–39
- cardboard, cut from boxes to make cardboard discs (Activity 6)
- Websites (optional)
 - For a good overview on global air circulation see:
www.physicalgeography.net/fundamentals/7p.html
 - For information on jet streams see:
www.physicalgeography.net/fundamentals/7q.html

Preparation

- Unit 2 is probably the most difficult unit in this module. Read through the unit and familiarise yourself with the content that you will need to teach. Think about what the learners may already know about the topics and any areas of difficulty that you think they might encounter.
- See the resources needed for Activity 6 listed above.

Teaching the unit

» Lesson 1

- Read through, or ask learners to read through, the Unit 2 introductory paragraphs. Emphasise that this unit is about wind.
- Work through the section, 'What is global air circulation?' (page 22). Refer to Figure 1.2.1 which shows the single-cell model for heat transfer.
- Work through the section, 'The world pressure belts' (page 23). Focus on Figure 1.2.2.
- Work through the section, 'The world pressure belts shift with the seasons' (page 23). Focus on Figure 1.2.3 (page 24). Ask learners to pick out the key difference between the two air pressure maps: The high pressure zones shift north in the July map, as does the ITCZ line, which is the thermal equator.

Activity 1

- Read the feature, 'Stuck in the doldrums' (page 25).
- Learners answer questions on the feature.

» Lesson 2

- If Activity 1 was completed for homework, go through the answers with the class.
- Work through the section, 'Are the world pressure belts a product of tri-cellular circulation?' (page 25). Focus on Figure 1.2.5.

Activity 2

- This activity helps learners identify the parts of the tri-cellular air circulation model.
- If necessary, learners can do or finish this activity for homework.
- Work through the section, 'What is the relationship between air temperature, air pressure and wind?' (page 27).
- Emphasise that changes in air temperature cause changes in air pressure; and that changes in air pressure cause changes in air temperature. For example, when you pump a tyre full of air, it gets hotter as the air molecules are squashed together.
- Remind learners:
 - *Why does warm air rise?* As air warms, it expands – which means that the air molecules move further apart. As it expands, it gets lighter.
 - *Why does air cool as it rises?* As air rises, it uses up heat. It exchanges heat energy for kinetic energy – energy for movement. As it loses heat energy, it cools.
 - *Why does cool air sink?* As air cools, it contracts – which means that the air molecules move closer together. As it contracts, it gets denser and heavier. When there is more air pressing down over a fixed area, air pressure increases.
- Focus on Figure 1.2.7 and on the concepts of adiabatic warming and cooling, which will feature again when you look at Föhn winds.
- Point out that convection evens out temperature differences. Point out that the 'warm air' in a convection cell can be quite cool, but it is warmer than the cold air.

Activity 3

- This activity helps learners reinforce the concept of a convection cell.



Lesson 3

- Work through the section, ‘Why do the global winds follow a curved path?’ (page 28) and the section on the pressure gradient. Focus on Figure 1.2.8.
- Use this example for the concept of a pressure gradient: If you blow air into a balloon or pump air into a tyre, the air pressure inside is higher than it is on the outside. If you let the balloon go or puncture the tyre, the air comes rushing out to fill the low pressure of the surroundings. The difference between the two air pressures is a pressure gradient. The bigger the difference, the steeper the gradient, and the faster the air moves.

Activity 4

- In this activity, learners calculate pressure gradients and see the effect of distance and pressure difference.
- Work through the section on the Coriolis effect (page 29).
- Focus on Figure 1.2.9 and point out that the force is at a minimum at the equator and at a maximum at the poles.
- Refer to Figure 1.2.10 – it is often a surprise to discover that although the Earth spins in one direction, the direction of rotation is anti-clockwise if viewed from above the North Pole, and clockwise if viewed from above the South Pole.

Activity 5

- In this activity, learners use cardboard discs to demonstrate to themselves: (1) the different direction of rotation in the two hemispheres; (2) how the winds are deflected in the two hemispheres.



Lesson 4

- Work through the section on geostrophic flow. Focus on Figure 1.2.12.

Activity 6

- This activity reinforces the concepts of the pressure gradient force and Coriolis force.
- Work through the section, ‘Which winds are related to global air circulation?’ (page 32). Focus on Figure 1.2.14.
- Remind learners that winds are named after the direction they blow from, not towards.

Activity 7

- Read the feature, ‘Using the prevailing global winds to discover America and explore Africa’ (page 33).
- Learners answer questions on the feature and prevailing winds.

» Lesson 5

- Work through the section, 'What are air masses and what is their role in global air circulation?' (page 34).
- Focus on Figure 1.2.16 which is a general map of the world's air masses. Point out that maritime tropical airmasses (mT) dominate the Southern hemisphere.
- Point out for air mass temperature:
 - *warm air* masses form over tropics (T) and equator (E)
 - *cold air* masses form over polar regions/ mid-latitudes 55–60° latitudes (P) or Arctic (A) or Antarctic (AA).
- Point out that for air mass moisture content:
 - dry air masses form over land – c for continental
 - moist air masses form over the sea – m for maritime.

Activity 8

- In this activity, learners summarise the types and properties of air masses.

» Lesson 6

- Work through the section, 'Which winds are related to regional and local air movements?' (page 36) and the sections on monsoons.
- Remind learners that the oceans play a big role in the Earth's weather.
- Focus on Figure 1.2.17 which shows how the ITCZ shifts in the wet and dry seasons, together with the continental and maritime air masses.

Activity 9

- Read the feature, 'Rain by the metre – the monsoon in South Asia' (page 37).
- Learners answer questions on the feature.
- If necessary, learners can finish this activity for homework.

» Lesson 7

- If Activity 9 was completed for homework, go through the answers with the class.
- Work through the section on Föhn winds (page 38).
- Focus on Figure 1.2.20 and the principles of adiabatic cooling and warming.

Activity 10

- Read the feature, 'A berg wind: The wind as hot as a hairdryer' (page 38).
- Learners answer questions on the feature.

Answers

Activity 1 (Learner's Book, page 25)

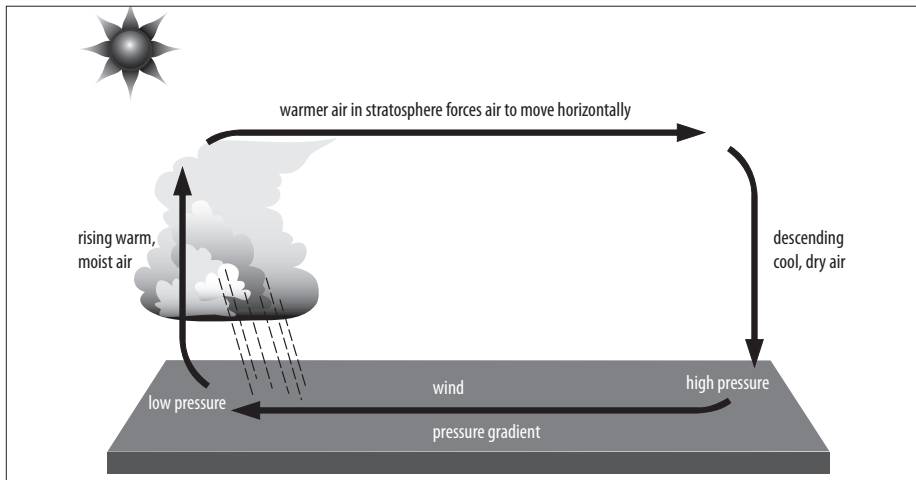
1. Intertropical Convergence Zone (ITCZ) or equatorial low
2. There is a lot of warm, moist rising air which generates storms/is unstable.
3. The ITCZ shifts as the seasons change and because the land and the oceans heat up and cool down at different rates.
4. subpolar highs

Activity 2 (Learner's Book, page 26)

1. X = polar; Y = Ferrel; Z = Hadley (3)
2. Ferrel cell (1)
3. A3; B4; C6; D1; E2; F5 (6)
4. a. 0° and 60°N and S (2)
b. 30°N and S (1)
5. a. 0° and 60°N and S (2)
b. 30°N and S (1)

[16]

Activity 3 (Learner's Book, page 28)



Activity 4 (Learner's Book, page 30)

1. tropical easterlies
2. a. trade winds
b. westerlies
c. westerlies
- 3.

	Tropical easterlies (trade winds) blow from ...	Westerlies of mid-latitudes blow from ...
Northern hemisphere	NE	SW
Southern hemisphere	SE	NW

4. a. the middle of the three high (H) pressure zones in the South; it lies in the Atlantic Ocean, between South America and Africa
- b. northwester – the wind belt shifts North in winter with the pressure belts; Cape Town is now in the westerlies wind belt, rather than the trade wind belt (see Figure 1.2.3).

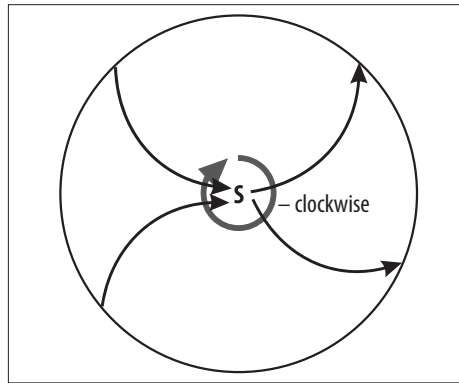
Activity 5 (Learner's Book, page 31)

1. difference in air pressures, which sets up a pulling force from high pressure to low pressure (2)
2. steep (1)
3. a. $(1\ 012 - 1\ 000) \text{ hPa} / 100 \text{ km} = 0,12 \text{ hPa/km}$ (2)
- b. $(1\ 012 - 1\ 000) \text{ hPa} / 20 \text{ km} = 0,6 \text{ hPa/km}$ (2)
4. a. $(1\ 012 - 994) / 100 \text{ km} = 0,18 \text{ hPa/km}$ (2)
- b. bigger (1)

[10]

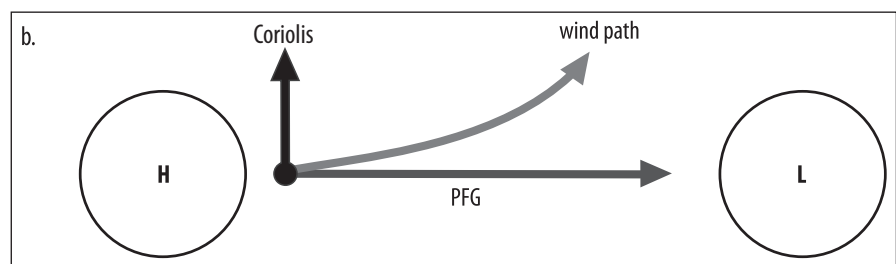
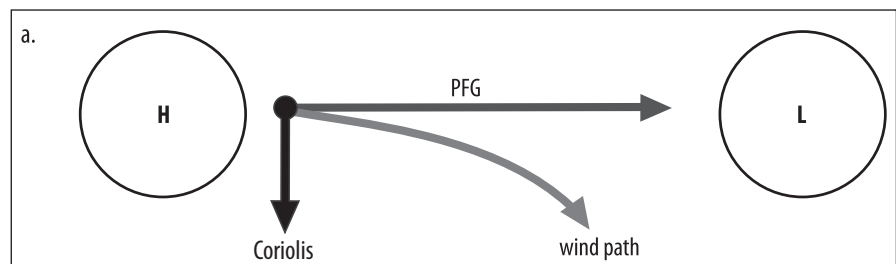
Activity 6 (Learner's Book, page 33)

4. See Figure 1.2.13 in the Learner's Book for the deflection pattern for the North Pole.
5. The diagram below shows the deflection pattern for the South Pole.



Activity 7 (Learner's Book, page 34)

1. pressure gradient force and Coriolis force/ effect (2)
2. a. i. A, B, C (3); ii. D (1)
- b. D and beyond (2)
- 3.



(4)

[12]

Activity 8 (Learner's Book, page 35)

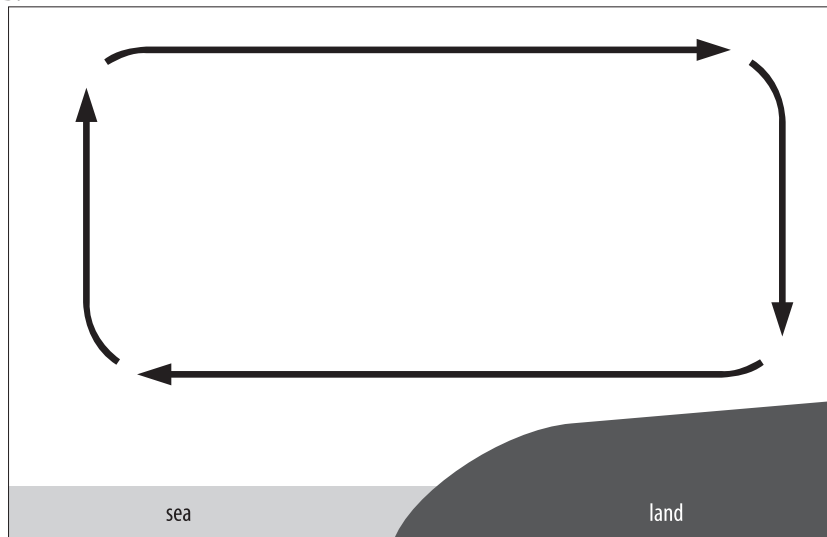
1.

Type of air mass		
Code	Description	Properties
cA	continental Arctic	dry, extremely cold, stable
cP	continental polar	dry, cold, stable
mP	maritime polar	moist, cold, unstable
mT	maritime tropical	moist, warm, stable
cT	continental tropical	dry, warm, stable
mE	maritime equatorial	moist, very warm, unstable
mT	maritime tropical	moist, warm, stable
cAA	continental Antarctic	dry, extremely cold, stable

2. cAA because Antarctic land mass cools down more than the Arctic sea

Activity 9 (Learner's Book, page 38)

1. a. cT
b. mT
2. harmattan; tropical easterlies; trade wind
3. Land reaches temperature peak; the hot air of the cT rises and mT air blows in from the Atlantic to replace it.
4. a. southwest
b.



Activity 10 (Learner's Book, page 39)

1.

Area/Mountain region/Country	Local name of Föhn wind
Alps, Europe	Föhn/Foehn
Rocky Mountains, USA	chinook
Andes, Argentina/South America	zonda
Drakensberg, South Africa	berg wind

2. a. $20\text{ }^{\circ}\text{C} - 10\text{ }^{\circ}\text{C} = 10\text{ }^{\circ}\text{C}$

b. $10\text{ }^{\circ}\text{C} + 20\text{ }^{\circ}\text{C} = 30\text{ }^{\circ}\text{C}$

Informal assessment**Activity 1**

- Go through the answers with the class. Ask learners to offer answers.

Activity 2

- Ask learners to swap books with a partner and check each other's work as you quickly go through the answers with the class.
- If you choose, you can ask learner's to mark the answers according to the mark allocation given in the Answers section. Ask those learners who got less than 12/16 for the activity to do the remedial activity (see the Remedial section on page 34).

Activity 3

- Draw the simple convection cell on the board and label it.

Activity 4

- Go through the answers with the class. Write up the completed table for question 3 on the board.

Activity 5

- Write up the answers on the board.
- If you choose, you can ask learner's to mark the answers according to the mark allocation given in the Answers section. Ask those learners who got less than 7/10 for the activity to do the remedial activity (see the Remedial section on page 34).

Activity 6

- Ask learners to check Figure 1.2.13 to see if their curves for the Northern hemisphere look similar. Draw the example for the Southern hemisphere on the board.

Activity 7

- Go through the answers with the class. Write up the answers for question 3 on the board.
- If you choose, you can ask learner's to mark the answers according to the mark allocation given in the Answers section. Ask those learners who got less than 8/12 for the activity to do the remedial activity (see the Remedial section on page 34).

Activity 8

- Write up the completed table on the board.

Activity 9

- Go through the answers with the class. Draw the winter Monsoon wind for question 4b on the board.

Activity 10

- Ask learners to swap books with a partner and check each other's work as you quickly go through the answers with the class.

Remedial/extension

Remedial:

- For learners who struggled with Activity 2, Activity 5 and Activity 7, ask them to complete Worksheet 3 (page 273) in the Resources section of this Teacher's Guide.

Extension:

- Ask learners to complete Worksheet 4 (page 275) in the Resources section of this Teacher's Guide.

Learner's Book
pages 40–57
Duration: 8 hours

UNIT 3

Africa's weather and climate

TERM 1, WEEKS 4–5

Curriculum and Assessment Policy Statement (CAPS) content

Africa's weather and climate

- Africa's climate regions
- Subsidence and convergence – link to rainfall
- The role of oceans in climate control in Africa
- El Niño and La Niña processes and their effects on Africa's climate
- Reading and interpreting synoptic weather maps

Resources

- Learner's Book pages 40–57
- Websites (optional)
 - For information on El Niño and La Niña see:
<http://dev2.weathersa.co.za/web/Content.asp?contentID=75>
 - A useful site for you or advanced learners see:
<http://www.ucar.edu/learn/>
 - The South African Weather Services website for weather forecasts see:
www.weathersa.co.za
 - This site posts a synoptic weather chart for South Africa daily:
www.koolasun.co.za/weather/sa-weather-chart.html

Preparation

- Read through the unit and familiarise yourself with the content that you will need to teach. Think about what the learners may already know about the topics and any areas of difficulty that you think they might encounter.

Teaching the unit

» Lesson 1

- Read through, or ask learners to read through, the Unit 3 introductory paragraphs. Again, remind learners that the oceans play a significant role in Africa's climate and weather. Point out that the Pacific Ocean has a very significant effect.
- Work through the section, 'Which are Africa's main climate regions?' (page 40).
- Focus on the map in Figure 1.3.1. Point out that:
 - the tropics are dominated by tropical air masses.
 - the mid-latitudes are affected by two different or conflicting air masses: tropical and polar. Here, the weather conditions are very changeable.
 - temperatures are lower in highland areas in eastern Africa (because temperature decreases with altitude).

Activity 1

- In this activity, learners answer questions on the climate map and Köeppen's Climate Classification system.

Activity 2

- In this activity, learners answer questions on the graph in Figure 1.3.3 and Köeppen's Climate Classification system.

» Lesson 2

- In this lesson, focus on Activity 3 and begin Activity 4 by reading the feature, 'What is a climograph?' (page 44).

Activity 3

- Read the feature, 'Africa's coldest and hottest temperatures' (page 43).
- In this activity, learners answer questions on the feature.

» Lesson 3

- In this lesson, focus on Activity 4.

Activity 4

- In this activity, learners plot climographs and practise bar graph and line graph drawing skills.
- Learners work in groups of five. Each group produces five climographs and each learner produces one graph.

» Lesson 4

- Work through the section, 'How are air subsidence and convergence linked to Africa's rainfall?' (page 46). This section links to global air circulation and pressure belts in Unit 2.
- Focus on Figure 1.3.7. Point out that air convergence produces cloudy conditions. Also point out that low pressure belts are linked to cloudy conditions and high pressure belts are linked to sunny conditions.

Activity 5

- In this activity, learners answer questions on air convergence and subsidence.

» Lesson 5

- Work through the section, 'What is the role of oceans in climate control in Africa?' (page 47).
- Focus on Figure 1.3.8 which shows land and sea breezes. Point out that coasts are breezy or windy – they get sea breezes in daytime and land breezes at night.

Activity 6

- In this activity, learners plot minimum and maximum temperature data.
- For the section on 'Temperature control and rainfall: The effect of ocean currents', draw learners attention to Figure 1.3.9 (page 48). The Namib Desert is a coastal desert caused by the cold Benguela Current.

Activity 7

- Read the feature, 'South Africa's climate' (page 49).
- In this activity, learners answer questions on the feature.
- Learners can do this activity for homework.

» Lesson 6

- Go through the answers for Activity 7.
- Work through the section, 'How do El Niño and La Niña processes affect Africa's climate?' (page 49).
- For the section on Walker circulation, focus on Figure 1.3.10 which shows the system of longitudinal air circulation cells. Point out that while global air circulation systems are across the latitudes, these circulation systems are across longitude. Also point out the cold and warm parts of the equatorial Pacific Ocean.
- Work through the sections on El Niño and La Niña. Compare Figures 1.3.11 and 1.3.12. Point out the weak and strong trade winds and the gentle and steep thermocline.

Activity 8

- In this activity, learners answer questions on atmospheric circulation and El Niño and La Niña.

» Lesson 7

- Continue the section on El Niño and La Niña.

Activity 9

- Read the feature, 'El Niño and La Niña: The boy child and his little sister' (page 51).
- In this activity, learners answer questions on this feature.
- Begin the section, 'How do we read and interpret synoptic weather maps?' (page 54). Work through the information in the revision box.



Lesson 8

- Continue the section on synoptic weather maps.
- In this lesson, focus on Activity 10 and Activity 11.

Activity 10

- Read through the feature, 'How much is a knot of wind?' (page 55).
- In this activity, learners answer questions on the feature. Emphasise to learners that the wind speed scale in Figure 1.3.17 is for enrichment only. They do not need to know this detail.

Activity 11

- In this activity, learners read information in two synoptic weather maps – one showing winter conditions and the other showing summer conditions.

Answers

Activity 1 (Learner's Book, page 41)

- a. A
 - b. C
- a. seven
 - b. tropical monsoon/seasonal = dark pink (not purple), semi-arid = light orange
- 3.

Parts of Africa	Climate region	Biome	Biome picture no.
northern and southern tips of Africa	Mediterranean	charapal/fynbos	D
Sahara, Horn of Africa, parts of southern Africa (Namibia and Kalahari – Botswana)	dry tropical	desert	E
Sahel	dry tropical	semi-arid	E
central and western Africa	moist tropical	rainforest	B
eastern Africa (e.g. Kenya, Tanzania) and parts of southern Africa	wet-dry tropical	savanna	A
southern Africa	dry mid-latitude	semi-tropical/temperate grassland	C

Activity 2 (Learner's Book, page 43)

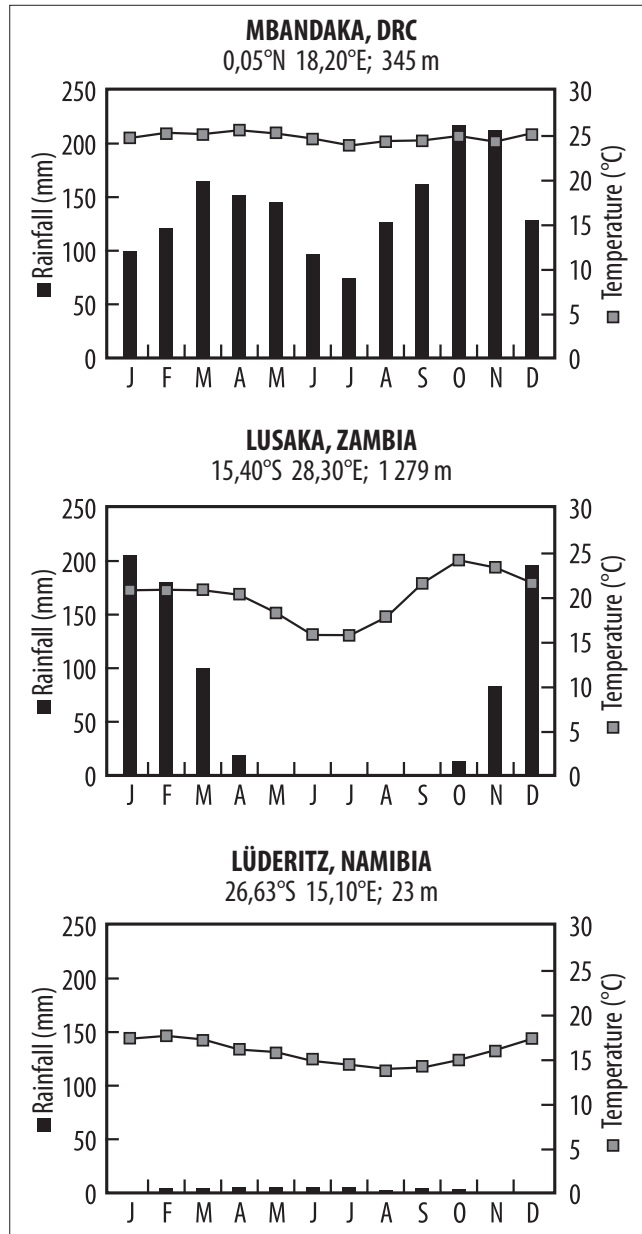
- tropical rainforest
 - (sub)tropical desert
- (sub)tropical desert, temperate grassland and desert
- tropical rainforest, tropical seasonal/ monsoon forest, savanna, (sub)tropical desert
- temperate grasslands, fynbos
- moist tropical/ rainforest – Af; wet-dry tropical/ savanna – Aw; dry tropical/ desert – Bw; dry mid-latitude/ temperate grassland – Cw; Mediterranean/ fynbos – Cs

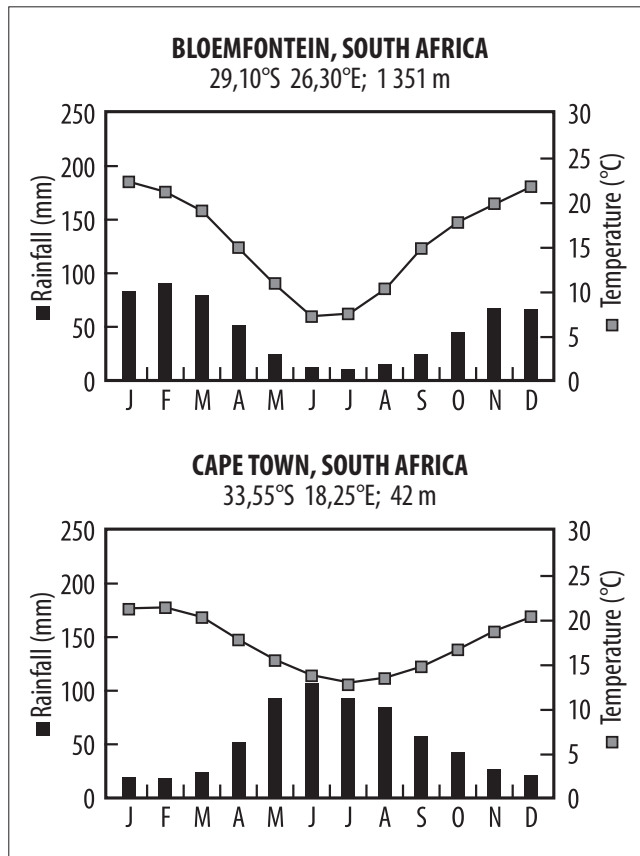
Activity 3 (Learner's Book, page 44)

- Both places fall within the mid-latitude region which experiences summer and winter temperature extremes, but the high altitude of Ifrane accounts for its very low temperatures – temperature decreases with altitude.
- Dallol – it has consistently high temperatures throughout the year; this is its average weather.

Activity 4 (Learner's Book, page 45)

-



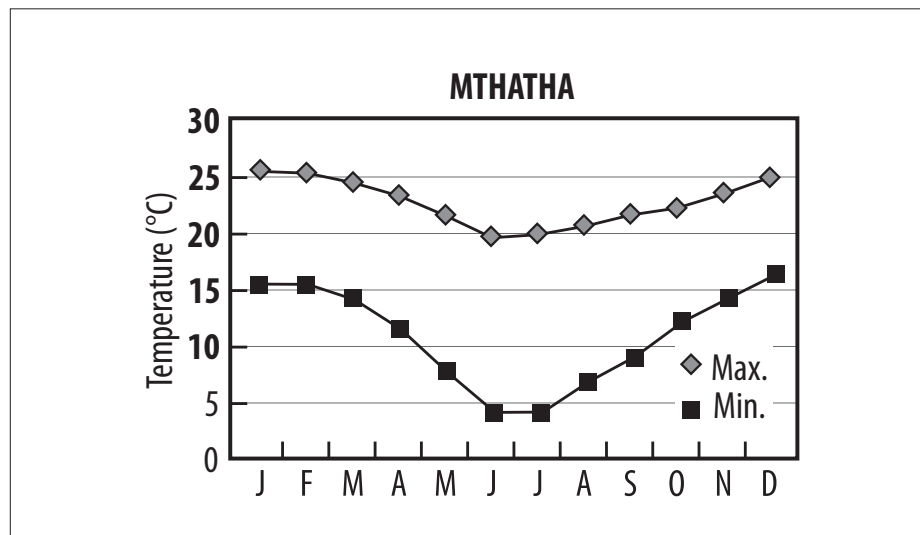
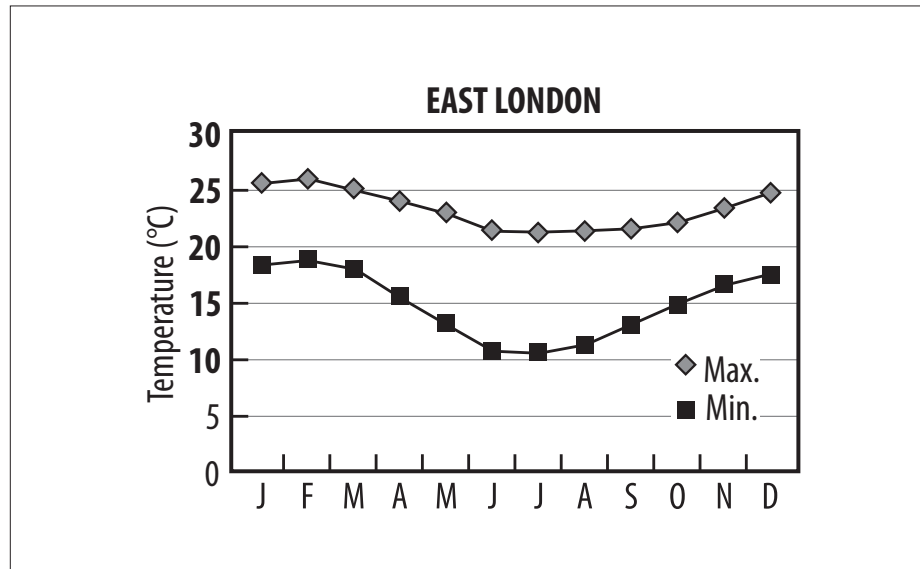


Activity 5 (Learner's Book, page 47)

1. a. 0°
b. 30° N and S
2. a. 0° ; also 60° N and S
b. 30° N and S; also 90° N and S
3. a. Converging air masses push against each other and are forced to rise. For condensation to take place, air must rise and cool.
b. Sinking air warms and dries as it descends; for this reason, clouds do not form.
4. equinox

Activity 6 (Learner's Book, page 48)

1.



2. East London is situated on the coast and Mthatha is inland. For East London, the minimum and maximum temperature plots are closer together than they are for Mthatha, showing that the minimum-maximum temperature range is smaller. The biggest temperature difference for both cities is in winter. For East London, the difference in July temperatures is 11 °C (21–10), while for Mthatha, it is 17 °C (21–4). East London, which is situated on the coast, experiences the moderating effect of the ocean.

Activity 7 (Learner's Book, page 49)

- rain in winter, dry summer; mild winters
 - warm summers and cold winters; generally dry (note: a subtropical climate = dry mid-latitude climate)
- The cold Benguela Current inhibits high evaporation; the cold-water Atlantic air masses don't hold much moisture.

3. The inland parts of South Africa (in the northeast) are elevated on the plateau; although they are nearer to the equator, their high altitude makes them cooler than they would otherwise be.
4.
 - *Western Cape*: Mediterranean: warm, dry summers and mild, wet winters
 - *Eastern Cape*: part subtropical, part Mediterranean
 - *Free State*: summer rain, very cold, clear winters
 - *Northern Cape*: semi-desert; some parts fall in winter rainfall area
 - *North West Province*: hot and dry
 - *KZN*: coast is subtropical with colder temperatures inland; summer rain; relatively high rainfall
 - *Gauteng*: rainy summer season with afternoon thunderstorms; clear, crisp winters
 - *Limpopo*: subtropical with high summer temperatures
 - *Mpumalanga*: subtropical; rainfall in summer

Activity 8 (Learner's Book, page 53)

1. west (1)
2. (North) Equatorial (1)
3. trade wind/tropical easterlies (1)
4. warm air rises over warm water; air convergence takes place here (2)
5. cool air sinks over cooler water; air subsidence takes place here (2)
6.
 - a. a water temperature slope/gradient (1)
 - b.
 - i. La Niña (1)
 - ii. El Niño (1)

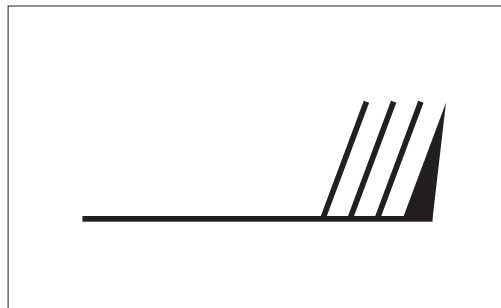
[10]

Activity 9 (Learner's Book, page 53)

1. The name means Christ Child, because El Niño strikes around Christmas time.
2. summer
3. El Niño blocks the cold upwelling of nutrient-rich water which encourages the growth of phytoplankton – a key source of food for fish populations, such as sardines. During La Niña, the cold upwelling of water is stronger than usual.
4. hotter, drier summers than usual; sometimes droughts
5. milder and wetter summers than usual; sometimes floods

Activity 10 (Learner's Book, page 55)

1. $9 \text{ km}\cdot\text{h}^{-1}$ ($5 \times 1,8 \text{ km}\cdot\text{h}^{-1}$)
2.
 - a. 41–55 knots
 - b. $73,8\text{--}99 \text{ km}\cdot\text{h}^{-1}$
 - c. This is the windspeed symbol for 80 knots:



Activity 11 (Learner's Book, page 55)

1. These are the unmanned/automatic weather stations.
2. Temperatures for the summer map are generally higher; summer temperatures for Upington and Pretoria are 40 °C and 35 °C respectively; winter temperatures are 22 °C and 19 °C, respectively.
3.
 - a.
 - i. 22 °C and 14 °C; difference = 8 °C
 - ii. 34 °C and 22 °C; difference = 12 °C
 - b. The Atlantic Ocean has a moderating effect on Walvis Bay's temperatures; Walvis Bay is colder than it would otherwise be because of the cold Benguela Current.
4.
 - a. subpolar high
 - b. It has shifted northwards (now lies up near Namibia and Angola); this is because the ITCZ has shifted north in winter.

Informal assessment**Activity 1**

- Go through the answers with the class. Write up the completed table on the board.

Activity 2

- Go through the answers with the class. Ask learners to offer answers.

Activity 3

- Go through the answers with the class. Ask learners to offer answers.

Activity 4

- Peer and self assessment. Learners compare each group's graphs which are displayed in the classroom.

Activity 5

- Ask learners to swap books with a partner and check each other's work as you go through the answers with the class.

Activity 6

- Plot the graphs on the board.

Activity 7

- Go through the answers with the class. Ask learners to offer answers.

Activity 8

- Ask learners to swap books with a partner and check each other's work as you go through the answers with the class.
- If you choose, you can ask learner's to mark the answers according to the mark allocation given in the Answers section. Ask those learners who got less than 7/10 for the activity to do the remedial activity (see the Remedial section on page 43).

Activity 9

- Go through the answers with the class. Ask learners to offer answers.

Activity 10

- Ask learners to swap books with a partner and check each other's work as you go through the answers with the class. Draw the answer for (2c) on the board.

Activity 11

- Ask learners to swap books with a partner and check each other's work as you go through the answers with the class.

Remedial/extension

Remedial:

- Ask learners to complete Worksheet 5 (page 277) in the Resources section of this Teacher's Guide.
- For learners who struggled with Activity 8, ask them to complete Worksheet 6 (page 279) in the Resources section of this Teacher's Guide.

Extension:

- Ask learners to look at this site on El Niño and La Niña, which has an Australian bias: www.abc.net.au/science/slab/elnino/story.htm
- Ask very advanced learners to look at this paper on the influence of La Niña on rainfall in Africa: <http://128.186.98.10/people/nicholson/papers/lanina.pdf>

Learner's Book
pages 58–72
Duration: 8 hours

UNIT 4

Droughts and desertification

TERM 1, WEEKS 6–7

Curriculum and Assessment Policy Statement (CAPS) content

Droughts and desertification

- Areas at risk: regional and local scales
- Causes of droughts
- Causes of desertification
- Effects of droughts and desertification on people and the environment, such as differences in vulnerability
- Management strategies – case studies

Resources

- Learner's Book pages 58–72
- Websites (optional)
 - <http://saweatherobserver.blogspot.com/2010/01/eastern-cape-dam-levels>
 - html links to GIS interactive map, that marks dams in Eastern Cape – can check current dam levels. (SA Weather Disaster Information Service)

Preparation

- Read through the unit and familiarise yourself with the content that you will need to teach. Think about what the learners may already know about the topics and any areas of difficulty that you think they might encounter.

Teaching the unit



Lesson 1

- Read through, or ask learners to read through, the introductory paragraph.
- Work through the section, 'What is drought?' (page 58). Begin by asking learners for their definitions of drought.

- Work through the section, ‘What is desertification’ (page 59). Begin by asking learners for their definitions of desertification.
- Work through the section, ‘Which areas of the world are most at risk of drought and desertification?’ (page 59). Focus on the map in Figure 1.4.3 and emphasise that with climate change, drought and desertification is a real threat to some parts of sub-Saharan Africa.
- Begin the section, ‘Areas at risk – regional and local scales’ (page 60). To distinguish between regional and local, give examples: the Sahel is a region in Africa; the Succulent Karoo and Nama Karoo are regions in South Africa; a province is a region, but a town district or a small area within a region is a local area.

» Lesson 2

- Focus on the two case studies, ‘The threat to the Sahel’ (page 60) and ‘How big is the risk of desertification in the Succulent Karoo and the Nama Karoo?’ (page 62).
- Point out that the region of the Sahel is not clearly/absolutely defined.

Activity 1

- Read the feature, ‘The threat to the Sahel’ (page 60).
- Do this activity with the class. Work through the questions and answers together.

Activity 2

- Read the feature, ‘How big is the risk of desertification in the Succulent Karoo and the Nama Karoo?’ (page 62).
- Learners answer questions on this feature. They can do this activity for homework.

» Lesson 3

- If learners did Activity 2 for homework, go through the answers with the class.
- Work through the section, ‘What are the causes of droughts?’ (page 64). Point out that there is a human element to the causes of drought. Remind learners of the link between El Niño events and droughts in Africa, although El Niño events don’t always trigger droughts.
- Work through the section, ‘What are the causes of desertification?’ (page 64).

Activity 3

- Read the feature, ‘Overgrazing by ostriches’ (page 65).
- Learners answer questions on this feature.

» Lesson 4

- Begin the section, ‘What are the effects of drought and desertification on people and the environment?’ (page 66).
- Work through the section on the impact on the environment. Make this analogy: the Earth’s soil is like a skin.
- Point out that soil salination can also contribute to desertification. Soil salination is caused by irrigation in dry areas. Fast evaporation draws minerals and salts from the water table towards the soil surface. This forms a crusty layer, which then blocks the seepage of water into the soil.

- Refer to the interest box on USA. These grasslands were ploughed and planted with wheat and maize; farmers also reared cattle. During the time of the drought, a gale swept away most of the region's top soil. Farmers and farmworkers abandoned the region.

Activity 4

- Read the feature, 'China puts up a green wall to stop a yellow dragon' (page 67). Point out that the Gobi Desert is the third largest desert in the world.
- Learners answer questions on this feature.

» Lesson 5

- Work through the section, 'Impact of drought and desertification on people' (page 68).
- Point out that rainfall variability is a real challenge for subsistence farmers in semi-arid regions.
- Ask learners for their suggestions why developing countries are more vulnerable. Point out that poverty puts pressure on land resources because people rely heavily on the land.

Activity 5

- This activity is a class discussion. It gives learners an opportunity to express opinions and pose questions.

» Lesson 6

- Work through the section, 'What are some strategies for managing droughts and desertification effectively?' (page 69).

Activity 6

- Read the feature, 'The United Nations Convention to Combat Desertification' (page 70).
- Learners answer questions on this feature.

» Lesson 7

- Focus on the first two case studies on drought and desertification management strategies.

Activity 7

- Read the case studies, 'Lessons from the drought of the 1980s and 1990s in South Africa' (page 70) and 'Drought risk management in Malawi and Ethiopia' (page 71).
- Learners answer questions on these case studies.

» Lesson 8

- Continue and complete the case studies on drought and desertification management strategies.

Activity 8

- Read the case study, 'The Thuo-Boswa Landcare Cattle Project in the North-West province' (page 72).
- Learners answer questions on this case study.

Answers

Activity 1 (Learner's Book, page 62)

1. The Sahel is on the edge of the Sahara Desert, like the shoreline on the edge of the sea.
2. Guinea-Bissau, Senegal, Mauritania, Mali, Burkina Faso, Algeria, Niger, Chad, Sudan
3. a. negative
b. A 40 year period of drought/below-average rainfall with above-average rainfall in three or four years only.
4. the warming of the Indian Ocean
5. the harvesting of wood/trees for fuel; the restriction of nomadic herders to villages; overgrazing by livestock
6. a. wood harvesting; overgrazing
b. population and resource pressure

Activity 2 (Learner's Book, page 64)

1. *dryland*: a region where rainfall is low and evaporation is high, which means the soil is dry (1)
biome: the complex relationship between the climate and vegetation of a region, as well as the animals that inhabit it (1)
biodiversity: the range of plant and animal species (1)
2. a. Western Cape, Northern Cape (2)
b. Namibia (1)
3. Any two: mining; stock farming/overgrazing; crop farming/agriculture (2)
4. invasion of natural veld by foreign plant species; accumulation of salt in the soil (from irrigation); soil erosion (3)
5. a. Succulent Karoo (1)
b. high density/population (1)
c. It is limited to towns that are commercial farming regions. (1)

[14]

Activity 3 (Learner's Book, page 65)

1. *overgrazing*: the practice of allowing grazing animals to feed intensively on the vegetation without giving it a chance to grow back or recover
overstocking: the practice of raising more livestock animals than the land can support
2. Ostriches scratch, dig, nest, continually forage – in other words, in high numbers they are pretty destructive!
3. Ostrich farmers are learning the importance of finding a balance between use and conservation of natural veld.

Activity 4 (Learner's Book, page 68)

2. Yellow Asian dust from the Gobi Desert that is blown from the northwest every spring.
3. westerlies
4. Farmers and herders depend on the land for their food and income.
5. It is an extensive forest belt that is being planted on the desert margins in an attempt to prevent the Gobi Desert from spreading.
6. ban ploughing; check overgrazing

Activity 5 (Learner's Book, page 69)

Here are some examples:

1. The poor are the causes of desertification in these ways:
 - They deplete the land of trees and vegetation – by cutting down trees for fuel or allowing overgrazing. With loss of vegetation there is loss of topsoil and land degradation.
 - As a generalisation, the poor tend to have more children than the rich. The poor contribute to population growth, and population growth puts pressure on the land.

The poor are the victims of desertification in these ways:

- They are heavily dependent on the land. When the land fails to support them, they are badly affected.
 - Desertification leads to other social problems. Because the poor have few resources or options, they are always the hardest hit.
2. Developed countries are responsible for desertification in these ways:
 - The contribution of developed countries to global warming and climate change is high. Climate change can make drought periods in dry regions longer and more intense. Drought contributes to desertification.
 - One can argue that in a capitalist society/economy, the rich are rich at the expense of the poor, and to a certain degree, developed countries are rich at the expense of developing countries. For example, multinational companies make use of cheap labour in developing countries.

Activity 6 (Learner's Book, page 70)

1. about 14%, i.e. 1/7 billion
2. The slogan encompasses cause and effect. The verb 'desert' is used with two meanings: a) to turn into desert-like land by degrading it; and b) to desert the land – to abandon it.
3. United Nations Environment Programme

Activity 7 (Learner's Book, page 72)

1. It focused on emergency relief rather than reducing the risk of drought.
2. The use of boreholes can significantly lower the water table – reducing ground water supplies and triggering infiltration by salt water (if the region is near the sea). The setting up of boreholes can encourage informal settlements.
3. setting up early-warning systems; identifying those who are most vulnerable to the effects of drought/prioritising assistance; reducing the risk of drought
4. The government is insuring against low rainfall.
5. It has developed a social-protection scheme that pays communities to build their own water-harvesting systems.

Activity 8 (Learner's Book, page 72)

1. rehabilitation
2. grazing areas were fenced and given a long enough rest period to allow grass to grow back/recover
3. small actions/simple remedial measures can often make a difference and inspire others

Informal assessment

Activity 1

- Go through the answers with the class. Ask learners to offer answers.

Activity 2

- Go through the answers with the class. Ask learners to offer answers.
- If you choose, you can ask learner's to mark the answers according to the mark allocation given in the Answers section. Ask those learners who got less than 10/14 for the activity to do the remedial activity (see the Remedial section below).

Activity 3

- Go through the answers with the class. Ask learners to offer answers.

Activity 4

- Go through the answers with the class. Ask learners to offer answers.

Activity 5

- Assess learners' engagement in the discussion and ability to express an opinion or argue a point of view.

Activity 6

- Go through the answers with the class. Ask learners to offer answers.

Activity 7

- Go through the answers with the class. Ask learners to offer answers.

Activity 8

- Go through the answers with the class. Ask learners to offer answers.

Remedial/extension

Remedial:

- Ask learners who had difficulty with this unit (for example, Activity 2) to go through the mind map in Figure 1.4.11 on page 64 in the Learner's Book and define or explain each of the underlined terms.

Extension:

- Ask learners to write a one-page essay on desertification.

This fieldwork task is linked to the content of Module 1, Unit 2. Here is an example of how learners could present their wind data:

Wind data for Cape Town

Date	Wind direction	Estimated wind speed
4/03/2013	SE	16–20 knots
5/03/2013	W	1–2 knots
6/03/2103	NW	11–15 knots
7/03/2013	SE	27–33 knots
8/03/2013	SE	16–20 knots
11/03/2013	W	3–6 knots
12/03/2013	N	3–6 knots
14/03/2013	S	1–2 knots
15/03/2013	SE	11–15 knots
16/07/2013	SE	3–6 knots

- Prevailing wind for this two week period: SE.
- Average wind speed = 16–20 knots + 1–2 knots + 11–15 knots + 27–33 knots + 16–20 knots + 3–6 knots + 3–6 knots + 1–2 knots + 11–15 knots + 3–6 knots = 92–125 knots ÷ 10 = 9,2–12,5 knots

For information on how to assess the learners' completed tasks, please see pages 191–193 of this Teacher's Guide.

	MODULE 2	
TERM 1 Learner's Book pages 76–108 Duration: 6 hours	THE ATMOSPHERE: GEOGRAPHICAL SKILLS AND TECHNIQUES	

This module focuses on geographical skills and techniques pertaining to the atmosphere.

It is unlikely that you will be pressured for time as you work through the units in this module. You can make good use of the extension and remedial activities to reinforce the content.

Curriculum and Assessment Policy Statement (CAPS) content

Aerial photographs and orthophoto maps

- Oblique and vertical aerial photographs – identifying landforms and features
- Use of tone, texture and shadow in the interpretation of photos
- Orthophoto maps – identifying features
- Orienting aerial photographs and orthophoto maps with another map

Geographical and Information Systems (GIS)

- Satellite images
- Application of GIS to climatology and meteorology

Key geographical skills and techniques

- using verbal, quantitative and symbolic data forms such as text, pictures, graphs, tables, diagrams and maps
- practising field observation and mapping, interviewing people, interpreting sources, working with statistics
- applying communication, thinking, practical and social skills
- practising the following specific skills
 - identifying questions and issues
 - collecting and structuring information
 - processing, interpreting, and evaluating data
 - making decisions and judgements
 - deciding on a point of view
 - suggesting solutions to problems
 - working co-operatively and independently

Key words/concepts

aerial photograph; horizontal photograph; orthophoto map; feature; landform; tone; texture; shadow; topographical map; distance; area; vertical exaggeration; gradient; position; relief; contour; Geographical and Information Systems (GIS); spatial data; remote sensing; sensor; electromagnetic radiation; passive sensor; active sensor; satellite image; spectral resolution; climatology; meteorology; geopotential; vorticity

Curriculum and Assessment Policy Statement (CAPS) content

Aerial photographs and orthophoto maps

- Oblique and vertical aerial photographs – identifying landforms and features
- Use of tone, texture and shadow in the interpretation of photos
- Orthophoto maps – identifying features
- Orienting aerial photographs and orthophoto maps with another map

Resources

- Learner's Book pages 77–87
- Websites (optional)
 - For information on oblique and vertical aerial photographs:
http://www.geog.ucsb.edu/~jeff/115a/lectures/geometry_of_aerial_photographs_notes.html
 - For information on the use of tone, texture and shadow in the interpretation of photos:
http://books.google.co.za/books?id=rmiPV3ABi9EC&pg=PA104&lp_g=PA104&dq=*+use+of+tone,+texture+and+shadow+in+the+interpretation+of+photos&source=bl&ots=7a_Jey06BD&sig=Ifn1XL0m5ek0AHyihrxYJN-20Zk&hl=en&sa=X&ei=u-wJT6PYIYuXhQe2vLStCQ&ved=0CC8Q6AEwBA#v=onepage&q&f=false
 - For information on orthophoto maps and identifying features:
<http://www.maptown.com/referencemaptypes.html>

Preparation

- Read through the unit and familiarise yourself with the content that you will need to teach. Think about what the learners may already know about the topics and any areas of difficulty that you think they might encounter.

Teaching the unit



Lesson 1

- For the first five minutes of the lesson brainstorm with learners to find out what they know about oblique and aerial photographs and the identification of landforms and features. Allow for discussion. Always allow for an open-forum teaching approach. Both teacher and learner input should be respected.
- Facilitate the lesson by explaining and informing learners about oblique and aerial photographs – landforms and features.
- With the learners, work through the section, 'What are oblique and vertical aerial photographs?' (page 77). Emphasise that an orthophoto map is a vertical aerial photograph.
- Draw attention to Table 2.1.1 'Advantages and disadvantages of aerial photographs' (page 79).

- Draw attention to how landforms and features are shown on oblique and vertical aerial photographs.
- Refer to the glossary box definition of landforms (page 79). It explains that landforms are physical features that are represented by different contour patterns on a map.

Activity 1

- Allow learners to start the activity in class in case they need to ask questions about the activity.
- Facilitate the activity by helping those learners who need help.
- Learners should finish the activity for homework.

» Lesson 2

- Go through the answers to Activity 1 with the class.
- For the next five minutes of the lesson, brainstorm with learners to find out what they know about the use of tone, texture and shadow in the interpretation of photos.
- Work through the section, 'How are tone, texture and shadow used in the interpretation of photos?' (page 80).
- Emphasise that tone refers to the colour of features on a map or photograph. Pay particular attention to the information on the tone of black and white photographs as this will help learners to better interpret photographs.
- Point out that Figure 2.1.5 illustrates texture on a high oblique aerial photograph.

Activity 2

- Allow learners to start the activity in class.
- Facilitate the activity by helping those learners who need help.
- Learners may refer to Module 6 to find out more about direction, if they need to.
- Learners should finish the activity for homework.

» Lesson 3

- Go through the answers to Activity 2 with the class.
- For the next five minutes of the lesson, brainstorm with learners to find out what they know about orthophoto maps and identifying features.
- Work through the section, 'What are the identifying features of orthophoto maps?' (page 82).
- Focus on the information on how features are identified on orthophoto maps.
- Refer to Figure 2.1.8 which shows map symbols used on a topographical map to show features.

Activity 3

- Allow learners to start this activity in class.
- Facilitate the activity by helping those learners who need help.

» Lesson 4

- Go through the answers to Activity 1 with the class.
- For the next five minutes of the lesson, brainstorm with the learners to find out what they know about orientating aerial photographs and, topographical and orthophoto maps.

- Work through the section, 'How do we orientate aerial photographs, orthophoto maps and topographical maps?' (page 84). Focus on Figures 2.1.9, 2.1.10 and 2.1.11 of Diepsloot. Point out how the three maps differ.

Activity 4

- Allow learners to complete the activity in class and then go through the answers with them.

Answers

Activity 1 (Learner's Book, page 79)

1. Oblique aerial photograph: taken with the camera slanted at an angle to the Earth's surface.
2. physical features are easily identified; relative height between certain features are shown
3. vertical aerial photograph
4. Any of the following: drawn to scale; accurate measurement of distance; position and relief; used for planning and development (GIS spatial planning)

Activity 2 (Learner's Book, page 81)

1. This is a black and white photograph so tone is reflected by different shades of grey. The darker an object appears, the less amount of light it reflects. Water masses in this photograph are therefore reflected in a very dark shade of grey.
2. Industrial purposes. Large buildings can be identified and the distance between buildings is greater.

Activity 3 (Learner's Book, page 84)

1. An orthophoto map provides a bigger version that zooms in on a specific area on a topographical map.
2. Map symbols are signs used on orthophoto maps that represent features found in reality.
3. Contour patterns show the various types of landforms on orthophoto maps.

Activity 4 (Learner's Book, page 84)

1. Any two: contour lines; spot heights; trig. beacons are found on an orthophoto map and not on a vertical aerial photograph.
2. Tone, texture and shadow are used to identify landforms and features on an aerial photograph.
3. 14 July 1977
4. Maps are drawn to scale to represent geographical features in their true ground position.
5. Scale of the orthophoto map = 1:20 000. Scale of the topographical map = 1:50 000.
6. Orthophoto maps are drawn to a bigger scale, therefore they provide a bigger version that zooms in on a specific area on a topographical map.

Informal assessment

Activity 1

- Go through the answers with the class. Encourage learners to offer answers.

Activity 2

- Go through the answers with the class.
- Encourage learners to give answers.
- Allow learners to check their peers' answers.

Activity 3

- Go through the answers with the class.
- Encourage learners to offer answers in an open forum.

Activity 4

- Allow learners to mark their peers' work.
- Go through the answers with the class.
- Ask those learners who got less than 50% for the activity to do the remedial activity below.

Remedial/extension

Remedial:

For learners who need extra practice with the concepts in this unit let them complete Worksheet 7 (page 280) in the Resources section of this Teacher's Guide. This worksheet can also be used for revision purposes.

Learner's Book
pages 88–100
Duration: 2 hours

UNIT 2

Geographical and Information Systems (GIS)

TERM 1, WEEK 9

Curriculum and Assessment Policy Statement (CAPS) content

Geographical and Information Systems (GIS)

- Satellite images
- Application of GIS to climatology and meteorology

Resources

- Learner's Book pages 88–100
- Websites (optional):
 - For information about GIS applications in Climate and Meteorology:
<http://proceedings.esri.com/library/userconf/proc00/professional/papers/PAP159/p159.htm>
 - For information about application of GIS to climatology and meteorology – books:
<http://www.iste.co.uk/index.php?f=a&ACTION=View&id=152>

Preparation

- Read through the unit and familiarise yourself with the content that you will need to teach. Think about what learners may already know about the topics and any areas of difficulty that you think they might encounter.

Teaching the unit

» Lesson 1

- With the learners, work through the sections, 'What are the functions of Geographical and Information Systems (GIS)?' (page 88) and 'How does remote sensing work?' (page 89). Allow learners to ask questions.
- Work through the section, 'How are satellite images used and interpreted?' (page 90). Concentrate on how the elements of shape, size, tone and patterns help us to decode satellite images.
- Point out the importance of 'spectral resolution' to tone.
- Highlight the differences between Figure 2.2.5 and Figure 2.2.6.
- Go through Activities 1 to 3 so that the learners can begin them in class and then work through them at their own pace. They will need to complete these activities as homework if they are unable to finish in class.

Activity 1

- Allow learners to start the activity in class.
- This activity focuses on the importance of the different processes of satellite images for GIS.

Activity 2

- Help learners to differentiate between shape, size and tone.

Activity 3

- Encourage learners to look at Figure 2.2.8 as an example of how land-cover textures are derived from satellite images to create texture on a map.
- Help learners to understand and see the different textures on the map.

» Lesson 2

- Go through the answers to Activities 1 to 3 with the class.
- Work through the information on how pattern and shadow help us to decode satellite images.
- For the next five minutes of the lesson, brainstorm with the learners to find out what they know about the use of application of GIS to climatology and meteorology.
- With the learners, work through the section, 'How are Geographical and Information Systems (GIS) applied to climatology and meteorology?' (page 96).
- Point out Figure 2.2.11 which is a (GIS) model and precipitation over parts of South Africa.
- Point out Figure 2.2.12 A and B which shows the minimum and maximum temperatures of South Africa.
- Point out Figure 2.2.13 which shows expected storms over parts of the country.

Activity 4

- Allow learners to begin the activity in class and then complete it as homework.
- Help learners to understand and interpret Figure 2.2.13.
- Ask learners to finish the activity for homework.

Activity 5

- Allow learners to begin the activity in class and then complete it as homework.
- This is a case study. Allow learners to read it for themselves.

Answers

Activity 1 (Learner's Book, page 91)

1. sensing objects or events at remote places; observing data (objects or events); recording the data
2. Data is collected from a distance. This is called encoding. Encoding includes the inputting of satellite imagery. Decoding is the opposite or reverse process of encoding. It is the conversion of an encoded format back into the original information.
3. An active sensor is a satellite which sends out its own radiation towards the Earth's surface. A passive sensor is a small sensor on a satellite which measures and records radiation which is reflected from the Earth.
4. radar
5. A satellite image is a photograph of the Earth taken from space.

Activity 2 (Learner's Book, page 93)

1. Natural water bodies are irregular in shape, while most human-made water bodies have a definite shape, such as rectangular or circular.
2. Size includes length, width, height and area. A satellite image or map may show absolute or relative sizes.
3. The tone refers to the colours of features in the satellite image.
4. In a true-colour image, the original colour of an image is reflected. In a false-colour image, colour is changed.

Activity 3 (Learner's Book, page 93)

1. Texture is often referred to as coarse and fine, or smooth.
2. Texture is created on a GIS image by using texture technique.
3. Texture shows us how the landscape looks in real life.

Activity 4 (Learner's Book, page 99)

1. from 6 June to 8 June 2011
2.
 - the Eastern Cape is surrounded by a high pressure cell; warm weather
 - the North West is affected by a low pressure cell; very cold weather conditions
3. The black contour lines indicate the pressure systems.
4. gale force weather and thunderstorms
5.
 - the red shading illustrates warm weather; the weather ranges between 2 and 12; the numbers between 6 and 12 illustrates very warm weather.
 - the blue shading illustrates stormy and cyclonic weather; the darker the blue, the stronger the storms
6. It is very effective as it illustrates the weather in colour. It shows the severity of the weather conditions.
7. The GIS models used are very effective. They give a clear indication of the weather experienced in Africa.

Activity 5 (Learner's Book, page 100)

1. drought-stricken Africa
2. Kenya, Djibouti, Ethiopia, Somalia
3. barren land or soil erosion
4. NASA
5. NASA satellite tracked the severity of an African drought

Informal assessment

Activity 1

- Go through the answers with the class. Ask learners to offer answers.

Activity 2

- Allow learners to mark their peers' work.
- Go through the answers with the class.

Activity 3

- Go through the answers with the class. Ask learners to offer answers.

Activity 4

- Go through the answers with the class. Encourage learners to offer answers. Informally assess learners by observing them to see whether they could apply themselves to the different maps they used. This will reveal whether learners understood the concepts in this unit.

Activity 5

- Go through the answers with the class. Encourage learners to offer answers. Allow learners to swap work to check for plagiarism (learners are not allowed to copy chunks of work from extracts).

Remedial/extension

Remedial:

- Give learners more practice with weather pattern maps.
- Allow learners more opportunities to contrast and compare GIS weather maps showing different pressure systems.

These activities provide an opportunity for learners to consolidate concepts and skills learnt in Term 1. Learners can complete them in class or as homework. It is suggested that they complete the activities individually as a means of self-assessment.

You can write the answers on the board for the learners and/or call them out where more appropriate. However, if possible, it is suggested that you photocopy the answers and give them to the learners so that they have them for revision purposes.

Activity 1 (Learner's Book, page 101)

1. *insolation*: incoming sunlight/the energy the Earth receives from the Sun
equinox: the time at which both hemispheres receive equal insolation
solstice: the time at which one hemisphere receives maximum insolation and the other receives minimum insolation
2. 30°S
3. a. 0°S
b. 90°S
c. At the time of the equinoxes, the Sun is directly overhead/over the equator.
d. i. approximately 400 W·m⁻², i.e. 400–0
ii. approximately 0–100 W·m⁻², i.e. 400–400 for November and February and 500–400 for December
4. The Earth is a sphere/ball-shaped. The Earth's axis is tilted at 23,5°.
5. a. *convection*: hot air/water rises and cool air/water sinks, forming a convection loop
b. *ocean currents*: warm surface water at the equator flows towards the poles; cold surface water at the poles flows towards the equator
c. *winds/global air circulation*: warm air and cold air is circulated in each hemisphere in three air convection cells

Activity 2 (Learner's Book, page 102)

1. 1 = ITCZ/equatorial low; 2 = subtropical high; 3 = subpolar low; 4 = polar easterlies; 5 = westerlies; 6 = tropical easterlies/trade winds; 7 = polar cell; 8 = Ferrel cell; 9 = Hadley cell
2. a. high, low
b. left
c. equal and opposite

Activity 3 (Learner's Book, page 102)

1. A = La Niña; B = El Niño
2. a. Pacific Ocean; b. equatorial current; c. equatorial counter current; d. trade winds; e. Walker circulation
3. The low pressure system forms over the western tropical Pacific region; the eastern side of Africa and other parts of Africa become wetter than usual and storms are more severe.

4. The low pressure system forms over the central tropical Pacific region; the eastern side of Africa is warmer and drier than usual.

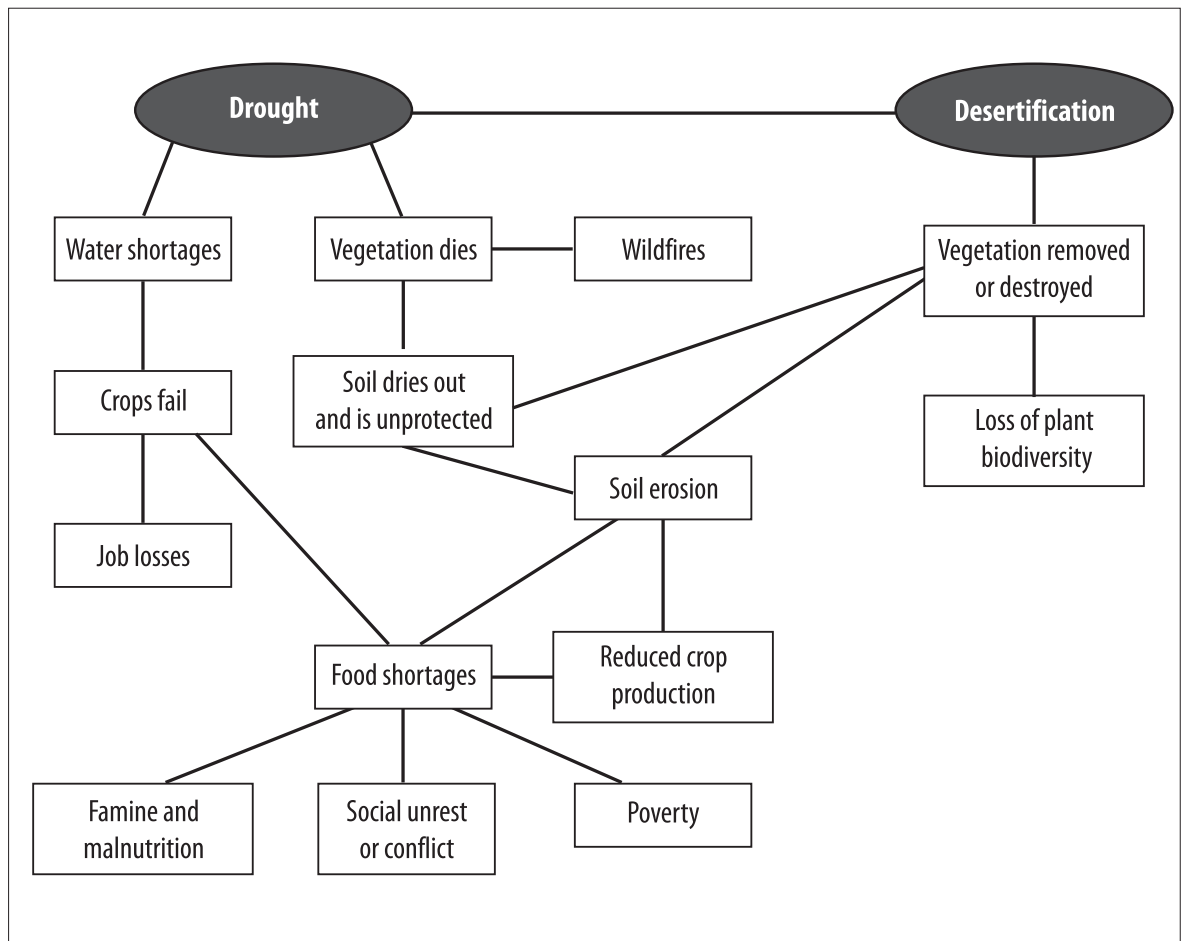
5. a.

	Temperature	Dew point	Cloud cover	Wind direction and speed
Cape Town – winter	17	11	none/clear	NW, 15 knots
Cape Town – summer	26	6	four eighths	SW, 15 knots
Harare – winter	23	4	four eighths	SW, 10 knots
Harare – summer	30	11	cloudy/eight eighths	SW, 10 knots

- b. i. Mediterranean/fynbos – dry summers and mild, wet winters
 ii. wet-dry tropical/savanna – semi-dry with seasonal rain

Activity 4 (Learner’s Book, page 103)

1. *drought*: a long period of below-average rainfall
desertification: land degradation of drylands that results in loss of biodiversity and land productivity
dryland: a region where the water content of the soil is low
- 2.



Activity 5 (Learner's Book, page 103)

1. High angle oblique aerial photograph – the camera is at a 60° angle to the vertical line.
2. Physical features are easily identified; the relative height between certain features is shown.
3. A high angle oblique aerial photograph is used to show the features of a particular place on the Earth's surface. It always shows the horizon and gives us a view of a specific area.
4. a. Agulhas current
b. East London has warm and humid weather with high rainfall due to high levels of evaporation.

Activity 6 (Learner's Book, page 104)

1. The orthophoto map is drawn on a 1:20 000 scale and the topographical map is drawn on a 1:50 000 scale. The orthophoto map is therefore drawn on a bigger scale and shows a larger view of the Earth's surface with more detail than the topographical map.
2. Landforms are illustrated on the orthophoto map with darker shades. The steeper the landform, the darker the shade or tone on the orthophoto map.
3. Nahoon Valley Park is a valley. A valley is a low-lying area surrounded by a spur. Contour lines are used to illustrate the valley on the topographical map and orthophoto map. The contours in a valley are V-shaped and point upslope towards higher land. Contours in a spur are V-shaped and point downslope towards lower land.
4. The climate in a valley is warm during the day and very cold at night. People therefore usually settle on the upper north facing slopes of valleys.
5. 20 m
6. Southeast. The contour lines are decreasing in a southeasterly direction. Rivers always flow towards the ocean.
7. Perennial. The river is represented with a continuous blue line.
8. spot heights; trig. beacons; benchworks
9. A is an industrial area. B is a residential area.

Activity 7 (Learner's Book, page 104)

1. high pressure cells; low pressure cells
2. Yes, low pressure cells indicate that cold fronts are approaching; and high pressure cells indicate warm weather.
3. three fronts
4. warm front brings warm weather; cold front brings cold weather

Activity 8 (Learner's Book, page 104)

1. >800 mm
2. inland
3. more dark blue areas are displayed inland
4. 400 mm–600 mm

	MODULE 3	
TERM 2 Learner's Book pages 110-162 Duration: 20 hours	GEOMORPHOLOGY: GEOGRAPHICAL KNOWLEDGE	

This module focuses on geomorphology – the study of landforms and landscapes.

It is unlikely that you will be pressured for time as you work through the units in this module. You can make good use of the extension and remedial activities to reinforce the content.

Curriculum and Assessment Policy Statement (CAPS) content

Topography associated with horizontally layered rocks

- Characteristics and processes associated with the development of: hilly landscapes, basaltic plateaus, canyon landscapes and Karoo landscapes (mesa, butte and conical hill)
- Concept of scarp retreat or back wasting
- Utilisation of these landscapes by people

Topography associated with inclined/tilted rock strata

- Characteristics and processes associated with the development of: a scarp slope, a dip slope, a cuesta, homoclinal ridge, hogsback, cuesta basin and cuesta dome
- utilisation of these landscapes by people

Topography associated with massive igneous rocks

- Identification of batholiths, laccoliths, lopoliths, dykes and sills
- Characteristics and processes associated with the development of granite domes and tors

Slopes

- Overview of South Africa's topography
- Types of slopes
- Slope elements: crest, cliff (scarp slope, free face), talus (debris, scree slope) and pediment
- Characteristics of the slope elements: crest, cliff, talus and pediment
- Slope development over time
- The concept of slope retreat

Mass movements and human responses

- Concept of mass movements
- Kinds of mass movements: soil creep, solifluction, landslides, rock falls and mud flows, and slumps
- The impact of mass movements on people and the environment
- Strategies to prevent or minimise the effects of mass movement – South African case studies

Key geographical skills and techniques

- using verbal, quantitative and symbolic data forms such as text, pictures, graphs, tables, diagrams and maps
- practising field observation and mapping, interviewing people, interpreting sources, working with statistics
- applying communication, thinking, practical and social skills
- practising the following specific skills:
 - identifying questions and issues
 - collecting and structuring information
 - processing, interpreting and evaluating data
 - making decisions and judgements
 - deciding on a point of view
 - suggesting solutions to problems
 - working co-operatively and independently

New words/concepts

geomorphology; uplift; weathering; mass wasting; erosion; strata; bedding plane; hilly landscape; sheetwash; peneplain; basaltic plateau; canyon landscape; mesa; butte; conical hill; pediplain; scarp retreat/back wasting; dome; basin; scarp slope; dip slope; dip; cuesta; homoclinal ridge; hog's back; cuesta dome; cuesta basin; igneous intrusion; batholith; laccolith; lopolith; dyke; sill; granite dome; exfoliation; joint; tor; core stone; topography; plateau; Great Escarpment; escarpment; coastal plain; crest; cliff; talus slope; pediment; knickpoint; slope retreat; slope decline; parallel retreat/scarp retreat; slope replacement; mass movement/mass wasting; regolith; soil creep; soil fluction/solifluction; permafrost; debris flow; mud flow; slump; landslide; rock fall; geohazard

Learner's Book
pages 111–125
Duration: 4 hours

UNIT 1 Topography associated with horizontally layered rocks

TERM 2, WEEK 1

Curriculum and Assessment Policy Statement (CAPS) content

Topography associated with horizontally layered rocks

- Characteristics and processes associated with the development of: hilly landscapes, basaltic plateaus, canyon landscapes and Karoo landscapes (mesa, butte and conical hill)
- Concept of scarp retreat or back wasting
- Utilisation of these landscapes by people

Resources

- Learner's Book pages 111–125
- Websites (optional)
 - For a 3-D surround view of the Drakensberg, see Wikipedia: en.wikipedia.org/wiki/Drakensberg
 - For information on the Molatse/Blyde River Canyon see:
 - kruger2canyons.com/travelguide/blydecanyon.php
 - www.naviguan.com/idea/motlatse
 - www.theworldwonders.com/africa/blyde-river-canyon.html

- For information on the Grand Canyon (suitable for advanced learners) see:
 - www.bobspixels.com/kaibab.org/geology/gc_geol.htm
 - www.nature.nps.gov/geology/parks/grca
- Books (optional)

Some useful books for this unit and the other units in this module are:

 - *Mountains of Southern Africa* by David Bristow and Clive Ward
 - *Geological Journeys* by Nick Norman and Gavin Whitfield (Struik)
 - *The Rocks and Mountains of Cape Town* by John S Compton (Double Storey)

Scout your school library, public library and second-hand bookstores for these books and others on South Africa's geology and mountains.

Preparation

- Read through the unit and familiarise yourself with the content that you will need to teach. Think about what the learners may already know about the topics and any areas of difficulty that you think they might encounter.

Teaching the unit

» Lesson 1

- Read through, or ask learners to read through, the Module 3 introductory paragraphs on page 110. Write up the four key ideas on the board.
- Read through, or ask learners to read through, the Unit 1 introductory paragraph on page 111. Emphasise, as the introduction does, that rivers shape all four types of landscape you will be looking at.
- Work through the section, 'How are landscapes formed?' on page 111. This section gives background and context for the module.
- Draw attention to Figure 3.1.1 which summarises three important factors in landscape formation.
- Draw attention to Figure 3.1.2 which shows how a river shapes a landscape. Point out that landscapes are formed by repeated cycles of building up and breaking down.
- Draw attention to Figure 3.1.3 which shows the difference between weathering, erosion and mass wasting.
- Point out that climate affects weathering. For example, in arid regions, resistant rocks are: quartzites, basalt, conglomerate and limestone. In humid regions, non-resistant rock is shale, slate and limestone.

Activity 1

- In this activity, learners list landscape building-up and breaking-down processes.
- Work through the section, 'What are rock strata?' (page 113). Emphasise the analogy of a layered cake: The sedimentary rock layers are like the cake; the igneous rock is like the icing in between the layers and on top.

Activity 2

- This is mainly a Grade 10 revision activity.
- Learners can finish this activity for homework if necessary.

» Lesson 3

- If learners finished Activity 2 for homework, go through the answers with the class.

- Work through the section, ‘What characteristics and processes are associated with the development of hilly landscapes and basaltic plateaus?’ (page 114).
- Focus on Figure 3.1.5 which shows the stages in the development of hilly landscapes.
- Focus on Figure 3.1.7 which shows the stages in the development of basaltic plateaus.
- Refer to Figure 3.1.8. Emphasise the large area that is covered by the plateau. Ask learners to compare the flat table-like top of this plateau with the flat top of the Drakensberg in Figure 3.1.9.
- Point out that the Drakensberg is a UNESCO World Heritage Site (see the Interest box and the feature on the Drakensberg on page 117). (The Drakensberg and the Vredefort Dome are South Africa’s two geological sites. See Unit 2, page 132 for a feature on the Vredefort Dome. See also the Extension activity for Unit 2 on page 71 of this Teacher’s Guide.
- Point out that Figure 3.1.10 (page 118) shows both the Drakensberg and the Valley of a Thousand Hills.

Activity 3

- Read the feature, ‘The mighty Drakensberg or *uKhahlamba* – the Barrier of Spears’ (page 117).
- In this activity, learners answer questions on the Drakensberg – an example of a basaltic plateau.

Activity 4

- Read the feature, ‘The Valley of a Thousand Hills: It inspires writers and challenges runners’ (page 118).
- In this activity, learners answer questions on the Valley of a Thousand Hills – an example of a hilly landscape.
- Learners can do this activity for homework.



Lesson 3

- If learners did Activity 4 for homework, go through the answers with the class.
- Work through the section, ‘What characteristics and processes are associated with the development of canyon landscapes and Karoo landscapes?’ (page 119).
- Focus on Figure 3.1.12 which shows how resistant rock forms the steep sides of the canyon and less resistant rock forms the gentler slopes. (This links to the feature on the angle of repose in Unit 4).
- Focus on Figure 3.1.13 which shows the stages in the development of canyon landscapes.
- Focus on Figure 3.1.15 which shows the landforms that make up a Karoo landscape.
- Work through the section, ‘What is scarp retreat?’ (page 122).

Activity 5

- Read the features, ‘The Fish River Canyon’ (page 122) and ‘The Three Sisters’ (page 123).
- In this activity, learners answer questions on the Fish River Canyon – an example of a canyon landscape – and the Three Sisters – an example of a Karoo landscape.
- Learners can do or finish this activity for homework.

- If learners did Activity 5 for homework, go through the answers with the class.
- Work through the section, ‘How do people use these landscapes?’ (page 123).
- Ask learners to suggest which of the four landscapes is most suitable for settlement. (Answer: hilly landscapes).
- Refer to the photos in Figure 3.1.21A–D to Figure 3.1.24A–D which illustrate a key use for each type of landscape.

Activity 6

- Ask learners to read through the four features again by themselves so as to understand their different stages of development and uses.
- In this activity, learners extract information from the features on the ways in which people used these landscapes.

Answers

Activity 1 (Learner’s Book, page 113)

1. *geomorphology*: the study of landscapes
weathering: the breakdown of rock by physical/mechanical, chemical and biological processes
erosion: the transport of broken down rock by wind, water or glaciers
mass wasting: the movement of sediment and rock debris downslope under the pull of gravity
2. a. weathering, erosion, mass wasting
 b. uplift, volcanic activity, folding, faulting

Activity 2 (Learner’s Book, page 114)

1. Sample table:

	Sedimentary rock	Igneous rock	Metamorphic rock
How it forms	from layers of sediment deposited on the sea floor	from molten magma (intrusive) or lava (extrusive)	from sedimentary or igneous rock that is heated and put under pressure
Examples	sandstone, shale, breccias, conglomerate, limestone, coal	intrusive: granite, gabbro, dolerite extrusive: rhyolite, basalt, pumice	quartzite, slate, gneiss, marble, anthracite

2. *strata*: layers of rock – usually sedimentary rock or metamorphosed sedimentary rock
cap rock: a layer of igneous rock that covers the top of sedimentary strata (it can be extrusive rock or intrusive rock that has become exposed, e.g. sills)
sill: a flat layer of igneous rock, sandwiched between other rock layers; it is formed by magma intrusion
contact metamorphism: the process in which the rock layers or part of the rock closest to the igneous intrusion are turned into metamorphic rock by the intense heat

Activity 3 (Learner's Book, page 118)

1. The break-up of Gondwanaland 180 million years ago triggered volcanic activity and a flood basalt. The Drakensberg is the eroded remains of a very thick layer of basalt that covered most of southern Africa. The joints in the basalt have produced the steep-sided blocks of the mountain.
2. a. basalt
b. sandstone
3. Lesotho
4. Any river that has its source in the Drakensberg. Two large, well-known ones are the Orange River and the Tugela/uThukela River.

Activity 4 (Learner's Book, page 119)

1. granite; gneiss
2. Mgeni/Umgeni River; Msundusi/Dusi River
3. Moist and warm. The high temperatures contribute to chemical and biological weathering. The high rainfall causes sheetwash erosion and mass wasting, which form the rounded hills.
4. The valleys will widen and the hills will flatten. In the long distant future, the area will become a flat plain that has been eroded down to sea level.
5. the hilly coastal regions of the Transkei

Activity 5 (Learner's Book, page 123)

1. Namibia
2. It is Africa's largest canyon and the second-largest canyon in the world.
3. a. sandstone
b. shale
4. United States of America, Arizona; Colorado River
5. buttes
6. The buttes have formed from scarp retreat of mesas, which in turn, would have made up a plateau. The sides have eroded away at a constant angle: the more resistant dolerite cap retreats almost vertically and the less resistant sandstone retreats as a gentler slope.

Activity 6 (Learner's Book, page 125)

Table 3.1.1 Stage of development and usage of four landscapes

	Stage of development	Use
Drakensberg	mature	A tourist attraction, especially for hikers and climbers.
Valley of a Thousand Hills	young to mature	The up and down hills make a challenging course for the Comrades Marathon. Its two main rivers host the Dusi Canoe Marathon.
Fish River Canyon	young to mature	A tourist attraction – for hikers or those who go to see its striking scenery.
Three Sisters	old	An interesting landmark for motorists travelling on the N1. It is a sheep and goat farming area.

For *Stages of development*, allocate 4×1 marks.

For *Use*, allocate 4×2 marks.

[12]

Informal assessment

Activity 1

- Go through the answers with the class. Ask learners to offer answers.

Activity 2

- For question 1, write up the completed table on the board.
- For question 2, go through the answers.

Activity 3

- Go through the answers with the class. Ask learners to offer answers.

Activity 4

- Go through the answers with the class. Ask learners to offer answers.

Activity 5

- Ask learners to swap books with a partner and check each other's work as you go through the answers with the class.

Activity 6

- Go through the answers with the class.
- If you choose, you can ask learner's to mark their answers according to the mark allocation given in the Answers section. Ask those learners who got less than 9/12 for the activity to do the remedial activity (see the Remedial section below).

Remedial/extension

Remedial:

For learners who struggled with Activity 6, let them complete Worksheet 8 (pages 288–289) in the Resources section of this Teacher's Guide. This worksheet can also be used for revision purposes.

Extension:

- Ask learners to find out more about one or more of these basaltic/basalt plateaus: Ethiopian Highlands, Columbia River, Kerguelen Plateau.
- Ask learners to find out more about one or more of these canyons: Grand Canyon, Colcha Canyon.
- Ask learners to find out more about Monument Valley in the United States. (It is a Karoo-like landscape).

Learner's Book
pages 126–133
Duration: 4 hours

UNIT 2 Topography associated with inclined/tilted rock strata

TERM 2, WEEK 2

Curriculum and Assessment Policy Statement (CAPS) content

Topography associated with inclined/tilted rock strata

- Characteristics and processes associated with the development of: a scarp slope, a dip slope, a cuesta, homoclinal ridge, hogsback, cuesta basin and cuesta dome
- Utilisation of these landscapes by people

Resources

- Learner's Book pages 126–133
- Websites (optional)
 - For information features associated with horizontal strata and tilted strata: 216.130.16.10/~lhanson/gls210/gls210_struct.htm
 - This site has some information on homoclinal ridges and includes other information relevant to Unit 1: myweb.cwpost.liu.edu/vdivener/notes/structure_landforms.htm
 - For information on domes and basins for advanced learners see: www.slackpacker.com/domesandbasins.html

Preparation

- Read through the unit and familiarise yourself with the content that you will need to teach. Think about what learners may already know about the topics and any areas of difficulty that you think they might encounter.

Teaching the unit



Lesson 1

- Read through, or ask learners to read through, the Unit 2 introductory paragraphs on page 126.
- Work through the section, 'How do rock strata become tilted?' (page 126).
- Focus on Figure 3.2.1. Remind learners that faulting and folding were covered in Grade 10 and revised in Unit 1 of this module.

Activity 1

- This activity gets learners to focus on Figure 3.2.1, which shows how rock layers can become tilted. It also revises the Grade 10 concepts of faulting and folding.
- Begin the section, 'What are the characteristics and processes associated with the development of tilted rock strata?' (page 127).
- Work through the section, 'How scarp slopes and dip slopes form' (page 127). Focus on Figure 3.2.2 which shows the scarp slope and the dip slope. For interest, you can point out that the strike of a slope is the direction along the length of the ridge.

Activity 2

- In this activity, learners identify the elements of an asymmetrical ridge and apply the concept of scarp retreat (which they learnt about in Unit 1).



Lesson 2

- Focus on Figure 3.2.4 which shows the difference between a cuesta, a homoclinal ridge and a hogback. Emphasise that they are distinguished by how steeply they tilt – in other words, by the angle of their dip slope.
- Work through the section on cuestas (page 128). Note the tip box: cuesta is pronounced 'questa' (i.e. kwesta).
- Point out the gentle slope of the cuesta in the photograph in Figure 3.2.5. Learners will read the angle of the slope off the protractor in Activity 3.

Activity 3

- Read the feature, 'The Magaliesberg cuervas' on page 128.
- In this activity, learners answer questions on the feature and read the angle of dip in Figure 3.2.5.
- For those learners who do not know the Magaliesberg area and do not know the dam, ask them to find out by searching on the Internet. Or give them a clue: For example, part of the name includes the name of an antelope (i.e. hartebeest). The dam takes its name from the Hartebeespoort farm, the land it was built on.
- Work through the section on homoclinal ridges. Point out that the distinction between a cuesta and a homoclinal ridge and a hogback is sometimes blurred (see the Tip box on page 128). The Magaliesberg are sometimes referred to as homoclinal ridges.
- Point out that the San Rafael Swell formed from a dome-like structure which is steeper on one side than the other (see the section on cuesta domes). It is made up of layers of sandstone, shale and limestone. The sandstone layers are the most resistant.



Lesson 3

- Work through the section on hogbacks.
- Draw attention to the photo of Hogback Mountain Peak in Figure 3.2.8. Ask learners to identify the dip slope (on the right-hand side) and the scarp slope (on the left-hand side).

Activity 4

- Read the feature, 'Dakota Hogback' (page 130). Point out that Americans use the term 'hogback' rather than 'hogsback' (with an s).
- In this activity, learners answer questions on the feature.
- Begin the section on cuesta domes and cuesta basins.



Lesson 4

- Work through the section on cuesta domes and basins.
- Focus on Figure 3.2.11. Point out that upward folding forms a dome and downward folding forms a basin. Also point out that the scarp slopes form the inner slopes of a cuesta dome and the outer slopes of a cuesta basin. Finally, point out that the topography (shape) of domes doesn't always reflect their structure (how they formed and their original shape). What is structurally a dome can look like a basin, once it has eroded.
- Work through the section 'How do people use these landscapes?' (page 133).

Activity 5

- Read the features, 'The Richat Structure: the Eye of the Sahara' (page 131) and 'The Vredefort Dome' (page 132).
- In this activity, learners answer questions on these two features. Learners practise their comprehension skills.
- If necessary, learners can finish this activity for homework.

Answers

Activity 1 (Learner's Book, page 126)

1. a. *faulting* – the cracking (1) and displacement/shifting (1) of a block of rock caused by movements in the Earth's crust
- b. i. normal fault (1) (to answer this, learners need to remember what they learnt in Grade 10)
- ii. reverse/thrust fault (1) (to answer this, learners need to remember what they learnt in Grade 10)
2. a. *folding* – the bending (1) of layers in rock in response to movements in the Earth's crust (1)
- b. an anticline is an upward fold (1); a syncline is a downward fold (1)
- c. a dome is a protrusion formed by pushing up of the Earth's crust (1); a basin is a hollow/depression formed by sagging or pushing down of the Earth's crust (1)
- d. The domes are formed by upward folds (1); their outer slopes are shallow (dip slopes) (1); and their inner slopes are steep (scarp slopes) (1); the basins are formed by downward folds (1); their inner slopes are shallow (dip slopes) (1); and their outer slopes are steep (scarp slopes). (1)

[16]

Activity 2 (Learner's Book, page 127)

1. 1 = dip slope; 2 = bedding plane; 3 = scarp slope; 4 = resistant strata, e.g. quartzite; 5 = less resistant strata, e.g. shale (5)
2. The dip slope is protected from erosion by the resistant layer of rock that forms the ridges 'backbone'. (1) The ridge erodes on the scarp slope (1); and is worn away parallel to the scarp slope by the process of scarp retreat. (1)

[8]

Activity 3 (Learner's Book, page 129)

1. 12°
2. a. A huge igneous intrusion event – the Bushveld Igneous Complex – that pushed down on the sediments.
- b. quartzite, shale, dolomite
- c. Hartebeespoort Dam

Activity 4 (Learner's Book, page 130)

1. The dip slope is on the left-hand side; the scarp slope is on the right-hand side.
2. fold mountains
3. 30 million years ago
4. Fossil prints and remains are preserved in the sediments that pile up to form sedimentary rock. Igneous rock is formed from molten rock beneath the Earth's surface. The remains of animals do not collect beneath the Earth's surface. If they were submerged by subduction events, they would be destroyed by the heat and the pressure.

Activity 5 (Learner's Book, page 133)

1. *cuesta domes*
2. • The Richat Structure was formed by uplift. The top of the dome has been worn away by erosion. The circle of *cuesta* ridges is formed by slow erosion of the resistant rock layers; and fast erosion of the less resistant rock layers.

- The Vredefort Dome was formed by a meteorite impact. The meteorite pushed up layers of rock to form a dome in the centre of the crater. Erosion has produced cuestas; part of a circle of cuesta ridges remains.
3. A dome becomes a basin-like structure as its exposed top is worn away by erosion. It is worn away from the centre out. This makes a basin or hollow in its centre.

Informal assessment

Activity 1

- Write up the answers on the board. Ask learners to swap books with a partner.
- If you choose, you can ask learners to mark each other's work according to the mark allocation given in the Answers section. Ask those learners who got less than 12/16 for the activity to do the remedial activity (see the Remedial section below).

Activity 2

- Write up the answers on the board. Ask learners to swap books with a partner.
- If you choose, you can ask them to mark each other's work according to the mark allocation given in the Answers section. Ask those learners who got less than 6/8 for the activity to do the remedial activity (see the Remedial section below).

Activity 3

- Go through the answers with the class. Ask learners to offer answers.

Activity 4

- Go through the answers with the class. Ask learners to offer answers. Informally assess learners' understanding of the concepts. You can gauge their understanding by the answers they give or the questions they ask.

Activity 5

- Go through the answers with the class. Ask learners to offer answers. Ask learners to assess whether they have copied answers from the text directly, or whether they have put together the answers in their own words.

Remedial/extension

Remedial:

For those learners who struggled with Activity 1 and Activity 2, ask them to complete Worksheet 9 (pages 290–292) in the Resources section of this Teacher's Guide. This activity is also useful revision for all learners.

Extension:

- Ask learners to find out more about one of the geological structures described in the features or shown in a photograph.
- Ask learners to find out which are South Africa's eight World Heritage Sites. (Answers: Fossil Hominid Sites of Sterkfontein, Swartkrans and Kromdraai; iSimangaliso Wetland Park; Robben Island; uKhahlamba/Drakensberg Park; Mapungubwe Cultural Landscape; Cape Floral Region Protected Areas; Vredefort Dome; Richtersveld Cultural and Botanical Landscape.)

Curriculum and Assessment Policy Statement (CAPS) content

Topography associated with massive igneous rocks

- Identification of batholiths, laccoliths, lopoliths, dykes and sills
- Characteristics and processes associated with the development of granite domes and tors

Resources

- Learner's Book pages 134–143
- Websites (optional)
 - For more information on the Bushveld Igneous Complex see: factoidz.com/the-bushvald-igneous-complex-of-south-africa/
 - For more information on the Great Dyke of Zimbabwe see: factoidz.com/the-great-dyke-of-zimbabwe/
 - For more information on Pilanesberg see:
 - www.ecotravel.co.za/game-nature-reserves/pilanesberg-national-park/geology.htm
 - www.pilanesbergsafaris.com/pilanesberg_park.php
 - For more information on Sibebe rock see: swazinet.com/sibebe-rock-swaziland

Preparation

- Read through the unit and familiarise yourself with the content that you will need to teach. Think about what learners may already know about the topics and any areas of difficulty that you think they might encounter.

Teaching the unit



Lesson 1

- Read through, or ask learners to read through the Unit 3 introductory paragraphs. Remind learners that they learnt about igneous intrusions in Grade 10.
- Begin the section, 'Which landforms are produced by massive igneous intrusions?' (page 134).

Activity 1

- This is a revision-type activity on the different types of igneous intrusions.
- Work through the section on batholiths. They will feature again in the section on granite domes and tors.
- Begin the section on laccoliths and lopoliths.
- Refer to Figure 3.3.2 of Tierra del Fuego and Figure 3.3.3 of the Great Dyke of Zimbabwe. Point out that in the same way that the Zimbabwe lopolith can be mistaken for a dyke, the Chilean laccolith can be mistaken for a sill.

» Lesson 2

- Continue the section on laccoliths and lopoliths.

Activity 2

- Read the feature, 'The Bushveld Igneous Complex: A cluster of lopoliths' (page 137).
- In this activity, learners answer questions on the feature.

» Lesson 3

- Work through the section on dykes.
- Refer to Figure 3.3.5 of Bannerman's Pass. Emphasise that in this example, the dyke has worn away to form a gap.

Activity 3

- Read the features, 'The dolerite dykes of Namibia' (page 138) and 'The ring dyke structure of Pilanesberg' (page 138).
- In this activity, learners answer questions on the two features.

- Work through the section on sills.
- Refer to Figure 3.3.8. Point out that the 'Tall One' is the cliff formed by a resistant sill.
- Refer to Figure 3.3.9. Point out that the step-like terraces are formed by sills.

Activity 4

- Read the feature, 'The dolerite pillars of the Valley of Desolation' (page 140).
- In this activity, learners answer questions on the feature.
- Learners can finish this activity for homework.

» Lesson 4

- If learners finished Activity 4 for homework, go through the answers with the class.
- Work through the section, 'How do granite domes and tors form and what are their characteristics?' (page 141).
- Remind learners that they learnt a bit about granite domes and tors in Grade 10. Ask them what they can remember about these geological features.
- Focus on Figure 3.3.11 which shows how a granite dome forms.
- Focus on Figure 3.3.13 which shows how a tor forms.

Activity 5

- Read the feature, 'The bald heads of the Matopos' (page 142).
- In this activity, learners answer questions on the feature.

Answers

Activity 1 (Learner's Book, page 134)

There are many variations for acceptable definitions. Here are examples:

- *batholith* – a deep, large, irregular shaped igneous intrusion
- *laccolith* – a mushroom-shaped igneous intrusion
- *lopolith* – a saucer-shaped igneous intrusion
- *dyke* – an igneous intrusion that is perpendicular to the existing rock layers
- *sill* – a flat sheet-like igneous intrusion

Activity 2 (Learner's Book, page 137)

1. It is rich in mineral deposits (1), such as platinum. (1) South Africa has some of the best platinum deposits in the world.
2. 2 billion years (1)
3. runny/silica-poor (1)
4. Magaliesberg (1)

[5]

Activity 3 (Learner's Book, page 139)

1. sticky/silica-rich (1)
2. granite = the grey rock (1), dolerite = the black rock (1)
3. A ring dyke structure is a set of dykes arranged in rings or concentric circles. (1) It forms underneath some volcanoes and is exposed by erosion. (1)
4. fault (1)

[6]

Activity 4 (Learner's Book, page 141)

1. Karoo landscape (1)
2. The dolerite columns were formed from a very thick sill (1) of jointed dolerite (1) which weathered and eroded along its vertical cracks. (1)
3. It is hard like iron (yster). (1)

[5]

Activity 5 (Learner's Book, page 143)

1. The Matopos granite tors formed from a batholith – an igneous intrusion deep underground that cooled quickly (relatively speaking) and developed many joints or cracks. When the batholith was raised near the surface, erosion exposed the granite. Weathering took place along the joints, which divided the granite into blocks. Gradually, the blocks of granite eroded to form a stack of core stones.
2. A granite dome forms from a batholith that has cooled slowly and so does not develop many joints or cracks. As the batholith is raised to the surface, the granite expands, making it crack in curved layers near its surface. The rounded dome shape is produced by exfoliation weathering.

Informal assessment

Activity 1

- Go through the answers with the class. Ask learners to offer answers.

Activity 2

- Ask learners to swap books with a partner and check each other's work as you go through the answers with the class.
- If you choose, you can ask learners to mark their partner's answers according to the mark allocation given in the Answers section. Ask those learners who got less than 4/5 to do the remedial activity (see the Remedial section on page 75).

Activity 3

- Ask learners to swap books with a partner and check each other's work as you go through the answers with the class.
- If you choose, you can ask learners to mark their partner's answers according to the mark allocation given in the Answers section.

Ask those learners who got less than 4/6 to do the remedial activity (see the Remedial section on page 75).

Activity 4

- Ask learners to swap books with a partner and check each other's work as you go through the answers with the class.
- If you choose, you can ask learners to mark their partner's answers according to the mark allocation given in the Answers section. Ask those learners who got less than 3/5 to do the remedial activity (see the Remedial section below).

Activity 5

- Go through the answers with the class. Ask learners to offer answers.

Remedial/extension

Remedial: For those learners who struggled with Activity 2, Activity 3 and Activity 4, ask them to complete Worksheet 10 (pages 293–294) in the Resources section of this Teacher's Guide. This activity is also useful revision for all learners.

Extension:

- Ask learners to find out more about one of the geological structures described in the features or shown in a photograph.
- Let the learners complete Worksheet 11 (pages 295–297) in the Resources section of this Teacher's Guide. It draws on all the concepts in this module and focuses on Paarl Rock as a case study.

Learner's Book
pages 144–151
Duration: 4 hours

UNIT 4

Slopes

TERM 2, WEEK 4

Curriculum and Assessment Policy Statement (CAPS) content

Slopes

- Overview of South Africa's topography
- Types of slopes
- Slope elements: crest, cliff (scarp slope, free face), talus (debris, scree slope) and pediment
- Characteristics of the slope elements: crest, cliff, talus and pediment
- Slope development over time
- The concept of slope retreat

Resources

- Learner's Book pages 144–151
- Atlases
- Websites (optional)
 - For more information on South Africa's topography see: myfundi.co.za/e/South_Africa's_geography:_Physical_features
- Books (optional)
 - For advanced learners, for extension: *The Morphology of the Earth* by Lester King
- Access to computers and the Internet is useful for Activity 2

Preparation

- Read through the unit and familiarise yourself with the content that you will need to teach. Think about what learners may already know about the topics and any areas of difficulty that you think they might encounter.

Teaching the unit



Lesson 1

- Read through, or ask learners to read through, the Unit 4 introductory paragraph.
- Work through the section, 'What are the main features of South Africa's topography?' (page 144). You can point out that the term 'terrain' is more or less interchangeable with the term 'topography'. Terrain refers to the lie of the land.
- Focus on the relief maps in Figure 3.4.1 and Figure 3.4.2. Point out how the escarpment extends beyond South Africa in both the East and the West.
- Focus on Figure 3.4.3. Point out that this profile represents a cross-section of South Africa from West to East. It shows that the Great Escarpment is higher on the East side of the country than the West.

Activity 1

- In this activity, learners answer questions on the two relief maps (Figures 3.4.1 and 3.4.2).



Lesson 2

- Spend this lesson on Activity 2. If you have access to computers and the Internet, allow learners time to search for the answers for question 3 in Activity 2. Alternatively, learners could use atlases. They could also look for lists of mountains belonging to the Cape Fold Mountains and the Great Escarpment.

Activity 2

- Read the feature, 'South Africa's Great Escarpment' (page 146).
- In this activity, learners answer questions on the Great Escarpment and look up the names of mountains that form the Great Escarpment in other southern African countries.



Lesson 3

- Work through the section, 'What are the different types of slopes?' (page 147).
- Focus on Figure 3.4.6 which illustrates slopes.
- Work through the section, 'What are the elements of a slope and what are their characteristics?' (page 148).
- Focus on Figure 3.4.7. Point out that the South African geologist, Lester King, identified these four slope elements in Karoo landscapes in the 1950s.
- Point out the alternative terms for the cliff and the talus slope (see the Tip box). You can also point out that the crest with its convex slope is sometimes referred to as the waxing slope. (The term 'waxing' is also used for the growing moon. When it is bigger than half moon, both sides are convex in shape.)

Activity 3

- In this activity, learners identify types of slope and slope elements.

» Lesson 4

- Work through the section, 'How do slopes develop over time?' (page 149).
- Point out that slopes can be formed by faulting, volcanic activity and even meteorite impacts.
- Point out that slope development refers to the mass wasting or erosion of slopes.
- Focus on Figure 3.4.10 which shows an example of slope development: how slopes change from steep to gentle.
- Work through the section, 'What is slope retreat?' (page 150).
- Focus on Figure 3.4.11 which shows three ways in which slopes retreat.
- Point out that slope retreat is complex. Often, the development of a slope can involve more than one type of slope retreat.

Activity 4

- Read the features, 'A slope's angle of repose' (page 150) and 'Retreat of the Great Escarpment' (page 151).
- Ask learners to refer back to the stepped slopes of a canyon in Figure 3.1.12 on page 119. Ask them to compare the angle of repose for the resistant rock and the less resistant rock.
- In this activity, learners answer questions on the features.

Answers

Activity 1 (Learner's Book, page 146)

1. 1 = elevation; 2 = slope; 3 = relief (3)
- 2.



Source: <http://www.South-africa-tours-and-travel.com/geography-of-south-africa.html>

(3)

3. a. Cederberg, Langeberg, Outeniqua Mountains (3)
Others not listed on the map include the mountains of: Winterhoek, Du Toitskloof, Simonsberg, Hottentots-Holland, Riviersonderend, Langkloof and Baviaanskloof. (See http://en.wikipedia.org/wiki/Cape_Fold_Belt for a full list. Note that the Overberg is a region, not a mountain range.)
- b. Bushveld, Highveld, Middleveld (3)
- c. i. Middleveld (1)
- ii. Bushveld (1)
- iii. Highveld (1)

[15]

Activity 2 (Learner's Book, page 147)

1. The mountainous margin between southern Africa's interior plateau and the coastal plain.
2. Kamiesberge, Roggeveld, Nuweveld, Suurberg, Stormberg, Drakensberg
3. a. Serra da Chela
- b. Khomas Hochland and Tsarisberge
- c. Chimanimani Mountains
- d. Chimanimani Mountains and Nyanga Mountains
4. Mpumalanga

Activity 3 (Learner's Book, page 148)

1. A = gentle; B = concave; C = convex; D = steep (4)
2. a. butte (1)
- b. 1 = crest; 2 = cliff; 3 = talus slope; 4 = pediment (4)
- c. dry/semi-arid (1)

[10]

Activity 4 (Learner's Book, page 151)

1. slope decline (1)
2. sandstone (1)
3. $2 = 90^\circ$; $3 = 45^\circ$ (these are approximate values) (2)
4. Parallel retreat is the dominant form of slope retreat for the Drakensberg because the mountain has retained its steep sides and flat top. (2)
5. coastal plain (2)
6. a. 1,5 m per 1 000 years (1)
- b. 1,5 mm per year (1)

[10]

Informal assessment

Activity 1

- Go through the answers with the class. Ask learners to offer answers.
- If you choose, you can ask learners to mark their own answers according to the mark allocation given in the Answers section. Ask those learners who got less than 10/15 to do the first remedial activity (see the Remedial section on page 79).

Activity 2

- Go through the answers with the class. Ask learners to offer answers.

Activity 3

- Go through the answers with the class. Ask learners to offer answers.
- If you choose, you can ask learners to mark their own answers according to the mark allocation given in the Answers section. Ask those learners who got less than 6/10 to do the remedial activity (see the Remedial section below).

Activity 4

- Go through the answers with the class. Ask learners to offer answers.
- If you choose, you can ask learners to mark their own answers according to the mark allocation given in the Answers section. Ask those learners who got less than 6/10 to do the remedial activity (see the Remedial section below).

Remedial/extension

Remedial:

- For those learners who struggled with Activity 2, Activity 3 and Activity 4, ask them to complete Worksheet 12 (pages 298–299) in the Resources section of this Teacher's Guide. This activity is also useful revision for all learners.
- For learners who need extra practice with the concepts in this module let them complete Worksheet 13 (pages 300–302) in the Resources section of this Teacher's Guide. This worksheet can also be used for revision purposes.

Extension:

- Ask learners to find out more about South Africa's topography (see, for example, the suggested website under 'Resources' on page 75).
- Ask advanced learners to find and browse through a copy of *The Morphology of the Earth* by Lester King.

Curriculum and Assessment Policy Statement (CAPS) content

Mass movements and human responses

- Concept of mass movements
- Kinds of mass movements: soil creep, solifluction, landslides, rock falls and mud flows, and slumps
- The impact of mass movements on people and the environment
- Strategies to prevent or minimise the effects of mass movement – South African case studies

Resources

- Learner's Book pages 152–162
- Websites (optional)
 - For a pdf on Slope Systems for advanced learners:
earthds.info/pdfs/EDS_11.PDF

Preparation

- Read through the unit and familiarise yourself with the content that you will need to teach. Think about what learners may already know about the topics and any areas of difficulty that you think they might encounter.

Teaching the unit



Lesson 1

- Read through, or ask learners to read through, the Unit 5 introductory paragraph.
- Work through the section, 'What is mass movement?' (page 152). Learners should already be familiar with the term 'mass wasting', which was introduced in Unit 1.
- Talk learners through Figure 3.5.1.
 - Point out that mass wasting or mass movement takes place only on slopes, not on flat land.
 - Point out that mass movement takes place on slopes only when the downslope force contributed by gravity is greater than the resistance force.
 - Resistance force/friction is the rubbing force between the loose material on the slope and the body/bulk of the slope. The resistance force holds material in place.
- Work through the section, 'What factors cause mass movements?' (page 152). Focus on Figure 3.5.2 which shows two ways in which slopes are oversteepened. The left-hand side diagrams show oversteepening of the slopes. The right-hand side diagrams show how mass movement takes place to stabilise the slopes.

Activity 1

- This activity focuses on human modification of slopes.

» Lesson 2

- Work through the section, 'What are the different kinds of mass movement?' (page 154).
- Focus on Figure 3.5.4 which illustrates the different types of mass movement.

Activity 2

- In this activity, learners identify and define different types of mass movement.

Activity 3

- Read the feature, 'Soil fluction on Mount Kenya' (page 157).
- In this activity, learners answer questions on the feature.
- Learners can do this activity for homework.

» Lesson 3

- If learners did Activity 3 for homework, go through the answers with the class.
- Work through the section, 'What is the impact of mass movement on people and the environment?' (page 157). The focus for this lesson is on the case studies and feature.

Activity 4

- Read the case studies, 'Italy's Vanjont Dam disaster' (page 158) and 'KwaZulu-Natal floods trigger mudslide' (page 159) and the feature, 'Submarine mass movements and megatsunamis' (page 159).
- In this activity, learners look at the causes and effects of mass movements.
- If necessary learners can finish this activity for homework.

» Lesson 4

- If learners finished Activity 4 for homework, go through the answers with the class.
- Work through the section, 'What strategies can be used to prevent or minimise the effects of mass movement?' (page 160). Focus on the two case studies.

Activity 5

- Read the case study, 'Efforts to stop rock falls on Chapman's Peak' (page 160).
- This is a class discussion activity.
- If your learners don't know Chapman's Peak, help them answer question 1 by asking: Which two prestigious international events take place along this route? (Answer: The Cape Argus Cycle Tour and the Two Oceans Marathon.) Give clues if necessary.

Activity 6

- Read the case study, 'A landslide hazard map for South Africa' (page 161).
- In this activity, learners practise their map-reading/ data-reading skills.
- Learners can complete this activity for homework.

Answers

Activity 1 (Learner's Book, page 153)

1. A = excavated for quarrying; B = for construction of roads or passes;
C = for the building of hillside homes – often homes with a view;
D = for farming – steep slopes are sometimes terraced (formed into steps)
2. a. by changing the angle of the slope by cutting into its side
b. the slope is made up of strong rock
c. wet conditions; water makes loose debris heavier and lubricates it, making it slide more easily

Activity 2 (Learner's Book, page 156)

1. A = slump; B = mudflow; C = rock fall; D = soil creep; E = landslide;
F = soil fluction (6)
2.
 - *slump*: part of the slope drops in one movement / all together along a spoon-shaped slippage plane
 - *mudflow*: silt / clay debris and water flows fast downslope in a river valley
 - *rock fall*: rock falls from the cliff face
 - *soil creep*: particles of soil and rock slowly move downslope as they expand and contract with repeated cycles of freezing and thawing or wetting and drying
 - *landslide*: a common form of mass movement – a combination of a slump and a debris flow
 - *soil fluction*: the top layer of water-saturated / soaked soil flows slowly downhill in polar regions or high altitude regions where there is permafrost (6 × 2) (12)[18]

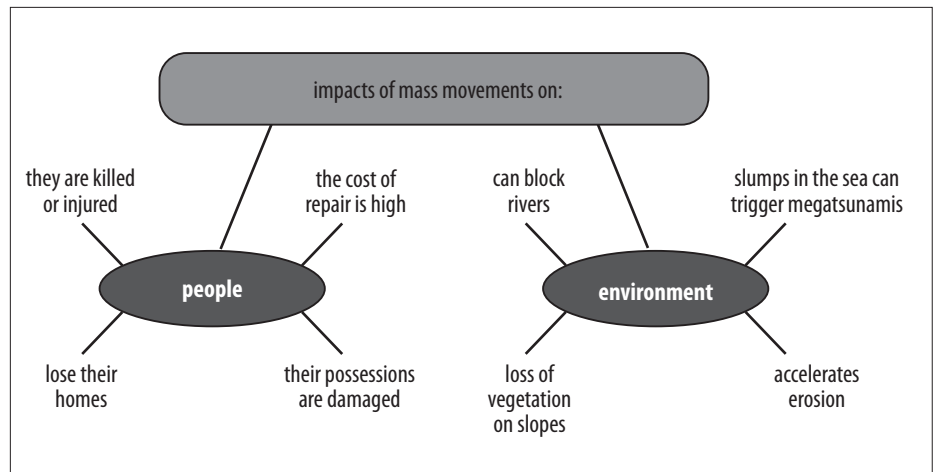
Activity 3 (Learner's Book, page 157)

1.
 - *permafrost*: soil water that is permanently frozen
 - *soil fluction / solifluction*: the movement of the top layer of water-saturated soil in cold regions
2. flow movement
3. slow movement
4. from slowest to fastest: soil creep, soil fluction, mud flow, landslide, rock fall

Activity 4 (Learner's Book, page 159)

1. weak slope materials – the slopes were weak limestone in clay; saturation of slope materials with water – the rising water levels in the dam soaked the slopes; modification of slopes by humans – engineers dammed the river that ran through the valley slopes

2.



Activity 5 (Learner's Book, page 161)

1. The reasons Chapman's Peak drive is important include:
 - It is a scenic route for tourists.
 - It makes up part of the route of the two important annual, international events – the Cape Argus Cycle Tour and the Two Oceans Marathon.
 - It is a commuting route for residents who live in Noordhoek and work in town.
2. Arguments for the project include:
 - The cost of the project will eventually be recovered by toll fees.
 - Chapman's Peak Drive is such a scenic route that it is important to keep it open for Cape Town tourism.
 - The project is an example of sustainable development.Arguments against the project include:
 - Rock falls are still a problem, making it necessary to close the route from time to time.
 - The City of Cape Town pays for some of this. The money could be better spent on social development and housing.
 - The catch fences, tunnel and concrete cladding are unattractive and have spoilt the area.

Activity 6 (Learner's Book, page 162)

1. Both provinces have a high rainfall (water adds weight to slope material and lubricates it) and have many human settlements in hilly areas. (2)
 2. a. Pietermaritzburg (1)
b. Shale is weak rock, which is easily eroded. (1)
 3. a. the southeastern part of the province around Thabazimbi (1)
b. Thabazimbi and Lephale or Thohoyandou (2)
c. on the N1 towards Musina, west of Thohoyandou; on the R71 between Polokwane and Tzaneen (2)
- [9]

Informal assessment

Activity 1

- Go through the answers with the class. Ask learners to offer answers.

Activity 2

- Go through the answers with the class.
- If you choose, you can mark this activity yourself according to the mark allocation given in the Answers section. Ask those learners who got less than 13/18 to do the remedial activity (see the Remedial section below).

Activity 3

- Go through the answers with the class. Ask learners to offer answers.

Activity 4

- Go through the answers with the class. For question 2, write up an example mind-map on the board.

Activity 5

- Informally assess learners on their contribution to the discussion.

Activity 6

- Go through the answers with the class.
- If you choose, you can ask learners to mark their answers according to the mark allocation given in the Answers section. Ask those learners who got less than 6/9 to do the remedial activity (see the Remedial section below).

Remedial/extension

Remedial:

For learners who struggled with Activity 2 and Activity 6, let them complete Worksheet 14 (page 303) in the Resources section of this Teacher's Guide. This worksheet can also be used for revision purposes for all learners.

Extension:

Let the learners complete Worksheet 15 (pages 304–305) in the Resources section of this Teacher's Guide.

	MODULE 4	
TERM 2 Learner's Book pages 163–189 Duration: 10 hours	GEOMORPHOLOGY: GEOGRAPHICAL SKILLS AND TECHNIQUES	

This module focuses on geographical skills and techniques related to geomorphology.

Topographical maps and aerial photographs show many different landform features. GIS also allows us to zoom in on landform features and view them at high resolution.

Curriculum and Assessment Policy Statement (CAPS) content

Topographic maps

- Contours and landforms
- Cross-sections on 1:50 000 topographic maps
- Vertical exaggeration
- Inter-visibility
- Gradient

Geographical and Information Systems (GIS)

- Spatially referenced data
- Spatial and spectral resolution
- Different types of data: line, point, area and attribute
- Raster and vector data
- Capturing different types of data from existing maps, photographs, fieldwork or other records on tracing paper

Fieldwork

- Observation
- Collecting and recording data
- Processing, collating and presenting fieldwork findings

Key geographical skills and techniques

- using verbal, quantitative and symbolic data forms such as text, pictures, graphs, tables, diagrams and maps
- practising field observation and mapping
- applying communication, thinking, practical and social skills
- processing, interpreting, and evaluating data
- working co-operatively and independently

Key words/concepts

contour line; altitude; contour interval; valley; spur; river valley; hill; ridge; saddle/ass; neck; cliff; waterfall; mesa; butte; escarpment; cross-section; relief; vertical exaggeration (VE); intervisibility; gradient; vertical interval; spatially referenced data; attribute data; spatial analysis; resolution; spatial resolution; pixel; spectral resolution; vector model; raster model; spatial information

Curriculum and Assessment Policy Statement (CAPS) content

Topographic maps

- Contours and landforms
- Cross-sections on 1:50 000 topographic maps
- Vertical exaggeration
- Inter-visibility
- Gradient

Resources

- Learner's Book pages 164–178
- Websites (optional)
 - For information on topographic maps:
http://geography.about.com/od/topographicmaps/Topographic_Maps.htm
 - For information on contours and landforms:
<http://www.geojeff.org/course-materials/physical-geology-lab/lab-8-mapping/landforms-on-contour-maps/depressions.html>

Preparation

- Read through the unit and familiarise yourself with the content that you will need to teach. Think about what the learners may already know about the topics and any areas of difficulty that you think they might encounter.

Teaching the unit

» Lesson 1

- For the first five minutes of the lesson, brainstorm with the learners to find out what they know about contour lines and landforms.
- Work through the introductory part of the section, 'How are contour lines and landforms identified on topographical maps?' and 'What are contour lines?' (page 164).
- Draw attention to the description of contours lines and to Figure 4.1.1. Show learners how to interpret height and sea level.

Activity 1

- Allow learners to do the activity in class.
- Help learners find different heights on the map using the contour lines.
- Go through the answers with the learners.

» Lesson 2

- Work through the material on how different slopes are represented on topographical maps. Allow questions and comments from the learners.

- Ask the learners to work in pairs and to look at other topographical maps in the Learner's Book. Let them identify and describe steep, gradual, convex and concave slopes on these maps.

» Lesson 3

- Remind learners that landforms are physical features that are represented by different contour patterns on a map.
- Work through the section, 'What are landforms?' (page 166) with the learners. Allow questions as you go.

Activity 2

- Allow learners to begin the activity in class and then complete it as homework.
- Facilitate the answering of any questions the learners may have and assist learners who need help.
- Help learners distinguish between the different landforms.

» Lesson 4

- Go through the answers to Activity 2 with the class.
- For the next five minutes of the lesson, brainstorm with the learners to find out what they know about cross-sections on 1:50 000 topographic maps.
- Work through the section, 'How is a cross-section drawn from a 1:50 000 topographical map?' (page 172). Draw the learners' attention to the example of a cross-section in Figure 4.1.18.
- Work through the section, 'How is vertical exaggeration measured on a topographical map?' (page 174).
- Emphasise the importance of vertical exaggeration by using the cross-section in Figure 4.1.19.
- Take your time working through the method of calculating vertical exaggeration and do additional examples with the learners if necessary.

» Lesson 5

Allow this lesson for the completion of Activity 3. This will allow you to assist learners who need it.

Activity 3

- Let learners work on the activity in pairs.
- Once everyone has completed it, go through the answers with the class and explain how they are arrived at.

» Lesson 6

- Work through the sections, 'How is intervisibility measured on a topographical map?' and 'How is gradient measured on a topographical map?' (page 176).
- Take your time working through method of the measuring gradient and do additional examples with the learners if necessary.

Activity 4

- Let learners work on the activity in pairs.
- Once everyone has completed it, go through the answers with the class and explain how they are arrived at.

Answers

Activity 1 (Learner's Book, page 164)

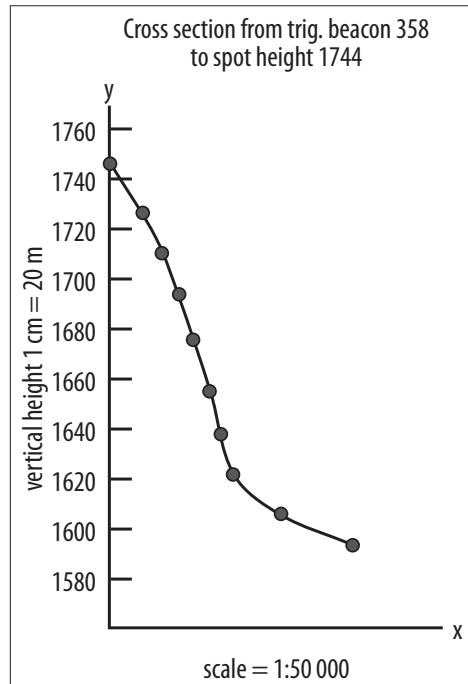
1. Contour lines are lines drawn on a map to join land and places of equal altitude (height above sea level).
2. 20 m
3. hill
4. 339,7 m
5. Contour line is steeper at A than at B.

Activity 2 (Learner's Book, page 172)

1. gentle/gradual slope
2. uphill
3. Gradual to flat land allows for the development of settlements in the southeast.
4. contour pattern is circular
5. hill
6. Southwest. Contour lines are decreasing in a southwest direction.

Activity 3 (Learner's Book, page 174)

1. 1 785,6 m
- 2.



3.
$$\begin{aligned} VE &= \frac{VS}{HS} \\ &= \frac{1:2\ 000}{1:50\ 000} \\ &= \frac{1}{2\ 000} \\ &= \frac{1}{50\ 000} \\ &= \frac{1}{2\ 000} \times \frac{50\ 000}{1} \\ &= 25 \text{ times} \end{aligned}$$
4. valley
5. gentle/gradual slope
6. The rivers are flowing from high lying areas to gradual to flat land.
7. summer rainfall

Activity 4 (Learner's Book, page 177)

1. Given scale = 1:10 000

$$HD = 4 \text{ cm}$$

therefore, the ground distance between A and B

$$= 4 \times 10\,000 \text{ cm}$$

$$= 40\,000 \text{ cm}$$

$$= 400 \text{ m}$$

$$\begin{aligned} \text{Gradient} &= \frac{VI}{HD} \\ &= \frac{1\,738 \text{ m} - 1\,722 \text{ m}}{400 \text{ m}} \\ &= \frac{16 \text{ m}}{400 \text{ m}} \\ &= \frac{1}{25 \text{ m}} \\ &= 1:25 \end{aligned}$$

2. gentle/gradual slope

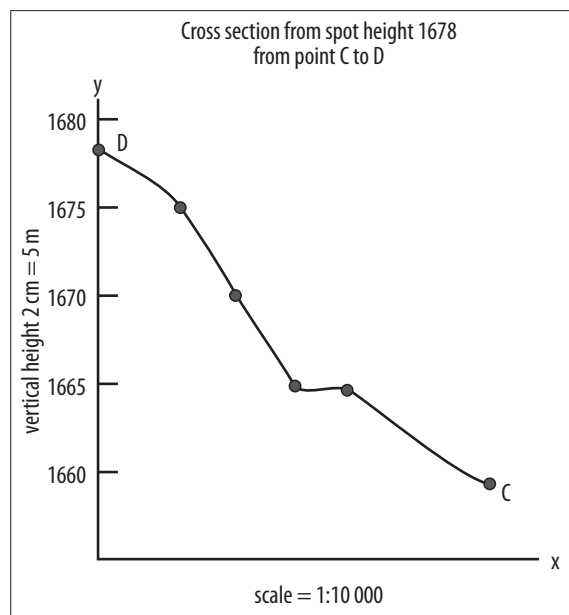
3. hill

4. school

5. Giants Castle (monument)

6. road (Wellington Drive)

7. C and D are not intervisible because if you stand at point D you cannot see point C and vice versa.



Informal assessment

Activity 1

- Go through the answers with the class. Encourage learners to offer answers.
- Observe the learners as they complete the activity.

Activity 2

- Go through the answers with the class. Encourage learners to give answers.
- Let the learners swap books and mark each other's work.

Activity 3

- Go through the answers with the class. Encourage learners to give answers.
- Let the learners swap books and mark each other's work.
- Observe the learners as they complete the activity.

Activity 4

- Let the learners swap books and mark each other's work.
- Go through the answers with the class.

Remedial/extension

Remedial:

- Ask learners to do an extra cross-section and gradient calculation from the map in Figure 4.1.2 on page 165.

Extension:

- Ask learners to research and bring along any landforms pictures and explanations that they can find.

Learner's Book
pages 179–186
Duration: 2 hours

UNIT 2

Geographical and Information Systems (GIS)

TERM 2, WEEK 7

Curriculum and Assessment Policy Statement (CAPS) content

Geographical and Information Systems (GIS)

- Spatially referenced data
- Spatial and spectral resolution
- Different types of data: line, point, area and attribute
- Raster and vector data
- Capturing different types of data from existing maps, photographs, fieldwork or other records on tracing paper

Resources

- Learner's Book pages 179–186
- Tracing paper
- Websites (optional):
 - For information about spatially referenced data:
http://www.geoscience.org.za/index.php?option=com_content&task=view&id=206&Itemid=100
 - For information about GIS data models, raster and vector models:
http://bgis.sanbi.org/GIS-primer/page_19.htm

Preparation

- Read through the unit and familiarise yourself with the content that you will need to teach. Think about what learners may already know about the topics and any areas of difficulty that you think they might encounter.

Teaching the unit

» Lesson 1

- Work through the section, 'What is spatially referenced data?' (page 179). Allow for questions.
- Spend some time examining Figure 4.2.1 with the learners as it provides an authentic example of spatially referenced data.
- Make sure the learners understand the difference between spatially referenced data and attribute data.
- Spend some time examining Figure 4.2.2 with the learners as it provides an authentic example of attribute data.
- Work through the section, 'Why do we use GIS for spatial analysis?' (page 180).

Activity 1

- This activity gets learners to focus on the importance of spatially referenced data.
- Go through the activity but allow learners to complete it as homework.
- Work through the section, 'What is spatial and spectral resolution?' (page 181).
- Make sure that learners understand the difference between spatial and spectral resolution. After you have worked through the material, you could ask the learners to turn to a partner and quickly explain the difference.
- Explain the difference between low spatial resolution by examining Figures 4.2.4 and 4.2.5.

Activity 2

- Allow learners to begin the activity in class and then complete it as homework.
- Remind them to make use of the information in the unit as they complete the activity.

» Lesson 2

- Go through the answers to Activities 1 and 2 with the class.
- Work through the section, 'What is the significance of different types of data?' (page 183) with the learners.

Activity 3

- Complete this activity as a whole class activity that is done verbally.
- Work through the section, 'What is the difference between raster and vector data models?' (page 184) with the learners.
- Emphasise the advantages of the vector model and the disadvantages of the raster model.
- Work through the section on capturing different types of data using tracing paper. Focus particularly on the capturing of information.

Activity 4

- Allow learners to complete this activity as homework.
- They should complete it individually as a summarising activity.

Activity 5

- Divide the learners into pairs.
- Hand out the tracing paper.
- Remind them to make sure that they insert key pieces of information (like the outline) so that they will be able to place the sheets of paper accurately on top of each other for analysis later.

Answers

Activity 1 (Learner's Book, page 180)

1. Spatial data identifies the geographic location of features on Earth. Attribute data represents non-spatial data and is descriptive data.
2. Spatially referenced data is data that identifies the geographic location of features on Earth and encodes this to be data referenced.
3. Spatial analysis allows us to geographically link data or it allows data from multiple sources to be integrated.
4. A database provides certain information, e.g. the spatial layers assist town planners in planning for the future.

Activity 2 (Learner's Book, page 182)

1. Spatial resolution refers to the size of objects and the details of an image. Spectral resolution refers to the specific wavelength intervals in the electromagnetic spectrum at which a satellite sensor can record data.
2. It is context-driven.
3. Satellite imagery is context-driven and high spatial; and spectral resolution images can be used for problem-solving.
4. Both Landsat and Spot sensor record high spectral resolution.
5.
 - a. The South Western Cape's relief ranges from open low mountains, to high mountains and plains with high hills, to moderate hills.
 - b. Gauteng's relief ranges from tablelands with moderate relief to considerate relief.
 - c. The coastline of South Africa consists of hills and mountains.

Activity 3 (Learner's Book, page 183)

1. A line feature would be any road shown on the picture.
2. A point would be the trees on the NE of the picture.
3. An area would be any of the residential areas shown in the picture.
4. An attribute of the residential area in the NE corner of the picture would be the high population density. High population density is a characteristic of the residential area.

Activity 4 (Learner's Book, page 186)

1. GIS data is collected from maps, aerial photographs and satellite remote sensing.
2. Data must be analysed, manipulated and processed to provide accurate locations for geographical features.
3. Landforms, physical relief and vegetation differ according to texture and colour in a GIS model.

Informal assessment

Activity 1

- Go through the answers with the class. Encourage learners to give answers.
- Let the learners swap books and mark each other's work.
- Observe whether learners could apply the skills and concepts they were taught.

Activity 2

- Go through the answers with the class. Encourage learners to give answers.
- Let the learners swap books and mark each other's work.
- Go through the answers with the class.

Activity 3

- Go through the answers with the class. Encourage learners to offer answers.

Activity 4

- Go through the answers with the class. Encourage learners to offer answers.

Activity 5

- Ask the learners to complete the activity, move around the classroom observing and listening to them. Provide assistance where it is required. Notice which learners struggle with this activity.

Remedial/extension

Remedial:

Ask learners to complete Worksheet 16 (pages 306–307) in the Resources section of this Teacher's Guide.

Extension:

- Ask learners to research or find out more about GIS.
- Ask learners to collect GIS pictures or maps. You can use these pictures or maps to create revision activities for the learners or remedial activities for learners who struggle with GIS.

Learner's Book pages 187–189 Duration: 2 hours	UNIT 3	Fieldwork
		TERM 2, WEEK 8

Curriculum and Assessment Policy Statement (CAPS) content

Fieldwork

- Observation
- Collecting and recording data
- Processing, collating and presenting fieldwork findings

Resources

- Learner's Book pages 187–189
- Websites (optional):
 - For information about fieldwork/research:
http://en.wikipedia.org/wiki/Field_research and
<http://geographyfieldwork.com/Fieldwork%20Methodology.htm>

Preparation

- Read through the unit and familiarise yourself with the content that you will need to teach. Think about what learners may already know about the topics and any areas of difficulty that you think they might encounter.
- You will need to arrange the fieldtrip for data collection in Lesson 2. Make sure that you have the learners' parents' / guardians' written consent.
- Make sure that learners prepare their data collection sheets before Lesson 2.

Teaching the unit

Set aside two lessons for the fieldwork in this unit. Learners will also need to complete some of the activities outside of class time.



Lesson 1

- For the next five minutes of the lesson, brainstorm with the learners to find out what they know about fieldwork.
- Read through the information and activities in the whole unit with the learners making sure that they understand what is expected of them.
- Point out to learners that fieldwork has three very important components: a) observation; b) collecting and recording data; c) processing, collating and presenting fieldwork findings.

Activity 1

- Work on this activity with the whole class.
- Allow the learners to write notes of the answers to the questions as they will need this information in Activity 5.

Activity 2

- Let learners work in pairs or small groups to complete this activity.
- Allow learners to begin the activity in class and then complete it as homework.

Activity 3

- Allow learners to begin the activity in class and then complete it as homework. They should work in the same groups as they were in for Activity 2.
- They will need their questions for data collection in the next lesson.



Lesson 2

In this lesson the learners focus on data collection. You will need to take them on a fieldtrip to do this.

Activity 4

- Before you leave on the fieldtrip, ask learners to read through the steps in this activity to remind them what needs to be accomplished.

Activity 5

- Learners will need to complete this activity as homework.
- Allow them about 1 week before they have to submit their reports.

Informal assessment

Observe learners as they work through their fieldwork. Note whether they are able to:

- formulate a hypothesis
- develop a set of questions that will help them to collect the information they require
- collect information through observation and interviewing
- compile a short report on their findings
- make recommendations based on their findings.

Learner's Book pages 190–193	Assessment Task 2	Geomorphology
		TERM 2

For information on how to assess the learners' completed tasks, please see page 197 of this Teacher's Guide.

Learner's Book pages 194–198	REVIEW	TERM 2
---------------------------------	---------------	---------------

These activities provide an opportunity for learners to consolidate concepts and skills learnt in Term 2. Learners can complete them in class or as homework. It is suggested that they complete the activities individually as a means of self-assessment.

You can write the answers on the board for the learners and/or call them out where more appropriate. However, if possible, it is suggested that you photocopy the answers and give them to the learners so that they have them for revision purposes.

Activity 1 (Learner's Book, page 194)

1. A = mesa; B = butte; C = conical hill; D = homoclinal ridge/hogsback; E = cuesta
2. A–C rock layers are horizontal; D–E rock layers are tilted/inclined
3. dolerite; it is igneous rock
4. a. Karoo landscape
b. It was formed from a canyon landscape as rivers carved deep into the rock layers. As erosion progressed, the valleys widened and the plateaus eroded away.
5. c. The flat, eroded valleys are suitable for sheep or goat farming.
5. a. X = scarp slope; Y = dip slope
b. Tilted rock layers eroded at different rates to form asymmetrical ridges. The scarp slope is formed by erosion of less-resistant rock and the dip slope is protected by the layer of resistant rock.
c. Farming is not feasible on the slopes – the scarp slopes are too steep and the soil is too thin on the dip slopes. But farming can take place in the valleys between the ridges.

Activity 2 (Learner's Book, page 194)

1.

Type of igneous intrusion	Type of landform	Example
batholith	granite dome	Matopos, Zimbabwe
	tor	Sibebe Rock, Swaziland
laccolith	cuesta-like hills/basins	Golden Valley, Eastern Cape
lopolith	cuesta-like hills/basins	Bushveld Igneous Complex
dyke	ridges	Dolerite ridges in Namibia
sill	resistant cliggs	Howick Falls, KwaZulu-Natal

2. a. A = tor; B = granite dome
 b. batholith
 c. A formed from jointed granite. Chemical weathering made the joints and cracks bigger. When the granite was exposed at the surface, the weathered material was eroded away, leaving a pile of core stones.
 d. B formed from relatively unjointed granite. As the granite was raised to the surface, changes in pressure and temperature caused layered cracks around the rock mass's surface. The rock mass was eroded into a rounded dome by exfoliation-type weathering.
 e. Any three: granite, gneiss, quartzite, sandstone, dolerite

Activity 3 (Learner's Book, page 195)

1. a. A = coastal plain; B = Great Escarpment; C = interior plateau; D = Great Escarpment; E = coastal plain
 b. B = Roggeveld Mountains; D = Drakensberg
2. a. B
 b. hilly landscape / Valley of a Thousand Hills
 c. A
 d. Karoo landscape
 e. A = talus slope
 B = crest
 f. cliff = rock falls; debris slope = weathering; crest / convex part of slope in B = soil creep / weathering; pediment = sheetwash
 g. scarp / parallel retreat / backwasting: the slope angles and lengths stay constant as the slope recedes
 h. slope decline: the upper part of the slope erodes or recedes faster than the lower part of the slope; the slope loses height and steepness

Activity 4 (Learner's Book, page 196)

1. *landslide*: sudden mass movement along a slippage plane/part slump, part debris flow/a general term for sudden mass movements
mass movement: the movement of material downslope under gravity
2. Rain soaks slope material with water. Water makes slope material heavier and lubricates it/ reduces friction.
3. a. The roots of trees hold soil and regolith in place. The removal of vegetation/trees speed up erosion.
b. For hydro-development, rivers are dammed in steep valleys. Slopes are sometimes oversteepened with construction. The dammed river can soak the slopes as water levels rise.
4. For example: avoiding development in an area where the risk of mass movement was high; stabilising slopes with nets or retaining walls.

Activity 5 (Learner's Book, page 196)

1. It is a landform feature and not a human-made feature because it is a natural physical feature which has not been built by people.
2. It separates South Africa from Botswana/Zimbabwe.
3. flat and gradual
4. The physical relief on the Botswana side of the Limpopo River is steeper which results in more tributaries.
5. It provides water and irrigation for cultivated lands, orchards, vineyards and woodland areas.
6. Given scale: 1:50 000

$$HD = 7 \text{ cm}$$

$$\begin{aligned} \text{Therefore the ground distance} &= 7 \text{ cm} \times 50\,000 \text{ cm} = 350\,000 \text{ cm} \\ &= 3\,500 \text{ m} \end{aligned}$$

$$\text{Gradient} = \frac{VI}{HD}$$

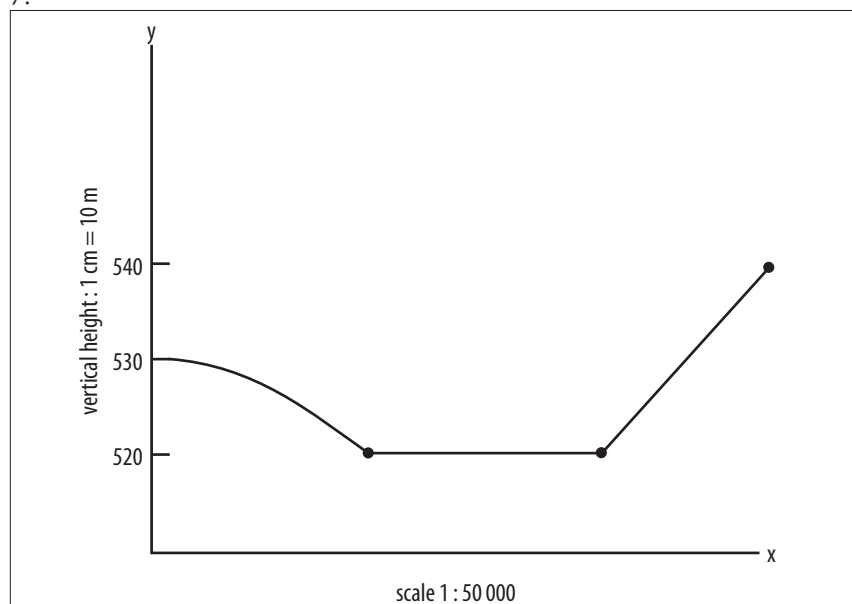
$$\frac{546 \text{ m} - 518 \text{ m}}{3\,500 \text{ m}}$$

$$= \frac{28 \text{ m}}{3\,500 \text{ m}}$$

$$= \frac{1}{125}$$

$$= 1:125$$

7.



$$\begin{aligned}
 8. \quad VE &= \frac{VS}{HS} \\
 &= \frac{1:10000}{1:50\,000} \text{ or } \frac{\frac{1}{10\,000}}{\frac{1}{50\,000}} \\
 &= \frac{1}{10} \times \frac{500}{1} \text{ or } \frac{1}{100} \times \frac{50\,000}{1} \\
 &= 50 \text{ times}
 \end{aligned}$$

9. hill
10. landing strip
11. flat gradual land, large open space
12. Zimbabwe

Activity 6 (Learner's Book, page 198)

1. Vector data model. Lines, polygons and areas have been used to represent data on the map.
2. The physical relief is steep and mountainous. Mountains are represented in their true or natural colour.
3. The contour lines are far apart representing gradual to flat land.
4. Spatial referencing provides the exact position or location of spatial data, e.g. the dam.
5. The dam in the centre of the mapped area supplies water to its surrounding ecosystems, which supports environmental development of the mapped area.

	MODULE 5	
TERM 3 Learner's Book pages 200–280 Duration: 27 hours	DEVELOPMENT GEOGRAPHY: GEOGRAPHICAL KNOWLEDGE	

The vocabulary used with development geography, especially the investigation of reasons for economic growth, levels of development, and differences between countries in levels of economic development, is studied. The spatial context covers South African examples that are local, regional and national, as well as SADC areas, the African continent, and the world.

Curriculum and Assessment Policy Statement (CAPS) content

The concept of development

- Terminology associated with development, such as developed, developing, more economically developed countries (MEDCs) and less economically developed countries (LEDCs), and industrialised countries
- The concept of development: economic, social, sustainable, appropriate scale and spatial aspects
- Economic, social and demographic indicators of development: GNP, GDP, HDI, Gini-coefficient, life expectancy and infant mortality
- Examples to illustrate differences in development from local, regional, and global contexts

Frameworks for development

- Factors that affect development, including: access to resources, energy, history, trade imbalances, population growth, education and training, natural resource limitations and environmental degradation (note: learners need to explore the complexity and inter-related nature of these factors)
- Development models: free market models, such as Rostow's model with its limitations and criticisms, core and periphery models with their application at different scales; sustainability models with their economic, social, and environmental elements
- Community based development, including approaches to rural and urban development (with examples from around the world)

Trade and development

- International trade and world markets: commodities traded and terms of trade
- Types of trading relationships, including: free trade, trade barriers, subsidies and fair trade
- The concept of globalisation and its impact on development
- Export-led development – critically examined (with examples from around the world)

Development issues and challenges

- The role of women in development: gender issues related to power, access to resources and attitudes
- The effect of development on the environment
- The role of the state and business in development in South Africa, including central control by the state, weak state control and public or private partnerships

Role of development aid

- Concept of development aid and development co-operation
- Types of development aid – technical, conditional, humanitarian
- Impact of aid on development (including case studies of development aid – positive and negative)

Key geographical skills and techniques

- using verbal, quantitative and symbolic data forms such as text, pictures, graphs, tables, diagrams and maps
- practising field observation and mapping, interviewing people, interpreting sources and working with statistics
- identifying questions and issues
- collecting and structuring information
- processing, interpreting and evaluating data
- making decisions and judgements
- deciding on a point of view
- suggesting solutions to problems
- working co-operatively and independently

Key words/concepts

developed; developing; North-South divide; emerging market; economic development; social development; sustainable; economies of scale; spatial aspects; Gross Domestic Product (GDP); GDP per capita; Gross National Product (GNP); Human Development Index (HDI); Gini Coefficient; life expectancy; Infant Mortality Rate (IMR); resource; renewable resource; non-renewable resource; energy; Balance of Trade; Trade Imbalance; surplus; deficit; capital; fertility rate; free market; controlled/command market; international trade; commodity; comparative advantage; terms of trade; free trade; import quota; tariff; trade agreement; government subsidy; protectionist; trade bloc; sweatshop; globalisation; multinational corporation (MNC); brain-drain; factors of production; South-South trade; diversification; privatisation; public-private partnership; conditional aid; bilateral aid; multilateral aid

Curriculum and Assessment Policy Statement (CAPS) content

The concept of development

- Terminology associated with development, such as developed, developing, more economically developed countries (MEDCs) and less economically developed countries (LEDCs), and industrialised countries

- The concept of development: economic, social, sustainable, appropriate scale and spatial aspects
- Economic, social and demographic indicators of development: GNP, GDP, HDI, Gini Coefficient, life expectancy and infant mortality
- Examples to illustrate differences in development from local, regional, and global contexts

Resources

- Learner's Book pages 201–220
- Atlases
- Compasses
- Websites (optional):
 - For information on terminology and the concept of development, see: en.wiki.org/wiki/Economic_development; www.webdictionary.co.ul/definition-phy?query=development; www.thefreedictionary.com/development; www.ocw.mit.edu/Economics/MIT
 - For information on economic, social and demographic indicators of development, see: www.data.worldbank.org/data-catalog/world-development-indicators; www.info.gov.za/view/DownloadFileAction?Id=137217; www.mercycorp.org; www.hdr.undp.org

Preparation

- Read through the unit and familiarise yourself with the content that you will need to teach. Think about what learners may already know about the topics and any areas of difficulty that you think they might encounter.

Teaching the unit



Lesson 1

- Read through, or ask learners to read through the Module 5 Introduction paragraph. The terms, factors, models, types of trade, issues that face development, and the role of aid, are the key areas of this module. Write them on the board and discuss them with the learners. You can ask them to make mind-maps using the key ideas, and share these. Summarise their points on the board as an introduction to development geography.
- Draw attention to the photograph (page 200). Ask the learners why the picture was used – to show the global reach of multinationals such as Coca Cola (an American company) operating in South Africa – with all the wealth and power that a multinational company has at its disposal, contrasted with the relative poverty of the people in the picture. It shows differences of levels of development in one country.
- Work through the opening paragraph of Unit 1 and begin the section, 'What terminology is associated with development?' (page 201).
- Refer to the maps, Figures 5.1.1–5.1.3. Use an atlas if necessary to name the countries that are shaded.
- Locate the EAGLEs using an atlas; this will relate to Figure 5.1.4 as well.
- Refer to the bar graph, Figure 5.1.4. The emerging countries are predicted to have a faster rate of growth from 2010–2020 than the G7 countries. Explain that developments in education, wider job opportunities, salaries and higher standards of living, as well as global advertising and market penetration by multinationals, have created a demand for goods in developing countries. Export-driven economic growth and investment in the country by multinationals has also increased GDP for the EAGLEs.

» Lesson 2

- Allow learners to use this lesson to complete Activity 1 and then go through the answers with them.

Activity 1

- Let the learners work on this activity in pairs or individually.

» Lesson 3

- Work through the section, 'What does the concept 'development' mean?' (page 205). Allow time for questions from the learners.
- Use an atlas to locate the SADC countries (Figure 5.1.5). Ask learners if anyone has visited a SADC country or knows someone from there. Point out those countries that most of the class have some information about, and those countries that are least known. Try to figure out with the class what the least known SADC member countries would have to do to become better known by South Africans.
- Use an atlas and refer to Figure 5.1.5. Find the geographical boundaries of each country. Start with South Africa, then go on to other Sub-Saharan African countries. Then find the spatial aspects of the eight regional economic communities, such as the SADC.
- Explain the importance of creating regional unions for trade and development and bargaining power. Advantages would be united power, freedom of movement of goods and people, and less time spent at border posts and customs; possible disadvantages could be economic unions grouping together against a hostile state.
- Discuss the multiplier effect by using the image of a stone thrown into a pool: the stone is the economic investment, and the ripples refer to the spreading of the effect of wealth through the economy (or water).
- The 'poverty cycle', Figure 5.1.7, can be broken by inserting either money, or infrastructural development, or education and skills training, or jobs.

Activity 2

- Allow learners to begin the activity in class and then complete it as homework.

» Lesson 4

- Go through the answers to Activity 2 with the class. Ask for ways in which the 'circle of poverty' can be broken; sketch the diagram on the board and correct the homework.
- Read through economic, social and demographic indicators of development. Remind them of the use of an indicator in a car: to show which direction you are travelling. In a country, the economic, social and demographic indicators show where the country is headed.
- Refer to an atlas to locate the countries in Figure 5.1.8 and Table 5.1.1.

Activity 3

- Do this activity as a class. Allow learners to answer the questions verbally.
- Work through the information on GNP and HDI.

Activity 4

- Go through this activity with the learners so that they understand what is expected of them. Set it as a homework task.

- Work through the information on the Gini Coefficient.
- Refer to Figure 5.1.9. Explain that HDI indicators may be lower (or higher) than they anticipate for the regions of the world shown, because the wealth is not shared amongst all (or is).
- Draw a rough sketch of the Gini Coefficient, Figure 5.1.11, on the board. On the curve, place a number of points which you can label from A to E. Ask learners to describe the levels of equality for people living in countries A to E until they grasp the concept.

Activity 5

- Allow learners to begin the activity in class and then complete it as homework.
- They could work in pairs or individually.

» Lesson 5

- Go through the answers to Activities 4 and 5 with the class.
- Work through the information on life expectancy and IMR.
- Write the headings, 'economic, social and demographic' on the board. Ask the learners to categorise GNP, GDP, HDI, Gini Coefficient, life expectancy and infant mortality under the given headings. Discuss reasons for their choices and correct if necessary.
- Refer to Figure 5.1.12. Ask learners if there are any surprises in countries ranked on the graph in terms of levels of inequality.
- Refer to Table 5.1.3 (page 214). Work out the percentage change in infant mortality in developing and developed countries between 1990 and 2009. Comment on the changes shown in the table.

Activity 6

- This activity draws on the material covered thus far in the unit. It provides an opportunity for learners to work on a case study.
- Allow the rest of the lesson for the learners to work on this activity.
- They can work in pairs or individually.
- If they cannot complete the activity in class time, they should do so for homework.

» Lesson 6

- Go through the answers to Activity 6 with the class.
- Work through the information on local differences in development.
- Refer to Figure 5.1.15 and the examples from your geographic area, of differences in levels of development. Emphasise some of the things to think about: housing, street lights, pavements, access to schools, hospitals and, transport and shops.

Activity 7

- In this activity learners summarise information and then use this information to interpret photographs in the context of development.
- Go through this activity with the learners so that they understand what is expected of them.
- Allow learners to begin the activity in class and then complete it as homework.
- Work through the section, 'Regional differences in development' (page 217).

- Table 5.1.4 compares SADC countries. Comment on differences in the contribution to the total GDP for the SADC by individual countries.
- Refer to Table 5.1.5 which compares Angola and South Africa. Discuss the legacy of civil war, landmines, destruction of farmland, roads and bridges, and the effects on the infrastructure and trade of Angola. The photos in Figure 5.1.16 show this. Point out the comparative position of South Africa.

Activity 8

- Remind the learners how to create a pie graph.
- You could use questions (2) and (3) for class discussion or ask learners to write answers to them.



Lesson 7

- Go through the answers to Activities 7 and 8 with the class. Draw the completed pie graph on the board.
- Work through the section, 'Global differences in development' (page 219).
- Refer to Table 5.1.6 which shows differences in regional development in Africa. Use an atlas to find the countries.
- Refer to Table 5.1.7 which shows the difference between the UK and Ethiopia using a selection of indicators.

Activity 9

- Allow the rest of the lesson for the learners to complete the activity and to go through the answers with them.
- Learners could work on the activity individually or in pairs.

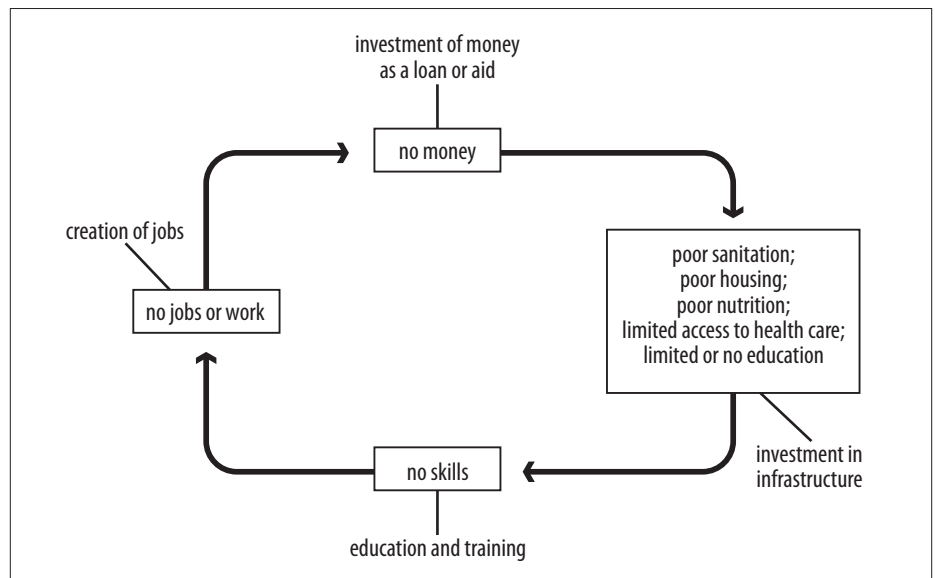
Answers

Activity 1 (Learner's Book, page 204)

1. The 'North' has the continents of North America, Europe, northern Asia and Australia; the 'south' has South America, Africa, the Middle East and most of south-east Asia.
2. They fit into the 'south'.
3. a. The similarities are that Brazil, India, and China are on both maps.
b. The differences are that the NICs include South Africa, Mexico, Thailand, Singapore and Indonesia, but not Russia.
4. The G7 countries share discussions on economic growth, trade, energy and resource requirements, demographics and other issues that relate to them and the world economy.
5. a. It is advantageous if they can bargain together and are stronger in a group. Each benefits from the others' success.
b. It can be discriminatory to label individual countries. Countries are not seen for their own independent value.
6. A label such as G7 or G20 or NIC, that is associated with our perceptions of high standards of living, wealth, and economic development, can be an advantage in that our general association applies also to one member country. The advantage can lie in preferential trade or loans for a country that is associated with a wealthy group; greater bargaining power in politics and economics can occur if the country is associated with a group that has a connotation of wealth such as G7 or G20. The negative effect of belonging to 'the South', or 'Third World', include being labelled as a poor country; loans, trade agreements and bargaining power are negatively influenced by the label.

7. G7 countries are associated with the North, colonial power, empires, industrialisation. This can have a positive or negative association depending on your viewpoint: if you are a former colony, your view may be negative because you associate their wealth with your former oppression; if you belong to the G7, you may see membership as being part of an exclusive club, where wealth brings positive associations of power and influence in global events
8. G7 countries only represent the wealthy; their view of the world is neo-colonialist; they see the poorer countries as areas waiting to be exploited for their resources, or markets for their goods.
 - a. Third World; developing; South
 - b. Second World; LEDCs; MEDCs; NICs; EAGLEs; BRIC

Activity 2 (Learner's Book, page 207)



Activity 3 (Learner's Book, page 210)

2. Northern hemisphere = Morocco, Libya, Tunisia, Algeria, Equatorial Guinea, part of Gabon
3. The Mediterranean sea is their northern coast.
4. The ancient trade routes used the Mediterranean; it connected Europe and the Middle East, with Africa; bartering of goods took place in these countries; the spread of ideas, education and commerce happened along the Mediterranean coast.
5. Mauritius and Seychelles
6. Equatorial Guinea

Activity 4 (Learner's Book, page 211)

1. upwards
2. Eastern Europe and CIS; Sub-saharan Africa
3. The collapse of communism; the USSR broke into a number of independent states
4. Sub-saharan Africa
5. Infrastructure is lacking in many countries; industry is not well developed; the countries have core urban areas which develop, often at the expense of the rural periphery so that development is uneven; fraud and corruption prevents investments from reaching communities that need it most.

Activity 5 (Learner's Book, page 213)

1. It rose slowly until the mid 1970s before dropping.
2. Income inequality increased in Mexico after 1970.
3. Norway, closely followed by Bulgaria.
4. These countries show a rise in income inequality over the years.
5. it possibly means that job opportunities are more difficult to get; and that social welfare is not favouring the poor sufficiently to raise their level of income

Activity 6 (Learner's Book, page 216)

1. a. GDP or GNP statistics are figures which, if adjusted through purchasing power parity and to one common currency, the US\$, can be used to compare countries in terms of economic development.
b. GDP does not focus sufficiently on the importance of humans and their needs and welfare.
2. Source A: Human development is more important than economic development.
Source B: Development includes the quality of life for humans.
Source C: GDP does not focus on human needs.
3. GDP is not a fair measurement for LEDCs. It does not take into account the distribution of wealth in the community, but looks only at the sum total.
4. Gini Coefficient
5. HDI; Infant mortality; life expectancy
6. Infant mortality is high where economic development is low, because a poor infrastructure means little education, or health care, and a lack of good nutrition.
7. Discuss the answers given by the learners; there are no right or wrong answers. Learners should be able to motivate a reason for their answer.

Activity 7 (Learner's Book, page 217)

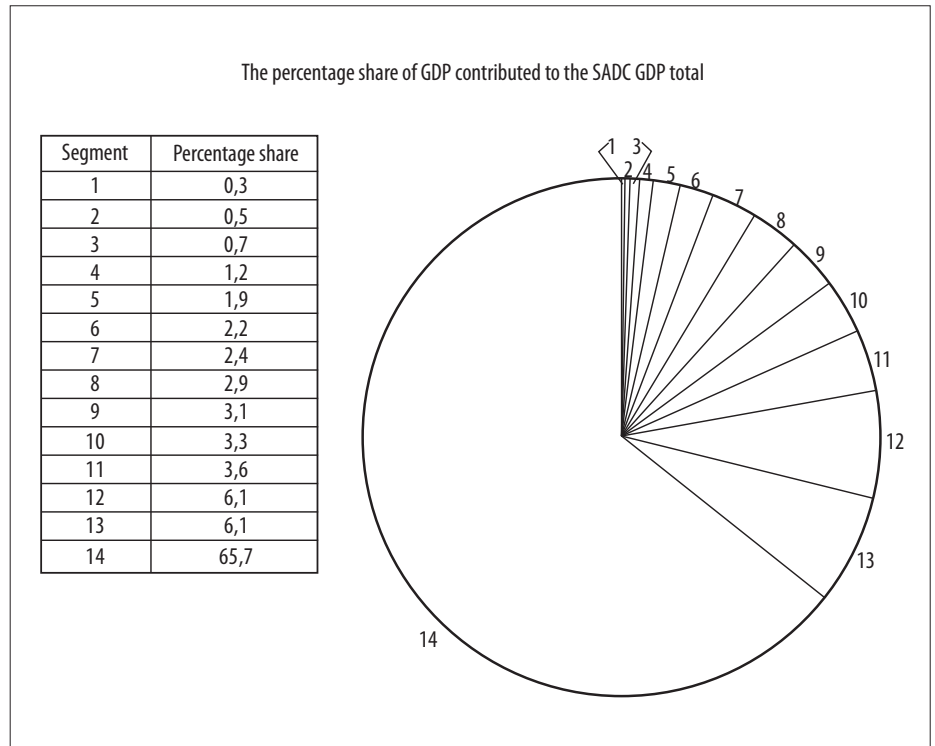
1.–3.

Indicators	Rural development	Urban development
Social	health clinics	parks
	schools	skyscrapers
	electricity	universities
Economic	roads, bridges	airports
	agricultural machinery	commercial areas
	large farms	new developments

4. Photograph A has tin roofs; housing is close together; there is no area for recreation; there appears to be little view. Photograph B shows a suburb with proper roads; there are houses of different sizes, with different roofs; there are also views.

Activity 8 (Learner's Book, page 219)

1.



2. Angola has emerged from a civil war; landmines deter farmers; fighting destroyed farms and sent families into the cities; urban and rural infrastructure was destroyed; trade with other countries stopped; there were no jobs; there was great poverty.
3. A: There is communal collection of water, because clean water is not plumbed into houses.
B: There is no school building; no chairs or desks or chalkboards; children are learning outside, sitting on the ground, in an informal school arrangement.
C: People are reliant on food aid in order to eat.
D: The houses are destroyed; there are no doors or windows; there is rubble on the ground that has not been cleared.

Activity 9 (Learner's Book, page 220)

1. Although the AEC has more people than the SADC, its per person income is less. This may be because there are fewer job opportunities for the people due to low education levels; investment may be by multinationals who use their own people in top positions; profits are repatriated to the home nation; there is not a wide spread of industry, so that income may come from the extraction of raw materials, which do not bring in high incomes.
2. Infection is often carried by contaminated water. In Ethiopia, lack of access to clean water means that water borne diseases develop. Babies are prone to infection and unclean water can lead to cholera, dysentery and death.
3. The high birth rate, lack of education, gender inequality that leads to women's lack of control over their reproductive lives, poor nutrition, lack of health clinics and doctors, and no clean water can all contribute to a high infant mortality rate.

- There are no right or wrong answers. Ask learners to read out their answers and correct them in class. Answers should show that learners want to bring improvements by encouraging access to education, more medical services, better nutrition through agricultural aid and access to irrigation in areas where this is possible. Aid should avoid corrupt officials, and have access to the community.

Informal assessment

- During discussion activities, listen to the learners' contributions and assess whether they have grasped the concepts taught in the unit. Also note whether their contributions are sufficiently insightful.
- For written activities, go through the answers with the class. Encourage learners to share their answers. Let the learners swap books and mark each other's work.
- Take in the learners' notebooks about every third week to review their work yourself so that you are able to identify any problem areas.

Remedial/extension

Remedial:

- Let learners who have difficulty with the concepts in this section create a mindmap summary of the unit and a list of concepts and their definitions.

Extension:

- Allow the learners to explore some of the websites indicated under 'Resources' on page 101 of this Teacher's Guide.
- Let learners find out what South Africa is doing to address high infant mortality rates.

Curriculum and Assessment Policy Statement (CAPS) content

Frameworks for development

- Factors that affect development, including: access to resources, energy, history, trade imbalances, population growth, education and training, natural resource limitations and environmental degradation (note: learners need to explore the complexity and inter-related nature of these factors)
- Development models: free market models, such as Rostow's model with its limitations and criticisms, core and periphery models with their application at different scales; sustainability models with their economic, social, and environmental elements
- Community based development, including approaches to rural and urban development (with examples from around the world)

Resources

- Learner's Book pages 221–240
- Atlases
- Websites (optional): answers.yahoo.com; www.chforum.org/library/xc123.shtml; makewealthyhistory.org/geographical-factors-that-affect-development; www.odi.uk/opinion/docs/5623; www.questia.com/googleScholar.qst?docid=5001871787

Preparation

- Read through the unit and familiarise yourself with the content that you will need to teach. Think about what learners may already know about the topics and any areas of difficulty that you think they might encounter.

Teaching the unit



Lesson 1

- Work through the unit's introductory paragraphs on page 221.
- For the next five minutes of the lesson, brainstorm with the learners to find out what they know about factors that affect development. Write their ideas on the board.
- Read through 'Resources affect development' (page 221). Ask learners for the categories they may remember we use for resources. Write these on the board.
- Refer to the map, Figure 5.2.1, to point out the wealth of natural resources found on the African continent. Point out where oil is found and discuss the importance of this as an energy resource and an export commodity. Point out the wealth of other minerals found throughout the SADC countries, especially South Africa. Discuss their role in industry.
- Refer to Table 5.2.1 which outlines the SADC's main natural resources. Discuss which countries have the potential to develop beyond their present position, or think of reasons why they haven't yet reached a high level of development, even though they have resources.

Activity 1

- This is a quick activity. Allow the learners to work on (1), (2) and (4) in pairs.
- Go through the answers with the class once all the learners have completed it. Do (3) as a class discussion.
- Read through how energy affects development, relating its contents to the map, Figure 5.2.1, to point out in which countries coal, oil, natural gas, or uranium are.

Activity 2

- Go through this activity with the learners so that they understand what is expected of them. Set it as a homework task.
- Work through how history affects development, referring to the map of colonial occupation in Figure 5.2.4. Discuss the slave trade, trying to understand who benefited and who suffered. Mention that slavery and human trafficking continues today, and that CNN, for example, is using its airtime to fight against the evil and wrongs of human trafficking.

- Neo-colonialism is an extension of colonial influence in new ways. Discuss how this is happening in the world, and the extent to which multinational brands, companies, advertising, songs, films, and TV programmes spread the dominant Western culture throughout the world.

Activity 3

- This activity looks at the effects on colonialism on development in Africa.
- Allow learners to begin the activity in class and then complete it as homework.



Lesson 2

- Go through the answers to Activities 2 and 3 with the class.
- Work through how the Balance of Trade affects development. Point out that it is not in volume of goods traded, but in the monetary value of goods traded. Raise the idea of challenges for trade, such as differences in currency values, commodity price changes, low prices for raw materials.

Activity 4

- Use the questions in this activity for a class discussion. Alternatively, set it as a written homework task.
- Work through the section, 'Population growth affects development' (page 227). Refer to the line graph, Figure 5.2.7, that shows the percentage increase in the population growth for the world. Remind learners of the target reached by population growth on 31 October 2011, of 7 billion people.
- Refer to the map in Figure 5.2.8 that shows figures for fertility rates. Ask learners about the effects of a high or low fertility rate in a country: the ageing or a largely youthful population, and the problems that each of those stages could bring to a country.

Activity 5

- Allow learners to begin the activity in class and then complete it as homework.
- If you do not have an atlas for each learner, allow them to work in pairs or small groups.



Lesson 3

- Go through the answers to Activity 5 with the class.
- Read the case study, 'The lost kingdom of Niger' (page 230) to the learners.

Activity 6

- Go through this activity with the learners so that they understand what is expected of them. Set it as a homework task.
- If learners have time at the end of the lesson, they can start working on this activity.
- Work through the sections, 'Education and training affect development' (page 230), 'Restricted natural resources affect development' (page 232) and 'Environmental degradation affects development' (page 232).

Activity 7

- Use the questions in this activity for a class discussion. Alternatively, set it as a written homework task.

Activity 8

- Allow learners to begin the activity in class and then complete it as homework.
- If you do not have an atlas for each pair of learners, allow them to work in small groups.



Lesson 4

- Go through the answers to Activities 6 and 8 with the class.
- Work through the section, 'What development models are there?' (page 232). Point out Clarke's Economic Sector Development Model, Table 5.2.2.

Activity 9

- Go through this activity with the learners so that they understand what is expected of them. Set it as a homework task.
- If learners have time at the end of the lesson, they can start working on this activity.
- Work through the section, 'Stages of Economic Growth' (page 234).
- Refer to Figure 5.2.10 to show Rostow's development model. Draw this on the board, and discuss the characteristics of the stages that are in Table 5.2.3.

Activity 10

- Allow learners to begin the activity in class and then complete it as homework. They should work in pairs.
- If you do not have an atlas for each pair of learners, allow them to work in small groups.



Lesson 5

- Go through the answers to Activities 9 and 10 with the class.
- Work through the section, 'Core-Periphery Model' (page 235).
- Refer to Figure 5.2.11 to show Friedman's Core-Periphery Model. Explain the scale of the model, which means it can be used to show the relationship between cities and the surrounding areas, or capitals and the provinces, or colonies and the imperial power.

Activity 11

- Let learners complete this activity in small groups.
- After about 15 minutes, allow time for learners to share their answers with the class.
- Work through the section, 'Sustainability models' (page 237).
- Figure 5.2.13 shows the model of the three legs of sustainable development: the economy, society and the environment. Point out that if one part of the three is overlooked, then there is no sustainability. The three need to receive the same focus in development strategies.



Lesson 6

- Go through the answers to Activity 10 with the class.
- Work through the section, 'What is community-based development?' (page 238). Refer to the map of Africa in Figure 5.2.15 to show the location of community based development projects led by Khanya-AICDD.
- Allow the rest of the lesson for the completion of Activities 12 and 13.

Activity 12

- Use the questions in this activity for class discussion. Alternatively, set it as a written homework task.

Activity 13

- Allow learners to begin the activity in class and then complete it as homework.
- Let learners complete this activity individually.

Answers

Activity 1 (Learner's Book, page 223)

1. and 2.

Land	Labour	Capital	Entrepreneurship
forest	forestry worker	investment	twitter
airport	pilot	desk	Handy Andy
iron ore	farmer	stock exchange	
maize		aircraft	
		a house	
		vineyards	

3. The development and cultivation of vineyards may be thought of as entrepreneurship, as they are an output of a more developed mind, as is the construction of an aircraft.
4. A = renewable (wind turbine energy); B = non-renewable (mining); C = non-renewable (forestry); D = renewable (human capital)

Activity 2 (Learner's Book, page 224)

1. Sub-Saharan Africa is rich in natural resources.
2. Agree: energy in the form of natural gas or petroleum commands high prices and is the single factor that distinguishes the wealth and economic development of one country from another.
Disagree: although petroleum and natural gas can bring wealth they are not the single factor that affects the level of economic development of countries of Africa, as African countries with diamonds, gold, coal and uranium, such as South Africa, have developed without access to deposits of petrol or natural gas.
3. Namibia and South Africa
4. Uranium is used for nuclear energy, which is cleaner than thermal energy; it is also a component in a nuclear weapon, and weapons are politically and militarily strategic to have.
5. Madagascar, South Africa and Zimbabwe
6. Angola

Activity 3 (Learner's Book, page 226)

2. a. The UK received cotton and raw materials for its industries; the products of the industries were then sold in the African countries. This had a positive impact on the UK.
 - b. Africa lost thousands of young, healthy, workers. This had a negative effect on the demographics of the area. African countries exposed to the slave trade suffered culturally, socially, politically and economically as a result of a de-stabilisation process of slavery. The slave trade had a negative effect on African countries.
- 3.

	Colonial power	Present African country
1	Belgium	Democratic Republic of the Congo, Burundi, Rwanda
2	France	Morocco, Algeria, Tunisia, Mauritania, Mali, Niger, Chad, Gabon, Madagascar, Mauritius
3	Germany	Namibia, Tanzania, Benin, Cameroon
4	Italy	Libya, Eritrea, Somalia
5	Portugal	Angola, Mozambique
6	Spain	Western Sahara, Equatorial Guinea
7	UK	Egypt, Sudan, Uganda, Kenya, Malawi, Zambia, South Africa, Zimbabwe, Botswana, Lesotho, Swaziland, Nigeria, Ghana

4. UK, France, and then Germany / Belgium / Italy
5. *Colonialism*: having a colony in another country that is formally ruled or controlled by the mother country.
Neo-colonialism: exerting an informal power over another country for purposes of natural resource exploitation or trade.
6. India, China, Russia and America
7. Africa has strategic raw material resources; there are few rules and regulations regarding their exploitation; Africa provides cheap labour; Africa provides a huge market for manufactured articles

Activity 4 (Learner's Book, page 227)

1. Poorer countries lack infrastructure such as education, transport and industrial development. This makes them dependent on the export of raw materials, which have less value than a final product.
2. Fair trade is a movement designed to bring more equity to world trade by empowering producers and farmers in poorer countries. Preferential trade agreements, and reducing import tariffs and quotas, is another way that poorer countries can be helped to trade.
3. The value of the exports must balance with the value of the imports.

Activity 5 (Learner's Book, page 229)

1. After 1960 it increased, reaching a peak before 1970.
2. It has been dropping downwards since then, with two small spikes upwards in the 1980s.
3. North America, Europe, Asia and Australia
4. Angola, The DRC, Mali, Chad, Somalia
5. Africa

6. Overpopulation occurs when the population in a country is greater than the resources necessary to sustain the people.
7. access to family planning; later age of marriage; education; more equal roles for women in society; job opportunities

Activity 6 (Learner's Book, page 230)

1. *Land*: groundnuts, uranium, people, arable land.
Labour: people, foreign aid.
Capital: budget, income, foreign aid.
2. a. A problem is that other countries may fight to gain possession of uranium because it is strategically important as a resource.
b. An advantage is that the country will become powerful, or receive money which can be used for economic development and growth.
3. The country is very poor. Half of its so called 'wealth' comes from other people giving aid.
4. It is a good thing because Mali is desperately poor and its citizens need help of any sort.
It is a bad thing because it could go to corrupt officials; it could discourage Malians from doing work to promote their own development.
5. One commodity for export is a problem. Prices for the commodity could decline, or the product's use could decline if an alternative substance replaced it. This would impact the economy, because it is the sole source of income from exports.
6. The rate of desertification has been 160 km in 25 years.
7. There is poverty, little education, no infrastructure, no job opportunities. Life is hard. There is a high infant mortality rate. Women have no access to family planning, and have little control over their reproductive lives.
8. a. There will never be sufficient schools for the young population.
b. Job opportunities may exist but cannot be filled if there are an insufficient number of educated people.
c. Overpopulation will affect the quality of life for the citizens of Niger.
9. If there is a predominantly young population, it will place demands on the government to educate them, but the proportion of active population is too small, suggesting the need for foreign aid.
10. There are no right or wrong answers, but listen to the answers of a number of learners to point them in the right direction: there is very little one can do with an income of R1 190 per year.

Activity 7 (Learner's Book, page 231)

1. Technical training teaches you how to do things; Tertiary education teaches you how to think.
2. Tertiary education: become leaders, innovators, professionals.
Technical training: become vocationally qualified as draughtsmen, electricians, engineers, plumbers.
3. Problems such as resentment, frustration, and agitation can develop if skilled people are not employed.

Activity 8 (Learner's Book, page 232)

1. Use an atlas to check this. The areas between the tropics are generally amongst the poorer nations of the world.
2. yes
3. Any three: (1) money for the raw material – wood; (2) space for agriculture, pasture for animals; (3) use of materials for fuel, furniture and housing; (4) space for communication road networks (5) space for housing

4. (1) The trees are an invaluable, scarce resource. (2) Forests provide the ecosystem and habitat for thousands of species of plants and animals. (3) Forests provide unexplored wealth of resources for pharmaceuticals, e.g. medicines.
5. There will be various opinions: developed countries have taken what they want and if they are still taking resources they are responsible for degradation. Through oil exploration they continue to ruin forests. The developing countries have a need to develop and create wealth for their citizens. This may mean having no option but to use their forest resources.
6. Learners own opinions.

Activity 9 (Learner's Book, page 233)

1. They must have relevance; they must be simple; they can be scaled up or down; they are general templates.
2. A *command economy* is found in a dictatorship or repressive, strongly centralised, and controlled state, e.g. a communist state.
A *free market economy* is part of a democratic government where prices adjust according to supply and demand and there is the minimum of government intervention.
3. investment
4. job increases, in the secondary and tertiary sectors
5. They were made, using the template of development of the wealthier North. The poorer South is not as developed as the North. Perhaps they could be applied to the South, if the North did not exist except as a resource base for the South. It is impossible to predict because the South faces the competitive markets of the North.

Activity 10 (Learner's Book, page 235)

1. and 2.

	Stages of Development	World examples	South African examples
1	Traditional society	Amazonian tribes	Rural tribal communities
2	Pre-take off	Mali, Niger	Eastern and Northern Cape
3	Take off	Libya, Algeria	Parts of the Eastern Cape
4	Drive to maturity	Namibia	Parts of Gauteng, Western Cape
5	Age of mass consumption	USA, UK	Provincial capitals

3. multilateral or bilateral aid in the form of investment
4. Yes. This is the development of the highest standard of living to which all people should be able to aspire.

Activity 11 (Learner's Book, page 236)

1.

	Core	Periphery
1	Johannesburg	Limpopo Province
2	Portugal	Mozambique
3	England	India
4	United States	Mexico

2. This answer will vary. Be guided by the typical things to look for below:
- workers, land, raw materials, agricultural products
 - money, electricity, services, infrastructure, e.g. hospitals, clinics, schools

Activity 12 (Learner's Book, page 240)

- Uganda, Kenya, Tanzania, Zambia, Mozambique, Zimbabwe, Namibia, Botswana, Lesotho, South Africa
- empowerment, new skills; technical knowledge; responsibility for management and service delivery; accountability
- areas of conflict; don't want involvement; language difficulties; communication problems

Activity 13 (Learner's Book, page 240)

- farmers bring in fruits to a central point; others make tomato paste, jam, juice and cheese in factories; packaging and marketing centres operate; commercial management opportunities exist
- Agricultural, technical, marketing and management skills are needed.
- Many people are better than few in accomplishing tasks.
 - Individualism may be stifled and competitive advantages lost.
- There will be different answers, but these are some suggestions: litter campaigns; recycling; tuck shops; newspaper deliveries.
- A rural community development project may be more concerned with agriculture and pastoralism. The provision of clean water, and the setting up of basic support structures such as health clinics and schools and transport; in an urban area, the infrastructure is there, but there may be homeless people, or people who are in informal settlements that lack clean water, electricity, transport. Community projects can help in providing training for jobs, and marketing of local art.

Informal assessment

- During discussion activities, listen to the learners' contributions and assess whether they have grasped the concepts taught in the unit. Also note whether their contributions are sufficiently insightful.
- For written activities, go through the answers with the class. Encourage learners to share their answers. Let the learners swap books and mark each other's work.
- Take in the learners' notebooks about every third week to review their work yourself so that you are able to identify any problem areas.

Remedial/extension

Remedial:

- For learners who need extra practice with the concepts in this module thus far, let them complete Worksheet 17 on page 308 in the Resources section of this Teacher's Guide. This worksheet can also be used for revision purposes.

Extension:

- Allow the learners to explore some of the websites indicated under 'Resources' on page 109 of this Teacher's Guide.

Learner's Book
pages 241–256
Duration: 6 hours

UNIT 3

Trade and development

TERM 3, WEEKS 4–5

Curriculum and Assessment Policy Statement (CAPS) content

Trade and development

- International trade and world markets: commodities traded and terms of trade
- Types of trading relationships, including: free trade, trade barriers, subsidies and fair trade
- The concept of globalisation and its impact on development
- Export-led development – critically examined (with examples from around the world)

Resources

- Learner's Book pages 241–256
- Large world map or atlases
- Websites (optional): en.wikipedia.org/wiki/Trade_and_development; www.unctad.org; www.wto.org; ictsd.org/events/tdsf; www.sadc.int/

Preparation

- Read through the unit and familiarise yourself with the content that you will need to teach. Think about what learners may already know about the topics and any areas of difficulty that you think they might encounter.

Teaching the unit



Lesson 1

- Work through the introduction to the unit and the section, 'How did international trade develop?' (page 241).
- Ask the learners what obstacles could have hindered trade long ago and how trade differs now.
- Use a world map or class atlases to discuss how early sea voyages of exploration opened up the world for trade. Locate the major rivers and waterways of the world. Point out how rivers spread knowledge, culture, people, and goods. Use the map of the world, or of continents to find physical obstacles that impeded man's exploration and ability to trade.
- Focus on the meaning of 'terms of trade' and 'balance of trade'.
- Read the differences between LEDCs and MEDCs with regard to trade.

» Lesson 2

- Set aside this lesson for the learners to complete Activities 1 and 2.

Activity 1

- Use the questions in this activity for class discussion. Alternatively, set it as a written group task.

Activity 2

- Let the learners work on this activity in pairs.
- Allow learners to begin the activity in class and then complete it as homework.

» Lesson 3

- Go through the answers to Activity 2 with the class.
- Work through the section, 'What types of trading relationships exist?' (page 245), beginning with 'Free trade' and then moving on to 'Free trade blocs'.
- Refer to the round of talks that occur through GATT and the WTO, and that these two organisations are products of the United Nations. Discuss the advantages that the SADC has with trade, and the talks to bring about a Common Market for East and Southern Africa.
- Refer to the world map in Figure 5.3.8 to show free trade areas in the world.

Activity 3

- Allow learners to begin the activity in class and then complete it as homework.
- Let the learners work on the activity individually or in pairs.

» Lesson 4

- Go through the answers to Activity 3 with the class.
- Work through the section, 'Trade barriers and subsidies' (page 247) with the learners, making sure that the concept is understood.
- The line graph in Figure 5.3.9 shows the import of textiles and clothing by SA from the world and from China. Indicate what happened to the graph line when quotas were introduced in 2006/2007. Discuss the positive and negative effects of quotas for a country. In the case of protection of our domestic textile industry, ask the learners if they can see what the effect on more recent imports has been (refer to Figure 5.3.9).

Activity 4

- Go through this activity with the learners so that they understand what is expected of them. Set it as a homework task.
- If learners have time at the end of the lesson, they can start working on this activity.
- Work through the section, 'Fair trade' (page 248), with a focus on the ethical dimension of the free trade debate. Ask the learners to collect free trade logos on goods, or to look out for them in magazines or on food items.

» Lesson 5

- Go through the answers to Activity 4 with the class.
- Work through the section, 'How has globalisation impacted on development?' (page 249), pointing out the wide nature of globalisation in all areas of life, its origins and fast growth. Ask the learners if they feel the world should accept and speed up globalisation, or if they feel people might fight the spread of globalisation, and if so – why they feel that it may happen.
- The case studies and Figure 5.3.11 reveal inequalities in the world. Discuss these with the class.

Activity 5

- Allow learners to work on this activity in pairs and complete it in class.

Activity 6

- Go through this activity with the learners so that they understand what is expected of them.
- Allow learners to begin the activity in class and then complete it as homework.

» Lesson 6

- Go through the answers to Activities 5 and 6 with the class.
- Work through the section, 'What is export-led development?' (page 252).
- Refer to the line graph, Figure 5.3.14, that compares China's exports with that of the average exports for the developed and developing countries of the world. Discuss the role of China as a giant factory for the world. Ask the learners what goods or textiles that they find from China. Discuss why China can produce goods so cheaply and saturate the markets through exports: huge population, abundant resources, drive to industrialisation, major government drive to export to the world.

Activity 7

- Use the questions in this activity for class discussion.
- Work through the section, 'Advantages and disadvantages of export-led development' (page 253).
- Refer to the histogram in Table 5.3.1 that shows the breakdown of exports for South Africa, 2009. Comment on the variety of exports. Point out the benefits of a spread of exports.

Activity 8

- Allow the learners to complete this activity in class. They could work individually or in pairs.
- After about 15 minutes, go through the activity with the learners allowing them to share their answers.

Activity 9

- Go through this activity with the learners so that they understand what is expected of them. Set it as a homework task.
- If learners have time at the end of the lesson, they can start working on this activity.

Answers

Activity 1 (Learner's Book, page 244)

1. food, skins, wood
2. International trade needed nations, or countries, or States across borders to be called 'international'.
3. Sea routes had not been discovered around Africa; air routes did not exist.
4. Rivers were often navigable for long distances from the ocean up towards the source. This meant that communities living alongside the river could use the river to transport heavy goods and trade with each other.
5.
 - a. Portugal gained first access by sea to the spices and resources of Africa and India. This was an advantage in creating a wealthy empire.
 - b. African coastal areas received weapons, new products, and came into contact with European civilisation.
 - c. India received goods from Europe which could not be found in India. Their own resources were traded and brought them either goods they wanted or wealth.
6. Ask the class to read out their answers, correcting where necessary. Benefits included access to new goods, and knowledge; disadvantages included contact with diseases from Europe, culture clashes, breakdown of way of life.

Activity 2 (Learner's Book, page 244)

1. 'Terms of trade' refers to the price of a country's exports relative to the price of the country's imports.
2. The volume of exports can increase and be positive if the value of the exports also rises.
3. LEDCs can export commodities such as sugar, coffee, tea, rubber, hardwood and other agricultural raw materials or minerals as ore.
4. Better farming methods, better crops, pesticides – can all lead to more being produced for export. Hybrid crops are more hardy and resistant to changes in climate.
5. 'Deteriorating terms of trade' means that the value of the exports of LEDCs drops.
6. Natural disasters such as earthquakes, tropical cyclones, flooding, tsunamis, and volcanoes can all affect agricultural and mineral output.
7. All countries need to trade in goods where they have a comparative advantage, and can produce more cheaply than other countries, in order to receive what they need.

Activity 3 (Learner's Book, page 247)

1. Free trade has no regulations such as quotas, taxes, tariffs and subsidies regarding the amount or price of the goods.
2. A trade bloc reduces regulations amongst member countries, making it easier for goods to cross borders without customs' controls; the bloc has greater bargaining power in reducing the regulations of other countries, so as to encourage trade; business, services as well as trade in goods is encouraged and simplified.
3. Protection of domestic, new industries or of agricultural products has to be forgotten in favour of the greater scheme of the trading bloc.
4. GATT stands for General Agreement on Tariffs and Trade.
5. GATT initiated talks to remove rules and regulations protecting the industries and output of countries in order to free trade for all countries.
6. World Trade Organisation (WTO)
7. 75 member countries

8. Goals of WTO are: to improve the standards of all people by correcting imbalances of trade between LEDCs and MEDCs. This will promote growth and development and help reduce poverty.
9. No. There is an imbalance of trade between LEDCs and MEDCs because of the difference in the value of the exports of each group. To create a more equal basis of trade, the LEDCs should be allowed to raise up to 20% in tariff increases on their agricultural products and raw materials.
10. NAFTA (North American Free Trade Association); European Union; Southern African Development Community

Activity 4 (Learner's Book, page 248)

Answers will be different. Some advantages are: trade barriers and subsidies protect domestic production, stimulate economic growth and job opportunities. Disadvantages are that domestic production is not encouraged to be competitive, and will collapse with better quality imports being bought. This leads to higher costs, and inflation in a country, and job losses.

Activity 5 (Learner's Book, page 251)

1. Globalisation is the worldwide trade in goods and services, as well as the worldwide spread of culture, style, communication, marketing and cyber-connections.
2. Anything: e.g. computer, camera, jeans, trainers, software programmes, movies.
- 3.

	Advantages	Disadvantages
1	culture spreads	lose one's own culture
2	language is universal	lose one's own languages
3	access to cheaper imports	domestic output can't compete
4	food is universal	national food is forgotten

Activity 6 (Learner's Book, page 252)

1.
 - a. similar: large impersonal factory; many workers; no view; work stations only
 - b. different: Mexico has a chaotic, poorly organised system while the sweatshops are highly organised
2. there is little ventilation or air-conditioning; working conditions are hard; people sweat
3. poor wages; long hours; six days a week labour; no unions to represent them; underage children
4. Figure 5.3.13B – (a) usual Nike logo shape; (b) unusual strapline, e.g. 'Sweatshops: poverty is awesome'.
5. To shock users of Nike into awareness of the issues of sweatshops operated by Nike.
6. Globalisation allows large corporations to go where rules and regulations are non-existent. The wages are low, and operating costs are lower, allowing the large multinationals to maximise their profits.

Activity 7 (Learner's Book, page 253)

1. Countries stimulate their economic growth by encouraging and helping in the export of goods.
2. China
3. 1998, 2006/2007
4. there may have been a worldwide economic decline and a drop in the demand for goods
5. Developed countries are importing cheaper goods produced where labour costs are lower, amongst the developing countries, which are exporting more.

Activity 8 (Learner's Book, page 255)

1. a. 6,73%
b. 32,39%
c. 2,72%
d. 14,36%
e. 34,49%
2. They may be high in volume but lower in value.
3. No. Agricultural goods do not have value added.

Activity 9 (Learner's Book, page 256)

1. Southern African Development Community
2. An export-led economic growth would reduce dependence on imports. Imports are expensive because they would come from more developed countries. Malawi's raw materials do not get much money. They need to diversify from commodities to industrial exports.
3. (1) tax allowances of up to 15% of all export revenue if it is other than the commodities exported; (2) no duties on imports of equipment used in manufacturing the exports; (3) no corporate tax; (4) no VAT; (5) no duty on raw materials
4. to diversify what Malawi is able to export and to move away from the commodity based exports
5. Free Trade Area

Informal assessment

- During discussion activities, listen to the learners' contributions and assess whether they have grasped the concepts taught in the unit. Also note whether their contributions are sufficiently insightful.
- For written activities, go through the answers with the class. Encourage learners to share their answers. Let the learners swap books and mark each other's work.
- Take in the learners' notebooks about every third week to review their work yourself so that you are able to identify any problem areas.

Remedial/extension**Remedial:**

- Let learners who have difficulty with the concepts in this section create a mindmap summary of the unit and a list of concepts and their definitions.

Extension:

- Let the learners complete Worksheet 18 on page 312 in the Resources section of this Teacher's Guide. It draws on all the concepts in this unit and focuses on globalisation.

Curriculum and Assessment Policy Statement (CAPS) content

Development issues and challenges

- The role of women in development: gender issues related to power, access to resources and attitudes
- The effect of development on the environment
- The role of the state and business in development in South Africa, including central control by the state, weak state control and public or private partnerships

Resources

- Learner's Book pages 257–268
- Atlases
- Websites (optional): www.dotchley.co.uk/page/99/women.developing.world; www.un.ngs.org/spip.ph; www.worldbank.org; www.ucl.uk/UN_1999_World_Survey_Women_in_Developing
- You may find *National Geographic* DVDs that focus on the effects of development on the environment. Hurricane Katrina can be shown to focus on how the effects of storms are greater because of man's interference with the environment.

Preparation

- Read through the unit and familiarise yourself with the content that you will need to teach. Think about what learners may already know about the topics and any areas of difficulty that you think they might encounter.

Teaching the unit



Lesson 1

- Work through the section, 'What is the role of women in development?' (page 257) pointing out that it is fairly recent in the world's history that women have been able to vote.
- Refer to Table 5.4.1 showing women in positions of power both in South Africa and the world. Discuss attitudes towards women in positions of power. Ask learners for their opinions and capture their ideas on the board.

Activity 1

- Allow learners to begin the activity in class and then complete it as homework.
- If you do not have an atlas for each learner, allow them to work in pairs or small groups.

Activity 2

- Go through this activity with the learners so that they understand what is expected of them. Set it as a homework task.
- If learners have time at the end of the lesson, they can start working on this activity.



Lesson 2

- Go through the answers to Activities 1 and 2 with the class.
- For the next five minutes of the lesson, brainstorm with the learners to find out what they know about the effect of development on the environment.
- Work through the section, 'What effect does development have on the environment?' (page 261).
- Refer to Figure 5.4.7 which shows coastal pollution in South Africa. Ask the learners for examples of pollution from development, and write these on the board. Discuss how the impact of development can be less harmful and more sensitive to the environment.
- Refer to Figure 5.4.9 pointing out the importance of coral reefs. Refer to the map in Figure 5.4.10 which shows where coral reefs are located and where they are most threatened.



Lesson 3

- Allow this lesson for the learners to complete Activity 3 and for you to go through the answers.

Activity 3

- Go through this activity with the learners so that they understand what is expected of them.
- Let the learners work on the task in pairs.
- Allow time at the end of the lesson to go through the answers with the learners. Let them share their responses with the class.



Lesson 4

- Work through the section, 'What role do the State and business play in development in South Africa?' (page 265). Learners may remember some of this work from EMS.
- Refer to Table 5.4.2 to point out the various categories of small businesses. Ask learners for examples of each enterprise, from the surrounding community, and write these on the board to consolidate their learning.

Activity 4

- Use the questions in this activity for class discussion. Alternatively, set it as a written homework task.

Activity 5

- Allow learners to begin the activity in class and then complete it as homework.
- They could work in pairs or individually on the activity.

Answers

Activity 1 (Learner's Book, page 260)

1. Greenland, parts of Indonesia, Western Sahara
2. Ireland
3. Niger, Chad, Somalia, Angola, DRC, Peru, North Korea, Saudi Arabia, Iraq, Iran, Afghanistan, Thailand, and Papua New Guinea
4. developing world
5. A poor infrastructure limits education, and women or girls suffer most. Discrimination is often greatest where knowledge is least.

Activity 2 (Learner's Book, page 261)

1. Women are not children! Their work is demanding and responsible and they are often the sole figure of authority in the house if the man leaves for work elsewhere, yet they are not recognised legally in their own right, which is demeaning.
2. Women are prevented from borrowing money, cannot conduct business, are dependent on men in the family for the schooling of their children, cannot buy or sell houses. This means that half of the workforce is unable to conduct business, which must hinder economic development.
3. The Maputo Protocol was signed by 15 countries that agreed to eliminate discriminatory gender laws by 2015.
4. *Political*: women cannot apply for passports and have no power in the eyes of the law
Social: women cannot borrow money or own property; they are dependent on male members of their family
5. Discriminatory practices against women will have to stop. Women must have equal rights in the law and in finance.

Activity 3 (Learner's Book, page 265)

1. Generally in the tropics or on the eastern coasts of continents; around the Red Sea and Gulf of Arabia.
2. Pacific Ocean
3. Warm currents flow from the equator southwards down the east side of continents.
4. dynamite fishing
5. pollution
6. pollution from factories into the atmosphere causes acid rain which affects coral growth; pollution on land into the rivers affects the coral reefs in the sea
7. Indian Ocean, then SE Asia and Middle East almost equal, then Caribbean and finally the Pacific Ocean
8. Winds and ocean currents carry pollution across national boundaries. It is difficult to prevent their impact elsewhere.
9. Listen to the learners answers. Points: destruction of coral reefs highlight amount of rising sea temperatures, acid rain, and pollutants in the ocean. Coral reefs generate \$375 billion in annual revenue; protects the coastlines of 109 countries; habitat for 25% of our fish species; can be a source of pharmaceutical research; basis for 10% of the world's diet.
10. Yes. It rhymes with 'reefs' and we should grieve for what is happening to the coral in the world.

Activity 4 (Learner's Book, page 267)

1. Listen to learners' answers and check if you feel they are appropriate. Write the answers on the board to capture a variety of examples for (a) to (e).
2. Listen again to the answers and correct if necessary, using Table 5.4.2 as your reference.
3. to encourage economic development, provide more jobs, wages, and a positive growth effect for the country; to safeguard the workers

Activity 5 (Learner's Book, page 268)

1. connection to the electricity grid; an organic farm; a composting facility and food-processing plant; offices; a guest house; sanitation and clean water; an arts and culture centre; and more job opportunities
2. Yes. It is community based, is relevant, necessary as a basic need (jobs, food, education, and clean water).
3. The State wishes to focus on education, basic human needs, job creation and the reduction of poverty, sustainable development. This is fostered by public-private partnerships as in this example.

Informal assessment

- During discussion activities, listen to the learners' contributions and assess whether they have grasped the concepts taught in the unit. Also note whether their contributions are sufficiently insightful.
- For written activities, go through the answers with the class. Encourage learners to share their answers. Let the learners swap books and mark each other's work.
- Take in the learners' notebooks about every third week to review their work yourself so that you are able to identify any problem areas.

Remedial/extension**Remedial:**

- Let learners who have difficulty with the concepts in this section create a mindmap summary of the unit and a list of concepts and their definitions.

Extension:

- Allow the learners to explore some of the websites indicated under 'Resources' on page 123 of this Teacher's Guide.
- Let learners research the role women play in politics and in the business world in any developing country of their choice.

Curriculum and Assessment Policy Statement (CAPS) content**Role of development aid**

- Concept of development aid and development co-operation
- Types of development aid – technical, conditional, humanitarian
- Impact of aid on development (including case studies of development aid – positive and negative)

Resources

- Learner's Book pages 269–279
- Websites (optional): en.wikipedia.org/usaaid; www.oecd.org.dac/; www.wto.org/trade-topics/development; www.reliefweb.int/node/21608
- Your library may have copies of topical news magazines such as *Time*, *The Economist*, *Newsweek*, as well as newspapers, which all contain information about developing countries and aid.

Preparation

- Read through the unit and familiarise yourself with the content that you will need to teach. Think about what learners may already know about the topics and any areas of difficulty that you think they might encounter.

Teaching the unit

» Lesson 1

- Ask the learners for their ideas about aid and write them on the board.
- Work through the section, 'What does development aid and development co-operation mean?' (page 269).
- Focus on the four issues raised by the Africa Partnership Forum, 2011. Write them on the board and discuss why each is important for effective development programmes in Africa.
- Discuss the contributions of over 0,7% of the GNI of wealthy countries towards aid. Table 5.5.1 shows the highest contributors, and Table 5.5.2 shows countries that had not reached the target of 0,7% for aid giving. Are there any surprises?

» Lesson 2

- Allocate this lesson for the completion of Activity 1.

Activity 1

- Go through this activity with the learners so that they understand what is expected of them.
- Let them work on the activity in pairs or individually.
- Allow time at the end of the lesson to go through the learners' answers.

» Lesson 3

- Work through the section, 'What types of development aid are there – technical, conditional, humanitarian?' (page 273).
- Refer to Table 5.5.3 that shows the types of aid, with examples.
- The Green Revolution was studied in Grade 9. Ask the learners what it means and write their points on the board. Refer to Figure 5.5.7 which shows the outcome of improvements brought about by the Green Revolution.

Activity 2

- Go through this activity with the learners so that they understand what is expected of them. Set it as a homework task.
- If learners have time at the end of the lesson, they can start working on this activity.
- Point out problems of conditional aid.

Activity 3

- Use the questions in this activity for class discussion. Alternatively, set it as a written homework task.
- Read the case study, 'Money in the bank' (page 277) with the learners.

Activity 4

- Allow learners to begin the activity in class and then complete it as homework.
- Let learners work on this activity in pairs.



Lesson 4

- Go through the answers to Activities 2 and 4 with the class.
- Work through the section, 'What is the impact of aid on development?' (page 278). Discuss the fact that aid is not always positive, and can be viewed with suspicion by states as a form of neo-colonialism, is often subject to corruption, and is rarely paid back.
- Figure 5.5.10 shows the fact that most aid has little effect on economic growth.
- Discuss the criticisms of giving aid and ask learners for their opinions of how aid can be useful.

Activity 5

- Allow learners to begin the activity in class and then complete it as homework.
- Learners need to complete the activity individually.

Answers

Activity 1 (Learner's Book, page 272)

1. Countries will always need aid either because they are in dire poverty and need help to develop, or because of natural disasters, or because conflict has destroyed their infrastructure and economies and they need to rebuild.
2. a. Red Cross
b. community outreach programmes; hospice
3. a. Answers will differ. To which four organisations; for what reason the money would be given.
b. Answers will differ.
c. only some people may get the money; people giving the money may be corrupt too; it might not be what the people want; people may resent the gift; aid in the form of work or assistance may be better accepted and needed
d. Work from the bottom-up with the community to ask their needs and how best to fill them.
4. Austria, Canada, Finland, Germany, Ireland
5. No. They are small, but one of the wealthiest nations. Social conscience is strong.

Activity 2 (Learner's Book, page 275)

1. The use of technology and innovation in all forms of agriculture.
2. Two tons per hectare in India (using FAO figures). Use Figure 5.5.7 for the average for developing countries: it is one half ton per hectare.
3. two and half tons per hectare (FAO figures)
4. 500% increase

5. Poorer countries do not have the infrastructure to maintain technology. Hybrid seeds can only be used for one sowing and farmers cannot buy more if they don't have enough money.

Activity 3 (Learner's Book, page 277)

1. *Multilateral aid* is aid given by many for many, e.g. UNESCO. *Bilateral aid* is between two countries and comes with strings attached, e.g. weapons for oil.
2. Conditional aid means there are conditions that have to be met before the aid is given. In this sense, a country is tied to a policy if it wants to keep the aid.
3. Bilateral aid is an extension of influence or power over the poorer country by the wealthy country. The USA's bilateral aid packages are removed if a country acts independent of the USA or deals with countries that the USA is hostile towards.

Activity 4 (Learner's Book, page 278)

1. Humanitarian aid helps people who are in distress or suffering.
2. *Advantages*: people receive first-hand help in emergencies; food; clean water; medicine; and shelter
Disadvantages: aid can be abused; food and medicine can be sold on the black market; shelters can be taken away in armed conflict
3. identify priorities; provide protection; transport to the point of need; provide basic needs; and safeguard the distribution of aid

Activity 5 (Learner's Book, page 279)

1. A paragraph should contain several sentences. The paragraph should clearly show 'disadvantages' and 'advantages' of giving aid to developing countries.
Disadvantages: corrupt officials, armed conflict, looting, riots for receiving aid, a culture of dependency where aid is regarded as handouts to be expected.
Advantages: help in extreme need which is life-saving, can provide investment for community projects that are sustainable and help in economic growth, can prevent diseases, can increase knowledge of improved farming to sustain people.

Informal assessment

- During discussion activities, listen to the learners' contributions and assess whether they have grasped the concepts taught in the unit. Also note whether their contributions are sufficiently insightful.
- For written activities other than Activity 5, go through the answers with the class. Encourage learners to share their answers. Let the learners swap books and mark each other's work. For Activity 5, take the learners' books in and assess their paragraphs yourself.
- Take in the learners' notebooks about every third week to review their work yourself so that you are able to identify any problem areas.

Remedial/extension

Remedial:

- Let learners who have difficulty with the concepts in this section create a mindmap summary of the unit and a list of concepts and their definitions.

Extension:

- Allow the learners to explore some of the websites indicated under 'Resources' on page 127 in this Teacher's Guide.
- Ask the learners to select an aid agency from Table 5.5.3 (page 273) to research further.

This fieldwork task is linked to the content of Module 3.

- Use a class atlas to find the area you are in.
- If you have a 1:50 000 topographical map of your area, place this on the wall for the learners to consult. (You can obtain one from the Department of Land Surveying and Mapping, Mowbray, Cape Town).
- Remind the learners about what is needed to present their assessment: A4 paper, a sketch map of the area, and Core and Periphery annotated on the sketch map. Learners must refer to the sketch map when they discuss levels of development in the Core and Periphery.
- Remind learners of the Core-Periphery Model and the terms associated with it which they need to use correctly, such as backwash; spread; trickle-down; trickle-up.
- Ask them how the model can be applied to the area where they are.
- Get them to create mindmaps and to share their ideas. Put some of their ideas on the board.
- Go through the 'What to do' list.
- The sketch map can be done in class.
- Encourage the learners to draw two columns, labelled 'core' and 'periphery'. They can list the differences in levels of development in this table, as a start.
- Ask a learner to explain one point under his/her list of core, and one point from the periphery column.
- Why was the point chosen? What is the reason for the development or lack of development? What positive or negative effects can flow from each point?
- Once the learners understand the process of analysis, explanation, and the evaluation and assessment of the impact of the differences in development in the area, they are in a position to offer their own opinion in a conclusion.
- The conclusion must comment on what is necessary to bring a more equal state of development to the area.
- Point out that the standard of living must not drop; one hopes to raise the standard of living for all people.

	MODULE 6	
TERM 3 Learner's Book pages 281–296 Duration: 5 hours	DEVELOPMENT GEOGRAPHY: GEOGRAPHICAL SKILLS AND TECHNIQUES	

This module focuses on geographical skills and techniques related to development geography. Learners explore how maps can be used to determine the position and location of human settlements as well as how we calculate and determine distances between places and features on maps.

Curriculum and Assessment Policy Statement (CAPS) content

Mapwork skills (with reference to 1:50 000 topographic maps)

- Locating exact position: degrees, minutes and seconds
- Relative position: direction and magnetic bearing
- Scale: word, ratio and line scale
- Distance: measuring distances and converting to ground distance, straight line and curved (practise)
- Calculating area

Using atlases (revision)

- Using the index
- Locating places on different maps using degrees and minutes
- Comparing information from different maps

Key geographical skills and techniques

- using verbal, quantitative and symbolic data forms such as texts, pictures, graphs, tables, diagrams and maps
- applying communication, thinking, practical and social skills
- processing, interpreting, and evaluating data
- working co-operatively and independently

Key words/concepts

reference grid; minute; second; site; location; settlement; relative position; direction; magnetic bearing; true bearing; back bearing; scale; distance; straight line distance; curved distance; area; thematic map

Curriculum and Assessment Policy Statement (CAPS) conten

Mapwork skills (with reference to 1:50 000 topographic maps)

- Locating exact position: degrees, minutes and seconds
- Relative position: direction and magnetic bearing
- Scale: word, ratio and line scale
- Distance: measuring distances and converting to ground distance, straight line and curved (practise)
- Calculating area

Resources

- Learner's Book pages 282–292
- Atlases
- Websites (optional):
 - <http://atschool.eduweb.co.uk/woodhouse-high/maptitlepage.htm>
 - <http://www.teachingideas.co.uk/geography/contents.htm>

Preparation

- Read through the unit and familiarise yourself with the content that you will need to teach. Think about what the learners may already know about the topics and any areas of difficulty that you think they might encounter.

Teaching the unit



Lesson 1

- For the first five minutes of the lesson, brainstorm with the learners to find out what they know about locating the exact position of a place on a map.
- Work through the section, 'How do we locate exact position on a map?' (page 282).
- Draw attention to Figure 6.1.1 which shows the lines of latitude and longitude.
- Table 6.1.1 (page 282) summarises information that should already be familiar to the learners.
- Draw the learners' attention to the method of grid referencing. Provide other examples if necessary.
- Draw the correlation between 'site and location' with that of 'position'.
- Focus on the two different types of settlements: rural and urban.
- Emphasise the importance of Table 6.1.2 (page 284) which concentrates on the main differences between subsistence farming and commercial farming.
- Focus on Table 6.1.3 (page 286) which details the four main urban land-use zones in South Africa.

Activity 1

- Allow learners to begin the activity in class.
- Allocate some time at the end of the lesson to go through the answers with the learners. Let them share their answers with the rest of the class.

» Lesson 2

- Explain what 'relative position' is.
- Work through the sections, 'How do we locate relative position?' and 'Compass direction' (page 286) with the learners.

Activity 2

- Allow learners to begin the activity in class and then complete it as homework.
- If you do not have an atlas for each learner, allow them to work in pairs or small groups.
- Work through the section, 'Magnetic bearing' (page 287) with the learners. Focus on the methods of how to determine true bearing (TB) and back bearing (BB). Provide additional examples, if necessary.

Activity 3

- Allow learners to begin the activity in class.
- Refer learners to the Roodepoort 1:50 000 topographical map (page 288) to measure and determine TB and BB.
- Observe learners while they are doing the activity.
- Go through the answers with the class.

» Lesson 3

- If necessary, go through the answers to Activity 2 with the class.
- Work through the section, 'What are the three types of scale used on maps?' (page 289). Emphasise the different types of scale used.
- Focus on the importance of scale for both the topographical and orthophoto maps.

Activity 4

- Allow learners to begin the activity in class and then complete it as homework.
- Remind them that this is the scale from the Roodepoort 1:50 000 topographical map in Figure 6.1.8 (page 288).

» Lesson 4

- Go through the answers to Activity 4 with the class.
- Work through the section, 'How do we measure distances?' (page 290).
- Emphasise the correlation between scale and distance.
- Emphasise the difference between straight line distance and curved distance. Draw learners' attention to Figure 6.1.10 and Figure 6.1.11 (page 290).
- Draw attention to the method of calculating distance. Use the example to show how distance is measured. Provide more examples if necessary.

Activity 5

- Allow learners to do the activity in class.
- Observe how learners use scale to calculate distance.
- Go through the activity with learners and encourage learners to offer answers.
- Work through the case study example of area with the learners. Focus on the method used for calculations.

Activity 6

- Allow learners to do the activity in class.
- Observe how learners calculate area.
- Go through the activity with learners and encourage learners to offer answers.

Answers

Activity 1 (Learner's Book, page 286)

1. *Lines of latitude*: lines running parallel to the equator.
Lines of longitude: lines that run vertically on a map.
2. *Degrees*: the distance a line of longitude or latitude is from the Greenwich Meridian Line or equator.
Seconds: a minute on a map is divided into seconds.
Minutes: the segment of the latitudinal or longitudinal line on a map.
3. *Dispersed*: farmsteads are widely scattered.
Nucleated: farmsteads are situated close together.
4. primary functions; large agricultural land available; water availability; minimal services rendered; low-order functions
5. tertiary and secondary functions; CBD; built-up areas; more services rendered; high-order functions; planned infrastructure
6. *CBD or central business district* consists of high rise buildings, commercial activities, high rentals; *industrial areas* have large open land available to them, wide streets so that trucks can turn easily, curving roads for the same reason; *residential areas* are single-storey buildings, buildings are generally spaced apart from each other, there is greenery; *recreational areas* will have open sites, trees, tennis courts or golf estates or football fields, paths for running.

Activity 2 (Learner's Book, page 287)

1. A cargo liner must sail southeast.
2. The goods must be transported southwest.
3. The imported goods must be transported southeast.

Activity 3 (Learner's Book, page 289)

1. 125°
2. 55°
3. 157°
4. 23°

Activity 4 (Learner's Book, page 290)

1. 1:50 000
2. ratio scale
3. 1 cm on the map represents 50 000 cm in reality
4. word scale/line scale

Activity 5 (Learner's Book, page 291)

1. distance on map = 5,5 cm
scale of map = 1:50 000
therefore, $1 \text{ cm} = \frac{50\,000}{100\,000}$
= 0,5 km
distance in reality = distance on map \times scale
= 5,5 cm \times 0,5 km
= 2,75 km

2. distance on map = 3 cm
 scale of map = 1:50 000
 therefore, 1 cm = $\frac{50\ 000}{100\ 000}$
 = 0,5 km
 distance in reality = distance on map \times scale
 = 3 cm \times 0,5 km
 = 1,5 km

Activity 6 (Learner's Book, page 292)

1. scale of map = 1:50 000
 therefore, 1 cm = $\frac{50\ 000}{100\ 000}$
 = 0,5 km
 area of map = length (L) \times breadth (B)
 L = 9,5 cm
 B = 7,5 cm
 L = 9,5 cm \times 0,5 km
 = 4,75 km
 and B = 7,5 cm \times 0,5 km
 = 3,75 km
 therefore, L \times B = 4,75 km \times 3,75 km
 = 17,8 km²

Informal assessment

Activity 1

- Go through the answers with the class. Encourage learners to give answers.

Activity 2

- Go through the answers with the class. Encourage learners to give answers.
- Let the learners swap books and mark each other's work.

Activity 3

- Go through the answers with the class. Encourage learners to give answers.
- Encourage learners to offer answers in an open forum.

Activity 4

- Go through the answers with the class. Encourage learners to give answers.
- Encourage learners to offer answers in an open forum.
- Ask those learners who under achieved in the activity to do the remedial activity below.

Activities 5 and 6

- Observe the learners as they complete the activity.
- Go through the answers with the class. Encourage learners to give answers.
- Let the learners swap books and mark each other's work.

Remedial/extension

Remedial:

- Allow learners to do more calculations with scale, distance and area using the Roodepoort 1:50 000 topographical map in Figure 6.1.8 (page 288).

Curriculum and Assessment Policy Statement (CAPS) content

Using atlases (revision)

- Using the index
- Locating places on different maps using degrees and minutes
- Comparing information from different maps

Resources

- Learner's Book pages 293–296
- Websites (optional):
 - http://www.ehow.com/how_2069524_use-atlas.html

Preparation

- Read through the unit and familiarise yourself with the content that you will need to teach. Think about what learners may already know about the topics and any areas of difficulty that you think they might encounter.

Teaching the unit



Lesson 1

- Work through the unit with the learners. Allow learners to ask questions as you go along.
- Focus on how the index of an atlas is used.
- Focus on comparing information from the different maps of Somalia. Make sure learners know and understand that each different map provides different information about Somalia.
- Allow time for the learners to complete the activities.

Activity 1

- Allow learners time to do the activity in class.
- If you do not have an atlas for each learner, allow them to work in pairs or small groups.
- Assist those learners who need help.
- Go through the answers with the class.

Activity 2

- Allow learners to complete the activity in class.
- Go through the answers with the class. Encourage learners to give answers.

Activity 3

- Allow learners to complete the activity in class.
- Observe how learners work to find the location of Somalia.
- Go through the answers with the class. Encourage learners to give answers.

Answers

Activity 1 (Learner's Book, page 293)

1. Note that the page in the atlas and block reference will differ from atlas to atlas. Other answers supplied below:

Place	Latitude and longitude references	Country
Bangkok	13'45"N 100'35"E	Thailand
Dakar	14'34"N 17'29"W	Senegal
Harrismith	28'15"S 29'8"E	South Africa
Luanda	8'50"S 13'15"E	Angola
Pyongyang	39'0"N 125'30"E	North Korea
Thaba Nchu	29'17"S 26'52"E	South Africa

Activity 2 (Learner's Book, page 295)

1. $28^{\circ}45'30''S$ $24^{\circ}47'45''E$
2. Schools provide education which increases literacy levels in its surrounding communities.
3. Any service shown on the map, e.g. Drive-in theatre $28^{\circ}43'30''S$ $24^{\circ}46'45''E$
4. $28^{\circ}44'45''S$ $24^{\circ}45'30''E$
5. $28^{\circ}43'45''S$ $24^{\circ}45'15''E$

Activity 3 (Learner's Book, page 296)

1. east coast of Africa
2. drought
3. Lower Shabelle / Bakool / Middle Shabelle / Afgoye
4. Kenya and Ethiopia in the north and northwest
5. decrease in life expectancy
6. 1 000 m

Informal assessment

- Go through the answers to the activities with the class. Encourage learners to give answers.
- Let the learners swap books and mark each other's work.
- Observe the learners as they complete the activities.

Remedial/extension

Remedial:

- Give learners more practise with atlases.

Extension:

- Ask learners to research how atlases are used.
- Allow learners more opportunities to compare different maps containing development information.

These activities provide an opportunity for learners to consolidate concepts and skills learnt in Term 3. Learners can complete them in class or as homework. It is suggested that they complete the activities individually as a means of self-assessment.

You can write the answers on the board for the learners and/or call them out where more appropriate. However, if possible, it is suggested that you photocopy the answers and give them to the learners so that they have them for revision purposes.

Activity 1 (Learner's Book, page 297)

1. Human Development Index
2. It assesses the levels of development by looking at standards of living.
3. HDI gives the human side of development. GDP does not measure personal income or levels of development or standard of living, but only the total value of the country's production.
4. life expectancy, education and GNP per person
5. infant mortality and life expectancy
6. Australia, New Zealand, Europe, North America, Argentina and Chile
7. there are few people living there (Greenland); it may be a repressive regime (North Korea); it may be an area of conflict (western Sahara)
8. a. poor infrastructure, particularly with education; education and work opportunities
b. These are the areas that are focused on: education, life expectancy and GNP per person. If a country ranks low, it is because it has not invested in its infrastructure, so that education and health issues affect training and skills, as well as life expectancy and infant mortality. If skills are low, there is unemployment, and consequently, income per person is low.

Activity 2 (Learner's Book, page 297)

1. Any five: resources; trade; investment; infrastructure; technology; quality of life; productive output
2. renewable and non-renewable; human and physical
3. Yes and no. A country can export its resources in raw form, but receive little money in return as no value has been added. This will slow or prevent its development. If a country has focused on education, its human capital is well developed. It may import raw materials at a low cost and use its human capital to add value to the products which are exported at a higher cost, bringing more wealth to the country.

Activity 3 (Learner's Book, page 298)

1. See Figure 5.2.10 on page 234 in the Learner's Book.
2. environment; economy; society
3. a. *Backwash effect* happens when resources from the periphery are used for the core. It is a negative effect.
b. *Spread effect* happens when skills, investment and infrastructure trickles-down from the core to the periphery. It is a positive effect.

Activity 4 (Learner's Book, page 298)

1. It shows the social, legal, political and economic discrimination that women face.
2. Gender equality has been adopted as a goal to be reached by 2015 across the world. This would stop discrimination against women in particular, and allow them equality in every respect.
3. It prevents half of the workforce from contributing to development.
4. Maputo Protocol
5. Women represent an available, but untapped human resource. Their equality with men would double the workforce and increase productivity. Their additional income would increase the multiplier effect in the economy, which brings in more investment for the infrastructure of the country.

Activity 5 (Learner's Book, page 298)

- a. *Multilateral aid* is done by international organisations in many countries.
- b. *Bilateral aid* is conditional aid between two countries, with strings attached.
- c. *Technical aid* is the transfer of knowledge in agriculture, technology or engineering.
- d. *Humanitarian aid* is aid for individuals in times of natural disaster or civil disturbances.
- e. *Emergency aid* is a short-term response to a natural disaster or civil crisis.

Activity 6 (Learner's Book, page 298)

1.
 - a. $10^{\circ}0'N, 84^{\circ}0'W$
 - b. $30^{\circ}30'S, 25^{\circ}45'E$
 - c. $60^{\circ}0'N, 86^{\circ}0'W$
 - d. $39^{\circ}5'N, 86^{\circ}0'W$
2.
 - a. $34^{\circ}2'S, 23^{\circ}2'E$
 - b. $25^{\circ}49'S, 25^{\circ}30'E$
 - c. $25^{\circ}29'S, 30^{\circ}59'E$
 - d. $28^{\circ}48'S, 32^{\circ}6'E$
3.
 - a. Accra
 - b. Benoni
 - c. Dakar

	MODULE 7	
TERM 4 Learner's Book pages 300–396 Duration: 20 hours	RESOURCES AND SUSTAINABILITY: GEOGRAPHICAL KNOWLEDGE	

This module deals with resources. It investigates our relationship with resources, including our sustainable use of resources. Soil is investigated as a fundamental resource, necessary for all plant, animal and human life. Ways in which soil can be conserved from erosion, and managed, are part of this section. Then our attention turns to conventional and unconventional sources of energy and the management of energy in South Africa – all critical topics for more sustainable living.

Curriculum and Assessment Policy Statement (CAPS) content

Using resources

- The relationship between resources and economic development
- Exploitation and depletion of resources
- Concepts of sustainability and sustainable use of resources

Soil and soil erosion

- How soils are formed
- Soil as a resource
- Causes of soil erosion: human, animal, physical, and past and present
- Evidence of soil erosion in South Africa
- Effects of soil erosion on people and the environment
- Management strategies to prevent and control soil erosion

Conventional energy sources and their impact on the environment

- Maps and graphs to show thermal, hydro, and nuclear energy production in South Africa
- Thermal electricity generation using coal – outline of principles and processes
- The impact of coal mining and thermal power stations – environmental despoliation, solid waste, waste gases and acid rain
- Case study of nuclear energy – advantages and disadvantages
- South Africa's potential to meet long-term energy needs using conventional sources

Non-conventional energy sources

- Solar energy – examples from South Africa and the world
- Wind energy – examples from South Africa and the world
- Future of non-conventional energy in South Africa
- Possible effects of using more non-conventional energy on the South African economy and the environment

Energy management in South Africa

- South Africa's changing energy needs
- Energy management, towards greener economies and sustainable life styles: responsibilities of governments, businesses and individuals

Key geographical skills and techniques

- using verbal, quantitative and symbolic data forms such as texts, pictures, graphs, tables, diagrams and maps
- applying communication, thinking, practical and social skills
- identifying questions and issues
- collecting and structuring information
- processing, interpreting and evaluating data
- making decisions and judgements
- deciding on a point of view
- suggesting solutions to problems
- working co-operatively and independently
- showing concern for the sustainable and fair use of resources for the benefit of all
- applying geographical knowledge and skills
- promoting fairness, sustainability and equality

Key words/concepts

natural resource; exploitation; depletion; sustainability; biotic; abiotic; soil profile; zone of eluviation; zone of accumulation; bedrock; erosion; eutrophication; conventional energy sources; non-renewable resources; fossil fuel; thermal energy; combustion; thermal electricity; surface mining; coal seam; underground mining; longwall mining; room-and-pillar mining; kinetic energy; environmental despoliation; environmental degradation; overburden; solid waste; waste gases; acid rain; pH scale; uranium; nuclear radiation; nuclear meltdown; potential energy; renewable; solar energy; solar thermal power; silicon chip; photovoltaic energy; photon; electrons; wind energy; wind power; onshore wind turbine; offshore wind turbine; capacity factor

Learner's Book
pages 301–310
Duration: 3 hours

UNIT 1

Using resources

TERM 4, WEEK 1

Curriculum and Assessment Policy Statement (CAPS) content

Using resources

- The relationship between resources and economic development
- Exploitation and depletion of resources
- Concepts of sustainability and sustainable use of resources

Resources

- Learner's Book pages 301–310
- Websites (optional): en.wikipedia.org/wiki/exploitation; www.bbc.co.uk/home/Geography/resources; reef.edu.au/contents/ps/fr_resources; www.towards-sustainability.co.uk/
- Your school library may have the DVD, *An Inconvenient Truth*. This is about sustainability and the importance of conserving our resources, minimising unnecessary resource exploitation, and preventing pollution of the planet.
- If possible, research the international conference held in Durban in November 2011 about climate change, called 'COP 17'. Some of the outcomes will continue to be mentioned in magazines, in TV reports and in newspapers.

Preparation

- Read through the unit and familiarise yourself with the content that you will need to teach. Think about what learners may already know about the topics and any areas of difficulty that you think they might encounter.

Teaching the unit



Lesson 1

- Work through the section, 'What is the relationship between resources and economic development?' (page 301). Point out that often countries that are wealthy in resources have failed to reach their economic potential and are amongst the LEDCs in the world.
- Refer to Table 7.1.1 which shows the relationship between resources and economic development for the top developed countries of the world and the least developed countries of the world. Discuss surprises that may arise: Switzerland has little natural capital, but its human capital is highly rated. Madagascar has a wealth of natural resources, but its human resources are fairly low in rating.

Activity 1

- This activity consolidates the information and concepts covered so far in the unit.
- Allow learners to begin the activity in class and then complete it as homework.



Lesson 2

- Go through the answers to Activity 1 with the class.
- Work through the section, 'How does the exploitation and depletion of resources impact on the environment?' (page 304). Point out the meaning of a negative connotation to the word 'exploitation' and ask learners why the word has this association.
- The map in Figure 7.1.2 shows the equatorial rain forests. You may want to find the countries where these lie, using class atlases or referring to a world map.
- Discuss the importance of the COP 17 conference in November 2011 in Durban.
- Refer to the diagram in Figure 7.1.4. It is the Environmental Kuznets Curve (EKC), which represents the relationship between changes in income or levels of economic development, and the rate of environmental pollution caused by a society.
- Figure 7.1.5 shows the remaining life span of a variety of natural resources if we continue to use them at the present rate. Ask learners why we need to use these resources, and what we use as alternatives.

Activity 2

- Allow learners to begin the activity in class and then complete it as homework.
- Let them work in pairs or individually.

Activity 3

- Go through this activity with the learners so that they understand what is expected of them. Set it as a homework task.

- If learners have time at the end of the lesson, they can start working on this activity.

» Lesson 3

- Go through the answers to Activities 2 and 3 with the class.
- Work through the section, 'What actions can we take to ensure the sustainable use of our resources?' (page 307) with the learners.
- Point out the irony in the situation of President Roosevelt discussing the conservation of resources and then embarking on a hunting safari for thousands of trophies. Figure 7.1.6 shows him with one of his kills.
- Discuss the amendment to the Millennium Goals about sustaining biodiversity; also the shared principles of sustainability that signatories agree to. Write this quotation on the board: 'Sustainability is a 21st word for justice', from Planeta.com's website. Ask learners to consider and debate it.

Activity 4

- Allow learners to begin the activity in class and then complete it as homework.

Answers

Activity 1 (Learner's Book, page 304)

1. People need resources to fulfil their basic needs, make their lives more comfortable and easy, as well as for complex answers to their wants.
2. No. Countries can trade what they can produce easily, for the items that they may need and can't produce easily. All countries have human resources which do need to be educated to a high level of technical skill and expertise. The example of Switzerland proves that you do not have to have a high level of natural resources to become wealthy and economically developed.
3. Developing countries often export their raw materials without any value added, for example, in the manufacturing process. The value is then less, and the human capital may remain untrained and uneducated, causing slow economic growth. 'The Dutch disease' occurs when a country focuses only on one of its raw materials for export, at the expense of diversifying or beginning domestic manufacturing, so that the country slows its overall growth.
4. Where the human capital is high, so is produced capital, even if natural resource wealth is low, e.g. Switzerland. Madagascar shows the opposite: when human capital is low, so is produced capital, even if natural resource wealth is high.

Activity 2 (Learner's Book, page 307)

1. Any four: population increases; more space for housing; more space for agriculture; more need for resources; more space for transport communications
2. they act as the lungs of the world, taking in carbon-dioxide and giving out oxygen; they have thousands of species of plant and animal and bird life; they are a resource for medicines; they cannot be replenished in our life time
3. The tropical rain forests of the world are found in most of the LEDCs that need to use their resources for export and for their own needs.

4. Burning rain forests means that smoke enters the atmospheric winds and gets carried elsewhere. The smoke is one of the contributors to global warming which affects everyone.
5. Forest destruction causes global warming and climate change. The Durban Conference was about climate changes.

Activity 3 (Learner's Book, page 307)

1. the relationship between environmental pollution and economic growth
2. Once a turning point is reached at a certain level of economic development, environmental degradation and pollution slows down and reverses, as countries look after their natural resources through conservation programmes.
3. the depletion of our natural resources if we continue to use them at the present (2009 figures on graph) rate of consumption.
4. a. indium
b. aluminium
5. indium, silver, antimony, tin, lead, gold, zinc, uranium, copper, nickel
6. We will have to do without them, or find alternatives.
7. through sustainable development; or slowing our use; using alternatives; conserving and managing what exists now

Activity 4 (Learner's Book, page 310)

1. Answers should include: there will be nothing left for our children if we continue to use resources at this rate.
2. His hunting destroyed thousands of animals, thus leaving nothing for our children.
3. 1987 with the outcome of the Brundtland Commission
4. The UN wants to make the world aware of the importance of sustainable development because it wants to stop exploitation of natural resources, depletion of natural resources, and economic growth from being affected.
5. Answers must include: the wealthy use 80% of the resources, but only form 20% of the world population – yet they want to stop the other 80% of poorer people from using the remaining resources for themselves to get out of poverty.
6. own answers

Informal assessment

Activity 1

- Correct the questions in Activity 1 by asking learners for their answers and writing them on the board if more than one good suggestion is made.

Activities 2-4

- Go through the answers with the class. Encourage learners to give answers.
- Let the learners swap books and mark each other's work.

Remedial/extension

Remedial:

- Learners who need extra practice with the concepts in this unit can complete Worksheet 19 on page 313 in the Resources section of this Teacher's Guide. This worksheet can also be used for revision purposes.

Extension:

- Allow the learners to explore some of the websites indicated under 'Resources' (page 141) of this Teacher's Guide.
- Let learners find out more about the Kyoto Protocol and how successful it has or has not been in addressing climate change.

Learner's Book
pages 311–324
Duration: 5 hours

UNIT 2

Soil and soil erosion

TERM 4, WEEKS 1–2

Curriculum and Assessment Policy Statement (CAPS) content

Soil and soil erosion

- How soils are formed
- Soil as a resource
- Causes of soil erosion: human, animal, physical, and past and present
- Evidence of soil erosion in South Africa
- Effects of soil erosion on people and the environment
- Management strategies to prevent and control soil erosion

Resources

- Learner's Book pages 311–324
- Wall world map or atlases
- Websites (optional): en.wikipedia.org/wiki/soil; www.enchantedlearning.com/geolog/soil; www.bcb.ac.za/envfacts/facts/soil; www.environment.gov.za/enviro-info

Preparation

- Read through the unit and familiarise yourself with the content that you will need to teach. Think about what learners may already know about the topics and any areas of difficulty that you think they might encounter.

Teaching the unit



Lesson 1

- Work through the section, 'How are soils formed?' (page 311). Draw the soil profile in Figure 7.2.1 on the board and use Table 7.2.1 to describe the characteristics of a soil profile. Explain how the diagram is a model of a well-developed profile that shows all the layers. In reality, layers may be smaller or larger, depending on the factors that produce the soil.

Activity 1

- Let the learners draw Figure 7.2.1 themselves in answer to question 1 and then annotate the soil profile sketch in question 2 and question 3.
- They can complete this activity in class.
- Allow time at the end of the lesson to go through the activity with them.



Lesson 2

- Work through the section, 'How is soil a valuable resource?' (page 313).
- Refer to Figure 7.2.2 to point out where the most fertile soils in the world are found, the mollisols and alfisols. You can show that these soil areas coincide with the grain growing areas of Europe, Asia, the Americas, and India. Point out the absence of these soils in Africa, and the limited supply around the coastline of New Zealand. Discuss the relationship between distribution of soil types and LEDCs or MEDCs.
- Use a world map or class atlases to locate the fertile river valleys of the Tigris, Euphrates, Indus, Ganges, Mekong, Irrawaddy, Nile and Mississippi. The importance of rivers and flood plains for water and alluvial soil is tied to people's first settlements and the development of towns.

Activity 2

- Allow learners to begin the activity in class and then complete it as homework.
- If you do not have an atlas for each learner, allow them to work in pairs or small groups.



Lesson 3

- Go through the answers to Activity 2 with the class.
- Work through the section, 'What are the causes of soil erosion: human, animal, physical, and past and present?' (page 315) with the learners.
- Refer to Figures 7.2.3, 7.2.4 and 7.2.5 to show the scale of soil erosion. Figure 7.2.6 shows the impact a single drop of rain has on the surface of the earth. From this, we can understand how heavy rains cause soil erosion on a large scale.
- Write on the board, 'causes of soil erosion' and two headings – 'people' and 'nature'. Ask the class for causes of soil erosion for each of the categories, and write them on the board to consolidate learning.

Activity 3

- Allow learners to begin the activity in class and then to complete it as homework.



Lesson 4

- Go through the answers to Activity 3 with the class.
- Work through the section, 'What evidence is there of soil erosion in South Africa?' (page 317) with the learners.
- Refer to Figure 7.2.8 which shows the catchment area of the Orange River. Use class atlases or refer to a large wall map of South Africa which shows the provinces. Locate the provinces that lie in the catchment area of the Orange River. Ask the class what responsibilities these provinces have in conserving soil erosion and managing the flow of the river.

Activity 4

- Allow learners to begin the activity in class and then to complete it as homework.
- If you do not have an atlas for each learner, allow them to work in pairs or small groups.

- Go through the answers to Activity 4 with the class.
- Work through the section, 'What are the effects of soil erosion on people and the environment?' (page 319). Ask learners to describe areas close to the school where there is soil erosion, or if they have encountered muddy streams, eroded pathways, and wind storms.

Activity 5

- Use the questions in this activity for a class discussion. Alternatively, set it as a written homework task.
- Work through the section, 'What management strategies can be used to prevent and control soil erosion?' (page 321). Use the board to consolidate learning of the ways in which people can conserve the soil and manage it as a resource. Ask the learners for their ideas and use the text in the Learner's Book as your resource.
- Figures 7.2.11, 7.2.12 and 7.2.13 are photographic evidence of how people are managing the problem of soil erosion. Refer to them to emphasise the work you have put on the board about conservation and management strategies.
- Figure 7.2.14 highlights our need to conserve the soil. It shows the food chain in the soil. Remind learners that fertile soil is a combination of organic matter and other matter, and that for fertility to be maintained or enhanced in a sustainable manner, we must encourage the growth of organisms in the soil. Otherwise we will be forced to buy at a high cost, artificial organic supplements in the form of fertilisers.
- Refer to the diagram in Figure 7.2.15 which shows how vegetation can be best used to protect the soil, because soil is such a valuable resource.

Activity 6

- Work through Activity 6 in class, going through the answers with the learners. You can draw the sketches on the board or ask a learner to do this.

Answers

Activity 1 (Learner's Book, page 313)

1. Refer to Figure 7.2.1 on page 312 in the Learner's Book.
2.
 - a. B horizon
 - b. D horizon
 - c. C horizon
 - d. A horizon
 - e. E horizon
 - f. O horizon
3.
 - a. Laterite
 - b. Pedalfer
 - c. Pedocal

Activity 2 (Learner's Book, page 315)

1. It takes between 100 and 400 years to form 1 cm of soil. Soil is necessary as the basis of plant life, on which animals, birds and humans directly and indirectly depend on food.
2. Aridisols and Entisols
3. Mollisols: USA, Canada, Russia, China, Argentina

Alfisols: USA, Canada, Russia, India, Australia, South Africa, Zimbabwe, Mozambique, Madagascar, Nigeria, Ivory Coast, Guinea, Ghana, Cameroon, Brazil, Argentina, Peru, Bolivia

4. Vertisols swell when wet and crack when dry; they have a high clay content; they support grasslands for cattle and sheep; they are very black.
5. India, Sudan, Australia, New Zealand

Activity 3 (Learner's Book, page 317)

1. A = stream erosion/water; B = wind erosion; C = sea erosion/tide/storm
- 2.

	Biotic factors	Abiotic factors
1	overgrazing of animal herds	wind
2	ploughing down the slope instead of across it	rivers or streams or water or ice
3	removal of protective vegetation	sea or tides or storm surges

3. The 'dust bowl' in the USA was caused by the removal of large areas of vegetation for agriculture. A succession of droughts and wind storms removed layers of exposed soil, creating sand storms and creating a 'dust bowl'.

Activity 4 (Learner's Book, page 319)

1. Caledon, Vaal
2. The Orange River is the longest river in South Africa, 2 200 km, and the only one to drain into the Atlantic. It has a huge catchment area which covers approximately 75% of the total surface area of South Africa.
3. the southern slopes of the Drakensberg Mountains in the southeast of South Africa, where they drop to sea-level over a narrow coastal plain
4. river erosion
5. Deep gullies, called 'dongas', are carved out of the land. They begin with narrow, shallow rivulets forming on the surface where water runs downwards over the land.
6. In the drier western half of South Africa where average annual rainfall is below 500 mm. Grazing and agriculture add further to the opportunities for wind erosion as the soil is dry, exposed and vulnerable.

Activity 5 (Learner's Book, page 321)

1. The beautiful fjords, steep valleys, finger lakes, and Great Lakes in North America are positive results of ice erosion.
2.
 - a. Water erosion causes gullies to develop. This affects vegetation and agriculture and can be a danger to grazing animals. Water carries the fertilisers in the top soil into dams, lakes and reservoirs. This can cause silting. Eutrophication may also develop.
 - b. Water erosion limits the area that can be farmed or grazed safely by farming. It limits the growth of vegetation, which is displeasing to the eye. It is costly to replace the nutrients that have been lost in water erosion. Silting of dams and eutrophication are a problem. Time and money is spent on cleaning up the reservoirs and dams.

3. Answer should include reasons why soil erosion should be prevented. Points that should be present are: soil is a valuable resource; soil is non-renewable; people depend on soil; soil erosion is unsightly; combating the effects is costly; it is dangerous to animals in the fields; it prevents the growth of trees; and it can limit the space available for cultivation.

Activity 6 (Learner's Book, page 324)

1. soil is a vital resource; it is non-renewable; it nourishes life
2. through poor farming techniques, insensitive development, and removal of natural vegetation
3. a. Wetlands act as sponges, protecting flooding and further erosion.
b. Grasslands bind the soil, and slow the impact of rain by giving cover to the earth, and preventing water erosion.
4. top dressing; closer inter-locked planting of trees; spaced tree planting; wind breaks; debris dams; protection of river banks; encouraging wetlands; and placing barriers across the steep gradients
5. A triangle with 5 levels: the base is 1 and the top is 5.
1 = photosynthesis; 2 = decomposers, mutualists, pathogens, parasites and root feeders; 3 = shredders, predators, grazers; 4 = higher level predators, e.g. moles; 5 = highest level predators, e.g. birds and animals.

Informal assessment

- For Activities 1 to 4, go through the answers with the class. Encourage learners to share their answers. Let the learners swap books and mark each other's work.
- During Activities 5 and 6, listen to the learners' contributions and assess whether they have grasped the concepts taught in the unit. Also note whether their contributions are sufficiently insightful.

Remedial/extension

Remedial:

- Let learners who have difficulty with the concepts in this section create a mindmap summary of the unit and a list of concepts and their definitions.

Extension:

- Allow the learners to explore some of the websites indicated under 'Resources' (page 145) of this Teacher's Guide.
- Let learners find out an innovative soil management project that is rehabilitating the soil in a specific area or protecting its quality.

Curriculum and Assessment Policy Statement (CAPS) content

Conventional energy sources and their impact on the environment

- Maps and graphs to show thermal, hydro, and nuclear energy production in South Africa
- Thermal electricity generation using coal – outline of principles and processes
- The impact of coal mining and thermal power stations – environmental despoliation, solid waste, waste gases and acid rain
- Case study of nuclear energy – advantages and disadvantages
- South Africa's potential to meet long-term energy needs using conventional sources

Resources

- Learner's Book pages 325–352
- Atlases
- Websites (optional)
 - For information on conventional energy sources and their impact on the environment:
<http://mhathwar.tripod.com/thesis/intro/environment.html>
 - For information on environmental impacts of renewable energy technologies:
http://www.ucsusa.org/clean_energy/technology_and_impacts/impacts/environmental-impacts-of.html
 - For information on clean energy:
http://www.ucsusa.org/clean_energy/

Preparation

- Read through the unit and familiarise yourself with the content that you will need to teach. Think about what the learners may already know about the topics and any areas of difficulty that you think they might encounter.

Teaching the unit



Lesson 1

- For the first five minutes of the lesson, brainstorm with the learners to find out what they know about conventional energy sources. Encourage all learners to participate in an interactive discussion.
- Work through the section, 'Where are thermal, hydro and nuclear energy produced in South Africa?' (page 325) with the learners.
- Emphasise that conventional energy sources is another name for non-renewable energy sources.
- Point out Figure 7.3.1 (page 325) which shows the world's energy sources.
- Point out Figure 7.3.2 (South Africa's main energy supply in 2007) to learners and explain the importance of coal. Explain why South Africa uses coal to generate thermal electricity.

Activity 1

- The activity requires learners to understand the difference between conventional and non-conventional energy sources.
- Allow learners to begin the activity in class and then complete it as homework.
- Work through the section, 'Principles involved in coal-generated thermal electricity' (page 327) with the learners.
- Point out Table 7.3.1 (South African coal reserves) to learners. Use the map of South Africa in Figure 7.3.4 (page 328) to show learners where the coal reserves are located.

Activity 2

- Learners need to use interpretative skills to complete the activity. Encourage the learners to read through the whole activity before trying to answer any of the questions.
- Go through this activity with the learners so that they understand what is expected of them. Set it as a homework task.
- If learners have time at the end of the lesson, they can start working on this activity.



Lesson 2

- Go through the answers to Activities 1 and 2 with the class.
- Work through the section, 'The processes involved in coal-generated thermal electricity' (page 329) with the learners.
- Explain why the process of surface or open-cast mining is conducted. Explain to learners why the process of underground mining is conducted.
- Point out to learners the difference between the process of longwall mining (Figure 7.3.6, page 330) and the process of room-and-pillar mining (Figure 7.3.8, page 331).
- Use an atlas and Table 7.3.2 (page 332) to show learners the location of fossil fuel power plants in South Africa.

Activity 3

- Learners need to know the nine provinces in order for them to answer some of the questions.
- Go through this activity with the learners so that they understand what is expected of them. Set it as a homework task.
- If learners have time at the end of the lesson, they can start working on this activity.
- Brainstorm with the learners to find out what they know about the environmental impact of coal mining and thermal power stations. Encourage all learners to participate in an interactive discussion.
- Work through the section, 'Environmental despoliation' (page 333) with the learners. Emphasise the effects of environmental despoliation. Explain the difference between environmental despoliation and environmental degradation.

Activity 4

- This activity focuses on environmental despoliation.
- Allow learners to work in groups of four. Encourage all learners to participate in the group discussion.
- Go through the answers with the class.



Lesson 3

- Go through the answers to Activity 3 with the class.
- Work through the sections, 'Solid waste dumping' (page 335) and 'Air pollution: waste gases' (page 336) with the learners.
- Explain to learners what 'waste gases' are.
- Show learners how dust is blown from mine dumps situated close to the Krugersdorp area.
- Explain what acid rain is and why it is detrimental to the environment.

Activity 5

- This activity focuses on thermal pollution in the environment.
- Let the learners complete it on their own.
- Allow learners to begin the activity in class and then to complete it as homework.

- Explain what nuclear energy is.
- Work through the section, 'What are the advantages and disadvantages of nuclear energy?' (page 338) with the learners.
- Draw their attention to Figure 7.3.16 on page 338, the Koeberg Nuclear Power Station at work.
- Point out the geographical location of the Koeberg Nuclear Power Station in Figure 7.3.18.
- Focus on why nuclear energy is important for the Cape Town area.

Activity 6

- This activity focuses on nuclear energy.
- Let the learners complete it in pairs.
- Observe how learners interact and listen to their discussions.
- If there is time at the end of the lesson, go through the answers with the learners.



Lesson 4

- Go through the answers to Activity 5 with the class. If you did not have time to do this for Activity 6 at the end of the previous lesson, go through these answers too.
- Work through the section, 'The disposal of radioactive solid waste' (page 340) with the learners.
- Emphasise the process of the disposal of radioactive solid waste from the Koeberg Nuclear Power Station.
- Point out the importance of the 'capping process' by referring to the pictures (page 341).
- Discuss the importance of the advantages and disadvantages of nuclear energy by referring to Table 7.3.4 (page 342).

Activity 7

- This activity focuses on the disposal of solid waste from nuclear power stations.
- Let the learners work in pairs.
- Allow learners to begin the activity in class and then to complete it as homework.

- Read through the two case studies on the Chernobyl and Fukushima nuclear disasters with the learners.
- Explain the effects of radiation by referring to Figure 7.3.29 (page 345).

Activity 8

- Allow learners to begin the activity in class and then to complete it as homework.



Lesson 5

- Go through the answers to Activities 7 and 8 with the class.
- For the next five minutes of the lesson, brainstorm with the learners to find out whether they think South Africa can meet its long-term energy needs using conventional energy sources.
- Work through the section, 'Can South Africa meet its long-term energy needs using conventional energy resources?' (page 346) with the learners.
- Discuss the effects of increasing coal-generated electricity supply for South Africa.
- Emphasise the effects of increasing nuclear energy for South Africa.
- Emphasise the process of the pumped hydro-electric storage scheme by using the flow chart (page 348). It is important for learners to understand the process.
- Point out the advantages and disadvantages of hydro-electric energy by referring to Table 7.3.5 (page 349).

Activity 9

- This activity focuses on South Africa's hydro-electrical power stations.
- Go through this activity with the learners so that they understand what is expected of them. Set it as a homework task.

- Work through the case study on the Palmiet Pumped Hydro-electric Storage Scheme (page 350).

Activity 10

- This activity focuses on the case study.
- Allow learners to begin the activity in class and then to complete it as homework.

Activity 11

- Go through this activity with the learners so that they understand what is expected of them. Set it as a homework task.
- If learners have time at the end of the lesson, they can start working on this activity.

Activity 12

- This activity focuses on South Africa's management of conventional energy sources.

- Go through this activity with the learners so that they understand what is expected of them. Set it as a homework task.
- If learners have time at the end of the lesson, they can start working on this activity.

Answers

Activity 1 (Learner's Book, page 327)

1. Conventional energy resources refers to energy provided by traditional means. It includes fossil fuels and other non-renewable resources, which take millions of years to form and cannot be replaced as fast as they are used up. Non-conventional energy resources are alternative sources of energy.
2. Any two: coal; natural gas; oil
3. When thermal energy is used to generate electricity, a large amount of heat is produced by the combustion of fossil fuels in fossil fuel power plants. Thermal energy that is used to generate electricity is called thermal electricity.
4. 93,8%
5. Hydro-electricity is a renewable source of energy. Water can be replaced unlike other conventional energy sources which are non-renewable and take millions of years to form.
6. South Africa is increasing its generation of nuclear and hydro-electric energy in order to lessen the usage of coal generation.

Activity 2 (Learner's Book, page 328)

1. highveld
2. 31%
3. 30%
4. South Rand and Utrecht
5. The Limpopo Province hosts about 50% of the country's coal reserves.
6. South Western Cape
7. Yes, coal is one of South Africa's main energy resources. Almost 90% of South Africa's energy supply comes from conventional energy sources, with almost three-quarters coming from non-renewable fossil fuels, for example, coal.

Activity 3 (Learner's Book, page 333)

1. Mpumalanga. Twelve of South Africa's 20 fossil fuel power plants are situated in Mpumalanga.
2. KwaZulu-Natal
3. Kusile
4. Medupi will have the same installed capacity as Kusile when it becomes operational.
5. 17
6. due to South Africa's increasing energy needs

Activity 4 (Learner's Book, page 334)

1. *Advantages* – coal produces a lot of energy; large coal reserves are still available in South Africa; surface mining is a relatively easy way to mine when coal deposits are found in shallow coal seams.
Disadvantages – burning coal causes the emission of carbon dioxide, nitrous oxide, sulphur dioxide and other air pollutants; underground mining is dangerous and causes health risks to miners; coal mining causes environmental degradation; the cost of mining and production of coal is increasing.

2. *Environmental degradation* is the erosion of the environment through the depletion of natural resources, the destruction of ecosystems, and the extinction of plant and animal species. *Environmental despoliation* is the process of forcefully breaking down and removing the Earth's surface.
3. mining
4. Drilling and charging blast holes with explosives in order to breakdown and destroy the Earth's surface during surface mining; damaging and disrupting the existing vegetation and ecosystems; damaging the soil profile by removing trees, plants and topsoil from mining areas and causing soil erosion and flooding; changing and scarring the general topography and landscape of mining areas.
5. Reduce the extraction of coal reserves. Encourage businesses to move towards green economies that rely on non-conventional energy sources.

Activity 5 (Learner's Book, page 337)

1. Air pollution is the release of waste gases into the atmosphere, including carbon dioxide, nitrous oxide, sulphur dioxide and other air pollutants.
2. global warming and acid rain
3. Any two: carbon dioxide; nitrous oxide; sulphur dioxide
4. Global warming is the slow increase in the average temperature of the Earth's oceans and lower atmosphere.
5. Any two: melting snow and ice; rising sea levels; more extreme weather (for example, storms, floods, droughts and heat waves); climate change; threat to ecosystems
6. Acid rain occurs when sulphur dioxide and nitrous oxide are released into the atmosphere and turn into acids. The acids then dissolve into moisture in the atmosphere, and fall to the Earth's surface as very weak acid, in precipitation, in the form of rain, snow, vapour or fog.
7. Any two: damage to, and death of, plants and trees; water pollution; damage to buildings, metals and motor vehicles
8. No, because globally it is the main cause of increased carbon dioxide emissions.

Activity 6 (Learner's Book, page 340)

1. Nuclear energy is the use of uranium to produce energy.
2. uranium
3. Nuclear energy is produced through a process called nuclear fission, which occurs in a nuclear reactor in a nuclear power plant. During this process, uranium atoms are split and a large amount of nuclear energy is released. This energy heats water to create steam; the steam spins a large turbine generator, which produces electricity.
4. due to increasing energy needs in the Western Cape
5. Koeberg Nuclear Power Station
6. two
7. one
8. during peak demand periods

Activity 7 (Learner's Book, page 342)

1. nuclear rods
2. The process whereby radioactive waste is buried at Vaalputs is called the capping process:
 - steel drums containing nuclear rods are delivered and examined
 - the steel drums are off-loaded into a landfill site, which consists of cement troughs cast deep into the Earth's surface
 - the cement troughs are covered and sealed with clay
 - the radioactive waste is safely closed and buried.
3. Northern Cape
4. Nuclear rods contain uranium which is a radioactive mineral resource and is the main source of poisonous radioactive waste. Radioactivity occurs when particles of radioactive material enter the environment and the human body and cause nuclear radiation.
5. Any two: nuclear power stations can produce energy if coal and oil become exhausted; if operated properly, nuclear power stations give very little exposure to radiation; nuclear energy is an economical source of energy because less fuel in the form of uranium is used in comparison to the amount of coal used in fossil fuel power stations; nuclear energy is a sustainable source of energy as less greenhouse gases are released from nuclear power stations, decreasing environmental degradation; the production of nuclear energy is not affected by changing weather conditions
6. it is very expensive to extract uranium; there are serious medical, environmental and economic risks due to nuclear radiation, from leaks and overheating of nuclear reactors; the disposal of solid radioactive waste from nuclear power stations is expensive as it must be buried safely underground to prevent dangerous nuclear radiation

Activity 8 (Learner's Book, page 345)

1. Ukraine
2. Soviet Union; Scandanavia; United Kingdom
3. Large amounts of fauna and flora died shortly after the explosion. Infrastructure (roads, buildings, bridges, drainage pipes and electricity cables) disintegrated.
4. Economic development declined; medical care and evacuation costs rose to approximately US\$250 000.
5. Yes, nuclear fission went out of control in the nuclear reactor causing a nuclear explosion and the emission of huge amounts of nuclear radiation.
6. Japan
7. The Fukushima Nuclear Power Station was struck by a tsunami, caused by an earthquake off the Japanese coastline.
8. After an explosion in Reactor One, which caused a nuclear leak, the Japanese government faced the threat of the cooling system in Reactor Three failing. Steam containing small amounts of nuclear radiation was released from the power station to reduce pressure in Reactor Three.
9. The accident at the Chernobyl Nuclear Power Station was more severe and destructive, as more lives were lost than at the Fukushima Nuclear Power Station.
10. Safety measures must take priority. Residential areas must be located far away from nuclear power stations in case of nuclear leaks. With the development and planning stages of nuclear stations, safety must take preference.
11. Learners own opinion with a good justification.

Activity 9 (Learner's Book, page 350)

1. eight
2. In the Western Cape, Eastern Cape, Free State and KwaZulu-Natal.
3. During peak periods of demand for electricity in the Western Cape, electricity from the Palmiet Pumped Hydro-electric Storage Power Station is used to supplement the electricity supplied by the Koeberg Nuclear Power Station.
4. Palmiet Pumped Hydro-electric Storage Power Station in the Drakensberg

Activity 10 (Learner's Book, page 351)

1. Western Cape
2. During peak demand periods for electricity, water is released from the upper Rockview Dam into two reversible turbines at the pumping plant. The water goes through the turbines to produce hydro-electric energy. During the off-peak periods the reversible turbines pump the water back from the lower Kogelberg Dam to the upper Rockview Dam, where it is stored for later use during peak demand periods. The Scheme operates on a weekly cycle.
3. during peak and emergency demand periods for electricity in the winter season in the Western Cape
4. Kogelberg Dam on the Palmiet River and the Rockview Dam between the Steenbras and Palmiet Rivers

Activity 11 (Learner's Book, page 351)

1. Free State and KwaZulu-Natal
2. 40 000 MW
3. The energy generated by the Ingula Pumped Storage Scheme will be used to generate power to the national electricity grid.

Activity 12 (Learner's Book, page 352)

1. South Africa has 40% of coal reserves left.
2. No. It is a conventional source of energy.
3.
 - Over the next 10 years there will be an imbalance between the supply and demand of coal.
 - The existing reserves need to be used in a more sustainable way if they are to last more than a century.
4. Hydro-electric power is a renewable source of energy. With South Africa's limited coal reserves and the high emissions of carbon dioxide it would be advisable to develop more hydro-electric power.
5. South Africa has a low average rainfall and the Western Cape experiences severe drought during their summer months.
6. yes
7. Yes, South Africa is rich in uranium. South Africa exports uranium to China.
8.
 - South Africa's rugged, continuous coastline is ideal for the development of nuclear power stations, as it allows for the cooling of reactors with ocean water.
 - Enough uranium to support the demand and needs of the increasing population.
9. There are many risks involved such as health risks and safety risks.

Informal assessment

Activity 1

- Observe how learners apply themselves when answering the activity. Do they continuously look up the answers or do they remember the work taught.
- Go through the answers with the class. Encourage learners to offer answers.
- Those learners who under-achieved in this activity need to do the remedial activity below.

Activity 2

- Go through the answers with the class. Encourage learners to give answers.
- Let the learners swap books and mark each other's work.
- Those learners who under-achieved in this activity could do the remedial activity below.

Activities 3–5

- Go through the answers with the class. Encourage learners to give answers.

Activity 6

- Go through the answers with learners.
- Those learners who under-achieved in this activity need to do the remedial activity below.

Activities 7–12

- Go through the answers with the class. Encourage learners to share their answers.
- Let the learners swap books and mark each other's work.
- Take in the learners' notebooks at the end of the unit to review their work yourself so that you are able to identify any problem areas.

Remedial/extension

Remedial:

Let learners who have difficulty with the concepts in this section complete the following questions.

1. Define the following concepts: thermal energy, nuclear energy, hydro-electrical energy.
2. Why is it important to manage the disposal of solid waste from nuclear power stations?
3. Explain how radioactive waste from the Koeberg Nuclear Power Station is disposed of.
4. What percentage of South Africa's national energy supply does Koeberg Nuclear Power Station generate?

Answers:

1. Thermal energy is heat in transfer. It is not the same as heat, but is the energy that is given off during the process of heat being transferred from one source to another. Nuclear energy is generated from uranium rods in nuclear power stations. Hydro-electrical energy: when water is released from a great height, the velocity or speed causes potential energy stored in the water to change energy.

2. The nuclear rods used to generate nuclear energy contain uranium which is a radioactive mineral resource and is the main source of poisonous radioactive waste.
3. The process whereby radioactive waste is buried at Vaalputs is called the capping process: Steel drums containing nuclear rods are delivered and examined. The steel drums are off-loaded into the landfill site, which consists of cement troughs cast deep into the Earth's surface. The cement troughs are covered and sealed with clay. The radioactive waste is safely closed and buried.
4. 5%

Extension:

- Ask learners to work in pairs to research the benefits of conventional energy use for South Africa.

Learner's Book pages 353–378 Duration: 4 hours	UNIT 4	Non-conventional energy sources
		TERM 4, WEEKS 4–5

Curriculum and Assessment Policy Statement (CAPS) content

Non-conventional energy sources

- Solar energy – examples from South Africa and the world
- Wind energy – examples from South Africa and the world
- Future of non-conventional energy in South Africa
- Possible effects of using more non-conventional energy on the South African economy and the environment

Resources

- Learner's Book pages 353–378
- Websites (optional):
 - For information about solar energy:
http://en.wikipedia.org/wiki/Solar_energy
 - For information about wind energy:
<http://www.windturbinestore.co.za/>

Preparation

- Read through the unit and familiarise yourself with the content that you will need to teach. Think about what learners may already know about the topics and any areas of difficulty that you think they might encounter.

Teaching the unit

» Lesson 1

- Work through the section, 'What is solar energy?' (page 353) with the learners.
- Point out Figure 7.4.3 (page 355) which shows the components required to generate photovoltaic electricity.

Activity 1

- This activity provides an opportunity for learners to create a summary of the material covered thus far in the unit.

- Allow them to begin the activity in class and then to complete it as homework.
- Brainstorm with the learners to find out what examples of solar energy from South Africa they know of.
- Work through the section, 'Examples of solar energy from South Africa' (page 355) with the learners.
- Emphasise the annual solar radiation in South Africa by referring to Figure 7.4.4 (page 355).
- Work through the section, 'Examples of solar energy from Africa' (page 356) with the learners.
- Point out Figure 7.4.11 (page 359) which emphasises a practical alternative to providing power to remote areas.

Activity 2

- This activity is based on the case study, 'The Sun is free' (page 358).
- Allow learners to begin the activity in class and then to complete it as homework.



Lesson 2

- Go through the answers to Activities 1 and 2 with the class.

Activity 3

- Use the questions in this activity for class discussion. Alternatively, set it as a written homework task.
- Work through the section, 'Which global areas are suitable for solar energy?' (page 359) with the learners.
- Draw the learners' attention to Figure 7.4.13 (page 360), which shows photovoltaic solar resources in different countries.

Activity 4

- This activity consolidates the concepts associated with solar energy.
- Go through this activity with the learners so that they understand what is expected of them. Set it as a homework task.
- If learners have time at the end of the lesson, they can start working on this activity.
- Brainstorm with the learners to find out what they know about wind energy.
- Work through the section, 'What is wind energy?' (page 361) and 'The process of generating electricity from wind energy' (page 362) with the learners.
- Show learners how wind turbines are arranged in large groups on a wind farm and connected to a network to generate electricity by referring to Figure 7.4.17 (page 363).
- Explain the three different kinds of wind turbines.
- Explain how a wind turbine works by referring to Figure 7.4.18 (page 363).

Activity 5

- This activity consolidates the concepts associated with wind energy.
- Go through this activity with the learners so that they understand what is expected of them. Set it as a homework task.
- If learners have time at the end of the lesson, they can start working on this activity.

- Work through the section, 'Examples of wind energy from South Africa' (page 364) with the learners. Draw the learners' attention to the wind energy projects detailed in Table 7.4.1 (page 364).
- Work through the sections, 'Examples of wind energy from Africa' (page 365) and 'Examples of wind energy from other areas in the world' (page 366) with the learners.
- Begin the section, 'Which global areas are suitable for wind energy'. Refer to Table 7.4.2 (page 367) on wind energy installed capacity of the top 10 countries.

Activity 6

- Allow learners to begin the activity in class and then to complete it as homework.
- They could work in pairs or individually.



Lesson 3

- Go through the answers to Activities 4, 5 and 6 with the class.
- Continue to work through the section on which global areas are suitable for wind energy.

Activity 7

- This activity focuses on global wind energy capacity.
- Use the questions in this activity for class discussion. Alternatively, set it as a written homework task.
- Work through the section, 'What is the future of non-conventional energy sources in South Africa?' (page 372) with the learners.
- Read and emphasise the case study of South Africa's carbon footprint (page 373).

Activity 8

- This activity focuses on a case study.
- Allow learners to begin the activity in class and then to complete it as homework.
- Let them work in pairs or small groups.



Lesson 4

- Go through the answers to Activity 8 with the class.
- Work through the section, 'The future for solar and wind energy in South Africa' (page 374) with the learners.
- Explain the availability of wind power in South Africa by referring to Figure 7.4.36.
- Refer learners to the case study (page 376) to explain why South Africa gets a US\$250 million loan for wind and solar power.
- Ask learners what the possible impact of using more non-conventional energy would be on the South African economy and the environment. Allow learners to discuss this in an open forum.
- Work through the section, 'What are the possible effects of using more non-conventional energy on the South African economy and the environment?' (page 376) with the learners.

Activity 9

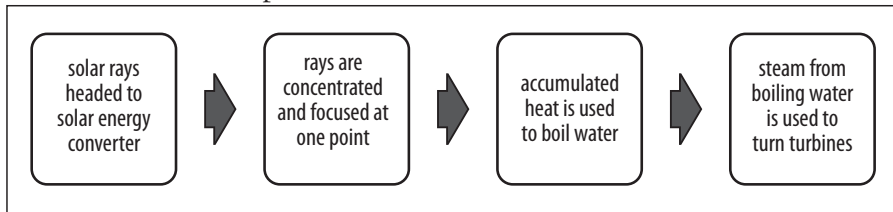
- This activity focuses on the possible effects of using more non-conventional energy in South Africa.

- Allow learners to complete the activity in class.
- Go through the answers with the class.

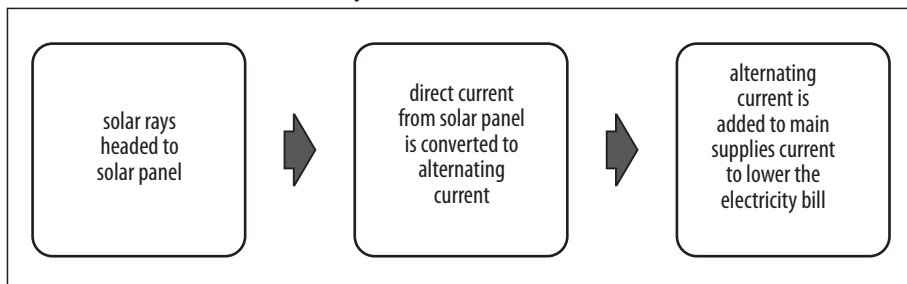
Answers

Activity 1 (Learner's Book, page 355)

1. *Non-conventional energy sources* are new and alternative energy sources.
Solar energy is light energy from the Sun which is used to generate electricity.
Solar thermal power uses direct sunlight to power turbines which generate electricity.
Photovoltaic electricity is generated using specialised silicon chips.
2. a. Solar thermal power



- b. Photovoltaic electricity



Activity 2 (Learner's Book, page 359)

1. Any one: people are able to listen to the radio and watch TV; longer trading hours for small businesses; reduction of indoor pollution; improved exam pass rates in schools
2. Yes, an abundance of direct sunlight exists in Africa.
3. Zambia and Zimbabwe
4. it can be harnessed as a stand-alone source of energy, such as solar, wind and mini-hydro generators can help fill the gap
5. Northern Cape

Activity 3 (Learner's Book, page 359)

1. areas in the vicinity of the equator
2. Solar thermal power uses direct sunlight. Abundant sunlight exists in these areas.
3. United States and California

Activity 4 (Learner's Book, page 361)

1. Solar energy is light energy (energy from the Sun) which is transformed into electric or thermal energy.
2. Advantages:
 - a. reduces
 - b. renewable
 - c. sustainable
 - d. protects

- e. diversify
 - f. solution
- Disadvantage:
- a. unaffordable

Activity 5 (Learner's Book, page 364)

1. *Wind energy* is the energy of the wind which is changed into electrical energy.
A *wind farm* is a whole system of turbines generating wind.
2. The greater the speed of the wind, the more electricity can be generated.
3. Wind energy is enhanced by how often the wind blows and when it blows.
4. Areas with an annual average wind speed of around 20–28 km per hour (6–8 m/s), at a height of 80 metres, are generally considered to have suitable wind power. This is because to work efficiently, a wind turbine needs a wind speed of at least 22 km per hour so that it can turn the turbine fast enough to generate electricity. If the wind is too slow, the turbines will not run. If it is too fast, the turbines will shut down.
5. offshore winds and onshore winds
6. Any of the advantages mentioned in Activity 4, question 2.
7. Wind turbines can be expensive; the blades can destroy airborne animals like birds and bats, if erected in their migratory path. This will impact on the ecosystems; the rotors can produce noise pollution; wind turbines standing in a field or along a coastline ruin the natural landscape, especially in rural areas.

Activity 6 (Learner's Book, page 368)

1. The global environment can make use of renewable energy more and more which will increase energy security.
2. Open ended answer. It could include: due to the negative impacts conventional energy has on the environment, e.g. global warming.
3. It is the total capacity of wind.
4. The global use of wind energy is on the increase for the future.

Activity 7 (Learner's Book, page 371)

1. The table gives us the region, the total capacity of wind and the contribution it makes to the global market.
2. Europe has the highest. Latin America & Caribbean has the lowest.
3. They are developing countries and they do not have the capital to invest in wind energy, whereas Europe is developed and has the money.
4. Developed: Europe, North America, Pacific Region.
Developing: Africa and Middle East, Asia, and Latin America & Caribbean.

Activity 8 (Learner's Book, page 374)

1. In 2008, South Africa faced a chronic shortage of electricity.
2. Load shedding was used as a last resort to prevent the collapse of the national supply grid.
3. No, it is estimated that load shedding will remain high until 2013.
4. It is the amount of carbon emissions produced by a country.
5. South Africa's carbon footprint is already huge, with 93% of Eskom's electricity generated from coal-fired stations.
6.
 - a. give off little or no carbon emissions
 - b. are inexhaustible
 - c. they are cheap

Activity 9 (Learner's Book, page 378)

1. energy usage will become cheaper; solar energy industry grows; job opportunities are created; biofuels industry sector grows
2. the environment will become cleaner; health facility grows; crops will grow better; lower pollution levels
3. Sustainable development means substituting our use of conventional energy sources with the responsible use of more sustainable, renewable resources.

Informal assessment**Activities 1–3**

- Go through the answers with the class. Ask learners to offer answers.
- Let the learners swap books and mark each other's work.

Activity 4

- Listen to the learners' contributions and assess whether they have grasped the concepts taught in the unit. Also note whether their contributions are sufficiently insightful.

Activities 5–8

- Go through the answers with the class. Ask learners to offer answers.
- Let the learners swap books and mark each other's work.

Activity 9

- Listen to the learners' contributions and assess whether they have grasped the concepts taught in the unit. Also note whether their contributions are sufficiently insightful.

Remedial/extension**Remedial:**

Let those learners who under-achieved in Activity 2 complete the following:

1. Explain these terms: solar energy, wind energy.
2. Are these statements True or False:
 - a. South Africa has extremely favourable conditions to generate electricity from solar energy.
 - b. Parts of the Sahara, Kalahari and Namib Deserts have very high average daily sunlight, with temperatures often reaching up to 45 °C.
 - c. At the equator, the Sun is directly overhead all year round, which allows countries near to the equator to have high solar renewable energy.
 - d. Power generation of wind energy can happen via offshore wind only.
3. Name one type of wind turbine and provide an explanation for it.

Answers

1. *Solar energy* is light energy (energy from the Sun) which is transformed to electric or thermal energy. *Wind energy* is the energy of the wind which is changed into electrical energy, via wind turbines or windmills. It is a renewable resource.
2. a) T; b) T; c) T; d) F
3. Any one:
 - the three bladed upwind turbine is most commonly used
 - the large grid-connected wind turbine produces power more cheaply than earlier models

- the blades of the larger turbines move more slowly than the smaller turbines making the blades easier to see and safer for airborne animals

Extension:

- Let learners research information pertaining to the use of non-conventional energy and how it will benefit South Africa.

Learner's Book pages 379–392 Duration: 3 hours	UNIT 5 Energy management in South Africa TERM 4, WEEK 5
--	---

Curriculum and Assessment Policy Statement (CAPS) content

Energy management in South Africa

- South Africa's changing energy needs
- Energy management, towards greener economies and sustainable life styles: responsibilities of governments, businesses and individuals

Resources

- Learner's Book pages 379–392
- Websites (optional):
 - For information about solar aid: http://www.solar-aid.org/projects/sunnymoney-microsolar.html?gclid=CJreu_Oe0q0CFRIhtAod4T4t2A
 - For information about energy management projects: <http://agama.co.za/home/energy-management/projects-review>

Preparation

- Read through the unit and familiarise yourself with the content that you will need to teach. Think about what learners may already know about the topics and any areas of difficulty that you think they might encounter.

Teaching the unit

» Lesson 1

- For the first ten minutes of the lesson brainstorm with the learners to find out what they know about South Africa's changing energy needs. Encourage all learners to participate in an interactive discussion.
- Work through the section, 'What are South Africa's changing energy needs?' (page 379) with the learners.
- Emphasise that there is a demand for clean energy resources.
- Use the case study of the Southern Kalahari (page 381) as an example of rising temperatures.

Activity 1

- This is a short activity that focuses on South Africa moving to a low carbon economy.
- Learners may do the activity in class and work on their own.
- Allow time at the end of the lesson to go through the answers with the learners.



Lesson 2

- Work through the section, 'What is energy management towards greener economies and sustainable lifestyles?' (page 382) with the learners.
- Emphasise the importance of strategies for environmental sustainability.
- Point out the 'three pillars of a sustainable development' by referring to Figure 7.5.5 (page 383).
- Explain what a 'green economy' is.
- Focus on the benefits of green economies and the management strategies to promote green economies.
- Draw learners' attention to the case study on the 'GreenCape Initiative' (page 384) so that learners may have a better understanding of what a green economy is.

Activity 2

- This activity focuses on a case study.
- Allow learners to work in pairs and to begin the activity in class. They can complete it as homework.

Activity 3

- This activity focuses on environmental sustainability.
- Go through this activity with the learners so that they understand what is expected of them. Set it as a homework task.
- If learners have time at the end of the lesson, they can start working on this activity.



Lesson 3

- Go through the answers to Activities 2 and 3 with the class.
- Work through the section, 'What is government's responsibility towards energy management?' (page 385). Ask learners what they think the responsibility of governments should be.
- Emphasise South Africa's government's responsibility by referring to the Bill of Rights (page 385).
- Draw the learners' attention to Figure 7.5.8 which illustrates the renewable energy output in South Africa.
- Emphasise the importance of businesses managing their energy resources effectively.
- Allow learners to read the case studies to gain a better understanding of sustainable energy management.

Activity 4

- Allow learners to complete the activity in class.
- Allow them to work in pairs.
- Allow time at the end of the lesson to go through the answers.

- Emphasise the importance of individual responsibility towards the management of energy resources.

Activity 5

- Allow learners to work in pairs to complete the activity in class.
- Allow time at the end of the lesson to go through the answers.

Answers

Activity 1 (Learner's Book, page 382)

1. to reduce its carbon emissions
2. the affect of population increase on natural resources
3. Carbon emissions increase global warming, which causes rising sea levels, rising temperatures and melting of polar ice caps.
4. the environment is affected in a negative manner

Activity 2 (Learner's Book, page 384)

1. Non-conventional energy use can become the pathway to sustainable energy, an energy source that will not become depleted.
2. Tax reforms and rebates that improve environmental sustainability should be well thought through. Subsidies, which provide for unsustainable economic activity and environmental degradation should not be supported as 'businesses and their activities' continue to exploit our natural capital.
3. environmental, societal and economical
4. Environmental indicators measure how people are affected by the environment in positive and negative ways.

Activity 3 (Learner's Book, page 385)

1. A renewable energy and green economy conference in Cape Town.
2. It is a new initiative to promote renewable energy and the green economy in the Western Cape.
3. One of the aims of the initiative is to achieve significant growth and jobs.
4. The objective of the initiative is to ensure that the Western Cape is at the forefront of green technology.
5. The primary goals are to serve as a 'shop window' for the sector and to promote the transition of the Western Cape economy to greater resource efficiency and a low-carbon future.

Activity 4 (Learner's Book, page 389)

1. CSP – Concentrating Solar Power
2. Yes, because it has high theoretical and technical potential.
3. 17
4. No, it has low theoretical and technical potential.

Activity 5 (Learner's Book, page 392)

1. Households are faced with the increasing cost of electricity and other forms of energy, as well as the ongoing possibility of disruptive load shedding.
2. 'greening' the energy supply of their homes and offices to supplant coal-fired electricity with clean, renewable alternatives
3. solar options
4. Use other renewable and alternative options, including geothermal energy, wind power, biomass and waste generation, gas and hydroelectric power.

Informal assessment

- Go through the answers to the activities with the class. Encourage learners to share their answers.
- Let the learners mark their own work or swap books and mark each other's work.
- Take in the learners' notebooks at the end of the unit to review their work yourself so that you are able to identify any problem areas.

Remedial/extension

Extension:

- Let the learners complete Worksheet 20 on page 316 in the Resources section of this Teacher's Guide. It draws on all the concepts in this unit and focuses on energy management and climate change.

This fieldwork task is linked to the content of Module 7, Unit 2.

Task

To investigate and analyse soil profiles.

Preparation

- Prepare the class for this fieldwork ahead of time.
- Ensure that the place you will visit has soil that can be dug to at least 1 metre in depth.
- Choose an afternoon and plan the fieldwork using the school term calendar, or choose one whole day.
- It may be necessary to book transport and write letters to parents ahead of the exercise.
- Make sure you have a suitable field or open area where you have permission from the necessary authorities to dig a couple of trenches for checking the soil profile.
- Bring boots, clothes that can get dirty, spades, cameras, or cell phones with cameras.
- Remind learners of the factors that affect soil formation and the different layers in a soil profile.

Process

- Take photos of the area before digging begins: this is for evidence of the vegetation cover, topography, and any other factor that could help explain the profile you will see.
- Remind the learners to make a sketch of the area, and to make notes on the topography, vegetation, climate, rocks, drainage, farming, people's impact on the environment, or anything else of interest in the area.
- Begin by digging a trench that is at least 1 metre deep.
- Take photos of your progress. Try to show the layers in the profile in your photo. Learners can sketch what they see.
- If you are able to safely dig deeper and make a longer trench, you may get more layers appearing.

- When you have completed gaining your visual evidence, make sure that the soil is replaced, and that the area does not look unsightly. Collect any items brought for the exercise and bring them back to the school safely.
- If you have had to get permission to use the field, give a learner the task of writing a thank-you letter on behalf of the class.

Conclusion

- The evaluation of the evidence of vegetation, topography, climate and rock can be written up as homework. Learners must attach their field notes and sketches as part of the assignment.
- Neat diagrams, photos, sketch maps, are all visual evidence to be part of the investigation.
- In conclusion, the learner's personal opinion must be given as to whether it is possible to make improvements to the soil profile that was recorded.

Learner's Book
pages 394–396

Assessment Task 3

Resources and sustainability

TERM 4

For information on how to assess the learners' completed tasks, please see page 206 in the Formal Assessment section of this Teacher's Guide.

	MODULE 8	
TERM 4 Learner's Book pages 397–410 Duration: 4 hours	RESOURCES AND SUSTAINABILITY: GEOGRAPHICAL SKILLS AND TECHNIQUES	

This module provides the learners with an opportunity to further develop their practical skills and to consolidate what they have learnt about contours and landforms on topographical maps, GIS, drawing cross-sections and calculating vertical exaggeration and gradient. This is done within a context of extending their knowledge and understanding of the relationship between resources and sustainability.

Curriculum and Assessment Policy Statement (CAPS) content

Topographic maps (applications and revision)

- Contours and landforms
- Cross-sections on 1:50 000 maps
- Vertical exaggeration
- Inter-visibility
- Gradient

Geographical and Information Systems (GIS)

- Spatially referenced data
- Spatial and spectral resolution
- Different types of data: line, point, area and attribute
- Raster and vector data
- Capturing different types of data from existing maps, photographs, fieldwork or other records on tracing paper

Key geographical skills and techniques

- analysing and explaining maps and photos
- applying communication, thinking, practical and social skills
- processing, interpreting, and evaluating data
- understanding the role of people in the environment

Curriculum and Assessment Policy Statement (CAPS) content

Topographic maps (applications and revision)

- Contours and landforms
- Cross-sections on 1:50 000 maps
- Vertical exaggeration
- Inter-visibility
- Gradient

Resources

- Learner's Book pages 398–404
- Tracing paper
- Coloured pens or pencils

Preparation

- Read through the unit and work through the activities yourself before assigning them to the learners to complete.

Teaching the unit

- This unit should be completed in two lessons. Apart from a brief introduction by you in the first lesson, the rest of the time should be allocated to the learners working through the activities.
- Let the learners work individually or in pairs.
- Ask the learners to work through the activities. Circulate around the classroom providing assistance where necessary.
- Remind learners to refer to Modules 2, 4 and 6 of the Learner's Book for assistance with the activities.

» Lesson 1

- Introduce the module by explaining that all the skills and concepts, in this unit and the next, learners have come across earlier in the year and that these units provide an opportunity for the learners to revise them.
- Read through the information in the Learner's Book about calculating distance using contours and landforms, drawing cross-sections and determining vertical exaggeration, intervisibility and gradient.
- Allow the rest of the lesson for the learners to complete Activities 1 to 7.
- What learners are not able to complete in class they should complete as homework.

» Lesson 2

- Go through the answers to Activities 1 to 7 with the learners.
- Allow the rest of the lesson for the learners to complete Activities 8 to 15.
- What learners are not able to complete in class they should complete as homework.

Answers

Activity 1 (Learner's Book, page 398)

- 170°
- Slimes Dam
- South-Southwest
- 26°54'45"S 26°48'45"E
- Distance map = 6 cm
Scale of map = 1:50 000
1 cm represents 50 000 cm
 $1 \text{ cm} = \frac{50\,000 \text{ km}}{100\,000}$

Therefore, 1 cm represents 0,5 km
Distance in reality = distance on map \times scale
= 6 cm \times 0,5 km
= 3 km

Activity 2 (Learner's Book, page 398)

- No, it has a gradual incline. The contour lines are far apart.
- Given scale = 1:50 000
HD = 2 cm
Therefore the ground distance = 2 cm \times 50 000 cm
= 100 000 cm
= 1 000 m
$$\text{Gradient} = \frac{VI}{HD}$$
$$= \frac{1\,308,1 - 1\,294}{1\,000 \text{ m}}$$
$$= \frac{14,1}{1\,000 \text{ m}}$$
$$= \frac{1}{70,9}$$
$$= 1:71$$
 - Yes, the physical relief is flat to gradual for the development of the waterworks.
- The contour heights on the mapped area indicate that Stilfontein is a high-lying area situated at a high altitude (height above sea level) and therefore receives high amounts of solar radiation.

Activity 3 (Learner's Book, page 400)

- Vaal River
- West. The contour heights are decreasing in a westerly direction.
- The Vaal River provides water and irrigation for mining, cultivated land and recreation on either side of the river.

Activity 4 (Learner's Book, page 400)

- The main primary activity is mining and the main secondary activity is industry.
- gold
- six
- Shaft mining. Diggings, excavations, mine dumps, shafts and slime dumps are shown on the map.
- road and railway
- Mining is the main primary activity in the mapped area.

Activity 5 (Learner's Book, page 400)

1. Dust from the excavations, mine dumps and diggings will cause mine dust, air pollution and acid rain in the residential areas.
2. Protected areas are shown along the river and trees have been planted to prevent erosion.

Activity 6 (Learner's Book, page 400)

1. southwest
2. 158°
3. $33^\circ34'30''\text{S } 18^\circ29'30''\text{E}$
4. Distance map = 5 cm

Scale of map = 1:50 000

1 cm represents 50 000 cm

$$1 \text{ cm} = \frac{50\,000}{10\,000} \text{ km}$$

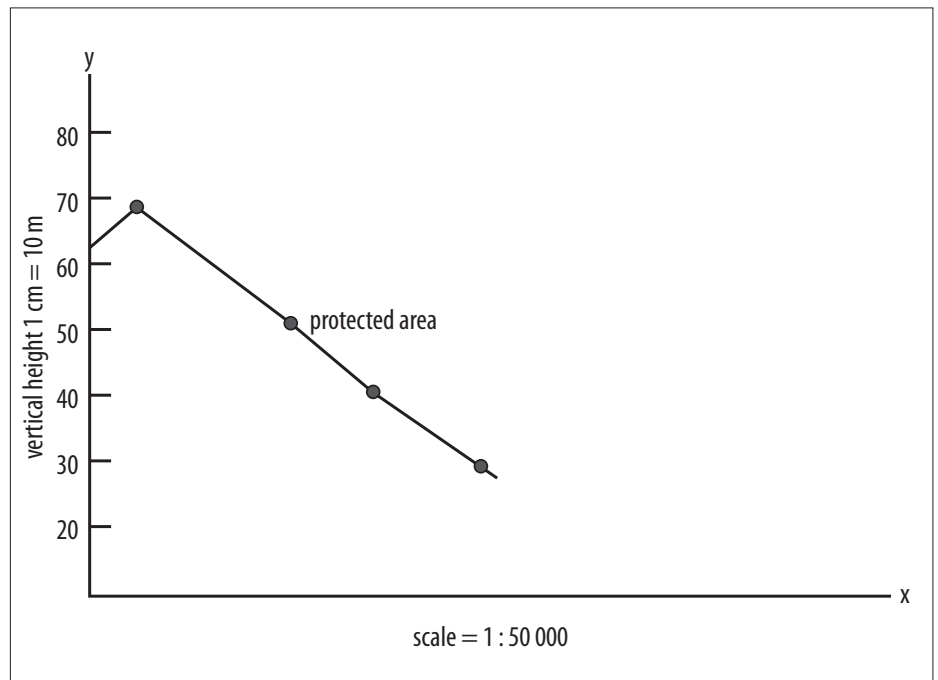
Therefore, 1 cm represents 0,5 km

Distance in reality = distance on map \times scale

$$= 5 \text{ cm} \times 0,5 \text{ km}$$

$$= 2,5 \text{ km}$$

5.



$$\begin{aligned} 6. \quad VE &= \frac{VS}{HS} \\ &= \frac{1:10\,000}{1:50\,000} \text{ or } \frac{\frac{1}{10\,000}}{\frac{1}{50\,000}} \\ &= \frac{1}{10} \times \frac{500}{1} \text{ or } \frac{1}{100} \times \frac{50\,000}{1} \\ &= 50 \text{ times} \end{aligned}$$

Activity 7 (Learner's Book, page 402)

1. The contour lines are spaced far apart indicating a flat to gradual slope.
2. The physical relief is very flat with no rock outcrops.

Activity 8 (Learner's Book, page 402)

1. Southwest. The contour lines are decreasing in a southwest direction; the river is flowing towards the sea.
2. The mapped area receives seasonal rainfall and the Donkergratrivier is a tributary to the Soutrivier.

Activity 9 (Learner's Book, page 402)

1. three
2. flat to gradual land; non-perennial water; reservoirs
3. industrial area
4. the Western Cape Province and the national power grid during peak demand periods for electricity
5. water is used to cool the electrical turbines and then released into the ocean

Activity 10 (Learner's Book, page 402)

1. Yes. The Koeberg Nature Reserve, recreational areas and rows of trees are shown on the map.
2. A possible nuclear leakage/meltdown would cause nuclear radiation to the surrounding residential areas.

Activity 11 (Learner's Book, page 403)

1. Distance map = 13 cm
Scale of map = 1:50 000
1 cm represents 50 000 cm
 $1 \text{ cm} = \frac{50\,000}{100\,000} \text{ km}$
Therefore, 1 cm represents 0,5 km
Distance in reality = distance on map \times scale
= 13 cm \times 0,5 km
= 6,5 km
2. west
3. No, the contour lines indicate that the land is flat to gradual.
4. Scale of map = 1: 50 000
Therefore, 1 cm = $\frac{50\,000}{100\,000}$
= 0,5 km
Area of map = length (L) \times breadth (B)
L = 6 cm
B = 3,5 cm
L = 6 cm \times 0,5 km
= 3 km
and B = 3,5 cm \times 0,5 km
= 1,75 km
Therefore, L \times B = 3 km \times 1,75 km
= 5,25 km²

Activity 12 (Learner's Book, page 403)

1. The contour lines are far apart indicating that the Grootgeluk Mine is situated on a flat to gradual slope.
2. kop; butte

Activity 13 (Learner's Book, page 403)

1. reservoirs and furrows
2. Seasonal rainfall. Non-perennial rivers; reservoirs; furrows are shown on the map.

Activity 14 (Learner's Book, page 403)

1. mining
2. The mineral (coal) can be found in coal seams close to the surface of the Earth.
3. The cutline is the area where land has been excavated in long and narrow trenches in an open-cast mine for surface mining.
4. conveyor belts
5. to supply electricity to the surrounding areas

Activity 15 (Learner's Book, page 000)

1. Yes. Slimes Dams have been used to store waste from the mine.

Informal assessment

- Move around the classroom as the learners are completing the activities. Take note of any learners that may need your assistance. If necessary, provide them with additional remedial activities.
- Go through the answers with the class. Encourage learners to share their answers. Let the learners mark their own work or swap books and mark each other's work.

Learner's Book
pages 405–410
Duration: 2 hours

UNIT 2

Geographical and Information Systems

TERM 4, WEEKS 6–7

Curriculum and Assessment Policy Statement (CAPS) content

Geographical and Information Systems (GIS)

- Spatially referenced data
- Spatial and spectral resolution
- Different types of data: line, point, area and attribute
- Raster and vector data
- Capturing different types of data from existing maps, photographs, fieldwork or other records on tracing paper

Resources

- Learner's Book pages 405–410
- tracing paper

Preparation

- Read through the unit and work through the activities yourself before assigning them to the learners to complete.

Teaching the unit

- This unit should be completed in two lessons. Allocate plenty of time for the learners to work through the activities.
- Let the learners work individually or in pairs.
- Ask the learners to work through the activities, circulate around the classroom providing assistance where necessary.
- Remind learners to refer to Module 4 of the Learner's Book for assistance with the activities.

» Lesson 1

- Go through the answers to Activities 8 to 15 from Unit 1 with the class.
- Work through the sections, 'How to identify spatially referenced and other types of data?' (page 405) and 'How to identify spatial and spectral resolution?' (page 406).
- Allow the rest of the lesson for the learners to complete Activities 1 and 2.
- What learners are not able to complete in class they should complete as homework.

» Lesson 2

- Go through the answers to Activities 1 and 2 with the learners.
- Allow time for the learners to work through the rest of the information in the unit and complete Activities 3 and 4.
- What learners are not able to complete in class they should complete as homework.
- Go through the answers to Activities 3 and 4 with the learners.

Answers

Activity 1 (Learner's Book, page 406)

1. Grootgeluk Mine; Mokolo River; Lephalale
2. Grootgeluk Mine provides coal; Mokolo River provides irrigation and water to surrounding areas; Lephalale provides services to residents
3. An image is context-driven when it has high spatial and spectral resolution.

Activity 2 (Learner's Book, page 408)

1. Limpopo River; Mokolo River; Lephalale; Steenbokspan
2. sample localities with regard to weathering
3. It does not reflect the true colour of physical relief.
4. The map has a high spatial and spectral resolution as definite demarcation of areas is highlighted.

Activity 3 (Learner's Book, page 409)

Figure	Type of data model – raster or vector	How data is captured using this model	What the different colours on the maps measure or illustrate
Figure 8.2.2	vector	lines, points and areas (polygons) are used to capture data	location of coalfields
Figure 8.2.3	vector	lines, points and areas (polygons) are used to capture data	coal and rock reserves
Figure 8.2.4	vector	lines, points and areas (polygons) are used to capture data	acid mine drainage
Figure 8.2.5	vector	lines, points and areas (polygons) are used to capture data	water elevation

Activity 4 (Learner's Book, page 410)

Own data layers of Figure 8.2.2, 8.2.4, 8.2.5 and 8.1.3.

Informal assessment

- Move around the classroom as the learners are completing the activities. Take note of any learners who may need your assistance. If necessary, provide them with additional remedial activities.
- Go through the answers with the class. Encourage learners to share their answers. Let the learners mark their own work or swap books and mark each other's work.

These activities provide an opportunity for learners to consolidate concepts and skills learnt in Term 4. Learners can complete them in class or as homework. It is suggested that they complete the activities individually as a means of self-assessment.

You can write the answers on the board for the learners and/or call them out where more appropriate. However, if possible, it is suggested that you photocopy the answers and give them to the learners so that they have them for revision purposes.

Activity 1

1. Resources are the basis for all development, categorised as land, labour, capital and entrepreneurship.
2. The 'resource curse' is the inability of countries with rich resources, to develop them independently, investing the profits back into the development of the infrastructure. When a single resource or commodity such as oil is exploited, its export value can affect the rate of currency exchange, making it more difficult for a country to remain competitive in the export of other products. The effect is that the development growth slows down in a country, which is seen as a 'curse'.
3. Human resources develop technology that can better-use resources, create industries, and manufacture products for export. An educated population provides employable people at all levels of each sector of the economy, creating a balanced, well-functioning country.
4. The Environmental Kuznets Curve shows the relationship between environmental degradation and the level of national income/development.
5. Degradation means over-use, or exploitation that is unsustainable; it has a negative effect associated with pollution and wastage and spoiling the environment for future generations.

Activity 2

1. Sustainable development is development which ensures that there are enough resources left for future generations to satisfy their needs.
2.
 - a. The future generations will have access to resources.
 - b. It is difficult for poorer nations to slow down their resource usage as they have to sell their resources for currency.
3. Human capital can be educated to create alternative resources, or develop new uses for existing products, such as wind power, solar power, biomass.

Activity 3

1. Abiotic factors are parent material, climate, topography and time; biotic factors are people and animals.
2. Soil is necessary for growing plants, which feed people and animals, both directly and indirectly.
3. Refer to Figure 7.2.1 (page 312) in the Learner's Book.
4. Mollisols and Alfisols

5. a. farmers ploughing downhill instead of around, following the contours; and animals work paths into the land by eroding the vegetation
b. wind blows uncovered soil away; water carries soil away; the sea can erode cliffs
6. we must keep the Earth covered with vegetation; we must not plant in vulnerable areas where rainfall is erratic
7. vegetation cover will bind the top soil layers; maintaining wetlands allows them to act as sponges when water levels rise, so that soil is not carried away; not allowing over-grazing will prevent the surface from becoming exposed and vulnerable; good planting techniques will prevent water from running down the hill

Activity 4

Paragraph to include:

- Rapid population growth in South Africa increases the use of conventional energy sources.
- With the electricity demand increasing due to the increase in population, South Africa has been depending largely on fossil fuel, i.e. coal.
- With the increased use of fossil fuels there has been an increase in carbon dioxide emissions.
- Carbon emissions are due to the generation of electricity from conventional energy resources in South Africa.
- The use of fossil fuels increases carbon dioxide emissions and has a negative impact on society and the environment.
- If resources are not managed in a sustainable way, South Africa may be heading for a disaster.
- Carbon emissions increase global warming, which causes rising sea levels, rising temperatures and melting of polar ice caps.

Activity 5

Paragraph to include:

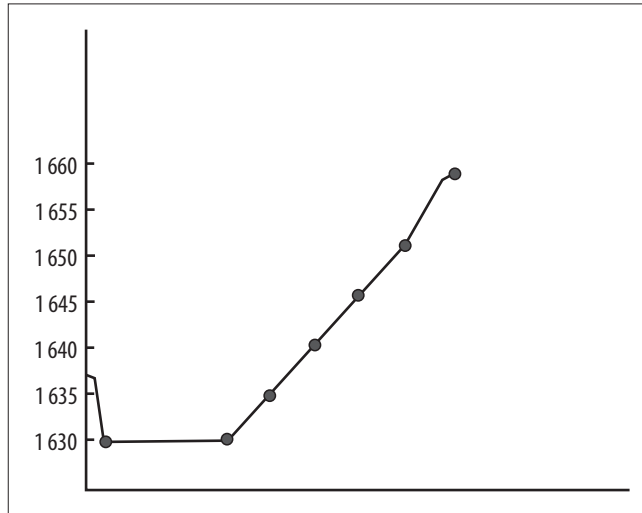
- Non-conventional, alternative energy sources provide a better and more sustainable future for South Africa.
- Non-conventional energy sources include solar and wind energy.
- Renewable sources of energy can be regarded as sustainable because they can be replaced as fast as they are used up.
- South Africa is rich in renewable energy sources such as the Sun and wind.
- In the Northern Cape high radiation occurs, while along the coastal areas, strong winds are experienced which is good for energy generation.
- The increased use of renewable sources for energy generation is a solution to global warming.
- Renewable energy generation is sustainable and South Africa can only gain from using it.

Activity 6

- Greener economies and sustainable lifestyles are important economically and environmentally.
- Promoting awareness of the sensitivity for the environment.
- Promoting responsibility towards the environment.
- Promoting and sustaining ecological conservation.
- It is important for us to adopt an environmental sustainability ethic and change our personal lifestyles so that we do not destroy and use up all the resources on the Earth.

Activity 7

1.



$$\begin{aligned} 2. \quad VE &= \frac{VS}{HS} \\ &= \frac{1:500}{1:10\,000} \text{ or } \frac{\frac{1}{500}}{\frac{1}{10\,000}} \\ &= \frac{1}{5} \times \frac{100}{1} \text{ or } \frac{1}{5} \times \frac{100}{1} \\ &= 20 \text{ times} \end{aligned}$$

3. Lenasia South has been developed on gradual to flat land. The contour lines are far apart in the Lenasia South area.
4. hill
5. to provide electricity to Lenasia South
6. Gauteng
7. Electricity is generated from coal in fossil fuel power stations.

Activity 8

1.
 - The physical and human-made features can be identified by a definite geographic location (absolute position).
 - The physical and human-made features are more prominent, as high spatial resolution includes the smallest of space to include all objects. The shape of features is clear.
2. The satellite image is context-driven because: (a) It is very informative. (b) Many features are present such as a residential area, a mine and power lines.
3. Town planners can use this satellite image for various developments and planning because the mapped area is context-driven.
4. Limpopo
5. At Grootgeluk Coal Mine, coal is extracted from the Earth. This coal is then used at the power station to generate electricity. Coal is heavy to transport and it is for this reason that the power station is situated in close proximity to the mine.
6. The surrounding residential area and the greater Lephalale area.

These exam papers help learners to prepare for the end-of-year examination. Learners can complete the papers in class or as homework. It is suggested that they complete them individually as a means of self-assessment.

You can write the answers on the board for learners and/or call them out where more appropriate. However, if possible, it is suggested that you photocopy the answers and give them to learners so that they have them for revision purposes.

Paper 1: Geographical knowledge (Learner's Book, pages 415–427)

Marks: 225

Section A

Question 1 (75 marks)

1.1 One mark each.

- 1.1.1 D
- 1.1.2 H
- 1.1.3 I
- 1.1.4 P
- 1.1.5 M
- 1.1.6 C
- 1.1.7 F
- 1.1.8 L
- 1.1.9 B
- 1.1.10 S
- 1.1.11 A
- 1.1.12 R
- 1.1.13 E
- 1.1.14 K
- 1.1.15 G

(15 × 1)
[15]

1.2

- 1.2.1 Walker circulation (2)
- 1.2.2 the trade winds blow the surface warms water west/the Equatorial current carries the warm surface water west (2)
- 1.2.3 the waters of the east tropical Pacific become unusually warm (2)
- 1.2.4 east (2)
- 1.2.5 South Africa's summers can be hotter and drier than usual (2)

[10]

1.3

- 1.3.1 Sahara Desert (2)
- 1.3.2 dry tropical climate/semi-arid climate; hot and dry/
low rainfall (4)
- 1.3.3 harmattan (2)
- 1.3.4 continental tropical (2)
- 1.3.5 desertification (2)

- 1.3.6 climatic variation/prolonged drought/climate change; unsustainable land-use practices/overgrazing/deforestation for fuel (2 × 2) (4)
- 1.3.7 Any two: hardship/shortages of resources such as land, food, water; conflict due to competition over scarce resources; subsistence farmers abandon the land and migrate to the cities (2 × 2) (4)
- [20]
- 1.4
- 1.4.1 Arizona, United States of America (2)
- 1.4.2 The canyon was carved by the Colorado River. Uplift of the Colorado Plateau gave the river greater eroding power. The rejuvenated river cut down deeply to form the steep sides of the valley. (3 × 2) (6)
- 1.4.3 a. A = shale; shale is a weak, easily eroded rock and so it forms gentle slopes (2 × 2) (4)
- b. B = sandstone; sandstone is a resistant rock and so it forms steep slopes or cliffs (2 × 2) (4)
- 1.4.4 a. the movement of material downslope by gravity (2)
- b. rock falls
- c. debris flow or landslide or slump (2)
- d. scarp retreat; it is the dominant form of slope retreat in semi-arid regions/the canyon valley widens slowly over time without the walls losing steepness or height (2 × 2) (4)
- 1.4.5 tourist attraction/tourists come to look or hike (2)
- 1.4.6 Fish River Canyon (2)
- [30]

Question 2 (75 marks)

2.1 One mark each.

- 2.1.1 equinox
- 2.1.2 subsidence
- 2.1.3 higher
- 2.1.4 doldrums
- 2.1.5 sea breezes
- 2.1.6 dry mid-latitude climate
- 2.1.7 dust storms
- 2.1.8 drought
- 2.1.9 erosion
- 2.1.10 dip slope
- 2.1.11 batholith
- 2.1.12 pediment
- 2.1.13 talus slope
- 2.1.14 gravity
- 2.1.15 slope decline (15 × 1)

[15]

2.2

- 2.2.1 a. E (2)
- b. F (2)
- c. A (2)
- d. C (2)
- e. G (2)
- 2.2.2 0°/equator (2)

- 2.2.3 The Sun's rays are almost perpendicular/most concentrated over the equator. (2)
- 2.2.4 A region of high temperatures and high rainfall/tropical moist climate. Air convergence encourages convective rainfall. (2 × 2) (4)
- 2.2.5 A region with dry summers and wet winters/a generally dry region/dry mid-latitude climate; air subsidence is associated with dry, warm air and clear skies. (2 × 2) (4)
- 2.2.6 The cold Benguela Current carries cold water from the mid-latitudes to the tropics. The warm Mozambique Current carries warm water from the tropics to the mid-latitudes. (2 × 2) (4)
- 2.2.7 The western half of Southern Africa is dry – this is where the Kalahari Desert and the Namib Desert are located. Because of the cold temperatures of the water, evaporation is reduced and the maritime air mass holds less water vapour than it otherwise would. (2 × 2) (4)
- [30]

2.3

- 2.3.1 dolerite (2)
- 2.3.2 sill (2)
- 2.3.3 A = crest; B = cliff; C = talus slope (3 × 2) (6)
- 2.3.4 a. plateau (2)
b. butte (2)
- [14]

2.4

- 2.4.1 The break-up of Gondwanaland produced a huge volcanic outpouring of basalt over several million years. (2 × 2) (4)
- 2.4.2 On gentle slopes, the top layer of waterlogged/water-soaked sediment soil moves slowly downslope. (2 × 2) (4)
- 2.4.3 the rock is jointed/cracked (2)
- 2.4.4 tor (2)
- 2.4.5 the cliff-like slope is undercut; it becomes more prone to rock falls (2 × 2) (4)
- [16]

Section B

Question 3 (75 marks)

3.1 One mark each.

- 3.1.1 F
- 3.1.2 J
- 3.1.3 M
- 3.1.4 H
- 3.1.5 B
- 3.1.6 G
- 3.1.7 A
- 3.1.8 E
- 3.1.9 C
- 3.1.10 O
- 3.1.11 I
- 3.1.12 N
- 3.1.13 K
- 3.1.14 D
- 3.1.15 L (15 × 1)
- [15]

3.2 One mark each.

- 3.2.1 F
 - 3.2.2 F
 - 3.2.3 F
 - 3.2.4 T
 - 3.2.5 T
- (5 × 1)
[5]

3.3 One mark each.

- 3.3.1 non-conventional energy
 - 3.3.2 acid rain
 - 3.3.3 global warming
 - 3.3.4 coal
 - 3.3.5 nuclear energy
 - 3.3.6 carbon dioxide
 - 3.3.7 environmental despoliation
 - 3.3.8 solar energy
 - 3.3.9 land degradation
 - 3.3.10 sustainable energy
- (10 × 1)
[10]

3.4

- 3.4.1 *Globalisation* is a process of economic, cultural, linguistic, political, and social integration through trade, products, marketing, educational and job opportunities. (2)
 - 3.4.2 land is cheaper; labour is cheaper; fewer laws and regulations (2 × 2) (4)
 - 3.4.3 Abuse of water resources; contamination of water; contamination of soil; agricultural losses; health problems; loss of wages; loss of educational opportunities. (1 × 4) (4)
 - 3.4.4 The environment was affected by the industrial pollutants of the Coca-Cola factory. (2)
 - 3.4.5 To maintain a strong presence reminding people of the money that the committee is seeking to pay for the damages caused by the firm in India. (2 × 2) (4)
 - 3.4.6 Neo-colonialism is the extension of economic and political power through means other than direct control. Multinationals operate in less wealthy countries where land and labour is cheap, and there are fewer laws. They can be ruthless in getting maximum profits for the company at the expense of the poorer country. This is just another form of colonialism. (2)
 - 3.4.7 No. People use the land. They need water. The soil cannot be contaminated or else they won't be able to cultivate crops there. This is why they protested against Coca-Cola. (2)
- [20]

3.5

- 3.5.1 people; water; wind; slope; ice (2)
- 3.5.2 a. *steep slopes* cause run-off when it rains; topsoil moves downwards
- b. *low rainfall* causes vegetation to die; little vegetation leaves the topsoil open to wind and rain and vulnerable to erosion
- c. *high temperatures* bake the open land; when it rains, the water runs off more easily, taking topsoil away (3 × 2) (6)

3.5.3 People who are poor, struggle to survive. They may have little education or skills. Their primary care is to stay alive; the conservation of the soil is not a concern. (2)
[10]

3.6

3.6.1 coal and peat; nuclear energy; hydroelectricity; oil (4×1) (4)

3.6.2 Coal. Coal is South Africa's main energy resource. It is a non-renewable energy resource because it cannot be replaced as fast as it is being used. ($1 + (1 \times 2)$) (3)

3.6.3 air pollution; global warming; acid rain; environmental degradation (1×4) (4)

3.6.4 South Africa must move towards sustainable energy resource management. This can be done by increasing energy efficiency, by increasing the use of renewable energy resources, which will reduce pollution and health risks. (2×2) (4)
[15]

Question 4 (75 marks)

4.1 One mark each.

4.1.1 B

4.1.2 C

4.1.3 B

4.1.4 A

4.1.5 C

4.1.6 C

4.1.7 C

4.1.8 B

4.1.9 C

4.1.10 B

4.1.11 A

4.1.12 C

4.1.13 C

4.1.14 B

4.1.15 C

4.1.16 B

4.1.17 B

4.1.18 C

4.1.19 C

4.1.20 C

(20×1)

[20]

4.2 One mark each.

4.2.1 T

4.2.2 T

4.2.3 T

4.2.4 F

4.2.5 T

4.2.6 T

4.2.7 T

4.2.8 F

4.2.9 T

4.2.10 F

(10×1)

[10]

- 4.3
- 4.3.1 humanitarian (2)
- 4.3.2 a. *voluntary aid* by fieldworkers as teachers, agricultural experts, engineers, or nurses and doctors
 b. *conditional aid* by countries promising money, or buildings, or food, on condition the conflict is stopped
 c. *technical aid* in the form of agricultural help, engineering, water purification
 d. *multilateral aid* by many countries contributing aid in the form of food, supplies, clothing, shelter, medical help
 (4 × 2) (8)
- 4.3.3 Developing countries like Somalia, often suffer conflict. Poverty, lack of infrastructure, lack of housing, clean water and sanitation, and lack of education, and medical help, are characteristics of poor areas, like Somalia. (2 × 2) (4)
- 4.3.4 People get tired of hearing of the needs of others in developing countries; they switch off; they don't give aid anymore, even if there are appeals. (2)
- 4.3.5 People want to know where their aid is going. They don't want the banks to get rich by holding onto the aid money. They don't want the aid to be abused by the recipient country, or by the people in power. They don't want conflict to disrupt the supply of aid to the needy people. (2 × 2) (4)
- [20]

- 4.4
- 4.4.1 lack of data of bird and bat movements; monitoring should start at least one year before planning. (2 × 2) (4)
- 4.4.2 it can never be exhausted; it is a continuous source of energy (2 × 2) (4)
- 4.4.3 Wind power or the speed at which wind travels is used to generate electricity. Wind turbines are arranged in large groups called wind farms. The turbines collect the wind's energy. The energy is spun through electrical generators to produce electricity. (2 × 3) (6)
- 4.4.4 bird deaths from flying into turbines (2)
- 4.4.5 crucial ecological role in pollination; insect control (2 × 2) (4)
- 4.4.6 planned developments and conservation planning should reach consensus (2)
- 4.4.7 EIA will determine the negative and positive environmental aspects that impact on the wind farm and its surrounding areas. (3)

[25]

[75 marks]

Total: 225 marks

Paper 2: Geographical skills and techniques

Marks: 75

(Learner's Book, pages 428–432)

Question 1

One mark each.

- 1.1 B
- 1.2 A
- 1.3 B
- 1.4 A
- 1.5 B
- 1.6 D
- 1.7 D
- 1.8 A
- 1.9 B
- 1.10 B

(10 × 1)
[10]

Question 2

2.1 Distance on map = 6,5 cm

Scale of map = 1:50 000

1 cm represents 50 000 cm

1 cm represents $\frac{50\,000\text{ km}}{100\,000}$

Therefore 1 cm represents 0,5 km

Distance in reality = distance on map × scale

= 6,5 cm × 0,5 km

= 3,25 km (3 × 1)

(3)

2.2 33°57'15"S 22°27'30"E (2 × 2)

(4)

2.3 165°

(2)

2.4 Given scale = 1:50 000

HD = 5,4 cm

Therefore, the ground distance = 5,4 cm × 50 000 cm

= 270 000 cm

= 2 700 m

Gradient = $\frac{VI}{HI}$

$$= \frac{941\text{ m} - 912\text{ m}}{2\,700\text{ m}}$$

$$= \frac{29\text{ m}}{2\,700\text{ m}}$$

$$= \frac{1}{93}$$

$$= 1:93$$

(5)

[14]

Question 3

3.1 Southwesterly direction. Contour lines are decreasing towards the south; river flows from steep to gradual landscape.

(2)

3.2 It is a perennial river; a straight blue line indicates a perennial river.

(2)

3.3 It has a positive impact on the land; supplies cultivated lands with water; supplies the greater George area with water for recreational purposes. (2 × 2)

(4)

- 3.4
 - 3.4.1 dam (1)
 - 3.4.2 storage of water for future use (1)
- [10]

Question 4

- 4.1 The mountains in the north east; the river; the CBD is located on gradual landscape. (2)
 - 4.2 It is surrounded by steep mountains, hills and spurs. (2)
 - 4.3
 - 4.3.1 secondary activity (2)
 - 4.3.2 flat slope type which makes it easy for the development of industrial site; due to flat slope type many other serves (2 × 2) (4)
 - 4.3.3 Road; rail; water transport (2)
 - 4.4 Air pollution from G will travel to the surrounding residential areas; and cultivated lands. (2 × 2) (4)
 - 4.5
 - 4.5.1 farming (1)
 - 4.5.2 Commercial use. Large tracts of cultivated land; close to transport routes for accessibility to markets; close to CBD (1 + 1) (2)
 - 4.6
 - 4.6.1 I. has smaller and more buildings than J. (2)
 - 4.6.2 high pollution levels; environmental degradation (2)
 - 4.7 Rows of trees are planted; cultivated land; recreational facilities, e.g. parks are erected to conserve the environment. (2)
- [25]

Question 5

- 5.1
 - 5.1.1 *Remote sensing* is the use of satellite photography to gather geographical information. (2)
 - 5.1.2 *Spatial data* is data or information that identifies the geographic location of features on Earth. (2)
 - 5.2 raster and vector (2)
 - 5.3 gradual to flat slope type (1 + 1) (2)
 - 5.4 G provides employment for the residents of the surrounding residential areas. (2)
- [10]

Total: 75 marks

3. FORMAL ASSESSMENT

1. Assessment in Geography in Grade 11	190
2. Programme of assessment	190
3. Formal assessment: tasks, tests and examinations	191
4. Recording and reporting	211
5. Photocopiable assessment resources	212



1. ASSESSMENT IN GEOGRAPHY IN GRADE 11

Assessment in Grade 11 is made up of:

- informal or daily assessment
- formal assessment.

In *Study & Master Geography Grade 11*:

- informal assessment advice is given as part of the lesson guidance in the Lesson-by-lesson section (pages 17–180) of this Teacher’s Guide
- formal assessment guidance and assessment tools are provided below.

2. PROGRAMME OF ASSESSMENT

The programme of assessment provided in *Study & Master Geography Grade 11* is in line with the Curriculum and Assessment Policy Statement for Geography and thus spreads out the formal assessment tasks throughout the year. It is made up of three tasks, two tests and two examinations. For promotion purposes, a year mark is added to the end-of-year examination mark. The year mark is made up of marks obtained in the tasks, tests and June examination. This is reflected in the table below.

Term	Week	Type of formal assessment	Content and skills focus of assessment	Learner’s Book and/or Teacher’s Guide page reference	Total number of marks	Contribution to year mark
Term 1	8	Assessment Task 1	The atmosphere	Learner’s Book pp. 74–75; Teacher’s Guide p. 191–192	30 or 40 marks	20 marks
Term 1	10	Test 1 and Test 2	The atmosphere	Teacher’s Guide pp. 213–215 and 216–217	40 or 60 marks*	10 marks
Term 2	8	Assessment Task 2	Geomorphology	Learner’s Book pp. 190–193; Teacher’s Guide pp. 197–200	20 or 30 marks	20 marks
Term 2	9–10	June examination	Work covered in Terms 1 and 2	Teacher’s Guide pp. 220–224 and 229–230	300 marks	20 marks
Term 3	7	Test 1 and Test 2	Development geography	Teacher’s Guide pp. 234–237 and 238–239	70 or 80 marks*	10 marks
Term 4	6	Assessment Task 3	Resources and sustainability	Learner’s Book pp. 394–396; Teacher’s Guide p. 206	20 or 30 marks	20 marks
Term 4	9–10	End-of-year examination	Work covered throughout year	Teacher’s Guide pp. 241–250 and 257–260	300 marks	300 marks

* depends on which of the tests provided you choose

For more information on formal assessment, see Section 4 of the CAPS document.

3. FORMAL ASSESSMENT: TASKS, TESTS AND EXAMINATIONS

Learner's Book
pages 74–75

Assessment Task 1

The atmosphere

TERM 1, WEEK 8

Geography topic: The atmosphere

Resources

Learner's Book pages 74–75 or alternative Assessment Task 1 (Teacher's Guide, page 212)

Background

- This task focuses on Module 1 of *Study & Master Geography Grade 11* and therefore should be scheduled for after the learners have completed this module. (See Year plan on pages 6–15.)
- The skills covered in this task are analysing and synthesising information from different sources and working with a variety of data.
- Allow some class time in Week 8 to go through the task with the learners. Set the task as homework for the learners.
- The task in the Learner's Book is out of 30 marks. You will need to convert this to a mark out of 20 for contribution of this assessment to the year mark. (See Recording and reporting, on page 211.)

Preparing the learners

- Remind the learners that they should work on their own and answer all questions.
- Let them read through the task and ask questions about any part of it that they do not understand.
- Remind them that they can consult Module 1 in the Learner's Book if they need to.
- Give them a due date for their completed tasks.

The task

You will find Assessment Task 1 on pages 74–75 of the Learner's Book. A marking memorandum is supplied on the next page under the heading, 'Assessment guidance'.

An alternative task is supplied on page 212 of this guide. You may photocopy this task. A marking memorandum for this task is also provided on the next page under the heading, 'Assessment guidance'.

Assessment guidance

Memorandum: Assessment Task 1

(Learner's Book, pages 74–75)

1. Intertropical Convergence Zone (1)
2. Hadley cell (1)
3.
 - Insolation is high at the ITCZ. The heat energy evaporates large amounts of water.
 - It is a low pressure belt where the trade winds converge. Air convergence helps to lift the warm, moist air and encourages convective rainfall. (2)
4. As the Earth revolves around the Sun on its tilted axis, the overhead position of the midday Sun shifts from the Tropic of Capricorn (at the December solstice) to the Tropic of Cancer (at the June solstice). The ITCZ is the thermal/heat equator, and so as the seasons change, it shifts from one hemisphere to the other. (2)
5.
 - a. Mbandaka; March and October (3)
 - b. Lusaka; January (2)
 - c. tropical moist/rainforest; high temperatures throughout the year with high rainfall (2)
 - d. wet-dry tropical/savannah; semi-dry with a short rainy season (2)
6. tropical easterlies (1)
7. The winds are deflected by the rotation of the Earth as it spins on its axis – this phenomenon is called the Coriolis effect. In the Northern hemisphere, the rotation is anti-clockwise, which deflects winds to their right. In the Southern hemisphere, the rotation is clockwise, which deflects winds to their left. (3)
8. Harmattan (1)
9. SW; monsoon (2)
10.
 - a. cT/tropical continental (1)
 - b. mT/tropical maritime (1)
11.
 - a. Sahel (1)
 - b. dry tropical/semi-arid; hot and dry with low rainfall and mild winters (2)
 - c. Any three: loss of vegetation; heat waves; dust storms; desertification/degradation of dryland; crop failure; hunger/malnutrition (3)

Total: 30 marks

Memorandum: Assessment Task 1: Alternative

(Teacher's Guide, page 212)

Activity 1

1. h
 2. e
 3. j
 4. f
 5. c
 6. a
 7. i
 8. d
 9. b
 10. g (10 × 2)
- [20]

Activity 2

The Tri-cellular circulation of the atmosphere causes planetary winds. Because of the high temperatures along the equator, hot air rises, and a low pressure develops. This causes convergence at the surface. The constantly rising air at the Equator causes wet conditions in that region.

The subtropical high pressure cells are caused by descending air from the Hadley Cell. This causes dry conditions at the surface. The sub-polar low pressure is caused by convergence and uplift. At the poles, a high pressure is caused by very low temperatures. The winds are deflected by the Coriolis force which results from the rotation of the Earth on its axis.

(10 × 2)

[20]

Total: 40 marks

Test 1: Teacher's Guide pages 213–215; Test 2: Teacher's Guide pages 216–217	Test 1 and Test 2	The atmosphere
		TERM 1, WEEK 10

Geography topic: The atmosphere

Resources

Photocopies of either Test 1 (pages 213–215) or Test 2 (pages 216–217)

Background

- These tests focus on Modules 1 and 2 of *Study & Master Geography Grade 11* and therefore should be scheduled for after the learners have completed these modules and had time to do some revision activities. (See Year plan on pages 6–15.)
- Allow between 45 minutes and 1 hour for the test you choose, depending on your learners.
- The test is out of 40 marks or 60 marks, depending on which of the tests you choose. You will need to convert this to a mark out of 10 for contribution of this assessment to the year mark. (See 'Recording and reporting' on page 211.)

Preparing the learners

- Remind the learners that they should answer all questions.

The tests

You will find two tests on 'the atmosphere' on pages 213–215 and pages 216–217 of this Teacher's Guide. You need to choose one of these for your class. You may photocopy the test. A marking memorandum for each test is supplied on the next page.

Assessment guidance

Memorandum: Test 1 on The atmosphere

(Teacher's Guide, pages 213–215)

Question 1

- 1.1.1 22 December solstice
 - 1.1.2 Hadley
 - 1.1.3 Coriolis force
 - 1.1.4 La Niña
 - 1.1.5 overgrazing (5 × 1)
- [5]

Question 2

- 2.1.1 Föhn (1)
 - 2.1.2 berg wind (1)
 - 2.1.3 The difference in air temperature is due to a difference in moisture content (1) and different adiabatic cooling (1) and adiabatic warming rates. (1) (3)
- OR
- As the moist air rises on the windward side, it cools adiabatically (1) – it loses heat as air pressure decreases. The moisture condenses over the mountain top and the air loses moisture. (1) As the warm air descends, it warms adiabatically, but at a faster rate. (1) (3)
- [5]

Question 3

- 3.1.1 a. Intertropical Convergence Zone/ITCZ/equatorial low (1)
 - b. The convergence of the trade winds helps to lift the warm, moist air and encourages the development of convective rain. (1 + 1) (2)
 - c. tropical moist climate, rainforest biome (1 + 1) (2)
 - 3.1.2 a. subtropical high (1)
 - b. air subsidence takes place here; as air descends, it warms and dries (2)
 - 3.1.3 a. The cold Benguela Current lowers sea temperatures along the Atlantic coast. Because of this, evaporation is low and the air mass over the sea holds little moisture. (1 + 1) (2)
 - b. harmattan/northeast trades/northeast tropical easterlies (1)
 - 3.1.4 Mediterranean (1)
 - 3.1.5 a. Any two: The Sahel is a sensitive/fragile area or dryland on the edge of the Sahara Desert. The Sahel has suffered a prolonged period of drought. Many people depend on the resources of the Sahel – trees are cut down for fuel. The migration routes of nomadic herders were cut off when new boundaries or territories were declared, leading to overgrazing in confined areas. (2)
 - b. Any one: South Africa's semi-arid regions are more sparsely populated. South Africa is a more developed country than Sahel countries – people are less dependent on the land for subsistence living/resources. (1)
- [15]

Question 4

4.1

4.1.1 A vertical aerial photograph (1 × 2) (2)

4.1.2 Any two: It is a highly accurate presentation of the Earth's surface. It is drawn to accurate scale. It can be used to measure distance. (2 × 2) (4)

4.2 *Oblique aerial photograph*: any one: not drawn to scale; impossible to measure accurate distance; small background features (2)

Vertical aerial photograph: relative height between features cannot be measured (2)

[10]

Question 5

5.1

5.1.1 True colour image. The actual colours displayed in reality are used on the map. (2 × 2) (4)

5.1.2 Yes, weather readings can be detected from this GIS image. (1)

[5]

Total: 40 marks

Memorandum: Test 2 on The atmosphere

(Teacher's Guide, pages 216–217)

1. Two marks each:

1.1 A

1.2 B

1.3 B

1.4 C

1.5 A

(5 × 2)

[10]

2. Two marks each:

2.1 G

2.2 D

2.3 E

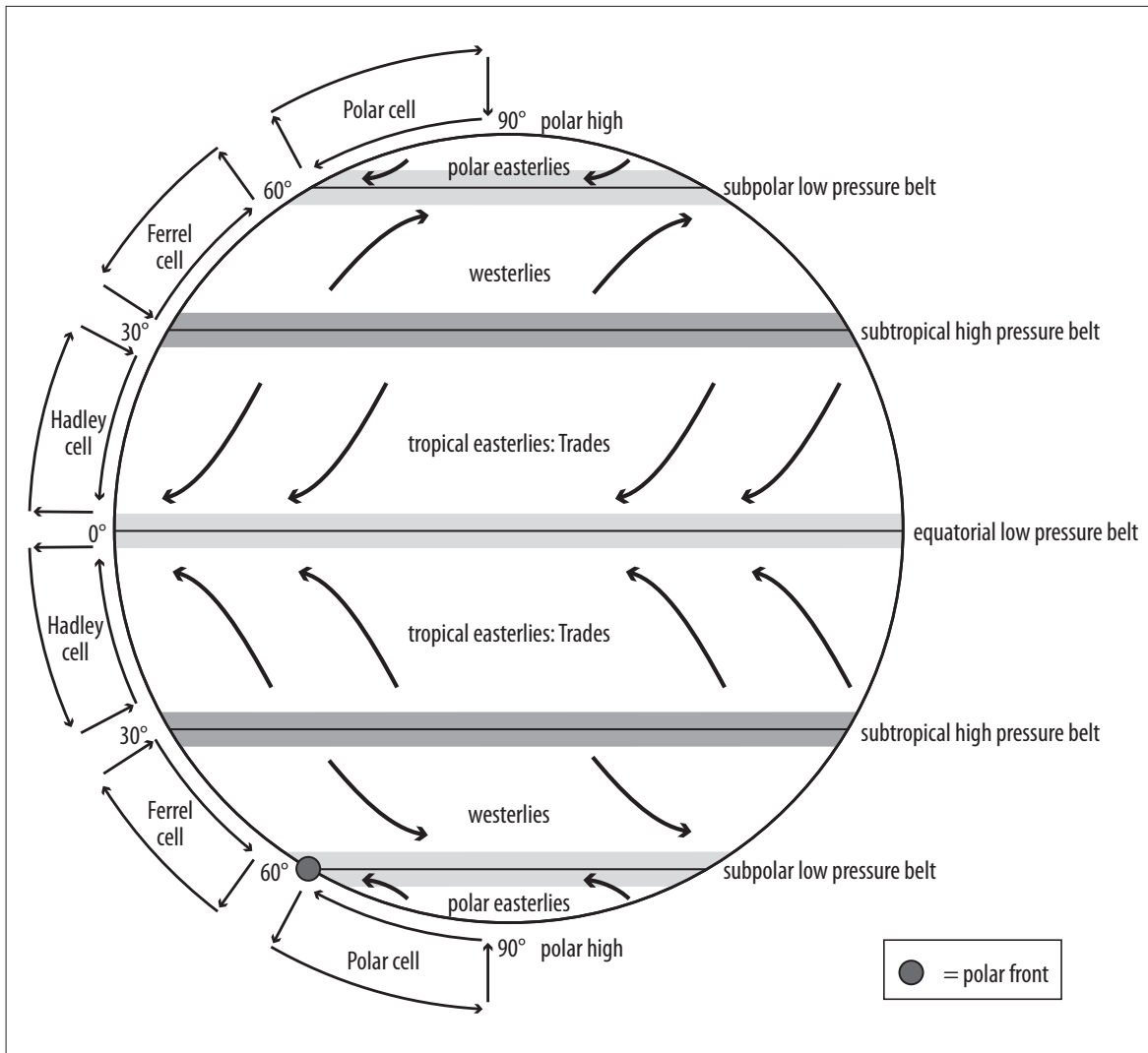
2.4 A

2.5 C

(5 × 2)

[10]

3.



- 3.1 pressure belts (4 × 2) (8)
 - 3.2 Hadley cell, Ferrel cell, polar cell (2 × 3) (6)
 - 3.3 tropical easterlies, westerlies, polar easterlies – name and direction (3 × 2) (6)
 - 3.4 polar front (1 × 2) (2)
- [22]

4.

- 4.1 The Intertropical Convergence Zone is a front where tropical air masses north and south of the equator converge. (1 × 2) (2)
- 4.2 As the seasons change during the year, the sun moves overhead between the Tropic of Capricorn and the Tropic of Cancer. This means that the pressure belts shift south or north of the equator and so does the ITCZ. (1 × 2) (2)
- 4.3 A polar front forms when warm tropical air from the mid-latitudes meets cold polar air. (1 × 2) (2)
- 4.4 A monsoon is a global prevailing wind that reverses its direction in the summer and winter seasons. In winter it blows dry air from land to sea and in summer it changes direction and blows moist air from sea to land. (3 × 2) (6)

4.5 The West African Monsoon. In January the desert air mass dominates. Winds blow northeast in cooler months, bring dry air – scorching by day and cool at night. In July, the sea air mass dominates. Winds blow southwest in warmer months, bringing moist air. (3 × 2)

(6)

[18]

Total: 60 marks

Learner's Book
pages 190–193

Assessment Task 2

Geomorphology

TERM 2, WEEK 8

Geography topic: Geomorphology (skills and techniques associated with topographic maps and orthophoto maps)

Resources

- Learner's Book pages 190–193 or Alternative Assessment Task 2 (Teacher's Guide, pages 218–219)
- Mathematical instruments

Background

- This task focuses on Modules 3 and 4 of *Study & Master Geography Grade 11* and therefore should be scheduled for after the learners have completed these modules. (See Year plan on pages 6–15.)
- The skills covered in this task are reading, analysing and interpreting maps; working with concepts, date, procedures related to GIS; and evaluating, expressing and supporting a point of view.
- Allow 1 hour of class time for the learners to begin the task. Learners who have not completed the task in class, should do so for homework.
- The task in the Learner's Book is out of 30 marks. You will need to convert this to a mark out of 20 for contribution of this assessment to the year mark. (See 'Recording and reporting' on page 211.)

Preparing the learners

- Remind the learners that they should work on their own and answer all questions.
- Let them read through the task and ask questions about any part of it that they do not understand.
- Remind them that they can consult Modules 3 and 4 in the Learner's Book if they need to.
- Give them a due date for their completed tasks.

The task

You will find Assessment Task 2 on pages 190–193 of the Learner's Book. You will find a marking memorandum is on the next page under the heading, 'Assessment guidance'.

An alternative task is supplied on pages 218–219 of this guide. You may photocopy this task. A marking memorandum for this task is also provided on the next page under the heading, 'Assessment guidance'.

Question 1

- 1.1 B
 - 1.2 C
 - 1.3 D
 - 1.4 A
 - 1.5 B
 - 1.6 A
 - 1.7 D
 - 1.8 C
 - 1.9 C
 - 1.10 A
 - 1.11 C
 - 1.12 B
 - 1.13 D
 - 1.14 B
 - 1.15 A (15 × 1)
- [15]

Question 2

- 2.1 Mass movement describes the natural process of material sliding down a slope because of gravity. (2)
 - 2.2 Any three: soil creep; solifluction; mud flow; slump; rockfall; landslide (3 × 1) (3)
 - 2.3 Mass movement can impact the environment by speeding up erosion, destroying forests and blocking rivers.
Mass movement can impact on man by destroying humanmade structures such as bridges, roads, houses. Debris has to be removed which is costly. (2 + 2) (4)
 - 2.4 Mass movements are geohazards because they are potentially dangerous and caused by the earth. (1)
 - 2.5 KZN has heavy rainfall and is a hilly environment used for human settlement. (2)
 - 2.6 Limpopo province (1)
 - 2.7 Any one: surveys to plot safe areas; proper land-use planning; strict regulation of plans (2)
- [15]

Question 3

- 3.1 Given scale: 1:50 000, HD – 1,5 cm
Therefore the ground distance = 1,5 cm × 50 000 cm = 75 000 cm = 750 m
Gradient = VI ÷ HD
= 729,2 m – 715 m ÷ 750 m
= 14,2 m ÷ 750 m
= 1 ÷ 52,8
= 1:53 (6 × 1) (6)
- 3.2 Any two: The slope is too steep for residential areas and for farming; it is a proclaimed Nature Reserve; it has exposed rock unsuitable for farming. (2 × 2) (4)
- 3.3 The water from the steep surrounding areas is flowing downhill into a more gradual landscape and the Paarl valley (see spot heights and contours from the Paarl Nature Reserve to near the Berg River);

- The Nantes Dam and the Bethel Dam store water which comes from the surrounding steep areas. (2 × 2) (4)
- 3.4 Supply water to surrounding farms and commercial and residential areas. (2)
- 3.5 Paarl is surrounded by mountains, hills and interlocking spurs. The Berg River flows through the lowest part, which is a river valley, and is surrounded by commercial and residential areas. (2 × 2) (4)
- 3.6 The railway line is using the flattest area, with little or no gradient to make building a railway difficult and expensive. (2)
- 3.7 Flooding could damage the tracks; disrupt transport. (2)
- 3.8 Any three with supporting evidence from the map: Have a picnic (along the Berg River or in the Nature Reserve); hike in the Paarlberg Nature Reserve (Nature Reserve and hiking tracks); canoe on the Berg River (see Berg River); visit Taal Monument (on Paarlberg); visit wineries (Rhebokskloof winery). (3 × 2) (6)

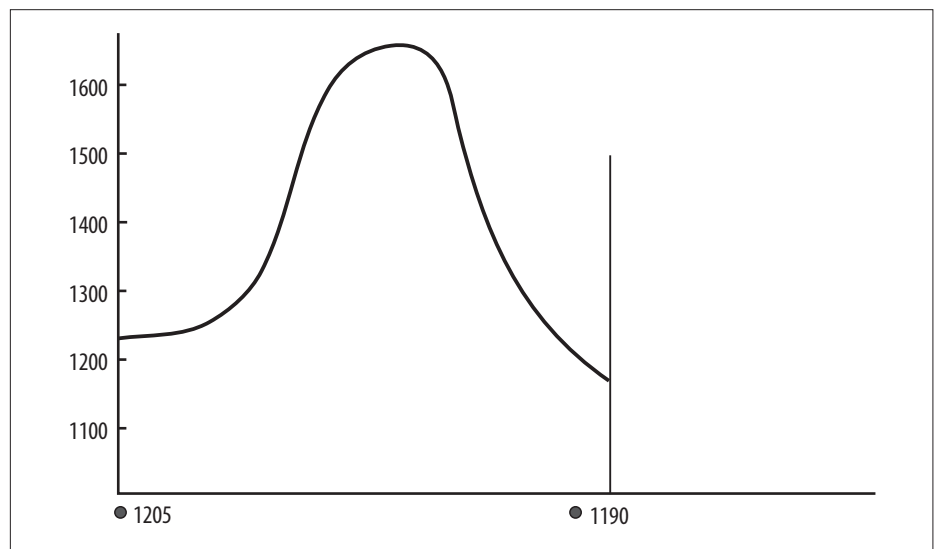
[30]

Total: 60 marks

Total: $60 \div 3 = 20$ marks

Memorandum: Assessment Task 2: Alternative (Teacher's Guide, pages 218–219)

Activity 1



[4]

Activity 2

$VE = \text{vertical scale} \div \text{horizontal scale}$

Vertical scale: = 1 cm represents 100 m
 = 1 cm represents 10 000 cm

Vertical scale = 1:10 000

Horizontal scale = 1:50 000

Vertical exaggeration: = $1:50\,000 \div 1:10\,000$
 = 5 times

[3]

Activity 3

Gradient = difference in height \div horizontal distance

$$= 1\,653,1 \text{ m} - \frac{1\,219 \text{ m}}{3,7 \text{ cm}}$$

$$= \frac{434,1 \text{ m}}{1,85 \text{ km}}$$

$$= \frac{434,1 \text{ m}}{1\,850 \text{ m}} \div \frac{434,1 \text{ m}}{434,1 \text{ m}}$$

$$= \frac{1}{4,26}$$

Answer: 1:4,26

[3]

Activity 4

4.1 conical hill/pointed butte (1)

4.2 horizontal rock strata (1)

4.3 *Crest*: convex in shape; process of soil creep occurs here.

Cliff: almost vertical 80°; hard resistant rock

Talus: angle of repose 35°; eroded material collects here

Pediment: merges with valley floor; concave in shape (4 \times 2) (8)

[10]

Total: 20 marks

Geography topics: The atmosphere, Geomorphology

(geographic knowledge, skills and techniques)

Resources

Photocopies of one of the June examinations in this Teacher's Guide (pages 220–224 and 229–231).

Background

- The June examination focuses on all material covered in Terms 1 and 2 and the questions require lower order, middle order and higher order thinking skills from the learners.
The examination is divided into two papers as follows:
 - Paper 1: focuses on geographical knowledge; all questions are compulsory; 3 hours; total mark of 225
 - Paper 2: focuses on geographical skills and techniques; all questions are compulsory; 1 hour; total mark of 75
- The June examination is out of 300 marks. You will need to convert this to a mark out of 20 for contribution of this assessment to the year mark. (See 'Recording and reporting' on page 211.)

Preparing the learners

- At the beginning of Term 2, spend some time discussing what material learners will need to cover for the examination.
- In week 4 or 5 of Term 2, spend some time discussing the format of the examination, including how much time learners will be given to complete it. You can refer to the section below, 'Background', to help you with this explanation.
- Remind the learners that they will need to revise all the work covered in Modules 1 to 4.
- Explain that the way that the examination is structured means that they will not be able to leave out any sections of work as they prepare for it.

The June examination

You will find a June examination that you could use on pages 220–224 and 229–231 of this Teacher's Guide. You may photocopy this examination.

Assessment guidance

You will find a memorandum for the June examination on pages 225–228 and 232–233 of this Teacher's Guide. You may photocopy this memorandum if you wish.

Teacher's Guide
pages 234–237 and
238–239

Tests 1 and 2

Development geography

TERM 3, WEEK 7

Geography topic: Development geography

Resources

Photocopies of either Test 1 (pages 234–237) or Test 2 (pages 238–239) of this Teacher's Guide.

Background

- This test focuses on Module 5 of *Study & Master Geography Grade 11* and therefore should be scheduled for after the learners have completed this module and had time to do some revision activities. (See Year plan on pages 6–15.)
- Allow between 45 minutes and 1 hour for the test, depending on your learners.
- The test is out of 70 marks or 80 marks, depending on which of the tests you choose. You will need to convert this to a mark out of 10 for contribution of this assessment to the year mark. (See 'Recording and reporting' on page 211.)

Preparing the learners

- Remind the learners that they should answer all questions.

The tests

You will find two tests on Development Geography on pages 234–237 and 238–239 of this Teacher’s Guide. You need to choose one of these for your class. You may photocopy the test. A marking memorandum for each test is supplied below.

Assessment guidance

Memorandum: Test 1 on Development Geography (Teacher’s Guide, pages 234–237)

1.
 - 1.1 B
 - 1.2 C
 - 1.3 B
 - 1.4 C
 - 1.5 C

(5 × 1)
[5]

2.
 - 2.1 D
 - 2.2 E
 - 2.3 B
 - 2.4 A
 - 2.5 C

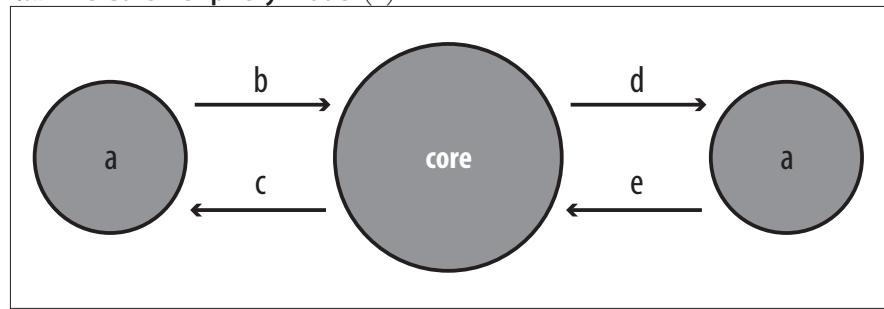
(5 × 1)
[5]

3.
 - 3.1 A *Balance of Trade* is the balance between the monetary value of exports and imports; an example would be when the money gained from oil exports balances the costs of importing other goods. (2)
 - 3.2 *Overpopulation* happens if the resources of a country are not able to meet the needs of all the people. An example would be Mali, a sub-Saharan country in Africa, where the resources are insufficient for the number of people living there. (2)
 - 3.3 A *free market* economy is one where there is the minimum of control and regulation from the government; buyers and sellers can set their market price. An example would be South Africa. (2)
 - 3.4 The *quinary sector* refers to Clarke’s Sector Model: it categorises all non-profit activities such as activities by an organisation like Médecins Sans Frontières. (2)
 - 3.5 The *take-off stage* is the third stage in Rostows’ Stages of Development, when a country moves out of traditional and into modern economic ways. An example of this would be some of the sub-Saharan African countries such as Niger, Mali and Uganda. (2)

[10]

4.

4.1 The Core-Periphery model (2)



- a. periphery (1)
- b. spread effect (1)
- c. trickle-down effect (1)
- d. trickle-up effect (1)
- e. backwash effect (1) (7)

4.2 Sustainable Development model (1)

- a. environment (1)
 - b. society (1) (3)
- [10]

5.

- 5.1 the needs, skills, abilities and resources of the community as a participatory approach to development (2)
 - 5.2 Khanya-AICDD (2)
 - 5.3 birth of the 7 billionth person (2)
 - 5.4 meets the needs of the present without compromising the ability of future generations to meet their own needs (2)
 - 5.5 it is viewed as neo-colonialist. It maintains the wealth of the developed nations while placing constraints on the needs of developing nations to exploit their resources. (2)
- [10]

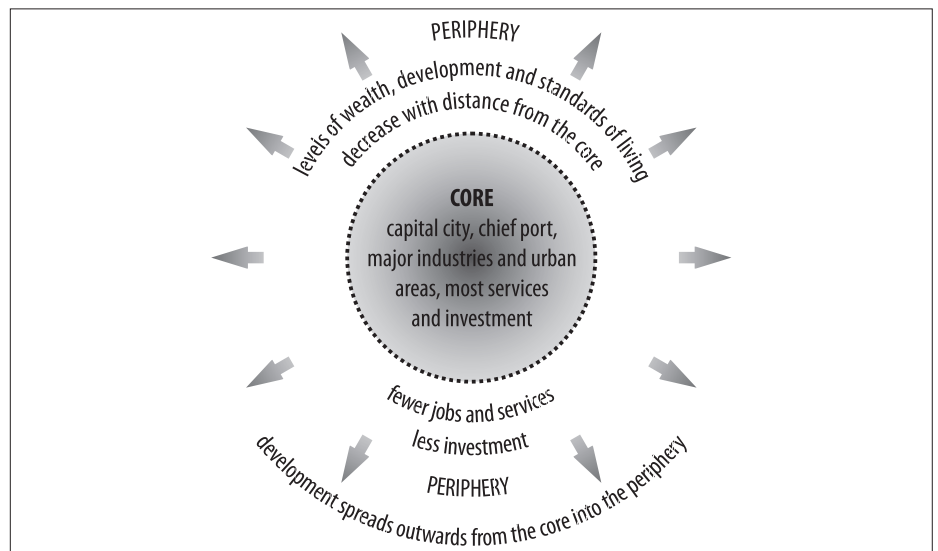
6.

- 6.1 The rainforest is destroyed through cutting and burning; water supplies are contaminated; the ecology and habitat of flora and fauna are destroyed; atmospheric pollutants affect the local and distant environments. (4)
- 6.2 If the price of the single commodity drops, the country that relies on that commodity will suffer economically. If an alternative product is created through technology, then the country no longer only sells its single commodity that it has relied on. If the country relies on a single commodity, it is often at the expense of other developments which could be taking place to spread the risks. (2)
- 6.3 a. Oil is a scarce resource which is in great demand. Export of this product brings in a lot of revenue to a country which can have a positive effect on the balance of trade because the revenue may be equal to the imports the country needs. (2)
- b. If there is a downturn in the demand for oil or a drop in oil prices, the revenue coming into the country drops. If oil is the chief commodity exported, then the country will not receive anticipated revenue, and be unable to pay for the imports it needs, causing an imbalance in trade. (2)

- 6.4 A corrupt government keeps the revenue from the oil. The benefits are not filtered down into the infrastructure to help the people. The people suffer because their land and way of life is destroyed, and they see none of the benefits of the oil extraction. (3)
- 6.5 A solution could be for the oil companies to insist on payment in kind, e.g. instead of revenue, building and stocking of schools and hospitals, roads and housing. (2)
- [15]
- 7.
- 7.1 USA; United Arab Emirates; Saudi Arabia; Kuwait (3)
- 7.2 2000 and 2010 (2)
- 7.3 USA (1)
- 7.4 Initially, there was a disruption in aid to Pakistan; then aid was increased to more than ever before. (2)
- 7.5 The USA needed to have Pakistan as an ally in its war on terror; it did not want Pakistan to harbour terrorists. (1)
- 7.6 bilateral aid, or 'tied' aid or conditional aid (1)
- 7.7 If no information is received, the graph loses accuracy. One does not know if the trend was either upwards or downwards, or which country may have increased or decreased its aid. (2)
- 7.8 a pie graph or a compound bar graph or a histogram (2)
- 7.9 OPEC member states are predominantly Arab or Muslim. Pakistan is a Muslim country. (1)
- [15]
- Total: 70 marks**

Memorandum: Test 2 on Development geography (Teacher's Guide, pages 238–239)

- 1.
- 1.1 the value of all goods and services produced in a country in a year (2)
- 1.2 percentage of total population over 15 years that can read and write (2)
- 1.3 the Human Development Index is an indicator of human development (2)
- 1.4 the average number of years a person can expect to live (2)
- 1.5 number of babies born per 1 000 of the population (2)
- [10]
- 2.
- 2.1 USA, because of advanced industrial and technological development (3 × 2) (6)
- 2.2 Kenya, because of lack of resources and access to hospitals is limited (3 × 2) (6)
- 2.3 Kenya, and South Africa. Children in rural areas often can't get to school or parents can't afford to send them to school. (3 × 2) (6)
- 2.4 life expectancy, level of education, GDP per capita (3 × 1) (3)
- 2.5 USA – life expectancy, literacy and GDP per capita are all high, which means the quality of life in USA is excellent. (2)
- Kenya – life expectancy and GDP per capita are really low so the quality of life in Kenya is not as good as USA. (2)
- South Africa – life expectancy and GDP per capita is better than Kenya, so quality of life is better than in Kenya. (2) (6)
- 2.6 USA – developed; Kenya – developing; South Africa – developed and developing (3 × 1) (3)
- [30]



(6)

3.2 South Africa has four core industrial regions which form its economic hub and our rural areas are far less developed in terms of jobs, services and investment. (2 × 2)

(4)

[10]

4.

4.1 subsistence farmers in rural areas (1 × 2)

(2)

4.2 Any four: They need financial capital through loans, credit; They need natural capital – resources such as soil and water; Human capital – skills education knowledge and labour; Physical capital – transport, shelter, water, farming equipment; Social capital – membership of groups, institutions, co-operatives. (4 × 2)

(8)

4.3 The emphasis is on human well-being, justice, human rights and environmental sustainability. Development is meeting people's basic needs (water, sanitation, food and homes) and reducing poverty. (2 × 2)

(4)

[14]

5. Globalisation is a term used to describe a world which is becoming more and more inter-connected. Companies co-operate with one another across borders to minimise costs and maximise profits. Global or multinational companies may have their head office in one country but their factories are in several other countries. Many governments offer incentives to encourage multinational companies to set up in their countries. These companies can have a large influence on the economies of less-developed countries in terms of employment, boosting exports and bringing in foreign currency. (5 × 2)

[10]

6. Any three: eradicate extreme poverty and hunger; achieve universal primary education; promote gender equality and empower woman; reduce child mortality; improve maternal health; combat HIV/AIDS, malaria and other diseases; ensure environmental sustainability; to develop a global partnership for development. (3 × 2)

[6]

Total: 80 marks

Geography topic: Resources and sustainability

Resources

- Learner's Book pages 394–396 or alternative Assessment Task 3 (Teacher's Guide, page 240)
- Drawing instruments

Background

- This task focuses on Module 7 of *Study & Master Geography Grade 11* and therefore should be scheduled for after the learners have completed this module. (See Year plan on pages 6–15.)
- The skills covered in this task are making sketches, labelling diagrams, working with concepts and, evaluating arguments and expressing and supporting a point of view.
- Allow 1 hour of class time for the learners to begin the task. Learners who have not completed the task in class should do so for homework.
- The task in the Learner's Book is out of 30 marks. You will need to convert this to a mark out of 20 for contribution of this assessment to the year mark. (See 'Recording and reporting' on page 211.)

Preparing the learners

- Remind the learners that they should work on their own and answer all questions.
- Let them read through the task and ask questions about any part of it that they do not understand.
- Remind them that they can consult Module 7 in the Learner's Book if they need to.
- Give them a due date for their completed tasks.

The task

You will find Assessment Task 3 on pages 394–396 of the Learner's Book. A marking memorandum is supplied on the next page under the heading, 'Assessment guidance'.

An alternative task is supplied on page 240 of this guide. You may photocopy this task. A marking memorandum for this task is also provided on page 208.

Assessment guidance

Memorandum: Assessment Task 3

(Learner's Book, pages 394–396)

Question 1

- 1.1 F
- 1.2 T
- 1.3 F
- 1.4 F
- 1.5 T
- 1.6 F
- 1.7 T
- 1.8 F
- 1.9 T
- 1.10 F

(10 × 1)
[10]

Question 2

2.1

2.2.1 rain washes away the top layer of soil; heavy rain causes the topsoil to splatter in all directions, hastening wash away

2.2.2 running water removes the top surface of the soil; cuts rills and eventually gullies or dongas in the earth by its powerful action (2 + 2)

(4)

2.2 Man can plant trees in a line perpendicular to the prevailing wind direction

(2)

2.3 Any two: Wetlands act as sponges; they absorb excess rain water and run-off; they act as a habitat of birds, insects and animals. (2 + 2)

(4)

[10]

Question 3

3.1 Any two: hydro-electricity; gas; solar power; wind power

(2)

3.2 Any two: Limpopo; KZN; Free State

(2)

3.3 underground mining

(1)

3.4 Any two: degradation of the environment; ugly buildings; dust and pollution; nitrous and sulphur oxides in the air

(2)

3.5 Any two: overburden; solid rocks; ash; dust

(2)

3.6 Any two: carbon dioxide; nitrous oxide; sulphur oxide

(2)

3.7 acid rain

(1)

3.8 fission

(1)

3.9 Any one: nuclear contamination; radioactive leakages

(1)

3.10 Vaalputs

(1)

3.11 Any one: Japan (Fukushima); USA (Long Island)

(1)

3.12 Any two: wind power; solar power; hydro-electric power

(2)

3.13 Mozambique and Lesotho

(2)

[20]

Question 4

4.1 Any two:

	Advantages of nuclear power	Disadvantages of nuclear power
1	Clean	Has potential life-threatening hazards
2	Less stock piling	Expensive to start up
3	Less impact on environment	Needs safety procedures for storing old waste

(2 × 2)

(4)

- 4.2 No. Due to South Africa mainly using conventional sources of energy and its demand for energy rapidly increasing due to an increase in population and economic growth rate, conventional sources of energy (which are mainly non-renewable energy resources) are being used up faster than they can be replaced and will eventually become depleted if not used sparingly. (2 + (1 × 2)) (4)
- 4.3 The impact of opencast mining on the environment is great. Huge areas are stripped of their natural cover; grasslands are eradicated, or forests. The natural habitat of insects, birds, and small animals is destroyed. Pollution in the form of noise, air, visual pollution and pollution to the underground and freshwater supplies occur. When mining is underground, the equipment and dumps are above the ground, creating the same visual, air, water and noise pollution. (2 + (2 × 2)) (6)
- 4.4
- 4.4.1 *Energy management* refers to the measures planned and implemented to regulate the type of energy used and the amount of energy used. (2)
- 4.4.2 *A sustainable lifestyle* meets the needs of the present without compromising the ability of future generations to meet their own needs. (2)
- 4.4.3 *A green economy* fosters and implements sustainable development and economic growth. It can generate growth and improvements in people's lives in ways consistent with sustainable development. (2)
- [20]

Total: $60 \div 3 = 20$ marks

Total: 60 marks

Memorandum: Assessment Task 3: Alternative

(Teacher's Guide, page 240)

Activity 1

One mark each.

1. C horizon
 2. B horizon
 3. leaching
 4. bacteria
 5. humus
 6. salination
 7. parent rock
 8. solum
 9. soil profile
 10. horizons (10 × 1)
- [10]

Activity 2

1. *Climate*: Rainfall, temperature and wind all affect soil formation. The higher the rainfall the more leaching occurs. High temperatures promote chemical reactions such as decomposition and weathering. In dry regions salination occurs. In cold regions the rate of decomposition slows down. Wind increases the rate of evaporation and the removal of topsoil. Rainfall determines the types of plants that grow in an area which determines the type of humus in the soil. (2)
2. *Parent rock*: The parent rock determines the mineral composition, texture and rate of weathering of the soil that develops from it. (2)

3. *Time*: Soil formation is a slow process. A soil with a thickness of 1 cm can take up to 400 years to form. Mature soils have several horizons and are found in old landscapes. Immature soils have few horizons and are formed from river deposits and debris from glaciers. (2)
4. *Relief*: The soil on steep slopes is shallow because weathering and erosion carries it downslope. Gentle slopes usually have deep well-drained soil. Low-lying areas have poorly-drained dark soil because most of the organic material has been deposited there. (2)
5. *Organisms*: Bacteria and fungi break down dead organic matter and in so doing return nutrients to the soil. Insects, rodents and earthworms aerate the soil and create channels through which water can move. Burrowing animals cause a change in the horizons. (2)

[10]

Total: 20 marks

Geography topics: The atmosphere, Geomorphology, Development geography, Resources and sustainability (geographic knowledge, skills and techniques)

Resources

Photocopies of one of the end-of-year examinations in this Teacher's Guide (pages 241–250 and 257–260)

Background

- The end-of-year examination focuses on all material covered in the year and the questions require lower order, middle order and higher order thinking skills from the learners. The examination is divided into two papers as follows:
 - Paper 1: focuses on geographical knowledge; all questions are compulsory; 3 hours; total of 225 marks
 - Paper 2: focuses on geographical skills and techniques; all questions are compulsory; 1 hour; total of 75 marks
- The end-of-year examination is out of 300 marks. The year mark is added to this to create a final mark for Geography for promotion purposes. (See 'Recording and reporting' on page 211.)

Preparing the learners

- At the beginning of Term 4, spend some time discussing with the learners what material they will need to cover for the examination.
- In week 4 or 5 of Term 4, spend some time discussing the format of the examination, including how much time learners will be given to complete it. Refer to the notes under 'Background' (above) to help you with this explanation. Refer the learners to page 414 of the Learner's Book where this information appears.
- Remind the learners that they will need to revise all the work covered during the year.
- Explain that the way that the examination is structured means that they will not be able to leave out any sections of work as they prepare for it.

The end-of-year examination

You will find an end-of-year examination that you could use on pages 241–250 and 257–260 of this Teacher's Guide. You may photocopy this examination.

Assessment guidance

You will find a memorandum for the end-of-year examination on pages 251–256 and 261–262 of this Teacher's Guide. You may photocopy this memorandum if you wish.

4. RECORDING AND REPORTING

The results of all formal assessments should be recorded and are used for reporting on learners' performance each term. The Programme of Assessment (Teacher's Guide page 190) details how the learner's Geography mark for each term is arrived at.

The following photocopiable assessment recording tools are provided on pages 263–266 of this Teacher's Guide:

- Record sheet for formal assessment: Term 1
- Record sheet for formal assessment: Term 2
- Record sheet for formal assessment: Term 3
- Record sheet for formal assessment: Term 4

The following rating codes and descriptors should be used for reporting on the learners' progress in Geography:

Rating Code	Description of competence	Percentage
7	Outstanding achievement	80–100
6	Meritorious achievement	70–79
5	Substantial achievement	60–69
4	Adequate achievement	50–59
3	Moderate achievement	40–49
2	Elementary achievement	30–39
1	Not achieved	0–29

5. PHOTOCOPIABLE ASSESSMENT RESOURCES

Memorandum,
Teacher's Guide
page 192

Assessment Task 1: Alternative

The atmosphere

TOTAL: 40 MARKS

Activity 1

Match the correct term with the definition.

GEOGRAPHICAL TERM		DEFINITION	
1.	Pressure gradient	a.	The process in which air gains heat as it is compressed.
2.	Intertropical Convergence Zone	b.	Boundary between two different air masses.
3.	Coriolis effect	c.	A wind balanced by the pressure gradient and Coriolis forces.
4.	Hadley cell	d.	A wind system that reverses direction with the seasons.
5.	Geostrophic wind	e.	Belt of low pressure around the equator.
6.	Adiabatic warming	f.	Tropical air mass convection cell.
7.	Ferrel cell	g.	High-speed, high-altitude wind.
8.	Monsoon	h.	The change in pressure over a given distance.
9.	Front	i.	Polar air mass convection cell.
10.	Jet stream	j.	Deflection of the winds caused by the rotation of the Earth.

(10 × 2)
[20]

Activity 2

Choose the correct term from those in brackets. Underline it.

The Tri-cellular circulation of the atmosphere causes (local/planetary) winds. Because of the high temperatures along the equator, hot air rises, and a (low/high) pressure develops. This causes (divergence/convergence) at the surface. The constantly rising air at the Equator causes (wet/dry) conditions in that region.

The subtropical high pressure cells are caused by (descending/ascending) air from the Hadley cell. This causes dry conditions at the surface. The sub-polar low pressure is caused by (high temperatures/convergence and uplift). At the poles, a high pressure is caused by (very high/very low) temperatures. The winds are deflected by the (Coriolis force/Pressure gradient) which results from (the revolution of the earth around the sun/the rotation of the Earth on its axis).

(10 × 2)
[20]

© You may photocopy this page for use with *Study & Master Geography Grade 11*.

Answer all the questions.

Question 1

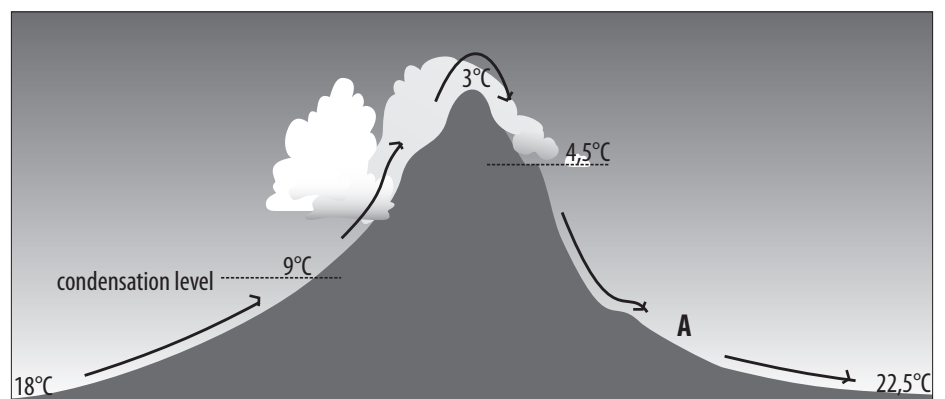
1.1 Select the correct word or term from the brackets for each of these statements.

- 1.1.1 Maximum insolation in Southern Africa is at the time of the (22 December solstice/ 22 September equinox).
- 1.1.2 The ITCZ is the boundary between (Ferrel/Hadley) air circulation cells.
- 1.1.3 Wind is deflected by the (pressure gradient force/ Coriolis force).
- 1.1.4 Wetter than normal conditions in South Africa in summer are caused by (El Niño/ La Niña).
- 1.1.5 The damage to vegetation caused by livestock animals is called (overgrazing/ deforestation). (5 × 1)

[5]

Question 2

2.1 Look at the diagram below and answer the questions.

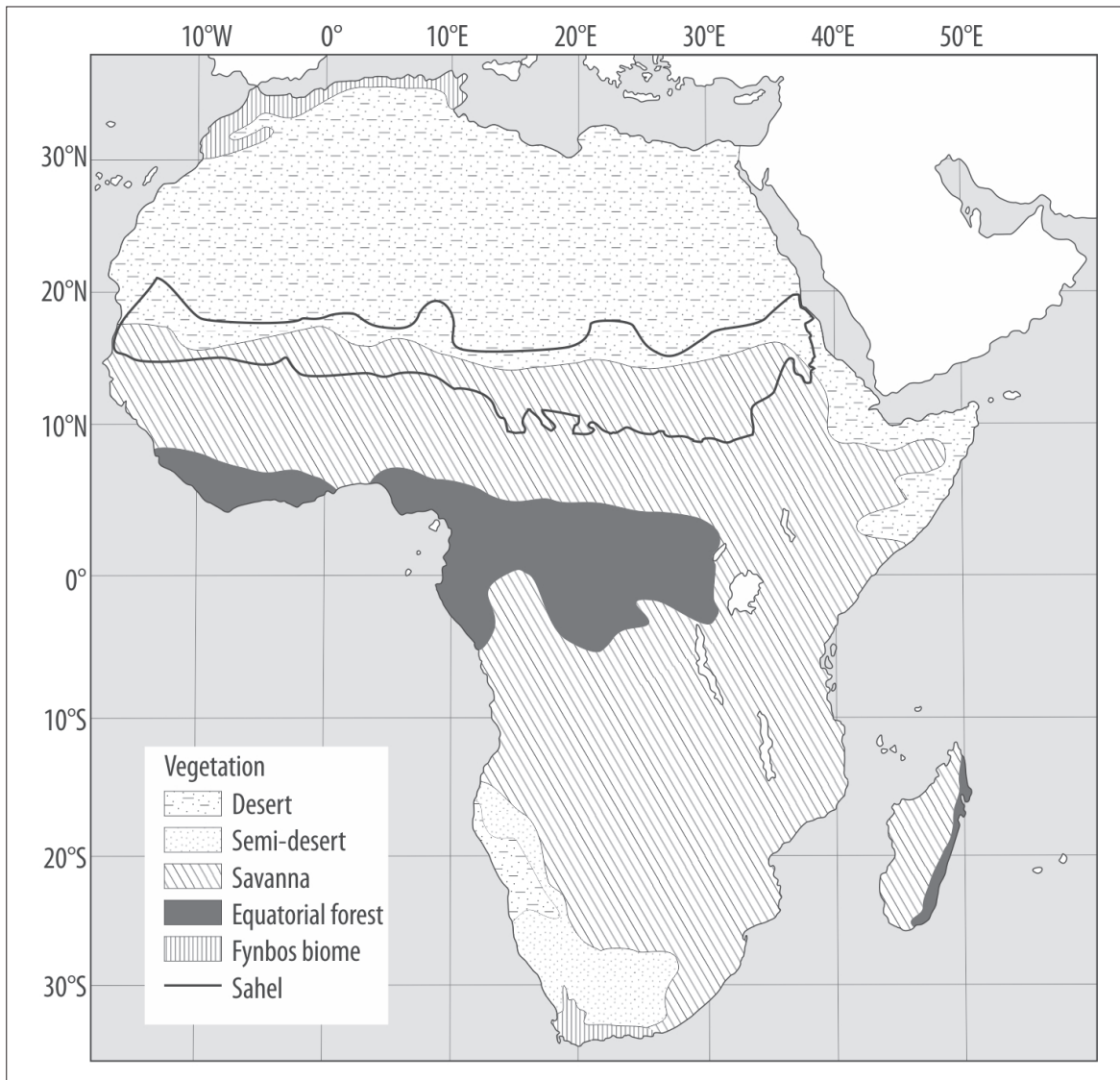


- 2.1.1 Name the wind labelled A. (1)
- 2.1.2 Give the South African name for a similar wind. (1)
- 2.1.3 Explain why the air temperature is 18°C on the windward side and 22,5°C on the leeward side. (3)

[5]

Question 3

3.1 Look at the map of Africa below and refer to the key.
The vegetation patterns correlate with rainfall.



- 3.1.1 a. Name the pressure belt at the equator. (1)
- b. Explain why rainfall is high here. (2)
- c. Name the climate region and biome that dominates the equator. (2)
- 3.1.2 a. Name the pressure belt between 20° and 30° N and S. (1)
- b. Explain why rainfall is low here. (2)
- 3.1.3 a. Explain why the western half of Southern Africa is drier than the eastern half. (2)
- b. Name the hot dry wind that blows across the North Africa. (1)
- 3.1.4 Name the climate/biome at the northern-most and southern-most tips of Africa. (1)
- 3.1.5 a. Explain why the Sahel is threatened with desertification. (2)
- b. Give one reason why desertification isn't as big a problem in South Africa. (1)

[15]

Question 4

4.1 Refer to Figure 2.1.3 on page 78 in the Learner's Book and answer the questions.

4.1.1 What type of photograph is this? (2)

4.1.2 Name two positive aspects of this type of photograph. (4)

4.2 Identify the disadvantages of an oblique aerial photograph and a vertical aerial photograph. (4)

[10]

Question 5

5.1 Refer to Figure 2.2.9 on page 95 in the Learner's Book and answer the questions.

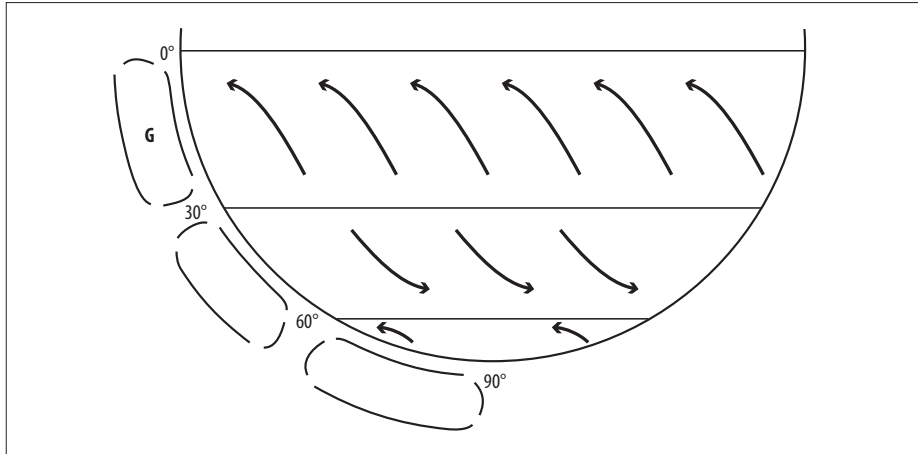
5.1.1 Is this a true or false colour image? Justify your answer. (4)

5.1.2 Is it an effective image? Justify your answer. (1)

[5]

Total: 40 marks

1. Refer to the diagram below and then choose one of the four options provided below to complete each statement. Write only the letter next to each question number.



- 1.1 Identify the cell labelled G, which occurs between 0° – 30° North and South of the equator.
- A Hadley
 - B Ferrell
 - C polar
 - D equatorial
- 1.2 The area near the equator where the winds converge is the ...
- A polar front
 - B Intertropical Convergence Zone
 - C subtropical high pressure belt
 - D sub-polar low pressure belt
- 1.3 South Africa lies in the following pressure belt:
- A Equatorial Low Pressure Belt
 - B Subtropical High Pressure Belt
 - C Tropical Low Pressure Belt
 - D Polar High Pressure Belt
- 1.4 Air rises at the equator and sinks at the poles due to ...
- A divergence at the equator and convergence at the poles
 - B divergence at the poles and convergence at the equator
 - C surplus heat at the equator and heat deficit at the poles
 - D surplus heat at the poles and heat deficit at the equator
- 1.5 A force that influences the speed of winds is called the ...
- A pressure gradient force
 - B Coriolis force
 - C geostrophic force
 - D primary force

(5 × 2)

[10]

2. Match the geographical terms in column A with the definitions in column B.

COLUMN A		COLUMN B	
2.1	Geostrophic wind	A.	A wind system that reverses direction with the seasons
2.2	Pressure gradient	B.	The process in which air gains heat as it is compressed.
2.3	Adiabatic cooling	C.	High speed, high altitude wind
2.4	Monsoon	D.	The change in pressure over a given distance
2.5	Jet stream	E.	The process in which air loses heat as it expands
		F.	Dry, dusty West Africa trade wind
		G.	A wind balanced by the pressure gradient and Coriolis force

(5 × 2)

[10]

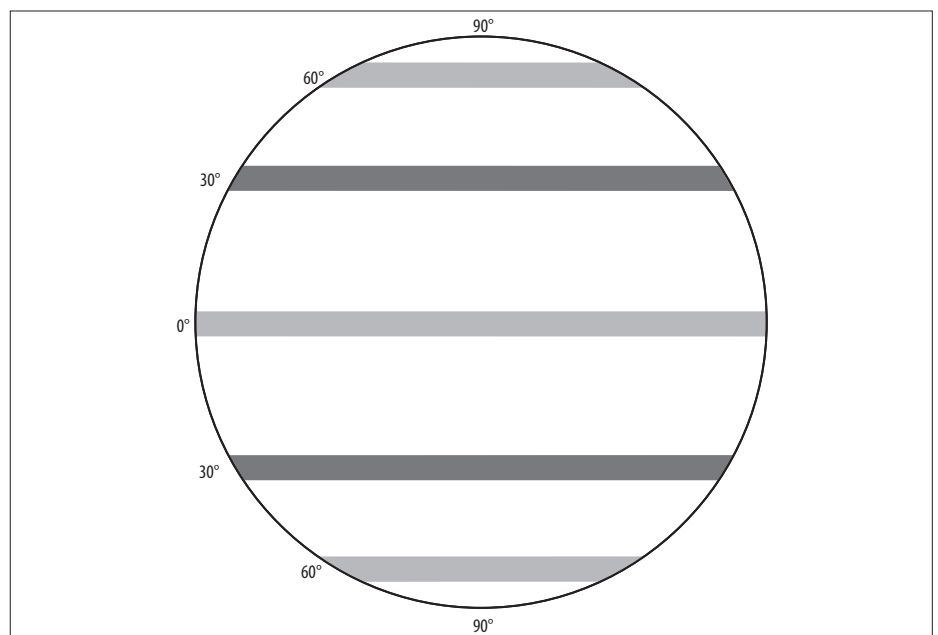
3. On the diagram of the primary circulation of the atmosphere, complete the following:

3.1 Label the four pressure belts. (4 × 2) (8)

3.2 Draw in the air circulation and label the Hadley cell, Ferrell cell and polar cell. (3 × 2) (6)

3.3 Indicate the name and wind direction of the tropical easterlies, westerlies and polar easterlies. (3 × 2) (6)

3.4 Indicate the polar front. (1 × 2) (2)



[22]

4.

4.1 What is the Intertropical Convergence Zone and how does it form? (1 × 2) (2)

4.2 What causes the ITCZ to shift North and South of the equator? (1 × 2) (2)

4.3 How is the polar front formed? (1 × 2) (2)

4.4 Describe the difference between a summer and winter monsoon. (3 × 2) (6)

4.5 Give the name of the monsoon and describe how it plays an important role in the climate of North West Africa. (3 × 2) (6)

[18]

Total: 60 marks

Use the 1:50 000 topographical map of Tafelberg 3125CA on page 219 to complete the following activities.

Activity 1

Draw a cross-section from spot height 1205 (block F2) to spot height 1190 (block E5). Use a vertical scale of 1 cm to represent 100 m.

[4]

Activity 2

Calculate the vertical exaggeration of the cross-section.

[3]

Activity 3

Calculate the gradient between trig. beacon 65 and spot height 1219.

[3]

Activity 4

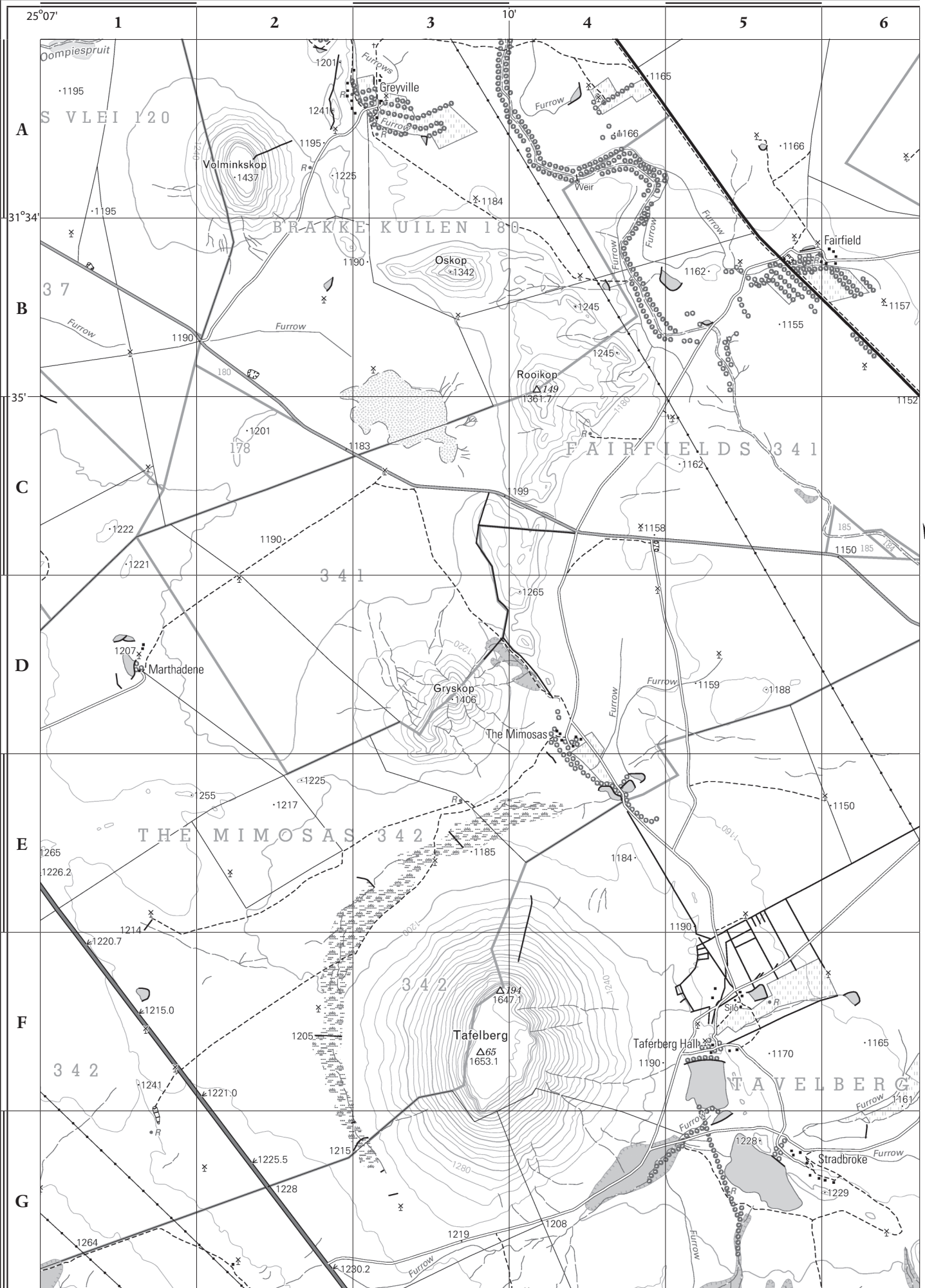
4.1 Identify the landform you have drawn in the cross-section. (1)

4.2 Name the geological rock structure associated with this landform. (1)

4.3 From your cross-section, identify four different slope elements and give one characteristic of each one. (4 × 2) (8)

[10]

Total: 20 marks



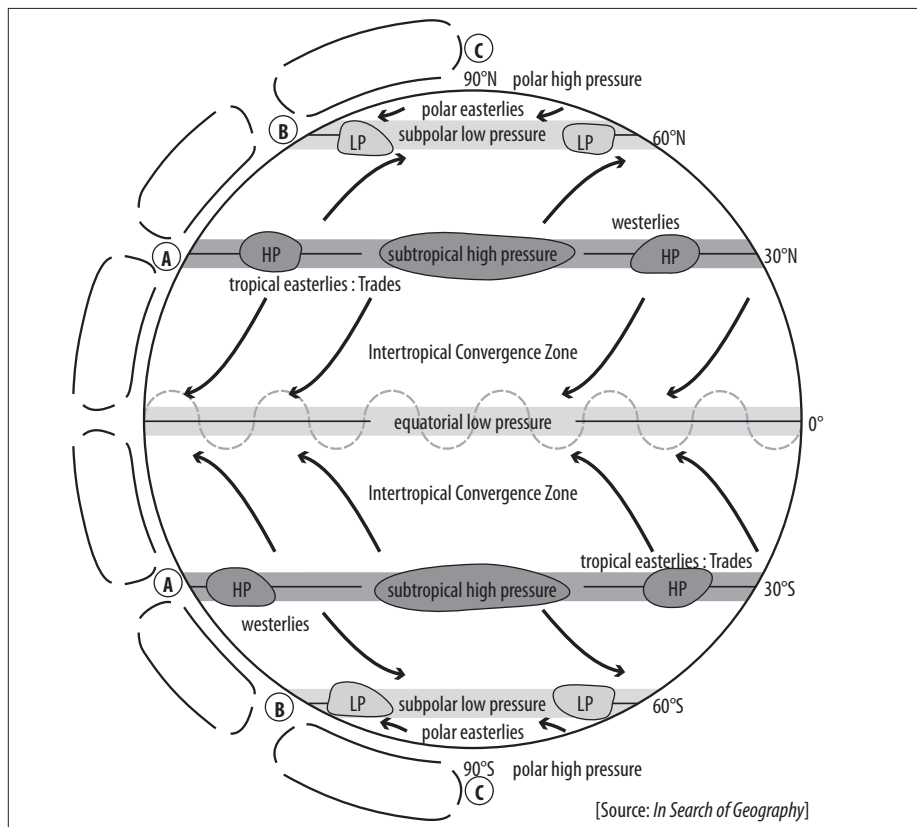
© You may photocopy this page for use with Study & Master Geography Grade 11.

Answer all questions in Section A and B.

Section A: The atmosphere (115 marks)

Question 1

1.1 Referring to the tri-cellular model of the circulation of the atmosphere, choose the correct term in brackets. Write down only the correct word next to each letter.



The tri-cellular circulation of the atmosphere causes (a. local/planetary) winds. Because of the high temperatures along the equator (b. high/low) pressure develops and air rises. This causes (c. convergence/divergence) at the surface. The constantly rising air along the equator causes (d. wet/dry) conditions in that region.

At (A) subtropical high pressure cells are caused by (e. descending/ascending) air at the Hadley cell. This causes (f. wet/dry) conditions at the surface. At (B) the sub-polar low pressure is caused by (g. high temperatures/convergence and uplift). At (C) the high pressure is caused by (h. very cold temperatures/high temperatures).

The winds shown in the diagram are deflected by the (i. Coriolis effect/pressure gradient force) which results from (j. the revolution of the Earth around the Sun/the rotation of the Earth on its own axis).

(10 × 2)
[20]

Question 2

- 2.1 With the aid of a diagram explain why temperatures are higher at the equator than at the poles. (4 × 2) (8)
- 2.2 List two other factors which affect the difference in temperature on the Earth. (2 × 1) (2)
- 2.3 The effect of the Earth's tilt means that one hemisphere is more exposed to the sun than the other:
- a. At the time of the solstices the Sun is overhead which lines of latitude? (2 × 2) (4)
 - b. At the time of the equinox the Sun is overhead which line of latitude? (1 × 2) (2)
 - c. Which area in the Southern hemisphere receives 24 hours of sunlight in summer? (1 × 2) (2)
 - d. Which two places on Earth only have a winter and a summer season? (2 × 2) (4)
 - e. In South Africa, what is the date of the summer solstice? (1 × 2) (2)
- 2.4 Although Durban and Lüderitz lie on the same line of latitude, Durban's temperatures are significantly higher than Lüderitz. Give a reason for this. (2 × 2) (4)
- [28]

Question 3

- 3.1 Define the following terms:
- a. pressure gradient
 - b. geostrophic wind
 - c. atmospheric pressure (3 × 2) (6)
- 3.2 Describe the relationship between temperature, air pressure and wind. (3 × 2) (6)
- 3.3 What is the Intertropical Convergence Zone? (1 × 2) (2)
- 3.4 Explain why the ITCZ shifts with the seasons. (4 × 2) (8)
- 3.5 What is the difference between a continental and maritime air mass? (2 × 2) (4)
- 3.6 Over Africa which two air masses converge at the ITCZ? (2 × 2) (4)
- [30]

Question 4

- 4.1 What is the difference between weather and climate? (2 × 2) (4)
- 4.2 Name and describe the three climatic regions of Africa. (3 × 2) (6)
- 4.3 In what way is air subsidence and convergence linked to rainfall in Africa? (2 × 2) (4)
- 4.4 What is El Niño and how does it affect Africa's climate? (2 × 4) (8)
- [22]

Question 5

- 5.1 Define the following terms:
- a. drought
 - b. desertification (2 × 1) (2)
- 5.2 Discuss the risk of desertification on the Succulent Karoo and Nama Karoo. (4 × 2) (8)
- 5.3 Discuss the impact of drought and desertification on the environment. (5 × 1) (5)
- [15]

Total: 115 marks

Section B: Geomorphology (110 marks)

Question 6

6.1 Match the concepts in Column A with the definition in Column B. Write down the number and the letter.

COLUMN A		COLUMN B	
6.1.1	Batholith	a.	Associated with inclined rock strata where the angle of the dip and the horizontal is greater than 45°
6.1.2	Cuesta	b.	Associated with horizontal rock strata where the height of the landform is greater than the width
6.1.3	Mesa	c.	Associated with massive igneous rock where magma material has solidified beneath the Earth's surface
6.1.4	Homoclinal ridge	d.	Consists of corestones – one on top of the other
6.1.5	Butte	e.	Associated with inclined rock strata where the height of the landform is smaller than the width
6.1.6	Tors	f.	Associated with inclined rock strata where the angle between the dip and the horizontal is between 25° and 45°
6.1.7	Conical hill	g.	A deep steep sided valley caused by downward erosion of running water
6.1.8	Canyon	h.	Associated with inclined rock strata where the angle of the dip and horizontal is below 25°
6.1.9	Hogsback	i.	Mushroom-shaped magma intrusion; associated with massive igneous rock
6.1.10	Laccolith	j.	The result of a the hard resistant layer of a butte being eroded away

(10 × 2)

[20]

6.2 Indicate whether each of the following sentences is True or False.

- Sedimentary rock is massive igneous rock.
- Granite is massive igneous rock.
- Inclined rock strata is caused by compressional forces on horizontal rock strata.
- Soil creep is a type of mass movement.
- Paarl Rock is an example of a laccolith.

(5 × 2)

[10]

Question 7

7.1 Identify the landform A in the photograph below. (1 × 2)

(2)



7.2 Describe the formation of this landform with regards to scarp retreat. (4 × 2)

(8)

7.3 Name two canyons worldwide. (2 × 2)

(4)

[14]

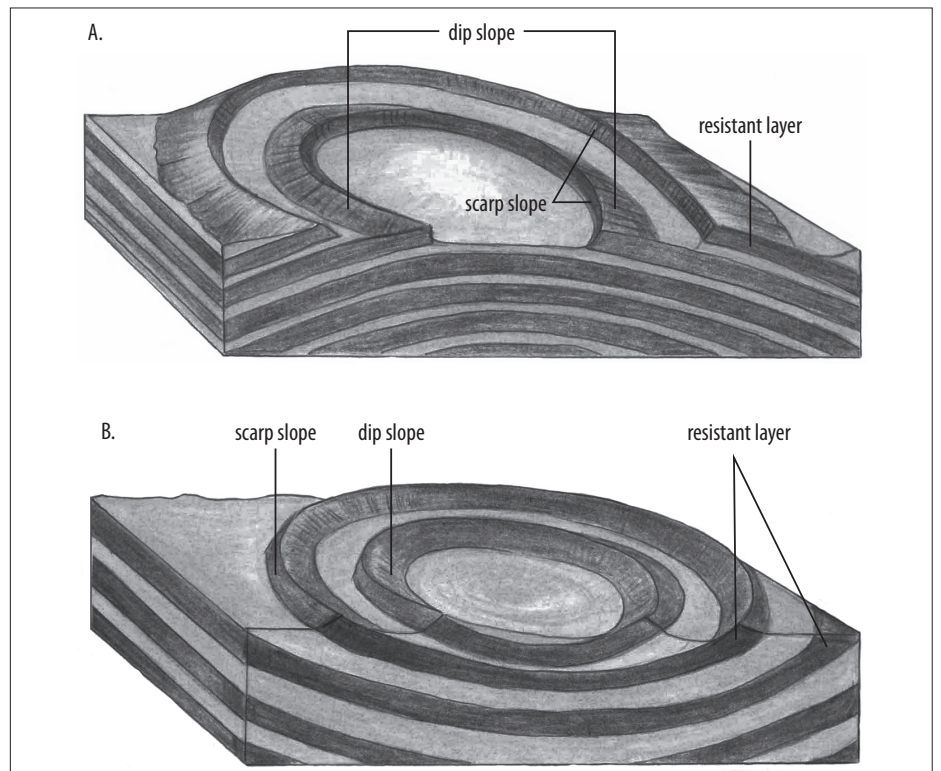
Question 8

8.1 Name two differences between a dip slope and a scarp slope. (2 × 4)

(8)

8.2 Identify the two landforms in A and B below and describe how each was formed. (2 × 6)

(12)



[20]

Question 9


- 9.1 Describe the formation of tors. (4 × 2) (8)
9.2 Name the landform of Paarl Rock. (1 × 2) (2)
9.3 Paarl Rock consists of which type of rock? (1 × 2) (2)
9.4 What are the three minerals that make up this type of rock? (3 × 2) (6)
[18]

Question 10

- 10.1 Draw a diagram to illustrate the four different types of slope elements and give one characteristic of each one. (8 × 2) (16)
[16]

Question 11

- 11.1 Define the term 'mass movement'. (1 × 2) (2)
11.2 Identify the type of mass movement in the diagram below. (1 × 2) (2)



- 11.3 What are the dangers of this mass movement? (2 × 2) (4)
11.4 Name two strategies which could be used to minimise this mass movement. (2 × 2) (4)
[12]

Total: 110 marks

Learners should answer all questions.

Section A: The atmosphere (115 marks)

Question 1

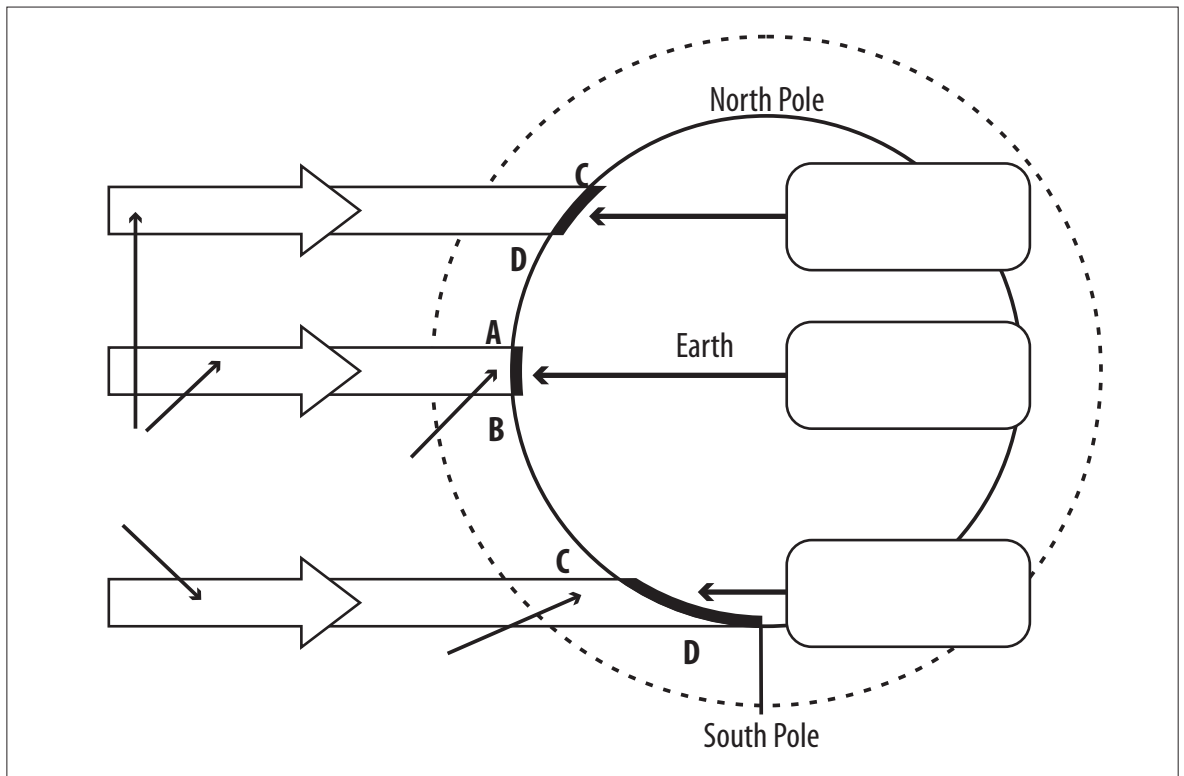
- 1.1 a. planetary
- b. low
- c. convergence
- d. wet
- e. descending
- f. dry
- g. convergence and uplift
- h. very cold temperatures
- i. Coriolis effect
- j. rotation of the Earth on its own axis

(10 × 2)
[20]

Question 2

- 2.1 The Sun is mostly directly overhead at the equator so the angle at which solar radiation strikes the Earth's surface at the equator is much bigger than towards the poles; The same amount of solar radiation is used to heat up a smaller surface area at the equator compared to that of the poles; The same amount of solar radiation passes through more atmosphere nearer the poles so more heat energy is lost before it reaches the Earth's surface. (4 × 2)

(8)



- 2.2 Altitude, ocean currents (2×1) (2)
- 2.3 a. Tropic of Capricorn and Tropic of Cancer (2×2) (4)
- b. The equator (1×2) (2)
- c. Antarctica (1×2) (2)
- d. North Pole and the South Pole (2×2) (4)
- e. 21/22 December (1×2) (2)
- 2.4 Durban lies on the East coast of Africa and its temperatures are affected by the warm Mozambique Current which flows South from the equator towards the South. Lüderitz lies on the west coast of Africa and its temperatures are affected by the cold Benguela Current flowing from the polar region towards the equator. (2×2) (4)
- [28]

Question 3

- 3.1 a. Difference in atmospheric pressure from a high pressure to a low pressure. (2)
- b. A wind balanced by the pressure gradient and Coriolis effect. (2)
- c. The push of air or the atmosphere on the Earth's surface. (3×2) (6)
- 3.2 When temperature increases, hot air rises causing a low pressure. When temperature decreases, cold air subsides causing a high pressure. Air moves from a high pressure to a low pressure. Moving air is called wind. (3×2) (6)
- 3.3 A belt or trough of low pressure around the equator. (1×2) (2)
- 3.4 As seasons change during the year, the Sun moves overhead between the Tropic of Capricorn and the Tropic of Cancer. This means the position of the pressure belts shift North and South of the equator with the seasons, including the ITCZ. (4×2) (8)
- 3.5 A continental air mass forms over land and is dry whereas a maritime air mass forms over the sea and is moist. (2×2) (4)
- 3.6 The tropical continental air mass that forms over the Sahara Desert and tropical maritime air mass that forms over the Atlantic Ocean. (2×2) (4)
- [30]

Question 4

- 4.1 Weather is the change in atmospheric conditions on a daily basis, whereas climate is the change in atmospheric conditions of a place over a long period of time. (2×2) (4)
- 4.2 Tropical climates: high temperatures and rainfall throughout the year. Dry climates: wide daily temperature range and little rain. Temperate climates: warm summers and cool winters. (3×2) (6)
- 4.3 Convergence causes rainfall over Africa as unstable air rises and condenses. Subsidence causes stable conditions, which is not conducive to rain. (2×2) (4)
- 4.4 The simultaneous change in sea surface temperature in the Eastern Pacific and air pressure over the Western Pacific. The trade winds weaken and the Equatorial Counter Current now dominates, which means warm tropical Pacific water now flows from West to East. This causes the eastern side of Africa to be warmer and drier than usual. (2×4) (8)
- [22]

Question 5

- 5.1 a. a long period of below average rainfall
b. land degradation in drylands that result in loss of soil fertility and biodiversity (2 × 1) (2)
- 5.2 The Succulent Karoo is a biodiversity hotspot, it is a region that is arid, yet boasts one of the largest numbers of plant species in the world – mainly due to a sparse population. Five percent (5%) of the vegetation has been lost to mining. Two thirds of the land has been overgrazed. Dryland farming accelerates desertification as fertile soils are blown away during the dry season. The rise of the ostrich farming industry has resulted in the degradation of thousands of hectares of veld. The biggest desertification threats in the Nama Karoo are livestock grazing and agriculture. (4 × 2) (8)
- 5.3 vegetation dies, permanent loss of biodiversity, dry vegetation is tinder for wildfires, duststorms, heatwaves (5 × 1) (5)
- [15]

Total: 115 marks

Section B: Geomorphology (110 marks)

Question 6

- 6.1
6.1.1 c
6.1.2 h
6.1.3 e
6.1.4 f
6.1.5 b
6.1.6 d
6.1.7 j
6.1.8 g
6.1.9 a
6.1.10 I (10 × 2) [20]
- 6.2 a. False
b. True
c. True
d. True
e. False (5 × 2) [10]

Question 7

- 7.1 a butte (1 × 2) (2)
- 7.2 Plateaus become cut into solitary blocks known as mesas. As a result of erosion by running water, these blocks are gradually reduced in size until only a small portion of the original cap rock remains and forms a butte. (4 × 2) (8)
- 7.3 The Grand Canyon and The Fish River Canyon (2 × 2) (4) [14]

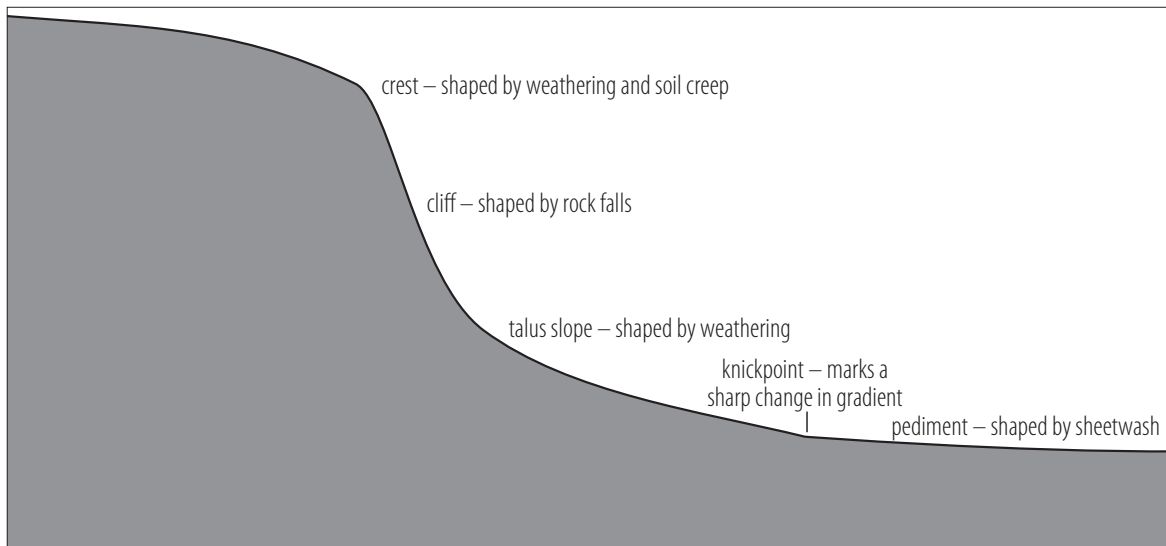
Question 8

- 8.1 Dip slope – gentle slope parallel to the hard resistant layer. Scarp slope – steep slope perpendicular to the hard resistant layer. (2 × 4) (8)
- 8.2 A: Cuesta dome formed from dome-shaped sedimentary rock, the dip slope is directed outwards from the centre in a dome. (6)
- B: Cuesta basin formed from basin-shaped sedimentary rock, the dip slope is directed inwards or towards the centre. (6)
- [20]

Question 9

- 9.1 chemical weathering takes place in joints and cracks in the batholith beneath the Earth's surface; over time the overlying layers of Earth are removed due to erosion to expose corestones; these corestones are further rounded by mechanical weathering – one on top of each other, called tors (4 × 2) (8)
- 9.2 a batholith (1 × 2) (2)
- 9.3 granite (1 × 2) (2)
- 9.4 mica, feldspar and quartz (3 × 2) (6)
- [18]

Question 10



- 10.1 *crest*: convex shape; soil creep occurs here
cliff: almost vertical; hard resistant layer
talus: angle of repose 35°; debris collects here
pediment: concave shape; merges with the valley floor (8 × 2)

[16]

Question 11

- 11.1 The downward movement of mass due to gravity. (1 × 2) (2)
- 11.2 rockfalls (1 × 2) (2)
- 11.3 rocks falling on cars, people and houses (2 × 2) (4)
- 11.4 build wire netting to catch falling rocks; build cement overhang or tunnels for protection (2 × 2) (4)

[12]

Total: 110 marks

Answer all the questions.

Question 1

Choose the correct answer. Write down the letter.

- 1.1 Aerial photographs supplement information on maps by showing ...
- the map code
 - the exact detail
 - the map symbols
 - the grid references
- 1.2 An advantage of aerial photographs is that ...
- there is not too much detail
 - they are usually the same scale as the 1:50 000 topographic map
 - they are usually smaller than the topographic maps
 - they can be used to update maps
- 1.3 The scale of an orthophoto map is usually ...
- 1:10 000
 - 1:50 000
 - 1:1 000
 - 1:5 000
- 1.4 In high oblique aerial photographs the camera is tilted at an angle of ...
- 30°
 - 60°
 - 90°
 - 15°
- 1.5 A disadvantage of oblique aerial photographs is that ...
- the horizon is usually absent
 - they don't represent a realistic landscape
 - the relative sizes of features are distorted
 - buildings cannot be identified
- 1.6 Orthophoto maps ...
- are much more expensive to produce than topographical maps
 - allow for more detailed study because of the smaller scale
 - give a better idea of relative positioning compared to topographical maps
 - show more specific detail
- 1.7 Water masses on an orthophoto map usually appear ...
- white
 - grey
 - black
 - light grey

- 1.8 On an orthophoto map 1 centimetre represents ...
- 0,5 km
 - 0,1 km
 - 5 km
 - 1 km
- 1.9 The shadows cast by buildings on an orthophoto map indicate ...
- what time of day the photograph was taken
 - the height of the buildings
 - the texture of the buildings
 - all of the above
- 1.10 The contour interval on orthophoto maps is ...
- 10 m
 - 20 m
 - 100 m
 - 5 m
- (10 × 2)
[20]

Question 2

Refer to the 1:50 000 topographical map of Brits on the next page.

- 2.1 Draw a cross-section from the caravan park near Rotsvas in the centre of the map to the school in Schoemansville. Use a vertical scale of 1 cm to represent 100 m. (6)
- 2.2 Identify the landform you have drawn. (2)
- 2.3 Identify two slopes on this feature. (4)
- 2.4 Calculate the vertical exaggeration of the cross-section. (6)
- 2.5 Are the school and the caravan park inter-visible? Explain your answer. (4)
- 2.6 Calculate the gradient between spot height 1521 [block D5] and spot height 1170.7 [block D4]. (6)
- 2.7 Is this gradient steep or gentle? Substantiate your answer. (4)
- 2.8 Give five types of recreation activities catered for in this area. (5)
- [37]

Question 3

- 3.1 Define the following terms:
- GIS
 - raster data
 - vector data
 - passive system
 - active system
- (10)
- 3.2 Name any two components of GIS. (4)
- 3.3 Your friend lives in Schoemansville and would like to open a business in the area. How could he/she make use of GIS in order to ensure the success of his/her business? (4)
- [18]

Total: 75 marks



2527DB BRITS

Contour Interval 20 Metres

1:50 000

© You may photocopy this page for use with Study & Master Geography Grade 11.

Learners should answer all the questions.

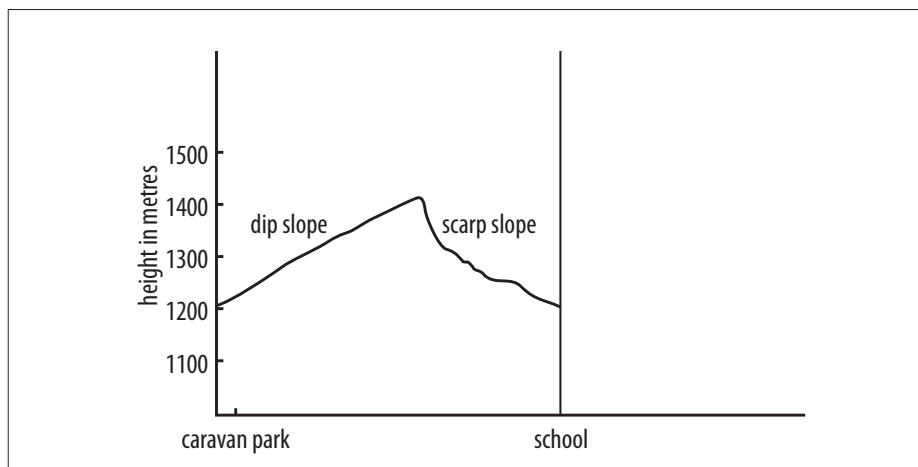
Question 1

- 1.1 b
- 1.2 d
- 1.3 a
- 1.4 b
- 1.5 c
- 1.6 d
- 1.7 c
- 1.8 b
- 1.9 d
- 1.10 d

(10 × 2)
[20]

Question 2

2.1



(6)

2.2 homoclinal ridge (1 × 2)

(2)

2.3 dip slope and scarp slope (2 × 2)

(4)

2.4 Vertical exaggeration = $\frac{\text{Vertical scale}}{\text{Horizontal scale}}$

Vertical scale: 1 cm represents 100 m
1 cm represents 10 000 cm
1:10 000

Horizontal scale: 1:50 000

$$\begin{aligned}\text{Vertical exaggeration} &= \frac{1}{10\,000} \\ &= \frac{1}{50\,000} \\ &= \frac{1}{10\,000} \times \frac{50\,000}{1} \\ &= 5\end{aligned}\quad \begin{array}{l}(3 \times 2) \\ (6)\end{array}$$

2.5 No, the ridge is in the way so you are unable to see the school from the caravan park and the caravan park from the school. (2 × 2) (4)

$$\begin{aligned}2.6 \text{ Gradient} &= \frac{\text{difference in height}}{\text{horizontal distance}} \\ &= \frac{1\,521\text{ m} - 1\,170,7\text{ m}}{2,6\text{ km}} \\ &= \frac{350,3\text{ m}}{1,3\text{ km}} \\ &= \frac{350,3\text{ m}}{1\,300\text{ m}} \\ &= \frac{1}{3,7}\end{aligned}$$

Gradient is 1:3,7 (3 × 2) (6)

2.7 Yes, because for every 3,7 m you walk horizontally you go up 1 m. (2 × 2) (4)

2.8 Any five: yacht club (yachting), caravan park (camping), golf course (golfing), snake park, camping sites, holiday resorts, fishing (5 × 1) (5)
[37]

Question 3

- 3.1 a. *GIS*: A system for capturing, storing, checking, manipulating and displaying data which is spatially referenced to the Earth.
b. *Raster data*: data represented by grid cells called pixels.
c. *Vector data*: data based on points, lines, polygons. Points have coordinates.
d. *Passive system*: uses small sensors or detectors that measure energy signals that are naturally reflected or emitted from the Earth's surface.
e. *Active system*: sends out its own radiation toward a landscape target. The radiation returned from the target is detected and measured by the sensors. (5 × 2) (10)
- 3.2 Any two: computers, software, procedures, people (2 × 2) (4)
- 3.3 Any two: map overlays showing income levels, in order to better understand the market; map overlays showing access points in order to receive deliveries and allow clients easy access; map overlays identifying other businesses of the same kind in the area (2 × 2) (4)

[18]

Total: 75 marks

1. Choose the correct answer from the multiple choices. Write only the number of the question and the letter of the answer.
 - 1.1 The North-South divide refers to:
 - A countries north or south of the Sahara, in Africa
 - B countries that are wealthy and industrialised, or poor and developing
 - C the countries of either the Northern or Southern hemisphere
 - 1.2 The multiplier effect is:
 - A the ripple effect in the economy when unemployment and job losses occur
 - B the demand for consumer goods
 - C the knock-on effect that economic growth has in creating more jobs, more wages, more demand, more production and more wealth
 - 1.3 GNP is:
 - A a method of assessing levels of development by focusing on standards of living
 - B the value of all goods and services produced by residents inside and outside the country in one year
 - C the value of all inputs and outputs made inside a country in one year
 - 1.4 A Gini Coefficient for a country of approximately 0,61 would indicate:
 - A that the HDI is high
 - B that there is very little inequality of income in the country
 - C that the country matches the world average with regard to inequality of income
 - 1.5 Ethnic groups and nationalities such as the Bedouin, Kurds, or Gypsies, belong to:
 - A the South
 - B the UN
 - C the Fourth World

[5]

2. Match the words in the left column with the correct group of words in the right column. Write only the number and the letter of the answer.

2.1	resources	A.	the study of population
2.2	slave trade	B.	exploitation by wealthier nations
2.3	neo-colonialism	C.	exploitation of natural resources
2.4	demographics	D.	land, labour, capital and entrepreneurship
2.5	environmental degradation	E.	Africa, Caribbean, North America, Britain

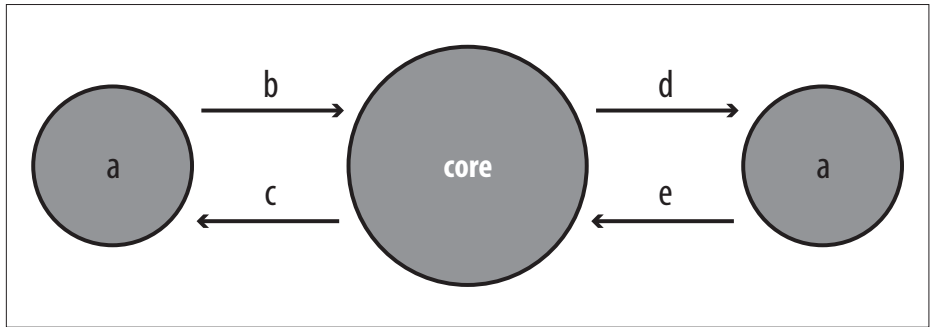
[5]

3. Define each of the following words in a sentence, giving an example to illustrate your answer.
 - 3.1 Balance of Trade
 - 3.2 overpopulation
 - 3.3 free market
 - 3.4 quinary sector
 - 3.5 Take-off stage

[10]

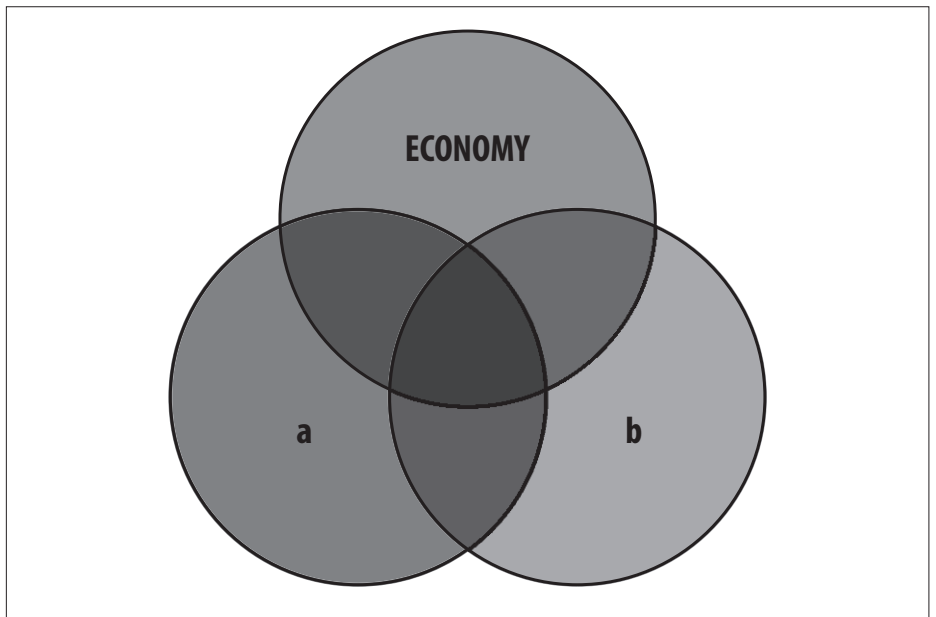
4. Copy the diagrams below onto your answer sheet. Name and label each of the following models:

4.1



(7)

4.2



(3)

[10]

5. Complete each of the following statements.
 - 5.1 Community based development focuses on ... (2)
 - 5.2 An example of community based development in South Africa is ... (2)
 - 5.3 On 31 October, 2011, the United Nations officially recorded the ... (2)
 - 5.4 Sustainable development is development that ... (2)
 - 5.5 A criticism of sustainable development is that ... (2)
- [10]

6. Read the extract and answer the questions below.

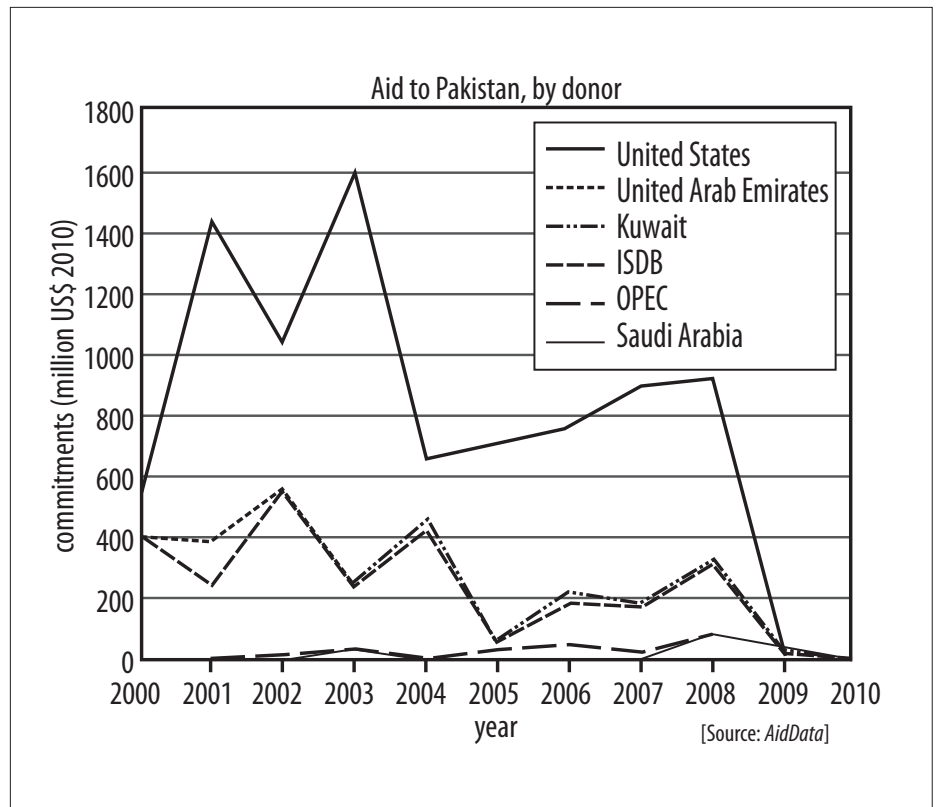
Oil and the rainforests

The oil company first cuts roads through the rainforest. Settlers follow, who slash and burn more forest for agriculture, pasture, dwellings and fuel. The process of burning off the natural gas, causes atmospheric pollutants and forest fires. Spills, leaks and waste disposal can contaminate rivers, lakes and underground water supplies. This kills wildlife, including fish, birds and plantlife. The people most affected are the indigenous people, whose environment, customs, farmland, homes and health, are destroyed. While money is paid to the governments by the oil companies, little of the revenue makes its way into the hands of the people whose lives are destroyed by the resource exploitation.

Source: adapted from: www.mongabay.com/oilextraction

- 6.1 List four environmental problems that are raised in this extract. (4)
 - 6.2 What is the danger for a country that relies on the export of one commodity? (2)
 - 6.3 Explain how a country's Balance of Trade could (a) benefit, or (b) be negatively affected by export of one resource such as oil. (4)
 - 6.4 What problems are implicit in the last sentence, beginning, 'While money is...exploitation.' that are relevant to all developing countries? (3)
 - 6.5 Suggest a way of overcoming these problems. (2)
- [15]

7. Study the graph below before answering the questions.



- 7.1 Which countries are shown on the graph as givers of aid to Pakistan? (3)
- 7.2 Between which years was aid given? (2)
- 7.3 Which country gave the most aid to Pakistan? (1)
- 7.4 In 2001, the 9/11 tragedy occurred in the United States. Explain two effects that this had on the aid given by the United States to Pakistan. (2)
- 7.5 Suggest a reason why the USA increased aid to Pakistan when it did. (1)
- 7.6 In 1998, Pakistan tested a nuclear device, which resulted in the USA stopping all but a small amount of humanitarian aid to the country, until after 11 September 2001. What type of aid lays down rules and regulations before aid is given? (1)
- 7.7 In 2008 and 2009, information from donor countries was not made available. What implication does this have on the accuracy of the graph? (2)
- 7.8 Name two other statistical means of showing the information on this graph. (2)
- 7.9 OPEC stands for the Organisation of Petroleum Exporting Countries. Suggest a reason why these countries would give aid to Pakistan? (1)

[15]

Total: 70 marks

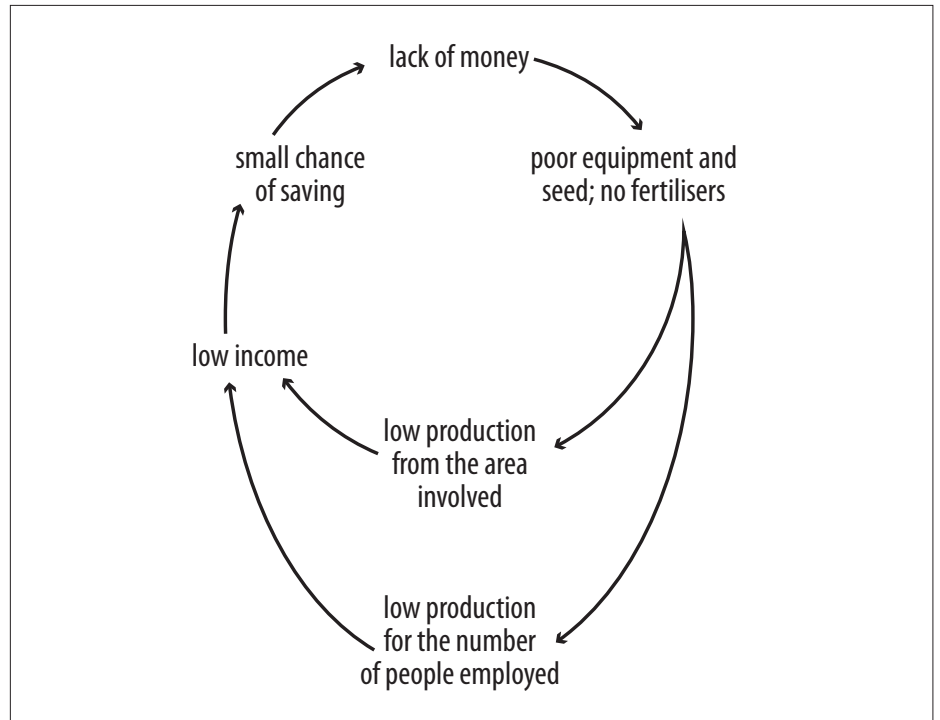
1. Define the following terms:
 - 1.1 GDP
 - 1.2 literacy
 - 1.3 HDI
 - 1.4 life expectancy
 - 1.5 birth rate
- (5 × 2)
[10]

2. Study the table below and answer the questions that follow.

Country	GDP in US dollars	Birth rate	Death rate	Literacy	Life expectancy	GDP per capita in US dollars
USA	12,28 trn	14,7	8,7	99	75	41 530
Kenya	12 bn	28,5	14,4	82	47	360
South Africa	193 bn	19,8	15	82	51	4 110

- 2.1 Which country has the largest GDP? Suggest two reasons for this. (3 × 2) (6)
 - 2.2 Which country has the lowest life expectancy? Suggest two reasons for this. (3 × 2) (6)
 - 2.3 Which country has the lowest literacy rate? Suggest two reasons for this. (3 × 2) (6)
 - 2.4 Which indicators are used to measure the HDI? (3 × 1) (3)
 - 2.5 Use the HDI of all the countries to compare the quality of life of the people in each country. (3 × 2) (6)
 - 2.6 Which of the countries in the table are developed and which are developing? (3 × 1) (3)
- [30]
3.
 - 3.1 Draw a diagram to illustrate the Core-Periphery Development Model. (3 × 2) (6)
 - 3.2 How does this model compare to the development situation in South Africa? (2 × 2) (4)
- [10]

4. Study the diagram below illustrating the cycle of poverty and answer the questions that follow.



- 4.1 Which areas exhibit the cycle of poverty in South Africa? (1 × 2) (2)
- 4.2 Describe four issues that need to be addressed in order to raise the standard of living of people in these areas. (4 × 2) (8)
- 4.3 What are the aims of the Social Development and Sustainable Model? (2 × 2) (4)

[14]

5. Write a paragraph on how globalisation has had an impact on development in countries around the world. (5 × 2)

[10]

6. In September 2000, 189 member states of the United Nations adopted the Millennium Declaration. Eight Millennium Development Goals were established. Name three of them. (3 × 2)

[6]

Total: 80 marks

Activity 1

Choose the correct geographical term in the box to fit each description below.

1. partially broken down parent rock
2. nutrients accumulate in this layer
3. water trickles down through a layer carrying nutrients to the next layer
4. micro-organism which cause dead plant and animal matter to decay
5. consists of dead plant and animal matter which has been broken down
6. when water evaporates and the dissolved salts remain on the surface
7. a rock determines the mineral composition, texture and rate of weathering of the soil that develops from it
8. this is true soil
9. a cross-section of soil
10. horizontal layers found in a soil profile (10 × 1)

[10]

soil profile	salination
horizons	C horizon
parent rock	B horizon
bacteria	humus
leaching	solum

Activity 2

Describe how the following factors affect soil formation:

1. climate
2. parent rock
3. time
4. relief
5. organisms (5 × 2)

[10]

Total: 20 marks

Answer three questions: one from Section A, one from Section B and another from either Section A or Section B.

Section A: Answer at least one question from this section.

Question 1

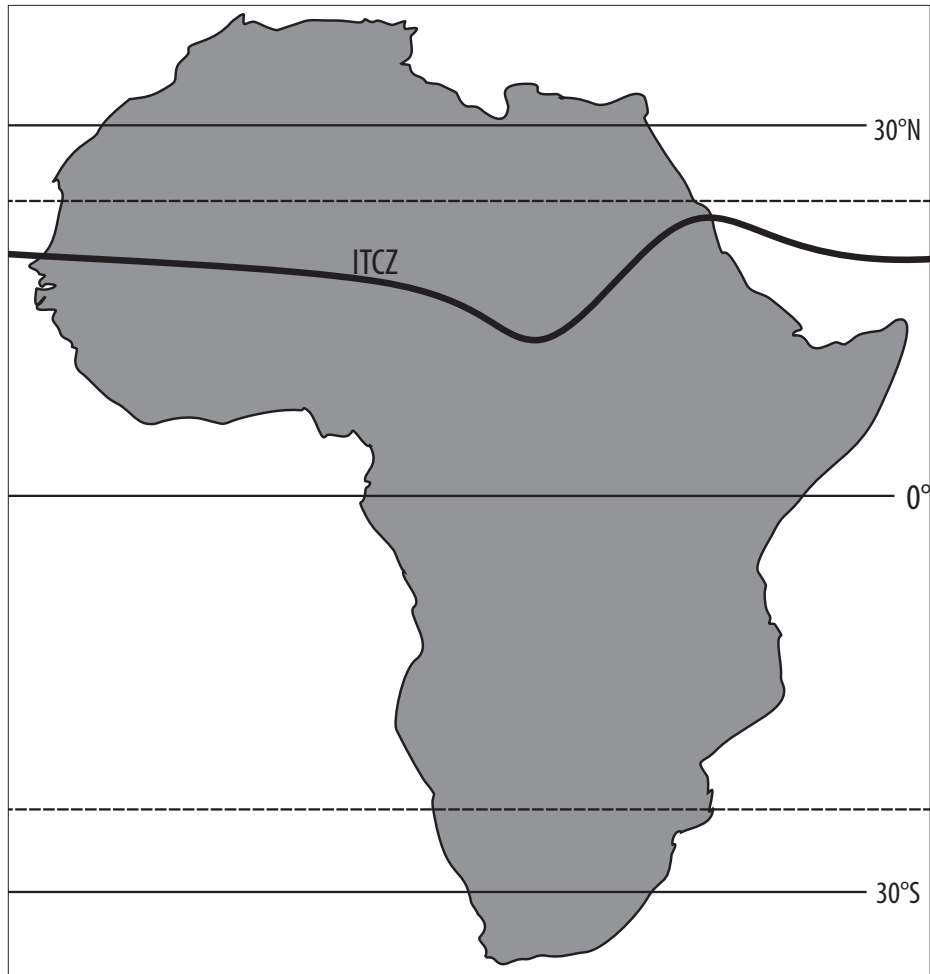
1.1 Match the term with the correct description. Write only the number and matching letter.

Term		Description	
1.1.1	solstice	A.	a self-contained area of heat circulation
1.1.2	equinox	B.	generates the westerlies
1.1.3	convection cell	C.	the deflection of winds caused by the rotation of the Earth
1.1.4	Ferrel cell	D.	the time at which one of the hemispheres receives maximum insolation
1.1.5	Hadley cell	E.	a rainshadow wind formed by adiabatic descent
1.1.6	ITCZ	F.	generates the trade winds
1.1.7	polar front	G.	the time at which both hemispheres receive equal insolation
1.1.8	Coriolis effect	H.	belt or trough of low pressure around the equator
1.1.9	Föhn	I.	a wind system that reverses direction with the seasons
1.1.10	monsoon	J.	boundary between warm air mass from Ferrel cell and cool air mass from Polar cell

(10 × 2)

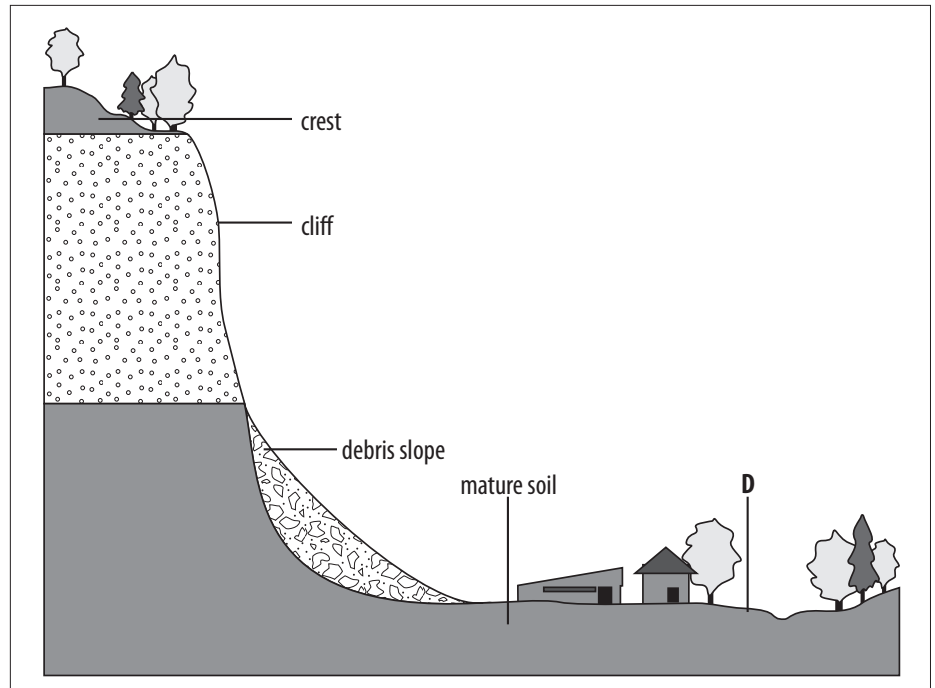
[20]

1.2 Refer to the diagram below which is a map of Africa indicating the position of the ITCZ. Answer the questions that follow.



- 1.2.1 What does ITCZ stand for? (2)
- 1.2.2 What season in the Southern hemisphere is indicated on the map? Give one reason for your answer. (4)
- 1.2.3 Explain why the ITCZ shifts during different seasons. (6)
- 1.2.4 Why is the ITCZ the most important weather feature of the tropics? (4)
- 1.2.5 Why are deserts in Africa found 30° North and South of the equator? (4)
- 1.2.6 Name the two ocean currents that influence South Africa's climate. (4)
- 1.2.7 Explain how these ocean currents affect the climate of South Africa. (4)
- (28)

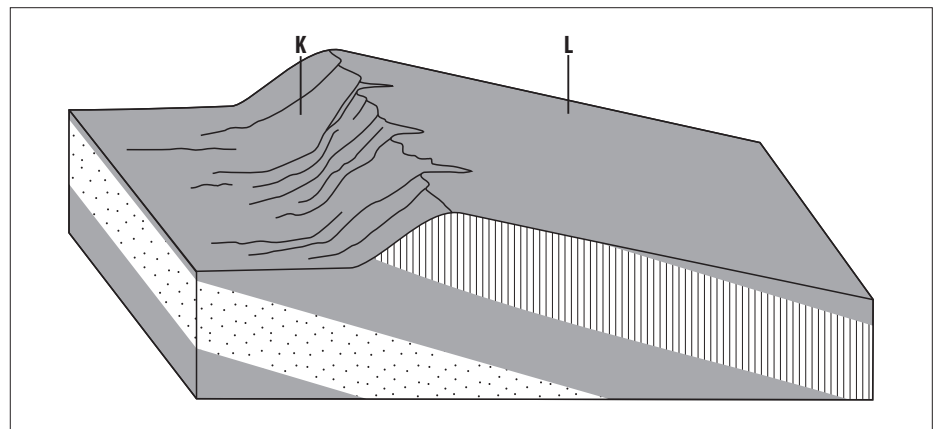
1.3 The diagram below illustrates a typical slope.



- 1.3.1 Describe the shape of the crest. (2)
- 1.3.2 Why is the cliff slope so steep? (2)
- 1.3.3 Name the slope where the debris fragments are found. (2)
- 1.3.4 Give two characteristics of the slope in your answer to 1.3.3. (4)
- 1.3.5 Name the slope element labelled D and give one characteristic of this slope. (4)
- 1.3.6 On which slope form would you find soil creep? (1)

[15]

1.4 Refer to the diagram below and answer the questions that follow.



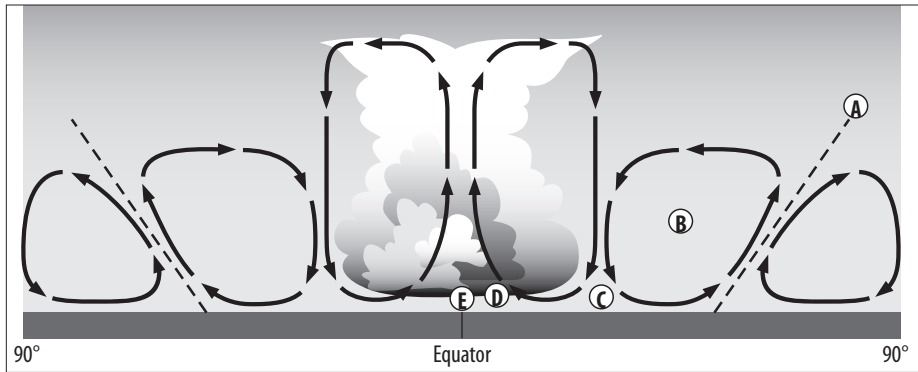
- 1.4.1 Name the landform indicated in the diagram. (2)
- 1.4.2 What type of rock structure is associated with this landform? (2)
- 1.4.3 Name the slopes K and L. (4)
- 1.4.4 Describe two differences between slope K and slope L. (4)

[12]

Total: 75 marks

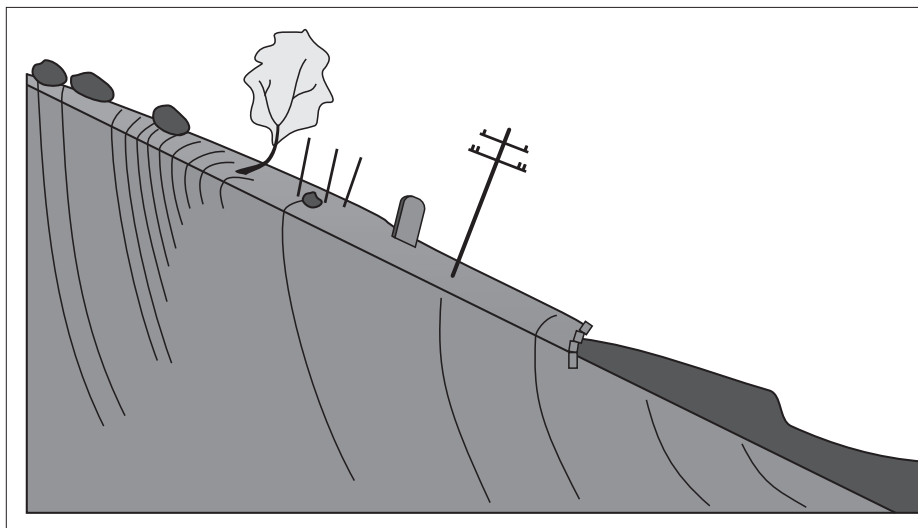
Question 2

2.1 Refer to the diagram below showing a simple cross-sectional sketch of the tri-cellular arrangement of atmospheric circulation. Choose the correct term from the brackets to make each of the statements below TRUE.



- 2.1.1 A represents the (polar/ moisture) front.
 - 2.1.2 B is the (tropical/ mid-latitude) cell.
 - 2.1.3 C represents a zone of (low/ high) pressure.
 - 2.1.4 D represents the (westerly/ tropical easterly) wind belt.
 - 2.1.5 Surface (convergence/ divergence) takes place at E. (5 × 2)
- [10]

2.2 Refer to the diagram below illustrating the movement of material down a slope. Indicate whether the following statements are TRUE or FALSE.



- 2.2.1 The diagram illustrates mass movement.
 - 2.2.2 The diagram illustrates a rock fall.
 - 2.2.3 The movement of material illustrated in the diagram can only occur if rainwater acts as a lubricant.
 - 2.2.4 The movement of material down a slope, illustrated in the diagram is a slow movement.
 - 2.2.5 The material is moving down-slope under the influence of gravity. (5 × 2)
- [10]

2.3 Read the extract below and answer the questions that follow.

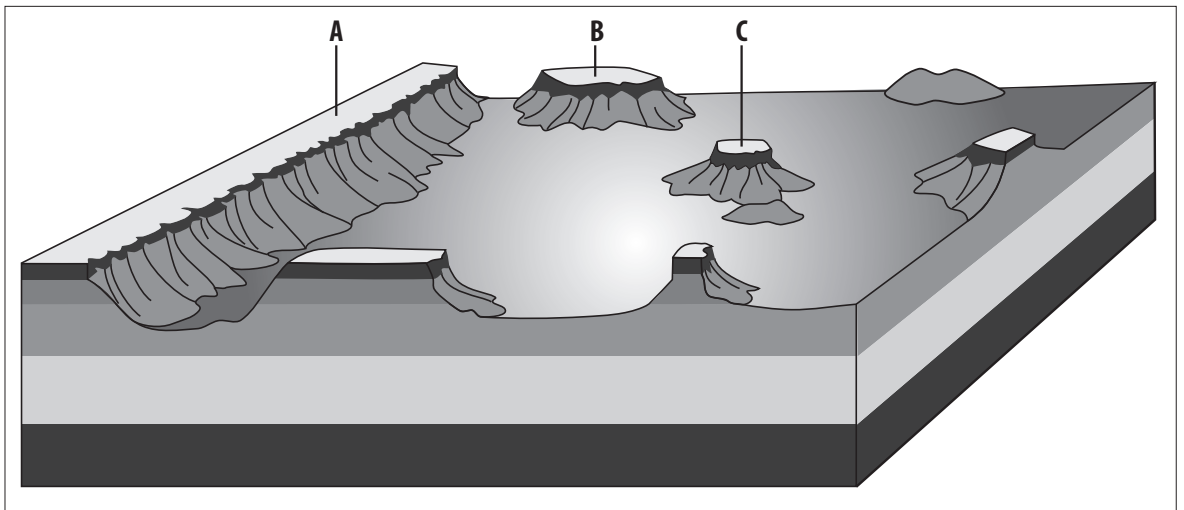
Although it is far-away, the Pacific Ocean influences Africa's weather. Every 2–7 years El Niño and La Niña events disrupt the normal ocean-atmosphere system in the tropical Pacific, bringing about short-term climate change.

- 2.3.1 What does the term El Niño mean? (1)
2.3.2 What causes El Niño? (6)
2.3.3 Describe the ocean-atmospheric changes that take place during the El Niño event. (6)
2.3.4 What are the implications for the climate of Africa? (4)
(17)

2.4

- 2.4.1 Define the following terms:
a. drought
b. desertification (4)
2.4.2 Which two areas in Africa are most prone to drought and desertification? (4)
2.4.3 List four causes of desertification. (4)
[12]

2.5 Refer to the diagram below and answer the questions that follow.



- 2.5.1 Identify landforms A, B and C. (6)
2.5.2 What type of geological rock strata is associated with these landforms? (2)
2.5.3 Describe the formation of landform C. (6)
[14]

2.6 Study the photograph below and answer the questions that follow.



- 2.6.1 Identify the landform in the photograph. (2)
2.6.2 What type of rock structure is associated with this landform? (2)
2.6.3 Describe the formation of this landform. (8)

[12]

Total: 75 marks

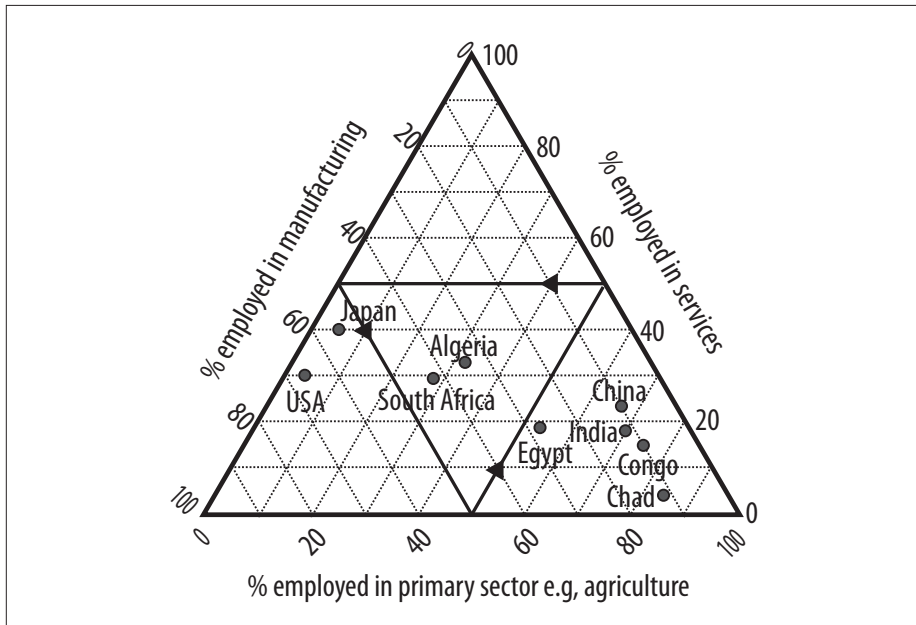
Section B: Answer at least one question from this section.

Question 3

- 3.1 Choose the correct answer from the four options. Write down only the letter of the correct answer.
- 3.1.1 In developed countries:
- the infant mortality rate is high
 - the death rate is low
 - the death rate is high
 - the life expectancy is low
- 3.1.2 The Human Development Index includes:
- life expectancy, level of education and GDP per capita
 - life expectancy, GNP and level of education
 - life expectancy, birth rate, death rate
 - level of education, fertility rate and GDP per capita
- 3.1.3 Social indicators are:
- the percentage population living in urban areas
 - education levels and levels of literacy
 - availability of services such as water, electricity and health
 - all of the above
- 3.1.4 Indicators of sustainability include:
- greenhouse gas emissions
 - the number of plant and animal species
 - the number of dams
 - the number of industries

- 3.1.5 The country with the highest GDP per capita is:
- Zambia
 - Zimbabwe
 - Argentina
 - Norway
- 3.1.6 The development model to show the theory of modernisation was developed by:
- Frank
 - Myrdal
 - Rostow
 - Burgess
- 3.1.7 A sweatshop refers to:
- an outdoor adventure shop
 - a gym
 - a place where people work under difficult conditions with low wages
 - a place where people work under excellent conditions with high wages
- 3.1.8 The following strategy was developed pre-1994:
- GEAR
 - RDP
 - SDIs
 - Basic Needs Approach
- 3.1.9 The gender-related development index refers to:
- the number of men and women in a country
 - the inequalities of men and women in a country
 - the percentage of men and women in a country
 - the number and types of jobs that men and women in a country are involved in
 - all of the above
- 3.1.10 The country with the highest population in the world is
- China
 - USA
 - India
 - Japan
- (10 × 2)
[20]
- 3.2
- 3.2.1 Define the following terms:
- GDP (2)
 - GNP (2)
- [4]

- 3.2.2 Study the diagram below indicating the percentage of people in each country employed in agriculture, manufacturing and services. Answer the questions that follow.



- What percentage of South Africans are employed in agriculture? (2)
 - What percentage of Chinese are employed in manufacturing? (2)
 - Compare the USA and India in terms of the percentage of people employed in each of the sectors of the economy. (6)
 - Which country do you think is more economically developed? Give two reasons for your answer. (6)
- [20]

3.3

3.3.1 Define the following terms:

- renewable resources
- non-renewable resources (4)

3.3.2 Discuss how the availability of the following resources can affect economic development:

- water
- minerals
- people (6)

[10]

3.3.3 Look at the cartoon below and explain what it represents.

(4)



3.3.4 What are the consequences of the exploitation and depletion of resources?

(4)

3.3.5 How can we make sustainable use of our resources?

(6)

[24]

3.4

3.4.1 Why is soil such a valuable resource in South Africa? Give three reasons.

(6)

3.4.2 Give five causes of soil erosion in South Africa.

(5)

[11]

Total: 75 marks

Question 4

4.1 Indicate whether the following statements are True or False.

4.1.1 Gold is a renewable resource.

4.1.2 Methane is a greenhouse gas.

4.1.3 South Africa lacks mineral resources.

4.1.4 Acid rain is caused by pollution in the atmosphere.

4.1.5 Uranium is used for nuclear electric power.

4.1.6 Coal is a fossil fuel formed from plants and animals.

4.1.7 Oil is a renewable energy resource.

4.1.8 The world population is at present 6 billion people.

4.1.9 The demand for all sources of energy is decreasing.

4.1.10 Natural resources are evenly distributed across the world.

(10 × 1)

[10]

4.2 Name the term given to the following:

4.2.1 A unit measurement of energy.

4.2.2 Diseases spread by insects and other very small animals found in water.

4.2.3 A gas which is the main contributor to global warming.

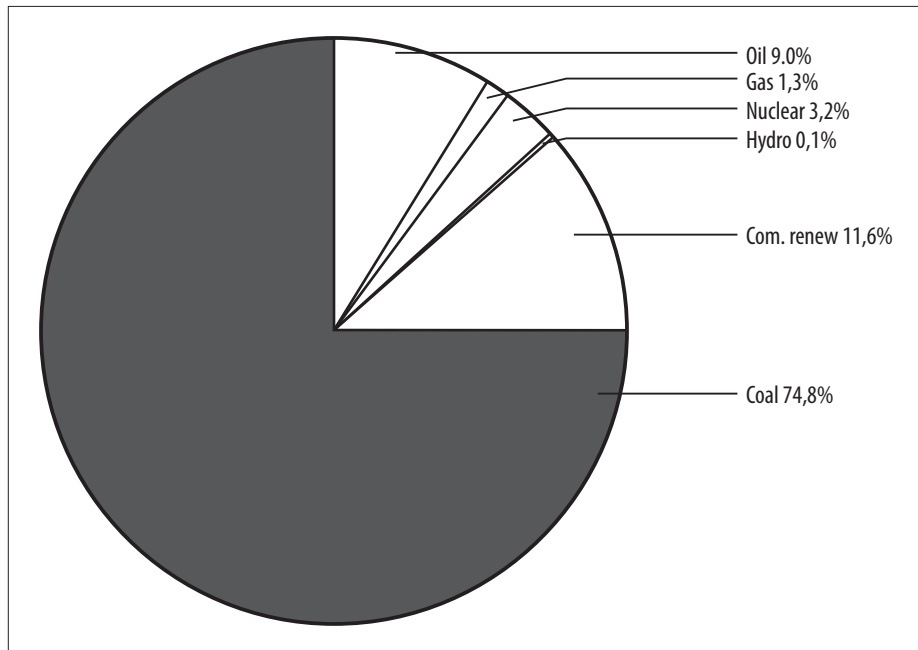
4.2.4 Energy that is sustainable.

4.2.5 Fossil fuel formed 55 to 5 million years ago from plants and marine creatures.

(5 × 2)

[10]

4.3 Study the pie-chart below and answer the questions that follow.



- 4.3.1 Which type of energy produces the most electricity in South Africa? (2)
- 4.3.2 Why do you think this is so? (2)
- 4.3.3 Name three advantages of coal-fired power stations in South Africa. (6)
- 4.3.4 Name the detrimental environmental effects of coal-fired power stations. (6)
- 4.3.5 Name one advantage and one disadvantage of nuclear energy. (2)
- [18]

- 4.4
- 4.4.1 What are the aims of the Social Development and Sustainability Model? (4)
- 4.4.2 Draw a diagram to illustrate the rural cycle of poverty. (4)
- 4.4.3 How can the Social Development and Sustainability Model be used to alleviate poverty in rural areas? (6)
- 4.4.4 International aid attempts to improve the standards of living in poorer countries of the world. Name three types of international aid. (3)
- 4.4.5 Name two countries that are donors to South Africa. (2)
- [19]

- 4.5
- 4.5.1 Define the term 'globalisation'. (2)
- 4.5.2 Describe four ways in which globalisation can affect development. (8)
- 4.5.3 Give three criticisms of globalisation. (6)
- 4.5.4 What is free trade? (2)
- [18]

Total: 75 marks

Learners must answer three questions: one from Section A, one from Section B and another from either Section A or Section B.

Section A

Question 1

1.1

1.1.1 D

1.1.2 G

1.1.3 A

1.1.4 B

1.1.5 F

1.1.6 H

1.1.7 J

1.1.8 C

1.1.9 E

1.1.10 I

(10 × 2)
[20]

1.2

1.2.1 Intertropical Convergence Zone (1 × 2) (2)

1.2.2 Winter; the ITCZ is located further North of the equator. (2 × 2) (4)

1.2.3 As the Sun changes during the year, the Sun moves overhead between the Tropic of Capricorn and the Tropic of Cancer. This means the position of the pressure belts shifts South and North of the equator with the seasons as does the ITCZ. (3 × 2) (6)

1.2.4 The ITCZ is a front where tropical air masses North and South of the equator meet. The ITCZ receives the most solar radiation. The heat evaporates large amounts of water giving rise to convective thunderstorm and convective rain. (2 × 2) (4)

1.2.5 30° North and South of the equator is associated with stable, descending air which is not conducive to rainfall. (2 × 2) (4)

1.2.6 cold Benguela Current; warm Mozambique Current (2 × 2) (4)

1.2.7 cold Benguela Current causes temperatures to be lower; the warm Mozambique Current causes temperatures to be higher (2 × 2) (4)

[28]

1.3

1.3.1 convex (2)

1.3.2 The cliff is an area of hard resistant rock where scarp retreat has taken place. (2)

1.3.3 Talus slope (2)

1.3.4 angle of repose 35°; all debris collects on this slope (2 × 2) (4)

1.3.5 pediment; merges with the valley floor (2 × 2) (4)

1.3.6 crest (1)

[15]

- 1.4
- 1.4.1 cuesta (2)
- 1.4.2 inclined rock strata (2)
- 1.4.3 K is the scarp slope and L is the dip slope. (2 × 2) (4)
- 1.4.4 Slope K is steeper and is perpendicular to resistant rock strata whereas slope L is more gentle and parallel to the hard resistant rock strata. (2 × 2) (4)
- [12]

Total: 75 marks

Question 2

- 2.1
- 2.1.1 polar
- 2.1.2 mid-latitude
- 2.1.3 high
- 2.1.4 tropical easterly
- 2.1.5 convergence (5 × 2)
- [10]

- 2.2
- 2.2.1 true
- 2.2.2 false
- 2.2.3 true
- 2.2.4 true
- 2.2.5 true (5 × 2)
- [10]

- 2.3
- 2.3.1 boy child (1)
- 2.3.2 Unusual warming of the sea surface temperatures on the east side of the Pacific due to a weakening in the Tropical Easterly winds and upwelling of cold water. It coincides with the switch in the high and low pressures on the West and East sides of the Pacific. (3 × 2) (6)
- 2.3.3 the trade winds weaken; the equatorial counter current dominates, which means warm tropical Pacific water now flows from west to east; air pressure drops over the east Pacific and increases over the west Pacific, a low pressure system forms in the central Pacific. (3 × 2) (6)
- 2.3.4 the eastern side of Africa is warmer and drier than usual; lack of rainfall and drought (2 × 2) (4)
- [17]

- 2.4
- 2.4.1 a. A long period of below average rainfall. (2)
- b. land degradation in drylands that results in loss of soil fertility and biodiversity (2)
- 2.4.2 Sahel in north Africa and Little Karoo in South Africa. (2 × 2) (4)
- 2.4.3 climate variation – severe droughts and climate change; poor/ unsustainable land-use practices such as deforestation; overgrazing; no crop rotation (4 × 1) (4)
- [12]

- 2.5
- 2.5.1 A: plateau; B: mesa; C: butte (3 × 2) (6)
- 2.5.2 horizontal rock strata (2)
- 2.5.3 In the course of time the plateau becomes cut into solitary blocks, known as mesas, due to the downward erosion of running water. These blocks are gradually reduced in size due to scarp retreat and running water to form buttes. (3 × 2) (6)
- [14]

- 2.6
- 2.6.1 a tor (2)
- 2.6.2 massive igneous rock (2)
- 2.6.3 Chemical erosion takes place in joints and cracks in the batholith beneath the surface of the Earth resulting in large blocks of igneous rock. Later the overlying layers of Earth are removed, due to erosion and weathering, to expose these block which are further rounded by mechanical weathering and are called corestones. The corestones, one on top of the other, form a tor. (4 × 2) (8)
- [12]

Total: 75 marks

Section B

Question 3

- 3.1
- 3.1.1 b
- 3.1.2 a
- 3.1.3 d
- 3.1.4 a
- 3.1.5 d
- 3.1.6 c
- 3.1.7 c
- 3.1.8 d
- 3.1.9 b
- 3.1.10 b
- (10 × 2)
- [20]

- 3.2
- 3.2.1 a. GDP: The value of all goods and services produced in a country in a year. (2)
- b. GNP: The value of all goods and services produced in a country in a year including foreign earnings. (2)
- 3.2.2 a. 30% (1)
- b. 78% (1)
- c.

	USA	India
Primary activities	5%	70%
Manufacturing	70%	10%
Services	25%	20%

(3 × 2) (6)

- d. The USA. The USA has more people employed in manufacturing than in primary activities. USA is far more technically developed. (2 × 3) (6)
- [20]

- 3.3
- 3.3.1 a. Renewable resources are resources that are continually being replaced. (2)
- b. Non-renewable resources take a long time to be replaced when they have been used. (2)
- 3.3.2 a. Water is needed for industry, agriculture and domestic use. (2)
- b. Minerals can be exported to bring in foreign capital for the country. (2)
- c. Skilled people are invaluable to the workforce of any society. (2)
- 3.3.3 The increasing world population is putting a strain on the Earth and its resources. (2 × 2) (4)
- 3.3.4 There will not be enough resources to sustain the world population. We will run out of resources and this will lead to death or wars or famine. (2 × 2) (4)
- 3.3.5 save water or use it wisely; avoid deforestation; recycle; any three logical answers (3 × 2) (6)
- [24]

- 3.4
- 3.4.1 Soil is a non-renewable resource. Humans are dependent upon it for survival, as all our food comes directly or indirectly from it. South Africa exports a great number of food products. (3 × 2) (6)
- 3.4.2 overstocking and overgrazing; inappropriate farming techniques; lack of crop rotation; planting crops down the contour instead of along it; ploughing dry land (5 × 1) (5)
- [11]

Total: 75 marks

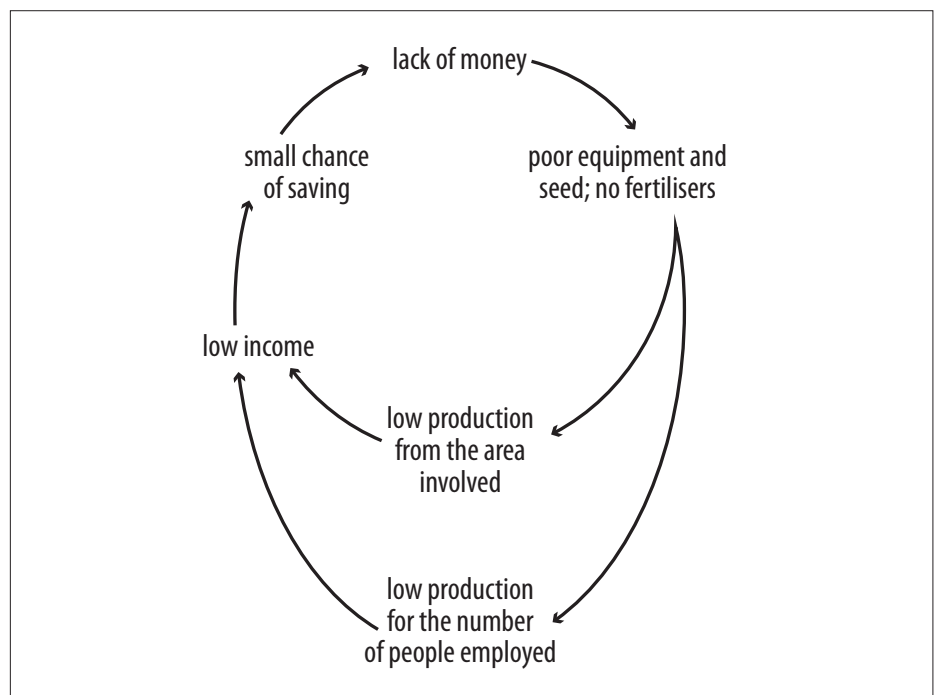
Question 4

- 4.1
- 4.1.1 false
- 4.1.2 true
- 4.1.3 false
- 4.1.4 true
- 4.1.5 true
- 4.1.6 true
- 4.1.7 false
- 4.1.8 false
- 4.1.9 false
- 4.1.10 false
- (10 × 1)
- [10]

- 4.2
- 4.2.1 joule
- 4.2.2 water-borne diseases
- 4.2.3 carbon dioxide
- 4.2.4 renewable energy
- 4.2.5 oil
- (5 × 2)
- [10]

- 4.3
- 4.3.1 coal (2)
- 4.3.2 South Africa's coal reserves are estimated to be 53 billion tonnes and with the present production rate there should be almost 200 years of coal supply left. (2)
- 4.3.3 they are reliable; our infrastructure to generate electricity from coal is well established; coal is the most cost-effective and energy efficient way of generating electricity (3 × 2) (6)
- 4.3.4 Serious source of pollution: carbon dioxide which is a major cause of global warming; sulphur dioxide is a major source of acid rain; ash which harms the lungs and pollutes the ground. (3 × 2) (6)
- 4.3.5 Advantage: Nuclear generation produces small volumes of waste. Disadvantage: Nuclear stations with safety systems are expensive. (2 × 1) (2)
- [18]

- 4.4
- 4.4.1 The emphasis is on development of human well-being, justice, human rights and environmental sustainability. (2 × 2) (4)
- 4.4.2



(4 × 1)
(4)

- 4.4.3 To ensure an increase in: financial capital – money, loans; social capital – through co-operatives, membership of groups; natural capital – through resources such as soil and water; human capital – through skills development and education; physical capital – through farming equipment, transport, shelter. (3 × 2) (6)

- 4.4.4 Any three: bilateral: from one government to another;
multilateral: from international organisations, e.g. UN; NGOs;
private banks; direct investors; disaster relief aid (3 × 1) (3)
- 4.4.5 Any two: USA, Netherlands, UK, Germany, European Union
(2 × 1) (2)
- [19]
- 4.5
- 4.5.1 Globalisation is the linking of the world's economies, societies
and technologies. (2)
- 4.5.2 Any four:
Migration: due to greater economic opportunities more people
are moving across international borders and being employed in
a global workforce.
Trade: globalisation has encouraged the liberalisation of trade.
It is easier for countries to trade and exchange goods.
Economic growth: globalisation has stimulated economic
growth as most countries have expanded their economies.
Transnational/multinational corporations: can locate in any
country where resources are available.
Communication: sharing of knowledge.
Open borders: free movement of people, goods and ideas.
(4 × 2) (8)
- 4.5.3 It undermines a country's identity. 13% of the world population
lives in Africa which only has 0,3% of global Internet connections.
Trade is still benefitting wealthy countries more than poorer
countries. (3 × 2) (6)
- 4.5.4 Free trade is international trade left to its own natural course
without tariffs, quotas or other restrictions. (2)
- [18]
- Total: 75 marks**

Answer all the questions.

Refer to the 1:50 000 topographical map of Pietermaritzburg 2930CB and the orthophoto.

1. Multiple choice questions. Write only the number and the letter.

1.1 The map code south of 2930BC is:

- A 2930DA
- B 2930BB
- C 3030DA
- D 2931BB

1.2 The area of the topographical map is:

- A 450 km²
- B 1 137 km²
- C 113,7 km²
- D 4500 km²

1.3 The magnetic declination for the present year is:

- A 22°48'West
- B 22°120'West
- C 24°48'West
- D 24°120'West

1.4 The true bearing from the trig. beacon on Town Hill [block C2] to trig. beacon 648 [block E3] is:

- A 122°
- B 58°
- C 136°
- D 22°

1.5 The land use found at 29°39'30"S; 30°24'30"E is:

- A main Road
- B secondary Road
- C recreational area
- D industrial area

1.6 The direction from Signal Hill [block D1] to Scottsville Race Course is:

- A north
- B north North East
- C east North East
- D north East

1.7 The land use at 29°34'30"S and 30°23'50"E is a:

- A cultivated land
- B a station
- C cemetery
- D orchards and vineyards

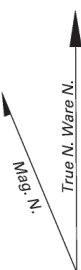
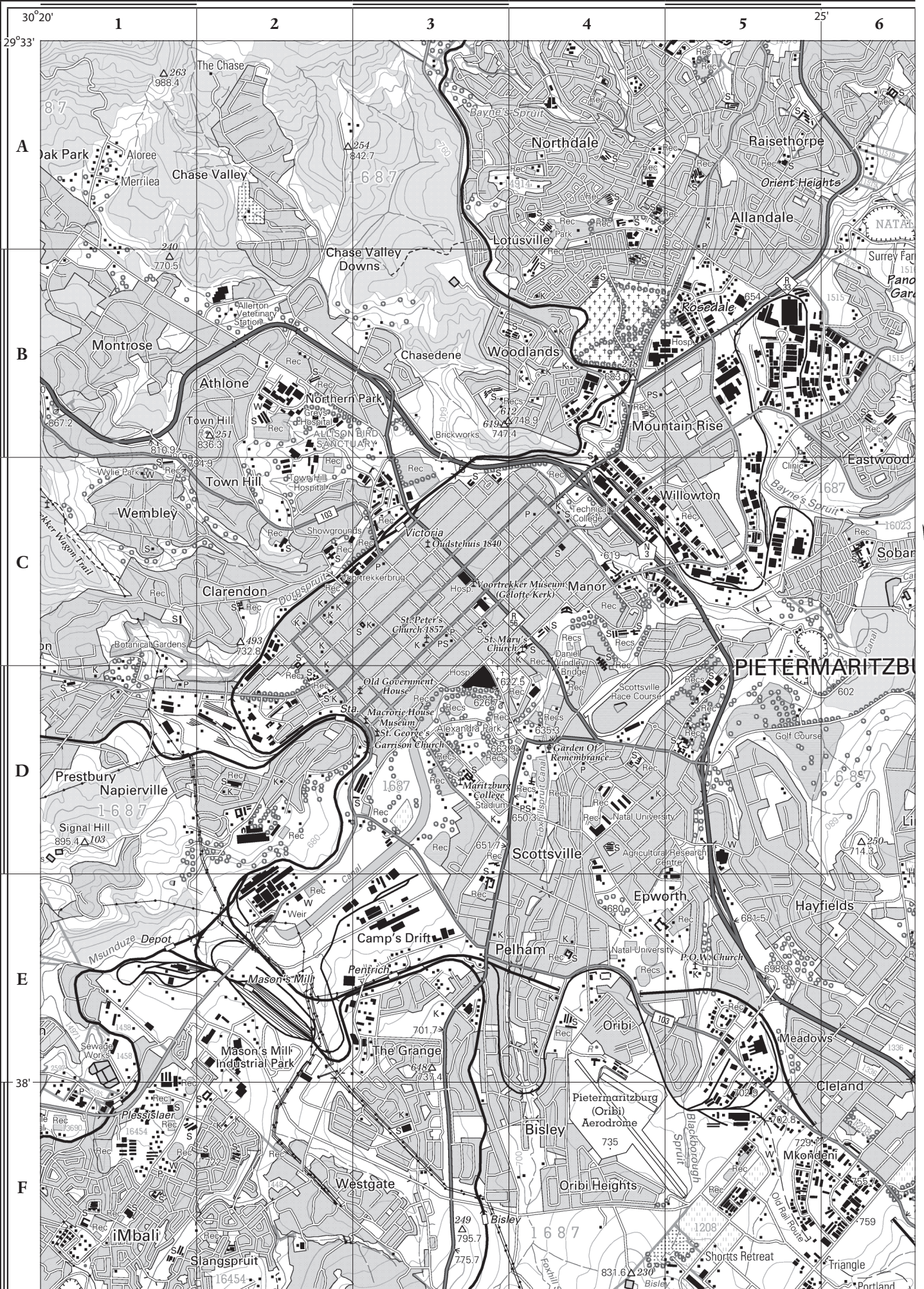
1.8 The scale of the topographical map is:

- A 5 times smaller than the orthophoto scale
- B 5 times bigger than the orthophoto scale
- C 10 times bigger than the orthophoto scale
- D 10 times smaller than the orthophoto scale

© You may photocopy this page for use with *Study & Master Geography Grade 11*.

- 1.9 The scale of the orthophoto map is:
 A 1:1 000
 B 1:5 000
 C 1:50 000
 D 1:10 000
- 1.10 The green area surrounding Pietermaritzburg is a:
 A state forest
 B game park
 C green belt
 D botanical garden (10 × 2)
 [20]
- 2.
- 2.1 What is the contour interval on the orthophoto map? (1 × 2) (2)
- 2.2 Give the grid references of the area of the topographical map covered by the orthophoto. (4 × 2) (8)
- 2.3 Calculate the distance on the orthophoto along Commercial Road from the Voortrekker Cemetery to the north edge of the map. Show your calculations. (2 × 2) (4)
- 2.4 What is the large semi-circle on the bottom left-hand corner of the map? (1 × 2) (2)
- 2.5 How would you identify a river flowing on the orthophoto? (1 × 2) (2)
- 2.6 How would you distinguish the business area from the residential area? (2 × 2) (4)
 [42]
- 3.
- 3.1 Calculate the gradient between trig. beacon 254 [block A2/3] and trig. beacon 263 [block A1]. (3 × 2) (6)
- 3.2 Give the magnetic bearing for the year 2012 from trig. beacon 254 [block A2/3] to trig. beacon 263 [block A1]. Show your calculations. (3 × 2) (6)
 [12]
- 4.
- 4.1 The black areas on the topographical map indicate industrial areas. Give three reasons you think this is a good location for industry. (3 × 1) (3)
- 4.2 How are buildings of historical significance indicated on the map? (1 × 2) (2)
- 4.3 Name three of these buildings. (3 × 1) (3)
 [8]
- 5.
- 5.1 Define the following terms:
 a. digitising
 b. buffering
 c. querying
 d. remote sensing
 e. scanning (5 × 2)
 [10]
- 5.2 The authorities would like to build a new primary school in Pietermaritzburg. If they used GIS to determine the feasibility of building a new school, what overlays would they need? (3 × 1) (3)
 [13]

Total: 75 marks



Contour Interval 20 Metres

© You may photocopy this page for use with Study & Master Geography Grade 11.



© You may photocopy this page for use with *Study & Master Geography Grade 11*.

Learners should answer all the questions.

1. Two marks for each correct answer.

- 1.1 A
- 1.2 C
- 1.3 C
- 1.4 A
- 1.5 B
- 1.6 C
- 1.7 C
- 1.8 A
- 1.9 D
- 1.10 C

(10 × 2)
[20]

2.

- 2.1 5 m (1 × 2) (2)
- 2.2 29°36'00"S to 29°37'00"S and 30°22'00"E to 30°23'00"E (4 × 2) (8)
- 2.3 10 cm × 0,1 = 1 km (2 × 2) (4)
- 2.4 a railway line (1 × 2) (2)
- 2.5 Trees and bush are located on the river banks. (1 × 2) (2)
- 2.6 The properties are smaller in residential areas. The buildings are larger in a business area. (2 × 2) (4)

[22]

3.

$$\begin{aligned} 3.1 \text{ Gradient} &= \frac{\text{Difference in height}}{\text{Horizontal distance}} \\ &= \frac{998,4 \text{ m} - 842,7}{4 \text{ cm}} \\ &= \frac{155,7 \text{ m}}{2 \text{ km}} \\ &= \frac{155,7 \text{ m}}{2\,000 \text{ m}} \\ &= \frac{1}{12,8} \end{aligned}$$

Gradient is 1:12,8 (3 × 2) (6)

3.2 Magnetic declination for 2012 is 24°48' W. True bearing is: 115°.

Magnetic bearing is 115° + 24°48' = 139°48' (3 × 2) (6)

[12]

- 4.
- 4.1 near the railway line, near the main roads, away from residential areas (3 × 1) (3)
- 4.2 They are written in a different font. (1 × 2) (2)
- 4.3 Any three, for example: Old Government House, Voortrekker Museum, St Peters Church (3 × 1) (3)
- [8]
- 5.
- 5.1 a. *Digitising*: Refers to the process through which analogue or hard copy data is captured and converted into digital form.
- b. *Buffering*: The process of creating areas within a specific distance from a selected point, line or polygon feature.
- c. *Querying*: This involves the user posing a question to the GIS database.
- d. *Remote sensing*: Collecting data without any physical contact with the area being surveyed.
- e. *Scanning*: An image is produced of an entire page or map in one process.
- (5 × 2) [10]
- 5.2 overlay of land use zones; overlay of population density; overlay of location of schools in Pietermaritzburg (3 × 1) (3)
- [13]
- Total: 75 marks**

4. RESOURCES

1. Useful websites	268
2. Photocopiable worksheets	269
3. Answers for photocopiable worksheets	318
4. Lesson plan template	334



1. USEFUL WEBSITES

The following websites are suggested for both you and the learners to consult. They contain information and features that would be of general use to you as a teaching tool for Geography Grade 11:

- <http://www.dailymail.co.uk/sciencetech/index.html>
- <http://www.geography4kids.com/index.html>
- <http://gis.com>
- <http://www.google.com/earth/index.html>
- <http://maps.google.co.za>
- <http://www.nasa.gov/home/index.html>
- <http://www.nationalgeographic.com>
- <http://www.un.org/en/development>
- <http://www.weathersa.co.za>

For website information that links specifically to the content of each module and unit, please consult the *Resources* section of the lessons in the *Lesson-by-lesson* section of this Teacher's Guide (pages 17–187).

	2. PHOTOCOPIABLE WORKSHEETS	
--	------------------------------------	--

The following worksheets may be photocopied for use with *Study & Master Geography Grade 11*. Please refer to the *Lesson-by-lesson* section of this Teacher's Guide for suggestions on when to use these worksheets. The remedial worksheets can also be used for revision purposes. Answers for the photocopiable worksheets are provided on pages 318–333 of this section.

1. Copy and complete the table that lists important lines of latitude.

Name	Degrees (North or South)	Description
		divides the Earth into two equal halves/hemispheres
		marks the outer boundary of the tropics in the Northern hemisphere
		marks the outer boundary of the tropics in the Southern hemisphere
		marks the boundary of the polar region in the Northern hemisphere
		marks the boundary of the polar region in the Southern hemisphere

2. On 22 December, the angle of the Sun at midday in Johannesburg is $87,5^\circ$.
On 21 June, the angle of the Sun at midday in Johannesburg is $40,5^\circ$.

a. Name and describe the event on 22 December.

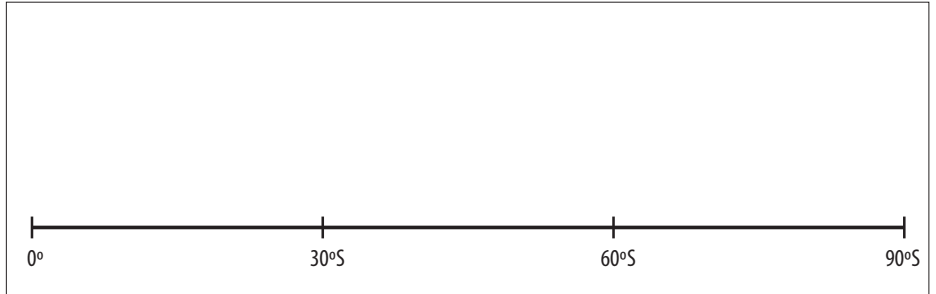
b. Name and describe the event on 21 June.

c. When is the Sun almost directly overhead in Johannesburg – in December or June?

d. When does Johannesburg receive maximum insolation – in December or June?

- e. Calculate the difference between the two angles. What is the significance of this value?

1. Fill in and label the three air circulation cells.



2. Look at Figure 1.2.14 in Unit 2 of Module 1 on page 33 of the Learner's Book and answer these questions.

a. What do H and L stand for?

b. In which direction does air move along a pressure gradient – from L to H or from H to L?

c. Fill in these in the right place below: Coriolis force, pressure gradient force, wind

• dotted yellow line =

• blue arrows =

• red arrows =

d. If the distance between H and L is 10 km, calculate the pressure gradient.

- e. Because the wind is deflected to the right, which hemisphere does this take place in?

- f. Draw the version for the opposite hemisphere.



© You may photocopy this page for use with *Study & Master Geography Grade 11*.

Read the feature and then answer the questions below.

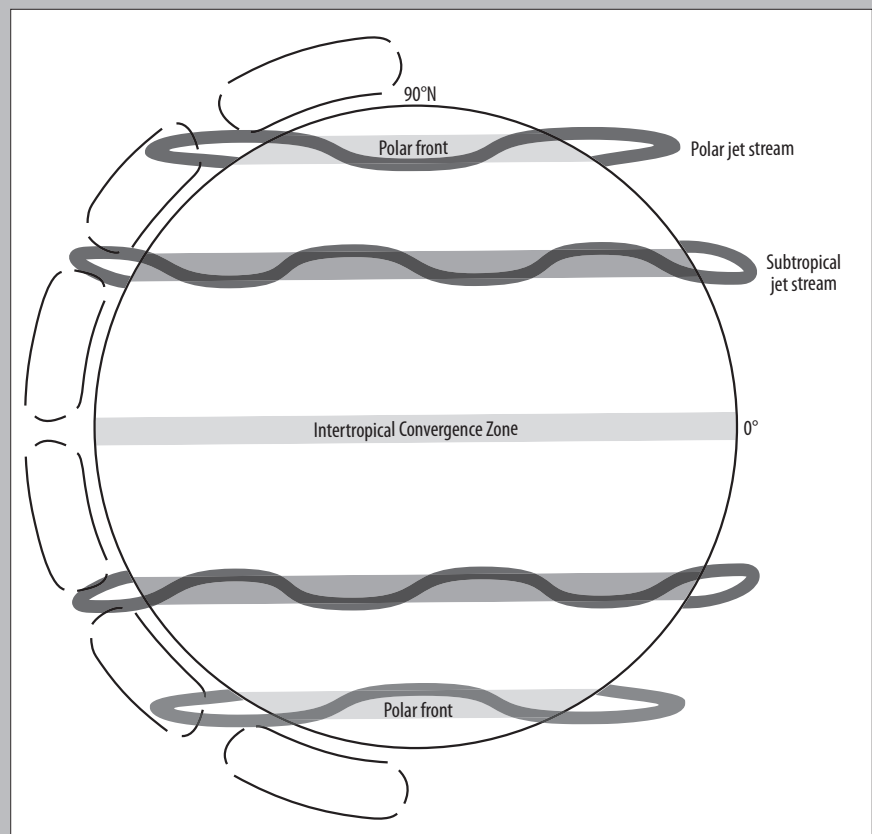
Why does a flight from Johannesburg or Durban to Cape Town usually take longer there than back?

Jet streams are high-altitude, high-speed winds. They can reach maximum speeds of almost $400 \text{ km}\cdot\text{h}^{-1}$ because they are not slowed down by friction against the Earth's surface like the surface prevailing winds are. There are four main jet streams – two in each hemisphere which blow West (i.e. from West to East):

- the stronger polar/mid-latitude jets near the 60° latitudes
- the weaker sub-tropical jets near the 30° latitudes.

Movement/migration of jet streams North or South are used to forecast the weather because they influence the movement of fronts.

Jet streams are important in aviation. They can reduce or increase flying time and fuel consumption. If you have travelled by plane from Johannesburg or Durban to Cape Town, for example, you might have noticed that the flight to Cape Town is slower than the flight back.



The four main jet streams

1. What is a jet stream? Give a brief explanation.

2. Refer to these flight times for a return trip from Durban to Cape Town on the same day. The prevailing ground wind for the day is northwest in Durban and southeast in Cape Town. The prevailing high-altitude wind is West.

	Flight time
Durban to Cape Town	2,0 hours
Cape Town to Durban	1,5 hours

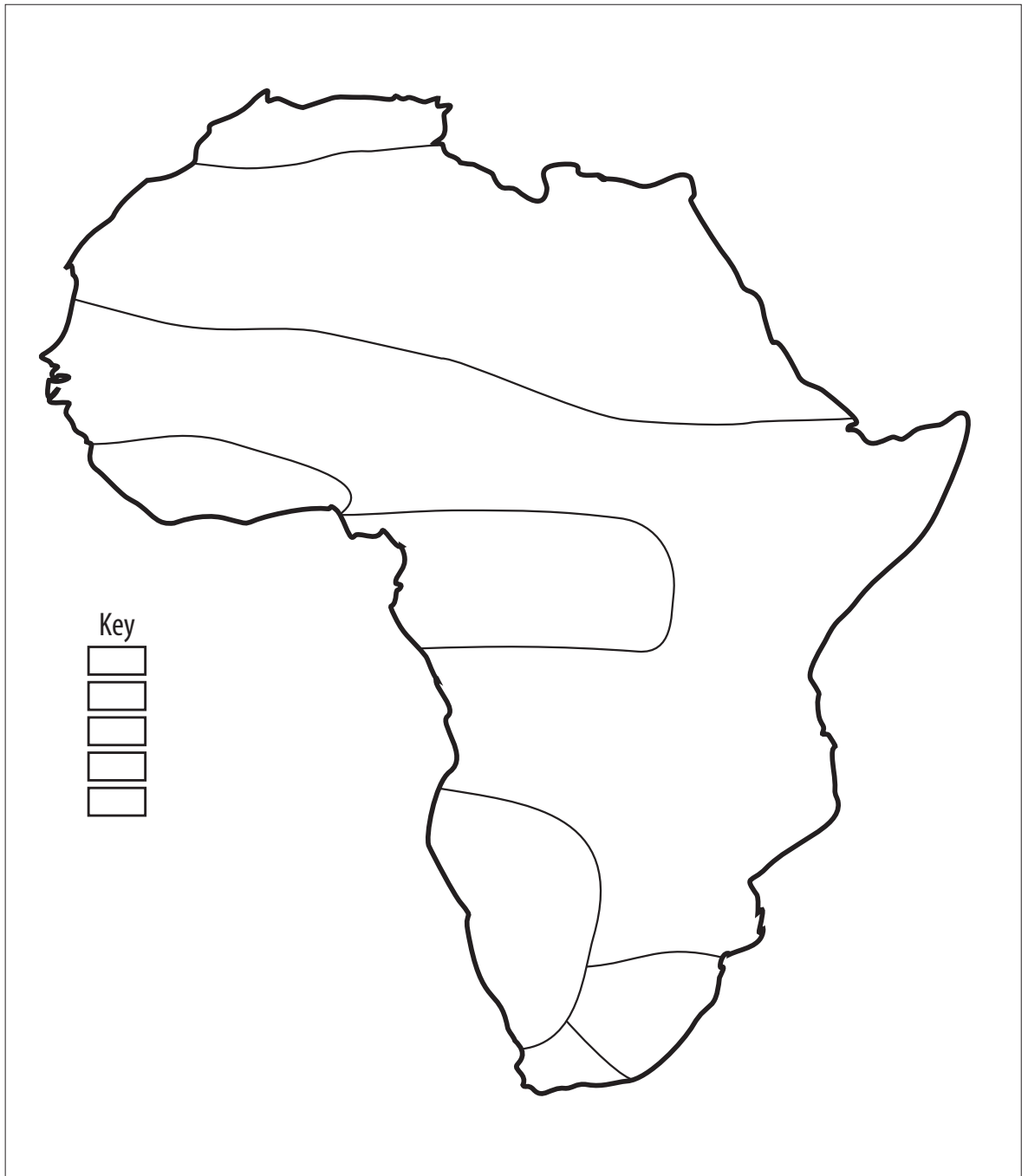
- a. Which wind affects the flying time – the ground winds or the high-altitude wind?

- b. Refer to the figure and identify the high-altitude wind.

- c. On which leg of the journey does the plane experience:
i. a tail wind (a wind that the plane flies with)

- ii. a head wind (a wind that the plane flies against)?

1. Indicate the different biomes of Africa on the map below. Shade each biome a different colour.
2. Give your map a key.



3. Complete the table below. Name and describe the different biomes and associated climatic regions of Africa.

Name of biome	Description of biome	Associated climatic region	Description of climatic region

Copy and complete the table.

	El Niño	La Niña
Trade winds are ...		
Equatorial current ...		
Effect on Pacific Ocean temperatures		
Where low pressure system develops and rain falls		
Effect on South Africa's weather		

Use the map of George 3322CD & 3422AB on pages 284 and 285 and Sections A–D of the orthophoto map 3322CD 25 George on pages 284–287 to answer the questions.

1. On the sketch map below indicate the following:
 - a. the situation of the George airport
 - b. the shortest distance from the airport to Fancourt
 - c. the Gwaing River and indicate the direction of flow
 - d. the borders covered by the orthophoto map
 - e. colour the N2 blue
 - f. the location of George Industria
 - g. the location of the sewerage works southwest of George.



© You may photocopy this page for use with *Study & Master Geography Grade 11*.

2. Identify the following features on the orthophoto map. Use the topographical map to help you.

a. A:

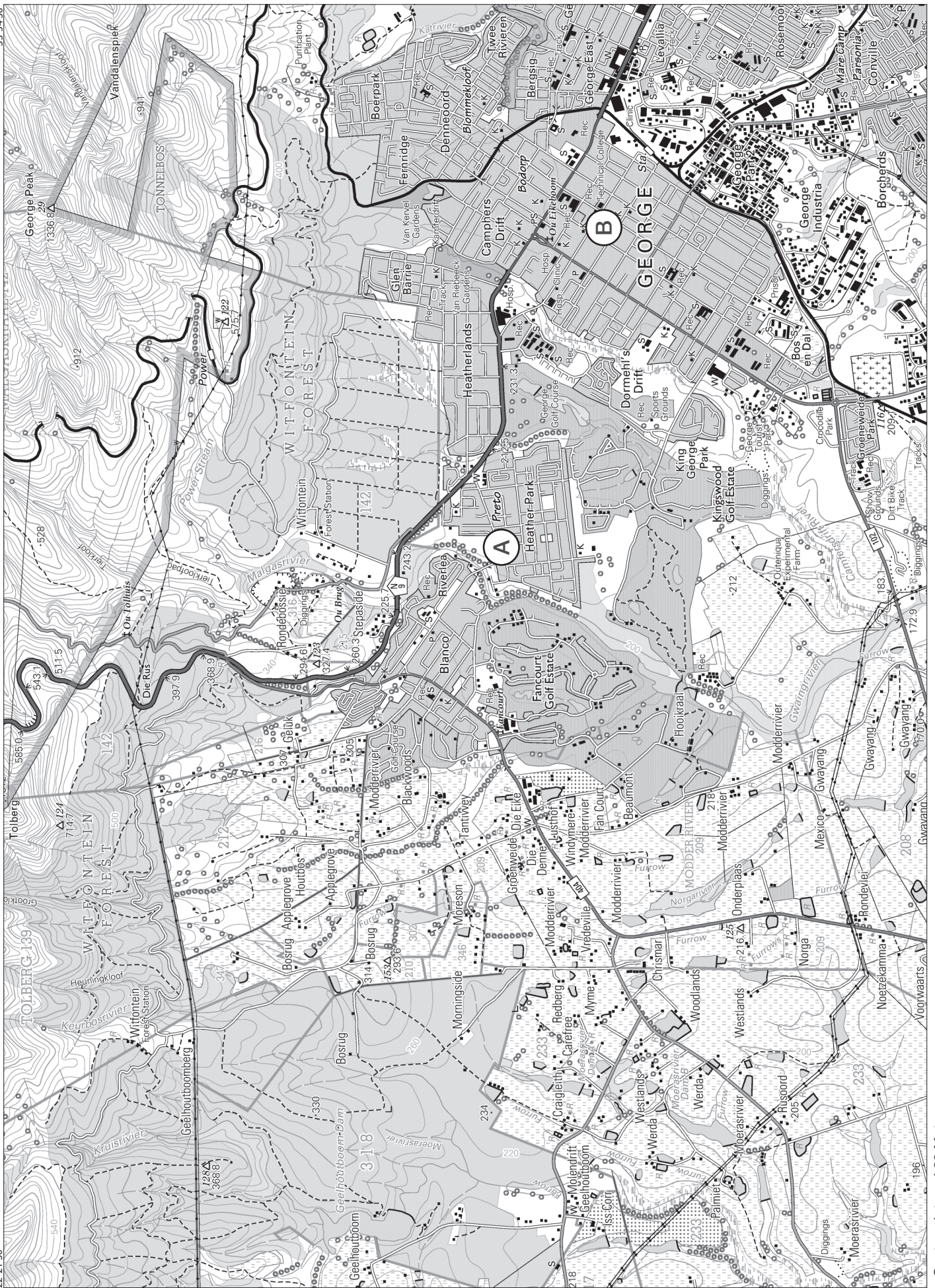
b. B:

c. C:

d. D:

e. E:

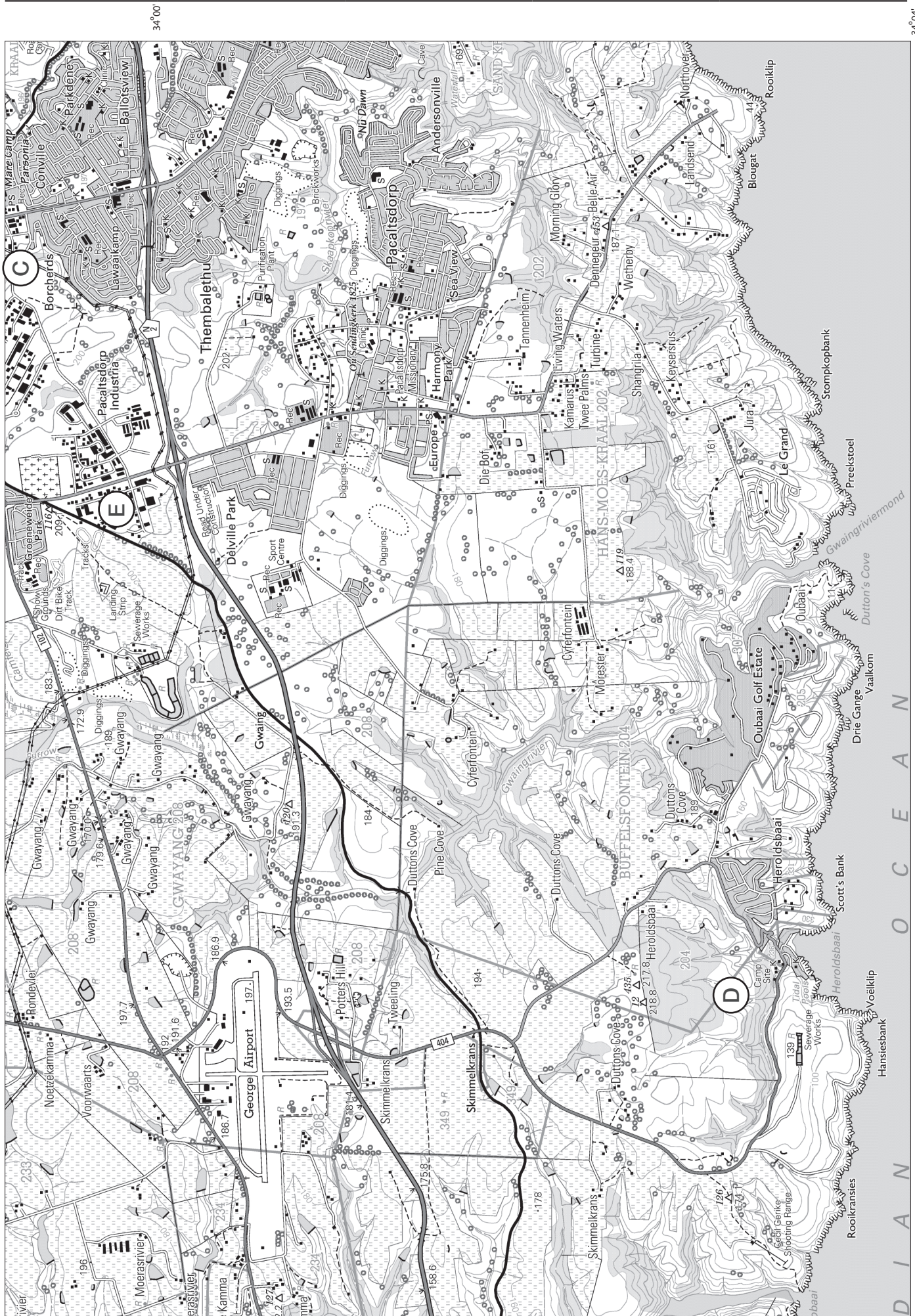
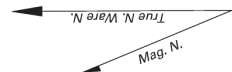
3. Describe three advantages of orthophoto maps.



© You may photocopy this page for use with *Study & Master Geography Grade 11.*

Contour Interval 20 Metres

Contour Interval 20 Metres



© You may photocopy this page for use with Study & Master Geography Grade 11.

34°00'

34°04'

22°29'30"

25'

22°21'30"

D I A N O C E A N



Gauss Conform Projection. Central Meridian 23° East

Contour Interval 5 Metres
Grid Interval 1 000 Metres

A © You may photocopy this page for use with *Study & Master Geography Grade 11*.



Gauss Conform Projection: Central Meridian 23° East

Contour Interval 5 Metres
Grid Interval 1 000 Metres

B

© You may photocopy this page for use with *Study & Master Geography Grade 11*.



C

© You may photocopy this page for use with *Study & Master Geography Grade 11*.



+53Y Groot-Bakrivier Mosselrivier +52Y

tion. Central Meridian 23° East

1 : 10 000

Gauss Konforme Projeksie. Middelmeridiaan 23° Oos

Interval 5 Metres

Kontoertussenruimte 5 Meter

Interval 1 000 Metres

Ruittussenruimte 1 000 Meter



D

© You may photocopy this page for use with *Study & Master Geography Grade 11.*

Worksheet 8 (remedial)

Topography associated with horizontally layered rocks

1. Refer to Figures 3.1.5 (page 115), 3.1.7 (page 116) and 3.1.13 (page 120) in the Learner's Book. Write a short description or caption for each of the stages.

a. Hilly landscapes

Young:

Mature:

Old:

b. Basaltic plateaus

Young:

Mature:

Old:

c. Canyon and Karoo landscapes

Young:

Mature:

Old:

2. Refer to the section, 'How do people use these landscapes?' on page 123 of the Learner's Book. Complete the summary table below.

	Hilly landscapes	Basaltic plateaus	Canyon landscapes	Karoo landscapes
Strata of equal/unequal resistance				
Climate				
Use				

Worksheet 9 (remedial)

Topography associated with inclined/tilted rock strata

1. Match the labels to a number on the diagrams:
folding, faulting, syncline, anticline, normal fault, thrust fault, dip slope, scarp slope, resistant rock, less resistant rock.

1.

3.

2.

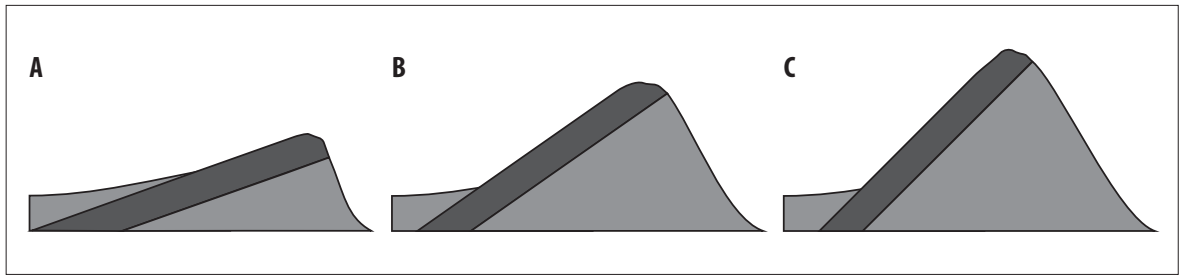
8.

9.

10.

1. _____
2. _____
3. _____
4. _____
5. _____
6. _____
7. _____
8. _____
9. _____
10. _____

2. a. Identify ridges A–C.



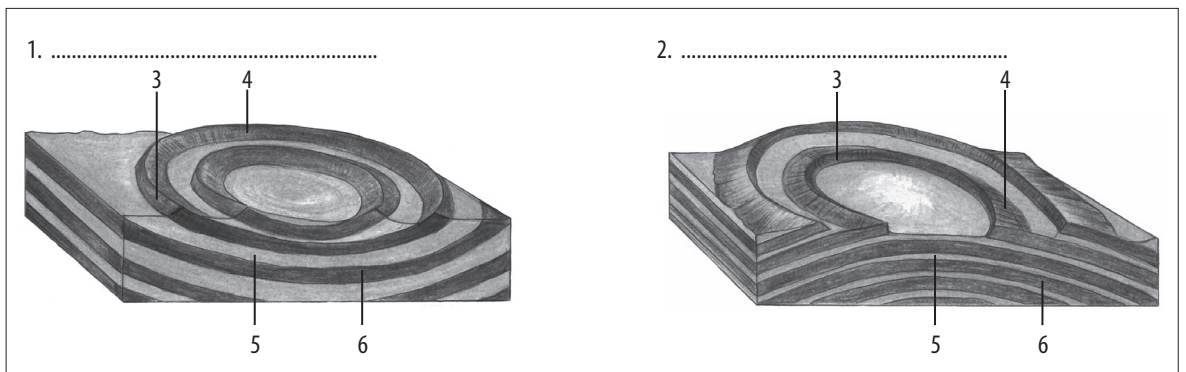
A.

B.

C.

b. Match each of these examples: San Rafael Swell, Hogsback Mountain Peak, Magaliesberg.

3. a. Match the labels to a number on the diagram:
cuesta basin, cuesta dome, scarp slope, dip slope, resistant rock, less resistant rock.



1.

2.

3.

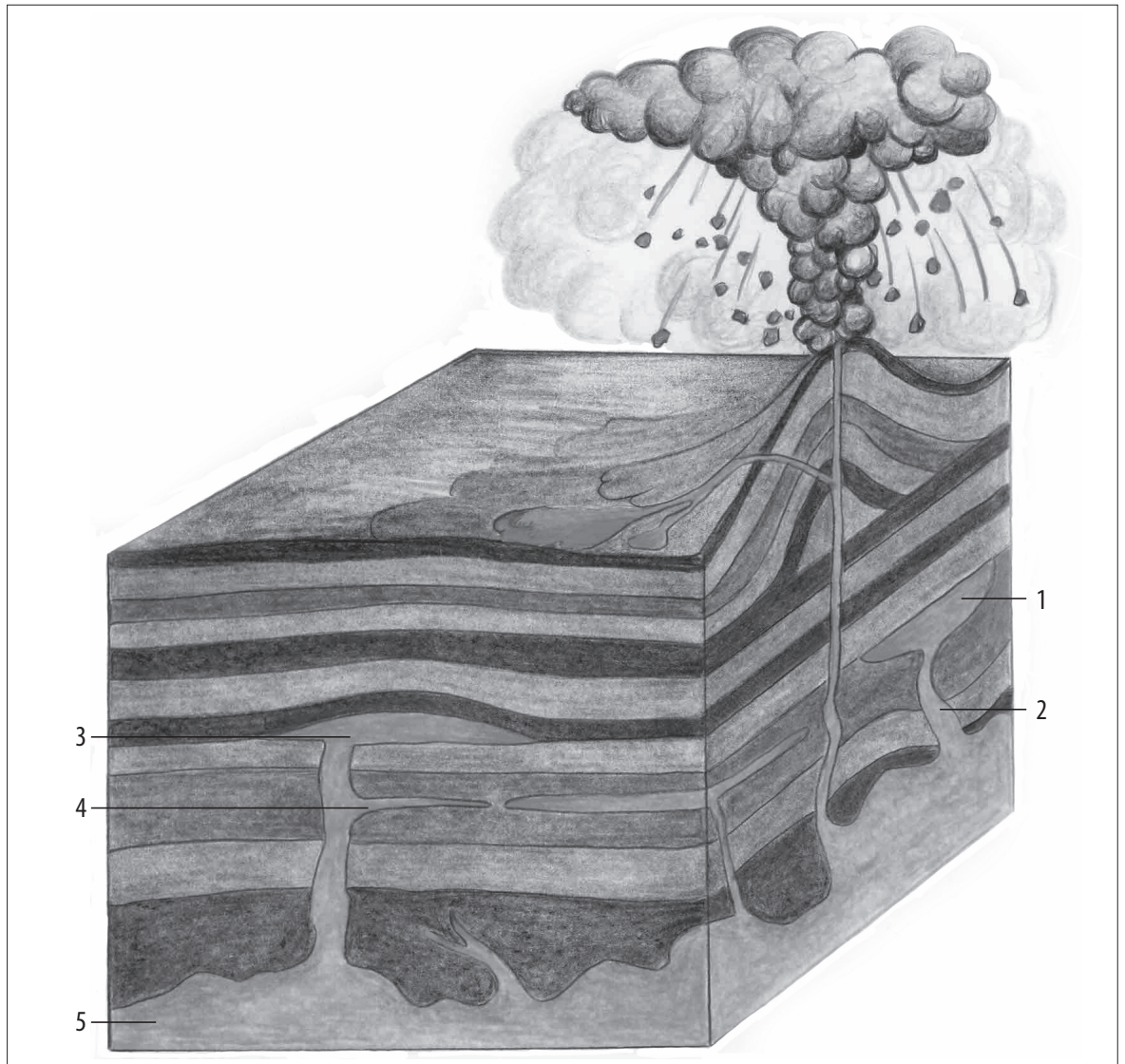
4.

5.

6.

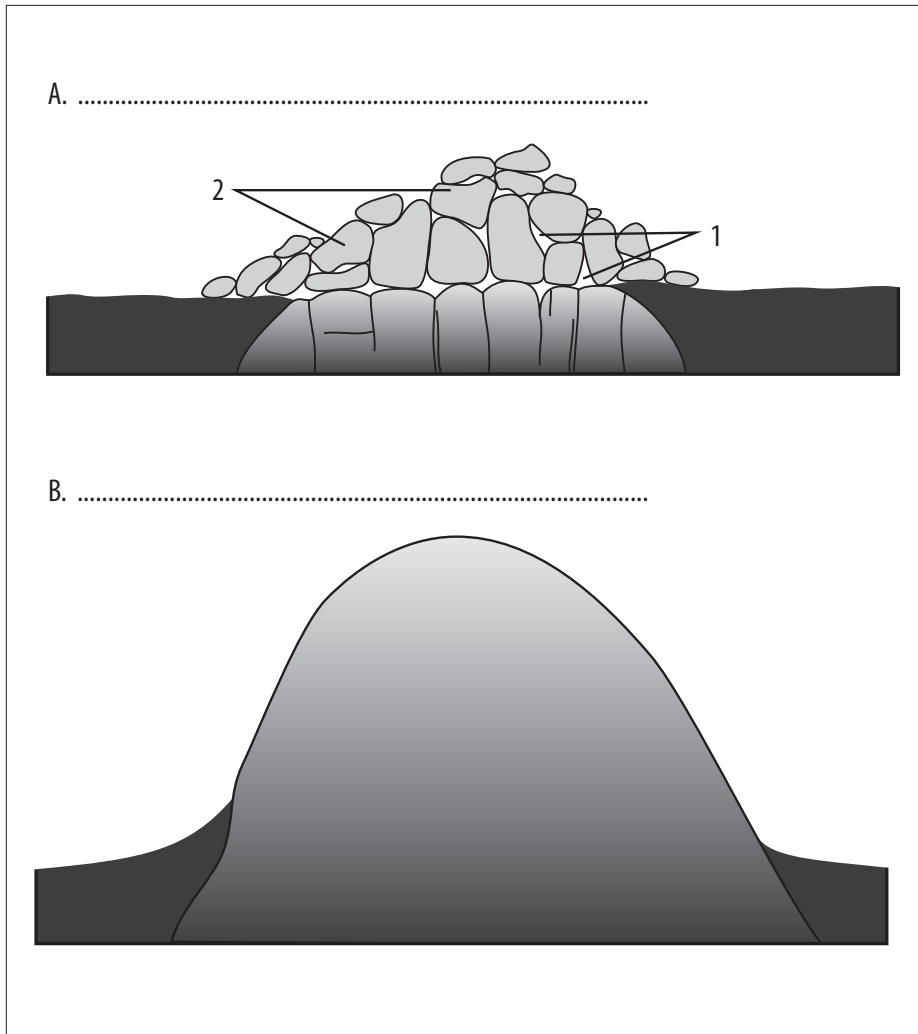
- b. Complete these statements by underlining the correct word/option in the brackets.
- i. In a cuesta dome, the (youngest/oldest) rock layers are in the centre and the (youngest/oldest) rock layers are on the outside.
 - ii. In a cuesta basin, the (youngest/oldest) rock layers are in the centre and the (youngest/oldest) rock layers are on the outside.

1. Identify the igneous intrusions and match them to these examples: Tierra del Fuego, Bannerman's Pass, Howick Falls, Great Dyke of Zimbabwe, Sibebe Rock, Bushveld Igneous Complex, Golden Valley.



1. _____
2. _____
3. _____
4. _____
5. _____

2. Identify each of the geological features and fill in the missing labels.



A. _____

Label 1: _____

B. _____

Label 2: _____

1. Read the extract on Paarl Rock.

Paarl Rock

In 1657, while Abraham Gabemma was searching for additional meat resources for the new Dutch settlement at the Cape of Good Hope, he saw a giant granite rock glistening in the Sun after a rainstorm and named it 'de Diamondt en de Peerlberg' (Diamond and Pearl Mountain). The 'diamonds' soon disappeared from the name and it became simply known as Paarl Mountain or Paarl Rock. The fertile soil and the Mediterranean climate of this region provided perfect conditions for farming. The settlers planted vineyards, which today produce some of the best red wines in the world.

Paarl Mountain is a granite mountain and is known to have intruded into the crust of the Earth about 548 million years ago. This intrusion also known as a batholith, is one of many intrusions of the Cape Granite.

Because Paarl Rock is made of granite which is a type of volcanic intrusive rock, it is hard and tough and has gained widespread use as construction stone. Granite is an igneous rock formed below the Earth's surface by crystallisation of molten rock known as magma. During the crystallisation process the characteristic chemical composition of all granite magmas produces basically three distinctive minerals, namely feldspar, quartz and mica.

The huge rounded granite domes that crown Paarl Mountain are magnificent examples of the geological process known as exfoliation, the tendency for granite to develop onion skin-like cracks as the surface layers of the Earth's crust are successively eroded away, releasing the pressure that compressed the granite, allowing the granite to expand, and causing huge concentric cracks as a result. Granite is a natural source of radiation, like most natural stones. However, some granites have been reported to have higher radioactivity thereby raising some concerns about their safety.

Source: www.geocaching.com

2. Answer the following questions:
 - a. Where does the word 'Paarl Rock' come from?

b. How long ago did it form?

c. What type of landform is Paarl Rock?

d. Describe the formation of this landform.

e. Paarl Rock is made of granite. Name the three minerals found in granite and give the colour of each one.

f. Explain what determines the size of the quartz crystals in granite.

g. Exfoliation takes place on Paarl Rock. Describe this process of weathering.

h. Of what use is Paarl Rock to the inhabitants of Paarl?

i. How is granite used in everyday life?

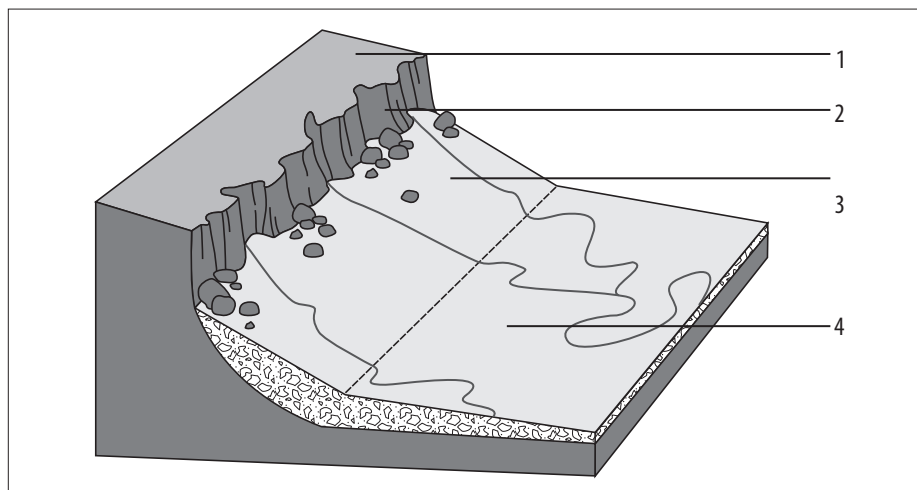
j. What could be of concern to the inhabitants of Paarl?

1. a. Complete the table that lists four features of South Africa's topography.

Feature	Description/Definition
1.	
2.	
3.	
4.	

- b. Which of these mountains are Cape Fold Mountains: Roggeveld, Cederberg, Drakensberg, Langeberg?

2. Supply the missing labels for the slope elements.

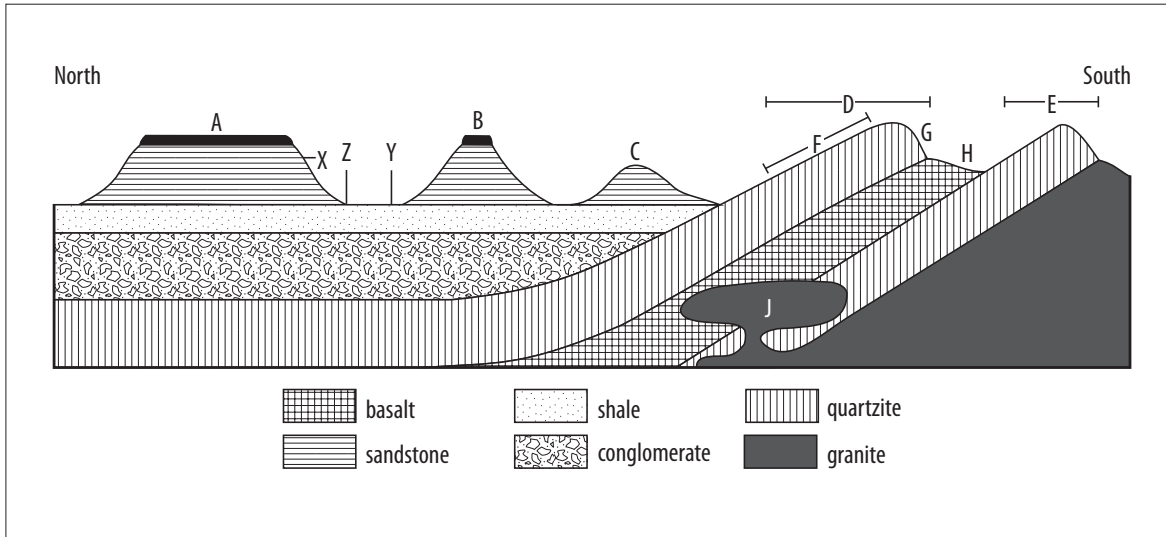


1. _____
2. _____
3. _____
4. _____

3. Look at Figure 3.1.12 on page 119 of the Learner's Book.
- Estimate the angle of repose for the resistant rock.

- Estimate the angle of repose for the less resistant rock.

1. Refer to the diagram below and answer the questions that follow.



a. Identify the landforms A, B and C.

b. What type of geological rock strata is associated with these landforms?

c. Describe the formation of landforms A, B and C.

- d. Draw a diagram illustrating the various types of slope forms found on the feature marked B.



- e. Give one characteristic of each of the slope forms you have drawn.

- f. Identify landforms D and E.


- g. What type of geological rock strata is associated with these landforms?

- h. Describe the formation of landforms D and E.

- i. Identify the slopes F and G and describe the difference between these two slopes.

- j. Identify the landform J and discuss the formation of this landform.

2. Identify the landform C in the diagrams below and discuss its formation.



1. Complete the table by filling in the type of mass movement.

Type of mass movement	Definition
	drop of slope material along a spoon-shaped slippage plane
	slow flow of saturated soil in cold regions
	sudden mass movement; a combination of slump and debris flow
	free fall of rock
	very slow movement of individual particles
	fast flow of fine sand particles and water

2. List three signs of soil creep.

3. Refer to Figure 3.5.13 on page 162 in the Learner's Book.

a. Give two reasons why the landslide risk is high in Limpopo Province.

b. Identify an area on the map where the risk is very high but there have been no landslide incidents.

c. Identify the area with the highest number of landslide incidents.

Refer to Figure 3.5.13 on page 162 in the Learner's Book.

1. The term 'landslide' is used loosely here. Which types of mass movements are a significant geohazard?

2. The GIS landslide hazard map is produced by overlaying or combining different sets of data or information. Comment on how each of these factors or sets of information contributes to the risk:

- a. rock type

- b. rainfall

- c. slope angle

- d. seismic activity

3. Explain how the information in a landslide hazard map is useful to:
- a. town planners

- b. civil engineers

4. The map shows incidents of landslides on roads.
- a. Give two reasons why mass movements on roads is a problem.

- b. Explain how the construction of roads on slopes can cause mass movements.

Worksheet 16 (remedial)

Geographical and Information Systems

1. Match the concepts in Column A with Column B. Write only the letter.

Column A		Column B	
1.	GIS	A.	The process of creating areas within a specific distance from a selected point, line or polygon feature.
2.	digitising	B.	This involves the user posing a question to the GIS database.
3.	scanning	C.	Involves overlaying of two or more datasets in order to remove, combine, change or update the features by forming a new dataset.
4.	remote sensing	D.	Clipping the necessary features from one dataset and either combining it with another existing entity layer or creating a new one.
5.	pre-processing	E.	Collecting data without any physical contact with the area being surveyed.
6.	querying	F.	The actions or transformations that need to be performed on the data before viewing and analysing the information.
7.	buffering	G.	Refers to the process through which analogue or hard copy data is captured and converted into a digital form.
8.	clipping and merging	H.	A computer-based tool that combines several functions: storage, display, analysis, and mapping of spatially-referenced data.
9.	feature overlay	I.	Calculates geographical position using satellites.
10.	GPS	J.	An image is produced of an entire page or map in one process.

1. Define the following terms:

a. development

b. economically developed

c. developing countries

d. sustainable development

2. Describe the difference between less developed and more developed countries in terms of:

a. infrastructure

5. How does economic development in South Africa reflect elements of Rostow's Model?

6. In the 1960s and 1970s the Nationalist government decided that there was an overconcentration of economic activities and people in core areas of South Africa. They developed the National Physical Development Plan 1975.

a. Describe this plan.

b. How did this plan contradict the policies of apartheid?

7. Discuss the Basic Needs Approach and the Reconstruction and Development Programme.

8. What is meant by the Gender Development Index (GDI)?

9. Discuss three ways in which women around the world have been discriminated against.

10. Do you think gender discrimination is still evident in South Africa? Explain your answer.

1. Read the following.

Globalisation and development

From the perspective of poorest countries, undemocratic global governance has allowed the economic dimension of globalisation to dance to the tune of big business. Globalisation not only distributes its favours too unevenly, but also accelerates patterns of unsustainable consumption. Recent financial chaos may prompt world leaders to be more conscious of the complex social and environmental consequences of unrestrained markets.

Winners and losers

Globalisation has drawn attention to itself as a consequence of rapid acceleration. The spread and integration of people, commerce, knowledge and culture across the planet has advanced since the dawn of civilisation.

It is only over the most recent generation that, driven by wonders of microchip technology and the efficiency of container shipping, the intensity of globalisation has delivered controversial results.

Source: Globalisation and Development Guide uk.oneworld.net

2. Define globalisation.

3. What does the heading, 'Winners and losers' refer to?

4. On a separate sheet of paper, write a one page essay on the anti-globalisation movement. Your essay should include:
 - a. a meaningful title
 - b. an introduction, body and conclusion
 - c. recent and relevant facts and examples.

© You may photocopy this page for use with *Study & Master Geography Grade 11*.

1. Define the following terms:

a. natural resources

b. human resources

c. renewable resources

d. non-renewable resources

2. Name four renewable resources in Africa.

3. If Africa is so rich in these renewable resources then why do we have problems with food security, poverty and lack of water?

4. Name four important non-renewable resources in Africa.

5. What are the economic advantages of these non-renewable resources for Africa?

6. How can countries in Africa improve the contribution of mining to the GDP?

7. There are two approaches to the management of resources. Define:
a. resource conservation

b. resource preservation

8. What are transfrontier parks?

9. Why are there often land-use conflicts in national parks?

10. Describe three essential values and attitudes that should be embraced when dealing with the management of resources.

1. Read the article below.

Durban 2011: Deal or no deal?

In five days time world leader and international delegates will descend on Durban in South Africa for the next round of global climate talks. COP 17. After the disappointment of the Copenhagen talks in 2009 and dubious progress at last year's talks at Cancun, senior negotiators are already dampening expectations that a meaningful deal can be achieved.

Whilst it would be fantastic for the international community to commit to a legally binding agreement to supersede the Kyoto Protocol, most do not expect to see a new treaty. Perhaps a more realistic step in the right direction would be an agreement to work on a successor to Kyoto. But it's not just about the detail of whatever treaty comes out – it's about politicians sending a clear signal about the world's commitment to reducing emissions.

A multilateral deal is one way to approach climate change that we must not give up on. But if the talks next week do fail, it shouldn't be an excuse for efforts here in the UK to fade. Strong political leadership at a national and regional level can go a long way towards delivering similar benefits. It's important to continue to work hard on decarbonising the UK energy sector, convincing politicians that it's possible to decouple economic growth and emissions. Investing in renewable energy offers an opportunity to reduce carbon emissions and improve energy security in a sustainable way.

Earlier this month the International Energy Agency warned that there is just five years remaining to cut greenhouse gas emissions to avert 'irreversible' climate change. Whatever happens in Durban, there is no doubt that the clock is ticking and time is running out.

Source: www.goodenergy.co.uk

2. On a separate sheet of paper, write a page to explain the link between energy use, carbon emissions and climate change.
3. Write a paragraph outlining the agreement that was signed at the Kyoto Protocol in Japan in 1997.

3. ANSWERS FOR PHOTOCOPIABLE WORKSHEETS

Worksheet 1 on
page 270

Worksheet 1 (remedial)

ANSWERS

The Earth's energy balance

1.

Name	Degrees (North or South)	Description
equator	0°	divides the Earth into two equal halves/hemispheres
Tropic of Cancer	23,5°N	marks the outer boundary of the tropics in the Northern hemisphere
Tropic of Capricorn	23,5°S	marks the outer boundary of the tropics in the Southern hemisphere
Arctic Circle	66,5°N	marks the boundary of the polar region in the Northern hemisphere
Antarctic Circle	66,5°S	marks the boundary of the polar region in the Southern hemisphere

2. a. summer solstice – the Sun is over the Tropic of Capricorn
 b. winter solstice – the Sun is over the Tropic of Cancer
 c. December
 d. December
 e. $87,5^\circ - 40,5^\circ = 47^\circ$; this is $2 \times$ the tilt of the Earth's axis i.e. $2 \times 23,5^\circ$

Worksheet 2 on
page 272

Worksheet 2 (extension)

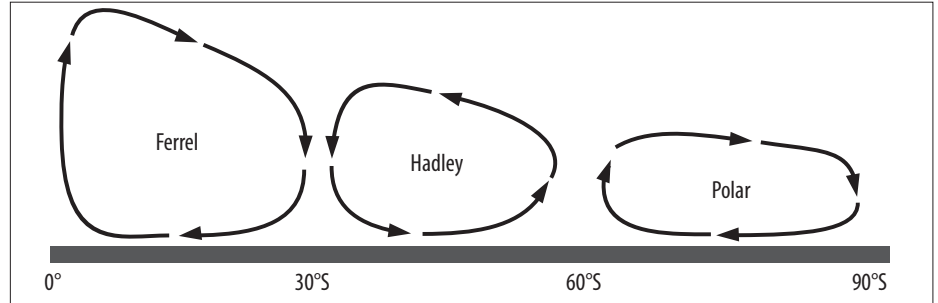
ANSWERS

The Earth's energy balance

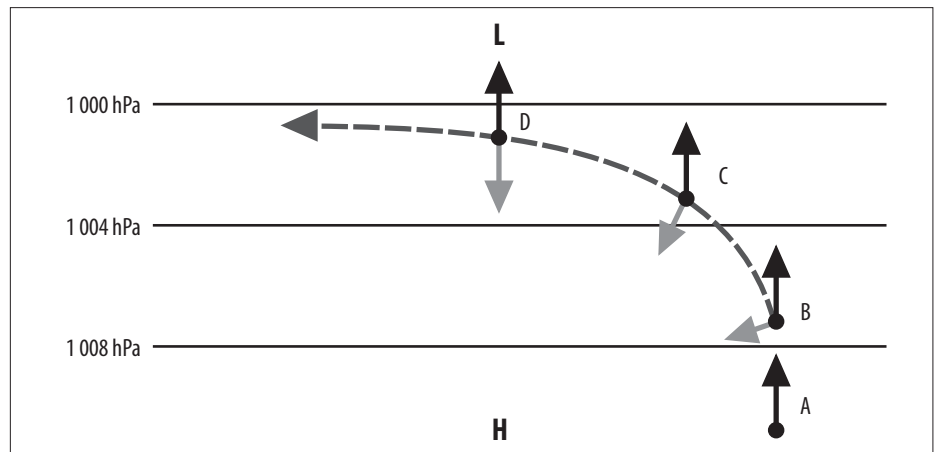
- The effect of the Earth's tilt is that one hemisphere is more exposed to the Sun than the other. This means that the Northern and Southern hemisphere always experience opposite seasons.
- During the Southern hemisphere's summer, the Southern hemisphere is tilted towards the Sun and, during the Southern Hemisphere's winter, the Southern hemisphere is tilted away from the Sun.
- The solstices and equinoxes mark the Earth's progress as it revolves around the Sun. As the Earth revolves around the Sun, it rotates on its own axis once every 24 hours. The time in the year or season determines the length of day and how high the Sun is in the sky at midday.
- The solstice marks the longest and shortest days in the year and the middle of the summer and winter seasons.
- The equinox marks the time when day and night are equal in length and the middle of the spring and autumn seasons.
- In one year there are two solstices and two equinoxes.
- At the time of the solstices, the Sun is either directly overhead the Tropic of Cancer (June solstice) or the Tropic of Capricorn (December solstice).
- At the time of the equinoxes, the Sun is directly over the equator producing a March equinox and a September equinox.

© You may photocopy this page for use with *Study & Master Geography Grade 11*.

1.

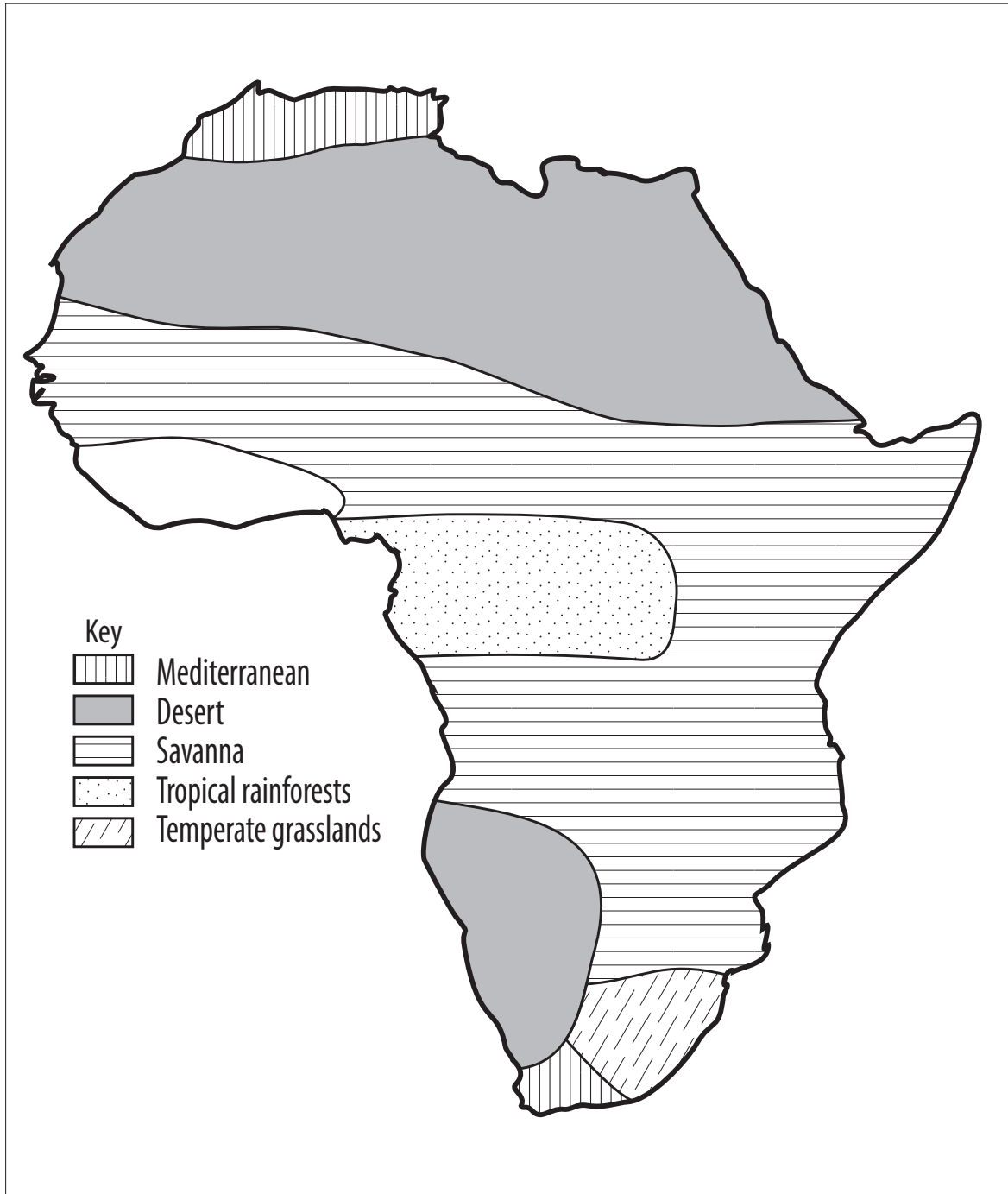


2. a. H = high pressure; L = low pressure
- b. from H to L
- c. dotted yellow line = wind; blue arrows = pressure gradient force; red arrows = Coriolis force
- d. $(1\ 008 - 1\ 000)\text{hPa}/10\ \text{km} = 0,8\ \text{hPa}/\text{km}$
- e. Northern hemisphere
- f.



1. A jet stream is a high-altitude, high speed wind that forms at the boundaries of the global air circulation cells.
2. a. high-altitude wind
- b. subtropical jet stream
- c. i. Cape Town to Durban
- ii. Durban to Cape Town

1. and 2.

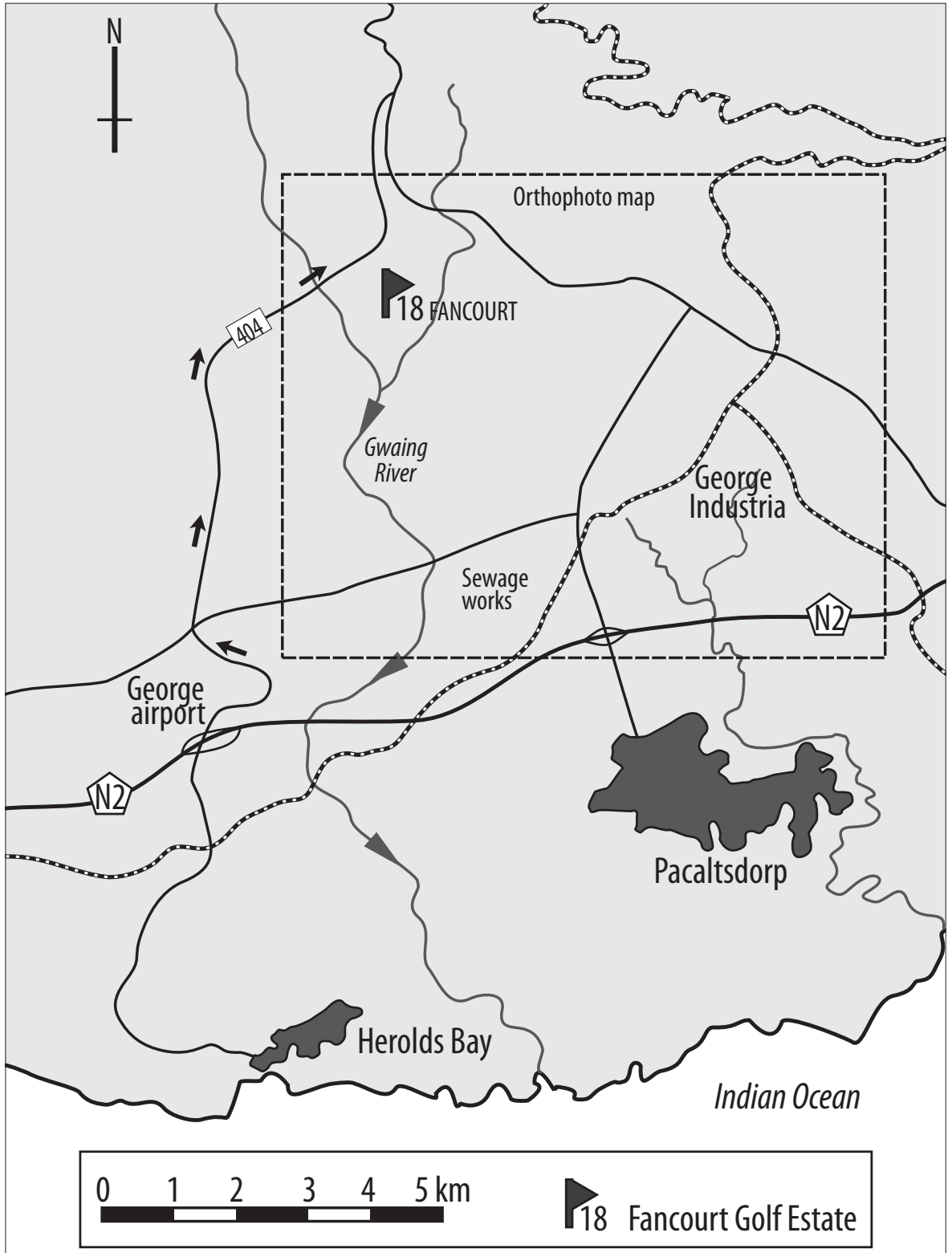


3.

Name of biome	Description of biome	Associated climatic region	Description of climatic region
Fynbos biome	evergreen woodland and shrubs; plants have adapted to the dry summers	Mediterranean climate	dry summers and wet winters
Grassland biome	mainly grasses with a few scattered trees	dry mid-latitude climate	warm summers and cold winters; generally dry
Savannah biome	scattered trees, shrubs and grass; grass turns brown in the dry winter and trees lose their leaves in winter	wet-dry tropical climate	semi-dry with seasonal rain/a short season of rain once a year
Desert biome	scrub, thorn bushes and succulents which have adapted to the very dry conditions	dry tropical climate	hot, dry, low rainfall and mild winters
Tropical rainforests	tall evergreen trees, ferns, creepers and epiphytes	tropical moist climate	hot throughout the year with high rainfall

	El Niño	La Niña
Trade winds are ...	weaker; reversed	stronger
Equatorial current ...	carries warm water East	carries warm water further West
Effect on Pacific Ocean temperatures	water is warmer than normal in eastern tropical Pacific Ocean; warmer than in the tropical western Pacific Ocean	water is colder than normal in the eastern Pacific Ocean; colder than western Pacific Ocean
Where low pressure system develops and rain falls	over western Pacific Ocean	over eastern Pacific Ocean
Effect on South Africa's weather	hotter, drier summers in some/eastern parts of country	wetter, milder summers in some/eastern parts of country

1.



2.
 - a. A: Heather Park
 - b. B: sportsground
 - c. C: a dam
 - d. D: Camphersdrift River
 - e. E: industrial area

3. They are much cheaper to produce than conventional maps. The larger scale allows for more detailed study. They are easier to update than conventional maps.

Worksheet 8 on page 288	Worksheet 8 (remedial)
ANSWERS	Topography associated with horizontally layered rocks

1.
 - a. Hilly landscapes
 Young: Rivers dissect the area.
 Mature: Rivers widen the valleys.
 Old: Area is eroded/denuded into a flat and featureless peneplain.
 - b. Basaltic plateaus
 Young: Volcanic activity produces a flood basalt which covers the area.
 Mature: Rivers dissect the area.
 Old: Remnants of the basalt are left – blocks of basalt with steep sides or cliffs.
 - c. Canyon and Karoo landscapes
 Young: The area is uplifted; this gives rivers more eroding power. Rivers cut downward.
 Mature: A canon valley forms with deep, steep sides.
 Old: The plateaus are eroded away to form a Karoo landscape with mesas and buttes.

- 2.

	Hilly landscapes	Basaltic plateaus	Canyon landscapes	Karoo landscapes
Strata of equal/unequal resistance	equal resistance	equal resistance	unequal resistance	unequal resistance
Climate	warm, humid	no particular climate	semi-arid	semi-arid
Use	settlement – homes and farming	tourist attraction for hiking; or farming (if suitable)	tourist attraction	sheep farming

Worksheet 9 (remedial)

ANSWERS

Topography associated with inclined/tilted rock strata

- 1 = folding; 2 = syncline; 3 = anticline; 4 = dip slope; 5 = scarp slope; 6 = resistant rock; 7 = less resistant rock; 8 = faulting; 9 = thrust fault; 10 = normal fault
- A = cuesta, e.g. Magaliesberg
B = hogsback, e.g. Hogsback Mountain Peak
C = homoclinal ridge, e.g. San Rafael Swell
- a. 1 = cuesta basin; 2 = cuesta dome; 3 = scarp slope; 4 = dip slope; 5 = less resistant rock; 6 = resistant rock
b. i. oldest; youngest
ii. youngest; oldest

Worksheet 10 (remedial)

ANSWERS

Topography associated with massive igneous rocks

- 1 = lopolith, e.g. Great Dyke of Zimbabwe, Bushveld Igneous Complex
2 = dyke, e.g. Bannerman's Pass
3 = laccolith, e.g. Tierra del Fuego
4 = sill, e.g. Howick Falls, Golden Valley
5 = batholith, e.g. Sibebe Rock
- A = tor; B = granite dome; 1 = joint; 2 = core stone

Worksheet 11 (extension)

ANSWERS

Geomorphology

- a. In 1657, while Abraham Gabemma was searching for additional meat resources for the new Dutch settlement at the Cape of Good Hope, he saw a giant granite rock glistening in the Sun after a rain storm and named it 'de Diamondt en de Peerlberg' (Diamond and Pearl Mountain). The 'diamonds' soon disappeared from the name and it became simply known as Paarl Mountain or Paarl Rock.
b. 548 million years ago
c. batholith
d. Magma solidified within the Earth's crust and was later exposed on the surface of the Earth as the overlying layers were eroded away resulting in a batholith.
e. feldspar – white; mica – black; quartz – pink or white crystals
f. The slower the rate of cooling the larger the quartz crystal.

- g. The tendency for granite to develop onion skin-like cracks as the surface layers of the Earth's crust are successively eroded away, releasing the pressure that compressed the granite, allowing the granite to expand, and causing huge concentric cracks as a result.
- h. Igneous rock produces very fertile soil for farming. Paarl produces excellent wine from vineyards; Paarl Rock is a tourist attraction in the Western Cape; dams have been built on top of the batholiths to trap water which can easily be released to the settlement.
- i. construction; facades of buildings; kitchen countertops; monuments
- j. exposure to radiation

Worksheet 12 on page 298	Worksheet 12 (remedial)
ANSWERS	Slopes

1. a.

Feature	Description/Definition
1. interior plateau	high-lying, relatively flat region
2. Great Escarpment	long mountainous edge of the plateau that divides highland and lowland
3. Cape Fold Mountains	mountains formed by tectonic activity in the southwest
4. coastal plain	narrow strip of low-lying land between the oceans and the Great Escarpment

b. Cederberg, Langeberg

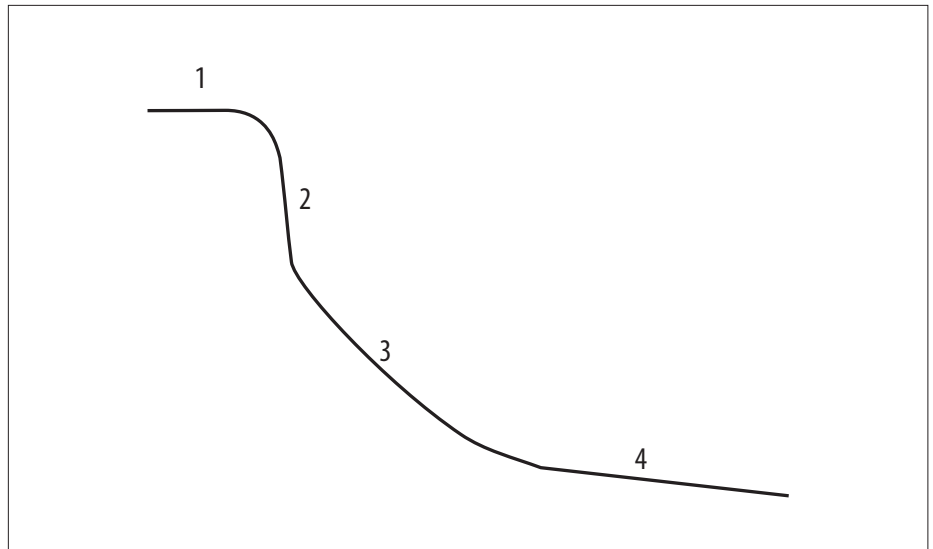
2. 1 = crest; 2 = cliff; 3 = talus slope; 4 = pediment

- 3. a. 90°
- b. 45°

Worksheet 13 on page 300	Worksheet 13 (remedial)
ANSWERS	Geomorphology

- 1. a. A: mesa; B: butte; C: conical hill
- b. horizontal rock strata
- c. alternate layers of hard and soft rock; erosion of the slopes in the gorges of the plateau reduces the plateau which breaks up into a number of tablelands called mesas; slopes of mesas are further eroded due to scarp retreat to form flat topped hills called buttes; the hard resistant layer on top of the butte is eventually eroded away to form a conical hill

d.



- e. *Crest*: convex in shape; area of soil creep
Cliff: almost vertical angle 80° ; usually hard resistant layer; no debris can collect on this slope
Talus: angle of repose 35° ; debris collects on this slope
Pediment: concave in shape; this slope merges with the valley floor
- f. D: cuesta/homoclinal ridge; E: homoclinal ridge
- g. inclined rock strata
- h. When horizontal layers of rock are tilted due to crustal activities such as folding and faulting, the layers are pushed up at an angle due to compressional forces.
- i. F: dip slope; G: scarp slope. A dip slope is a gentle slope and is parallel to the hard resistant rock, whereas the scarp slope is a steeper slope and is perpendicular to the hard resistant rock.
- j. J: laccolith. Formed when magma wells up into the Earth's crust and solidifies. The mushroom-shape is a result of the overlying rock being forced up before solidification.
2. a tor
- Magma welled up beneath the Earth's surface and solidified to form massive batholiths, shown in diagram A.
 - Over millions of years the overlying layers of Earth were eroded away to expose the top of the batholiths, now known as a monolith as shown in diagram B.
 - Over time, the cracks and joints in the monolith create corestones which are rounded, and the landform is called a tor as in diagram C.

Worksheet 14 (remedial)

ANSWERS

Mass movements and human responses

1.

Type of mass movement	Definition
slump	drop of slope material along a spoon-shaped slippage plane
soil fluction/solifluction	slow flow of saturated soil in cold regions
landslide	sudden mass movement; a combination of slump and debris flow
rockfall	free fall of rock
soil creep	very slow movement of individual particles
mudflow	fast flow of fine sand particles and water

2. Any three: ripples in the soil; bent tree trunks; tilted posts; bent fences or walls; pile up of soil behind walls
3. a. The province has a high rainfall – water adds weight to slope material and lubricates it.
The province has hilly slopes that are populated with scattered settlements – the inhabitants risk losing their lives or homes.
- b. a strip almost parallel to the R37
- c. the area west of Thohoyandou

Worksheet 15 (extension)

ANSWERS

Mass movements and human responses

1. mudflows, slumps, landslides, rock falls
2. a. Slope failure is much more likely on a slope made of weak rock than a slope made of strong rock.
- b. Heavy rainfall increases the chance of landslides/mass movements. Water adds weight to the slope material and lubricates it, making it more likely to slide.
- c. Each type of rock or slope material has its angle of repose – its stable profile. If the slope angle is greater than the slope material's angle of repose, the risk of landslides/mass movements is high.
- d. Seismic activity produces earth tremors. Regions with high or frequent seismic activity are more likely to experience landslides/mass movement events.

3. a. Town planners can use the information to prevent development taking place on or below unstable slopes. They can also use the information to introduce regulations and safety measures for building and construction.
- b. Civil engineers build roads and dams. They can use the information to identify the most stable slopes for construction. They can also use the information to work out appropriate methods of slope reinforcement.
4. a. Falling/fallen debris is dangerous for motorists. Fallen debris can block roads.
- b. Construction of roads can oversteepen slopes or partly strip slopes of vegetation which holds soil and regolith in place.

Worksheet 16 on
page 306

Worksheet 16 (remedial)

ANSWERS

Geographical and Information Systems

1. 1. H; 2. G; 3. J; 4. E; 5. F; 6. B; 7. A; 8. D; 9. C; 10. I
2.
 - Get a map of the area surrounding the school.
 - Collect data on the areas from which the learners come.
 - overlay of population density
 - overlay of transport routes
 - overlay of areas from which the school population comes from

Worksheet 17 on
page 308

Worksheet 17 (remedial)

ANSWERS

Development geography

1. a. *development*: a process of growing gradually, to become mature, advanced or organised
- b. *economically developed*: progress in an economy, or the qualitative measure of this; the adoption of new technologies, transition from agriculture-based to industrial-based economy and general improvement in living standards
- c. *developing countries*: nations with a low level of material well-being
- d. *sustainable development*: a pattern of resource-use that aims to meet human basic needs while preserving the environment so that these needs can be met not only in the present but also for generations to come
2. a. More developed countries usually have a well-developed infrastructure, while less developed countries often have a poorly developed infrastructure.
- b. More developed countries usually have a low death rate, while less developed countries usually have a high death rate.

- c. More developed countries have a high rate of literacy, while less developed countries have a low rate of literacy.
3. For example: availability of resources – water, minerals; accessibility to medical care and education; food security; infrastructure; wars
 4. *The traditional society*: little access to modern science, reliant on subsistence agriculture and traditional systems of management, which usually do not cope with population growth.
The pre-conditions for take-off: countries begin to shift at a high political level; importance is placed on modernisation of the economy – the stimulus to change does not come from within a country but rather is external. It comes from outside interests and countries invading and destroying traditional society.
Take-off: rapid economic growth, with new techniques in agriculture and industry.
The drive to maturity: the economy of the country has developed to an extent that it can produce anything it chooses because it has the necessary technological and human capacity.
The age of high mass consumption: the economies of most advanced countries where production is focused on the tertiary sector.
 5. The core economic regions of South Africa reflect stages 4 and 5 of Rostow's Model, while some rural areas in South Africa are still experiencing stages 1 and 2.
 6. a. They decided to invest in centres identified as growth points and growth poles and planned to support development along certain development axes. They planned to develop poorer areas.
 b. This contradicted the objectives of apartheid which focused on separate and limited development for black people.
 7. *Basic Needs Approach*: all people have the right to basic needs such as shelter, water, sanitation and education.
Reconstruction and Development Programme: implemented in 1994 to address the problems of inequality and poverty in almost all aspects of life and society in South Africa. It followed the basic needs philosophy and focused on job creation, land reform, shelter and housing, clean drinking water, telecommunication, eradication of malnutrition and hunger, and improved health care.
 8. The GDI uses three measures to evaluate gender inequalities between men and women – life expectancy, education and income.
 9. Examples: in some parts of the world girls are not given equal access to education or girls are married at a young age; many women lack access to primary health care for childbirth and pregnancy; gender discrimination in food distribution leads to malnutrition among many women; in many countries, women cannot secure access to land; sometimes women are not consulted even in the lowest level of decision-making; most heads of state are male
 10. Example: Yes. In many rural areas in South Africa, women have to stay home and look after the children and are subservient because of traditions and customs; while there has been a significant change in terms of more females in the workforce, women still make up the majority of the lowest paid workers. There are more male than female CEOs.

2. Globalisation is a system of interaction among countries of the world in order to develop the global economy. It refers to the integration of economics and societies all over the world. It involves, technological, political, economic and cultural changes made possible largely by advances in communication, transportation and infrastructure development.
3. The advantages and disadvantages of globalisation.
4. The anti-globalisation movement bases its criticism on a number of related ideas:
 - They are opposed to large multinational corporations having unregulated political power through trade agreements and unregulated financial markets.
 - They accuse corporations of seeking maximum profit at the expense of work safety conditions and standard, labour hiring and environmental and conservation principles.
 - They call for forms of global integration that better provide for democratic representation, human rights, fair trade and sustainable development.
 - They believe that globalisation is characterised by a 'ruling elite' who seek to harness the expansion of world markets for their own interests.
 - They believe that corporations exercise privileges that human citizens cannot, such as moving freely across borders, extracting desired natural resources and utilising a diversity of human resources.
 - Rich countries with legal obligations to reduce greenhouse gas emissions have incentives to outsource their production to developing nations.
 - Many industrial and financial corporations become larger entities than the developing countries with which they are involved.
 - Whilst booming corporations become rich, global poverty remains and even grows.
 - India has had success as a participant in the globalised economy, yet it still has over a third of the world's poverty.
 - Whereas Internet technology has revolutionised our capacity for knowledge and interaction, large numbers of people in South Asia and Africa have no electricity, let alone computers.
 - Whereas the global supply chain of our supermarket culture deliver exotic year-round affordable foods, over 900 million people in the developing world experience hunger.
 - Those who describe our world as a global village in which we can understand and support each other in our increasingly common lifestyles, overlook the exclusion of many countries from the opportunities of globalisation.

Source: adapted from: uk.oneworld.net/guides/globalization

Worksheet 19 (remedial)

ANSWERS

Resources and sustainability

- natural resources*: these are physical resources, e.g. water, minerals
 - human resources*: education or any human skill, e.g. teaching
 - renewable resources*: resources that can be replenished or renewed by natural processes
 - non-renewable resources*: can only be used once; they need a geological period to develop
- water, soil, vegetation, animals and fish
- uneven distribution and poor quality of natural resources; soils are not fertile enough to support communities; droughts and floods impact on land quality; resource mismanagement; ownership of land is an issue in Africa.
- diamonds, gold, platinum and copper
- income from minerals contributes to the GDP; the development of link industries contributes to the local community; the development of infrastructure improves, e.g. roads and railways; provides employment; major export market for African countries which brings in foreign trade and investment
- A large number of minerals are exported in unprocessed form. So African countries need to look at developing their manufacturing industries so that the processing of these minerals makes them more valuable. This will also provide more jobs and skills. Many countries in Africa experience political conflict, corruption and instability, which have an adverse effect on mining. Countries should try to resolve these conflicts.
- resource conservation*: this is the sustained and responsible use of resources.
 - resource preservation*: this is the protection of a natural area from all use
- These are parks that span across international boundaries and allow the natural migration of wildlife to take place.
- There is conflict between authorities and people who may have claim to the land but were forced off due to apartheid. Poor communities in the area often have no choice but to use the natural resources in the park, e.g. firewood. This results in conflict between conservationists and hunters.
- Everything in nature is related: a change in one thing will affect another. As populations increase, so the impact on our resources increases. Everybody does not have the same cultural, ethical and moral view on management of resources.

Worksheet 20 (extension)

ANSWERS

Energy and sustainable development

- The use of fossil fuels such as coal and oil as the most important sources of global energy, has a huge impact on global environments. The burning of fossil fuels results in greater levels of CO₂, sulphur dioxide, nitrous oxide and methane in the atmosphere. Higher levels of these gases results in greater absorption of terrestrial radiation and therefore the Earth's atmosphere becomes warmer. World temperatures have risen by 0,5% since the middle of the last century.

The results of global warming are that the polar ice caps start to melt, sea levels and sea temperatures will rise which will affect marine life and the intensity and frequency of Tropical cyclones. Pollution from the burning of fossil fuels also causes acid rain, as water vapour condenses on hygroscopic nuclei (pollution in the atmosphere) which will increase the acidity in water masses, groundwater, death of trees and vegetation, and respiratory problems in humans.

The only way to curb these greenhouse gas emissions and climate change is to reduce the burning of fossil fuels and to find alternate sources of energy.

3. The Kyoto Protocol in 1997 required all signatories to reduce their greenhouse gas emissions and in this way reduce global warming. Countries were also committed to using energy more efficiently and investigating the use of renewable sources of energy. The Protocol requires countries to reduce their greenhouse gas emissions according to specific targets. The targets have to be met between 2008 and 2012. Developed countries have larger targets as they have historically contributed more to the greenhouse gas emissions and are more able to pay the costs involved in cutting emissions. Developed countries need to cut their emissions by 5% by 2012, while developing countries had no specific target. However, despite many countries signing the Protocol, many have not created legislation to control emissions.
4.
 - *hydro-electricity*: dependent on the supply of fast-flowing water, which is stored in a dam; the costs are high; once structures are in place there is a continued source of renewable energy; hydro-electricity now supplies 20% of the world's energy; hydro-electricity is clean energy
 - *solar energy*: solar energy from the Sun is harnessed by solar panels to generate electricity
 - *wind energy*: wind generators called turbines can be up to 50 m tall with wind blades of 30 m in length; while wind is free, the cost of construction is high

4. LESSON PLAN TEMPLATE

Topic of lesson:	
Time	
Curriculum and Assessment Policy Statement (CAPS) content	
Resources	
THE LESSON	
Introduction	
Main part of lesson	
Conclusion	
Informal assessment	

© You may photocopy this page for use with *Study & Master Geography Grade 11*.

5. DOCUMENTS

This section can be used to file the Curriculum and Assessment Policy Statement (CAPS) for Geography (Grades 10–12) and any other documents supplied by the Department of Basic Education.





Study & Master

Geography

Study & Master Geography Grade 11 has been especially developed by an experienced author team for the Curriculum and Assessment Policy Statement (CAPS). This new and easy-to-use course helps learners to master essential content and skills in Geography.

The comprehensive Learner's Book:

- includes hundreds of good-quality maps, photographs and diagrams in full-colour
- offers current and relevant content
- explains key concepts and geographical terms in accessible language
- includes over 150 activities that develop learners' skills and understanding
- provides for frequent consolidation in its Review and Exam Preparation sections.

The innovative Teacher's Guide includes:

- guidance on teaching each lesson of the year and on assessment
- answers to all activities in the Learner's Book
- photocopiable tests and examinations
- extra assessment tasks
- photocopiable consolidation, extension and revision activities.



PROUD PARTNERS



CAMBRIDGE
UNIVERSITY PRESS

www.cup.co.za

ISBN 978-1-107-68408-9



9 781107 684089